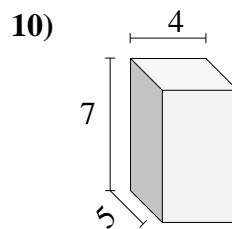
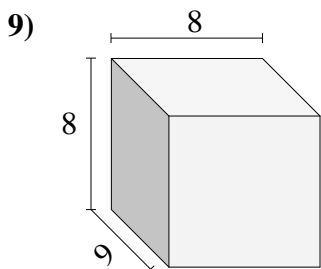
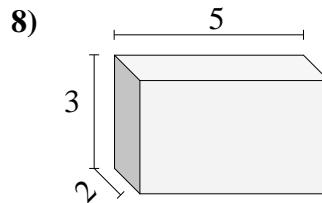
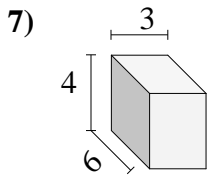
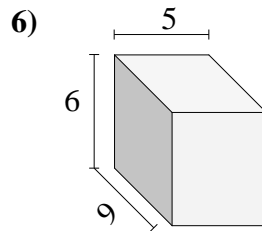
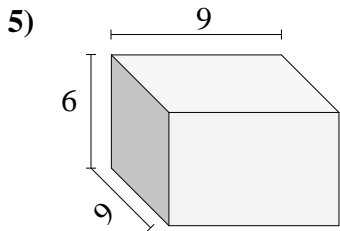
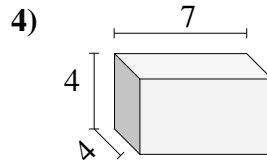
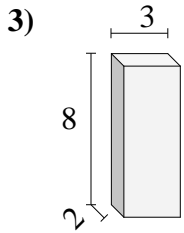
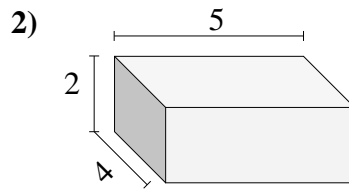
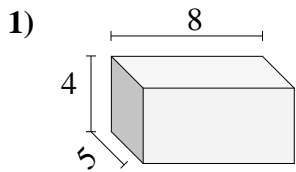




Encuentra el volumen de cada prisma rectangular. Mide en cm (no estan en escala).

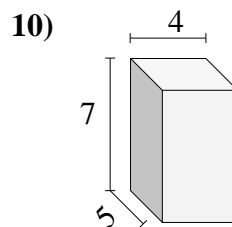
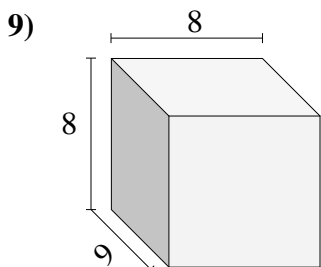
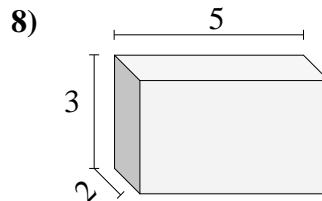
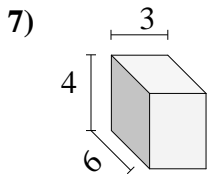
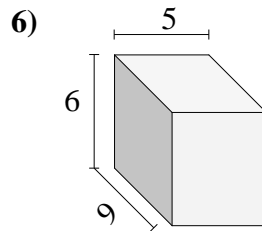
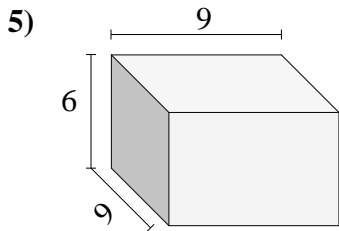
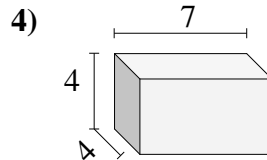
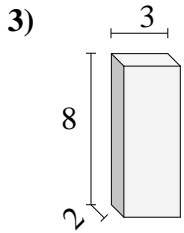
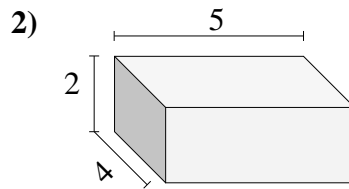
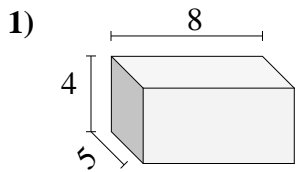


Respuestas

- 1. _____
- 2. _____
- 3. _____
- 4. _____
- 5. _____
- 6. _____
- 7. _____
- 8. _____
- 9. _____
- 10. _____



Encuentra el volumen de cada prisma rectangular. Mide en cm (no estan en escala).



Respuestas

- 1. 160
- 2. 40
- 3. 48
- 4. 112
- 5. 486
- 6. 270
- 7. 72
- 8. 30
- 9. 576
- 10. 140