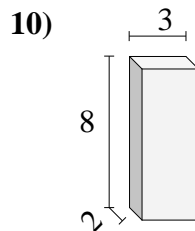
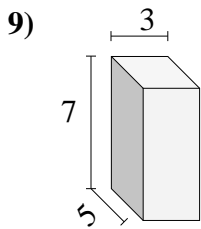
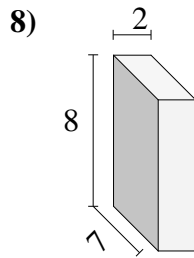
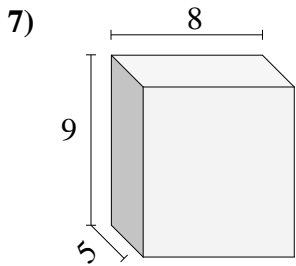
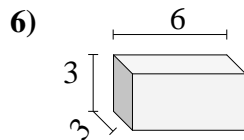
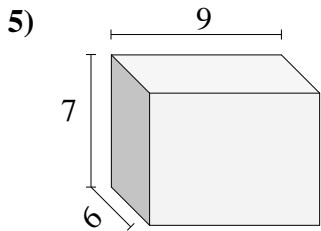
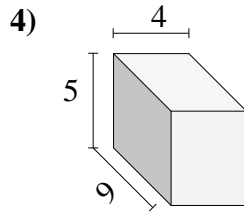
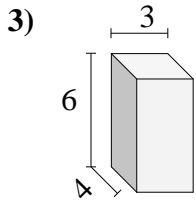
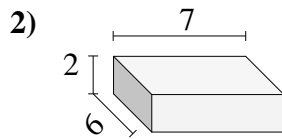
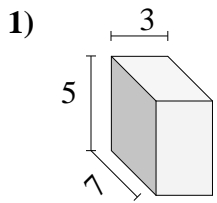




Encuentra el volumen de cada prisma rectangular. Mide en cm (no estan en escala).

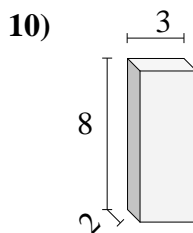
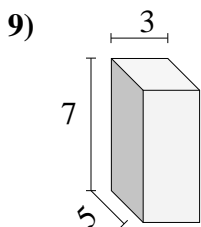
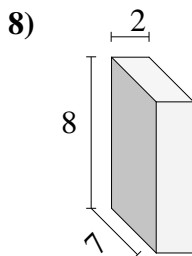
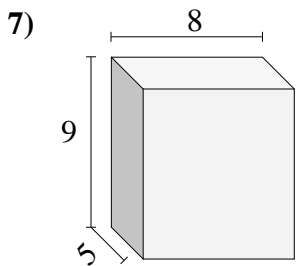
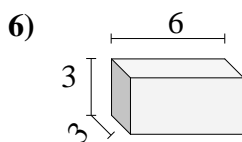
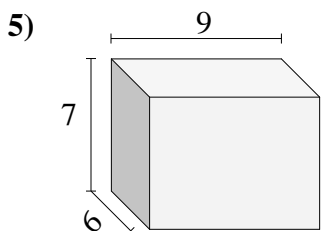
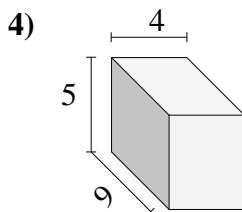
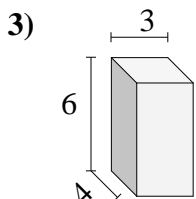
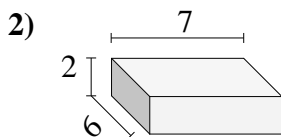
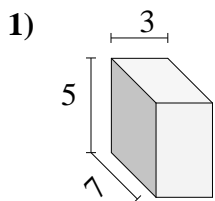


Respuestas

- 1. _____
- 2. _____
- 3. _____
- 4. _____
- 5. _____
- 6. _____
- 7. _____
- 8. _____
- 9. _____
- 10. _____



Encuentra el volumen de cada prisma rectangular. Mide en cm (no estan en escala).



Respuestas

- 1. 105
- 2. 84
- 3. 72
- 4. 180
- 5. 378
- 6. 54
- 7. 360
- 8. 112
- 9. 105
- 10. 48