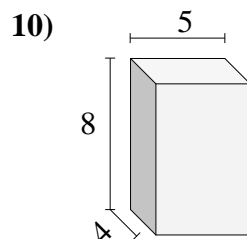
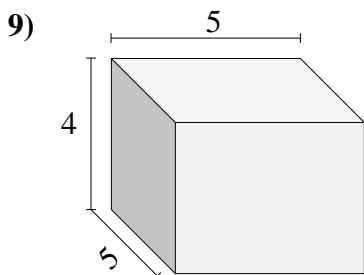
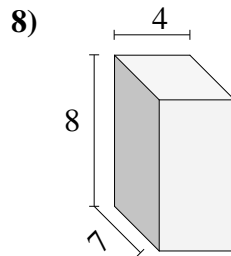
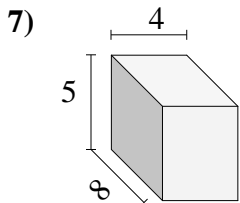
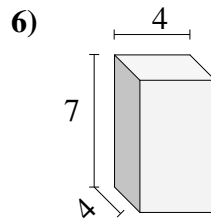
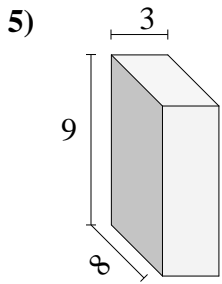
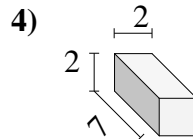
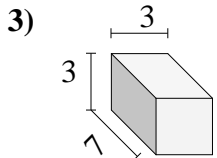
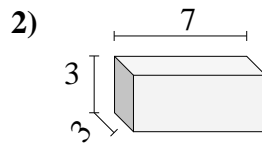
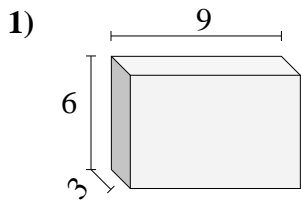




Encuentra el volumen de cada prisma rectangular. Mide en cm (no estan en escala).

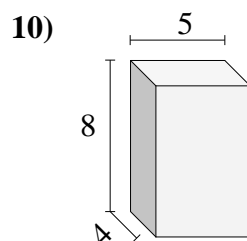
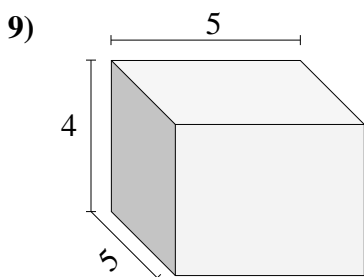
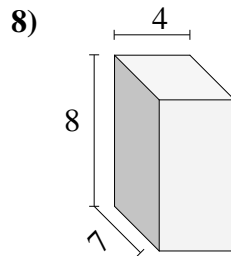
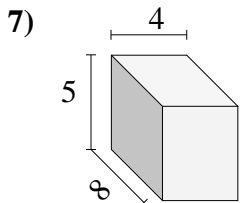
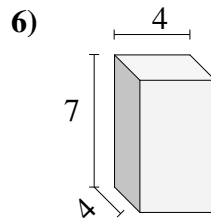
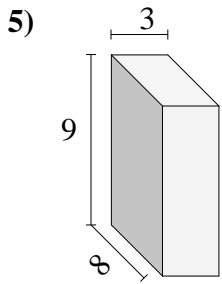
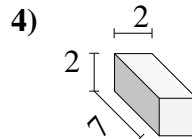
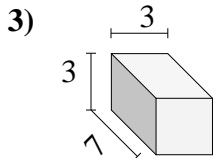
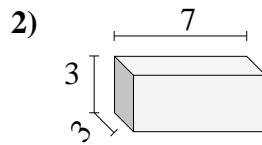
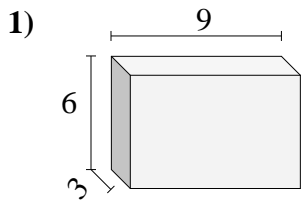


Respuestas

- 1. _____
- 2. _____
- 3. _____
- 4. _____
- 5. _____
- 6. _____
- 7. _____
- 8. _____
- 9. _____
- 10. _____

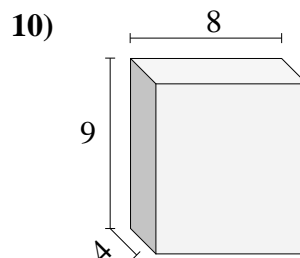
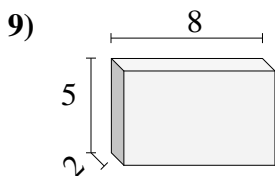
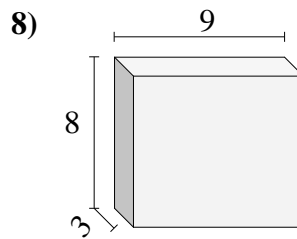
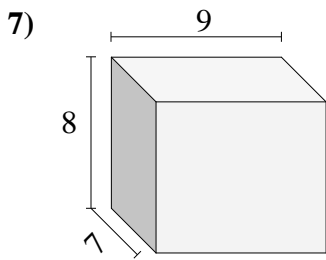
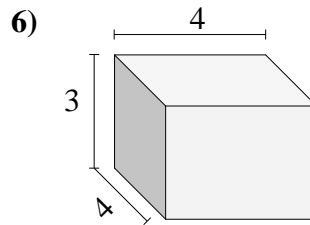
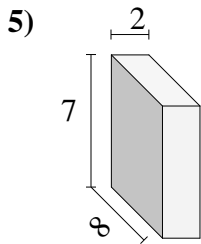
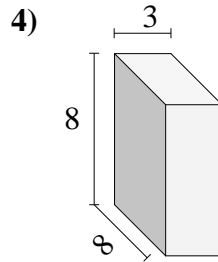
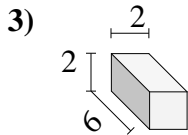
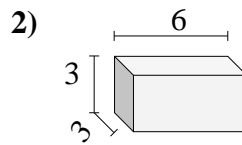
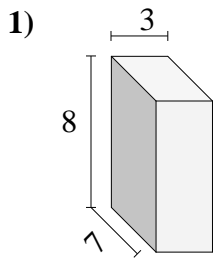


Encuentra el volumen de cada prisma rectangular. Mide en cm (no estan en escala).

**Respuestas**1. **162**2. **63**3. **63**4. **28**5. **216**6. **112**7. **160**8. **224**9. **100**10. **160**



Encuentra el volumen de cada prisma rectangular. Mide en cm (no estan en escala).

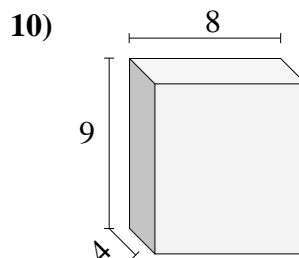
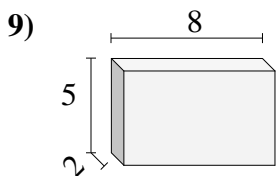
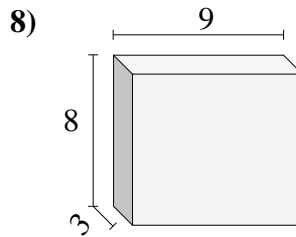
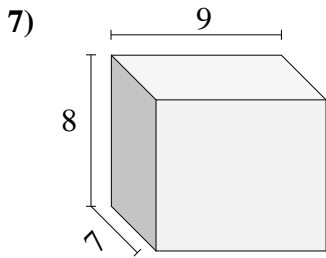
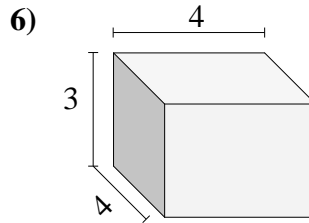
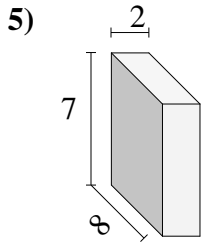
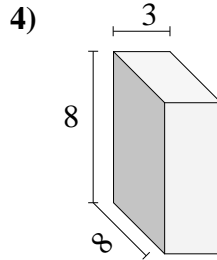
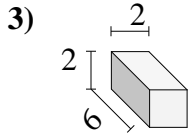
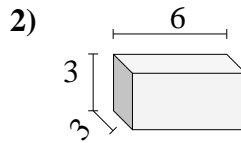
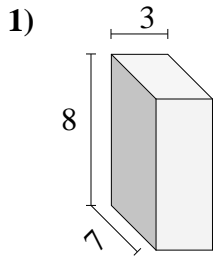


Respuestas

- 1. _____
- 2. _____
- 3. _____
- 4. _____
- 5. _____
- 6. _____
- 7. _____
- 8. _____
- 9. _____
- 10. _____



Encuentra el volumen de cada prisma rectangular. Mide en cm (no estan en escala).

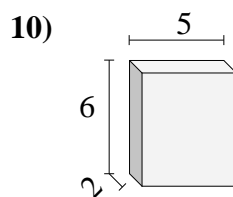
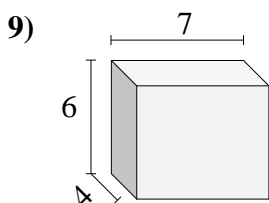
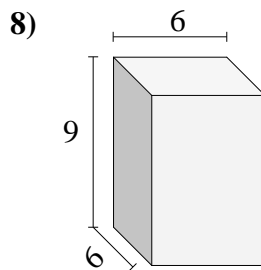
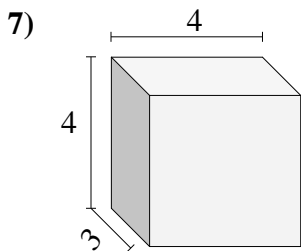
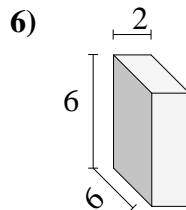
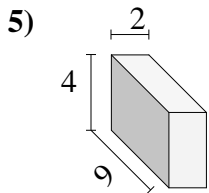
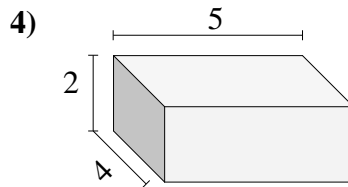
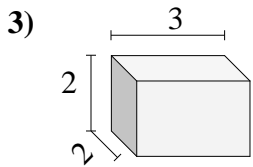
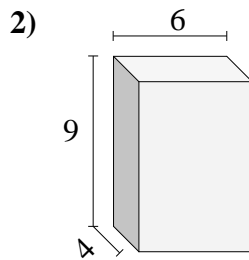
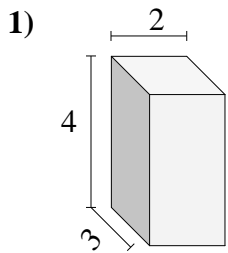


Respuestas

- 1. 168
- 2. 54
- 3. 24
- 4. 192
- 5. 112
- 6. 48
- 7. 504
- 8. 216
- 9. 80
- 10. 288



Encuentra el volumen de cada prisma rectangular. Mide en cm (no estan en escala).

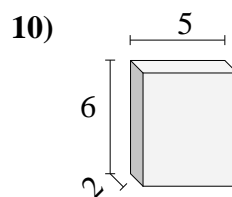
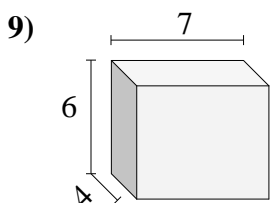
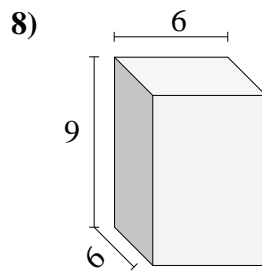
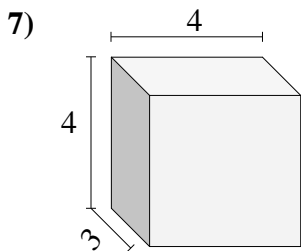
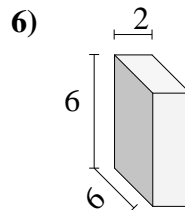
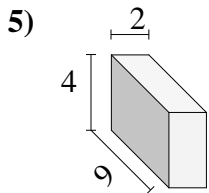
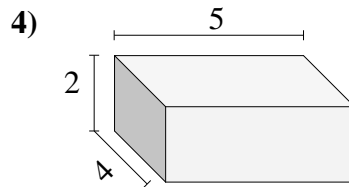
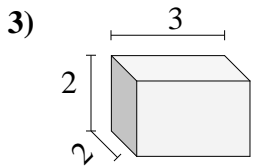
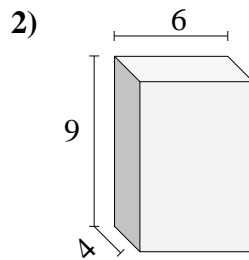
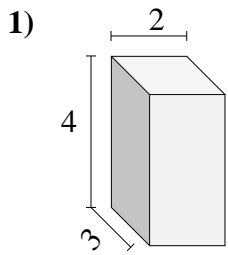


Respuestas

- 1. _____
- 2. _____
- 3. _____
- 4. _____
- 5. _____
- 6. _____
- 7. _____
- 8. _____
- 9. _____
- 10. _____

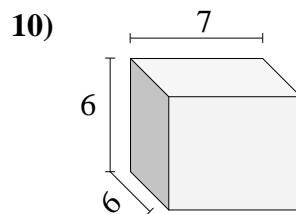
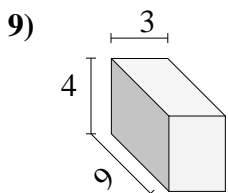
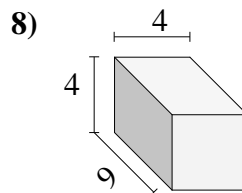
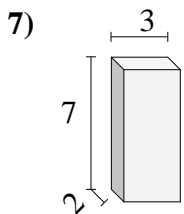
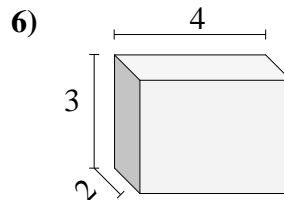
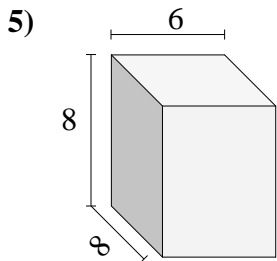
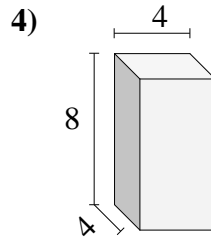
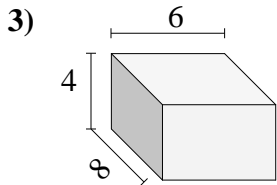
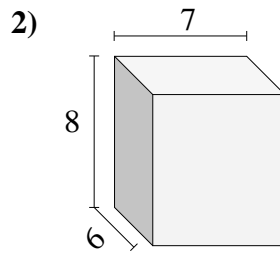
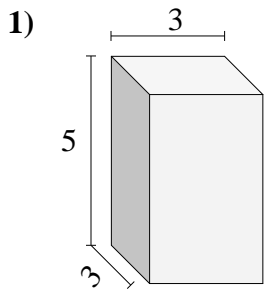


Encuentra el volumen de cada prisma rectangular. Mide en cm (no estan en escala).

**Respuestas**1. **24**2. **216**3. **12**4. **40**5. **72**6. **72**7. **48**8. **324**9. **168**10. **60**



Encuentra el volumen de cada prisma rectangular. Mide en cm (no estan en escala).

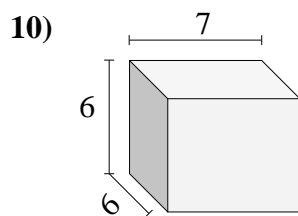
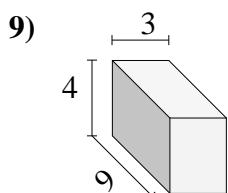
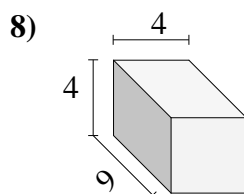
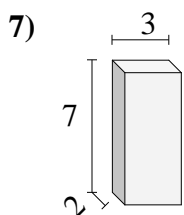
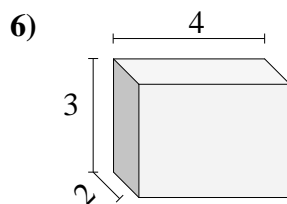
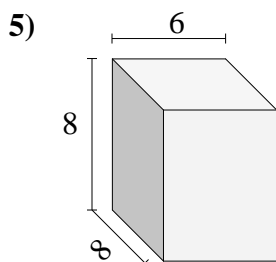
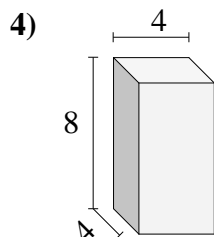
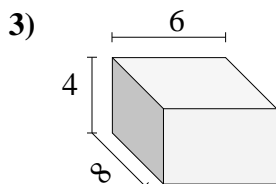
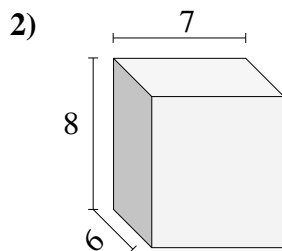
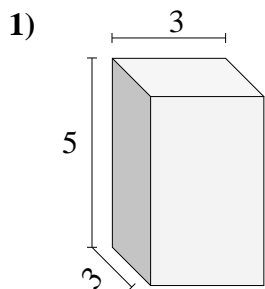


Respuestas

- 1. _____
- 2. _____
- 3. _____
- 4. _____
- 5. _____
- 6. _____
- 7. _____
- 8. _____
- 9. _____
- 10. _____

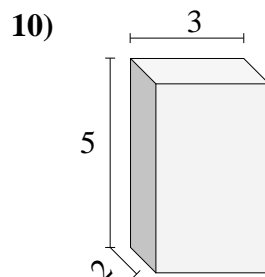
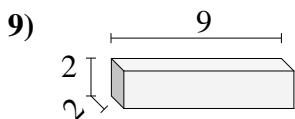
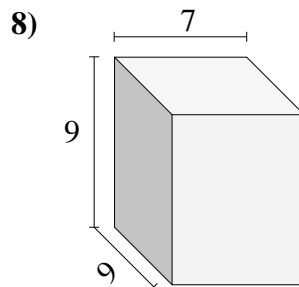
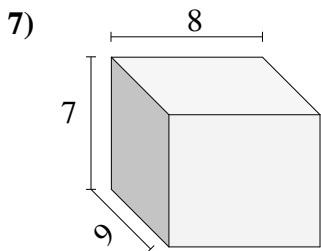
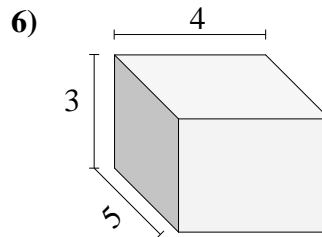
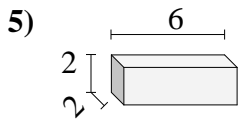
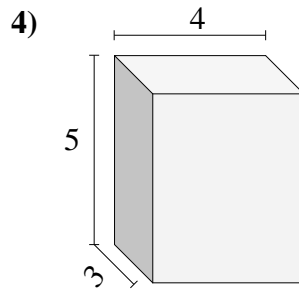
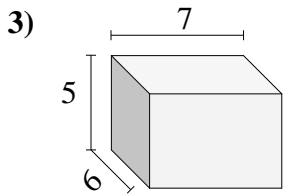
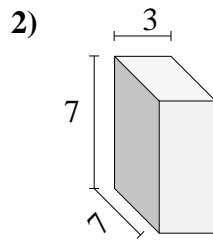
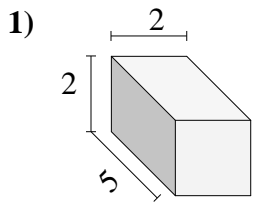


Encuentra el volumen de cada prisma rectangular. Mide en cm (no estan en escala).

**Respuestas**1. 452. 3363. 1924. 1285. 3846. 247. 428. 1449. 10810. 252



Encuentra el volumen de cada prisma rectangular. Mide en cm (no estan en escala).

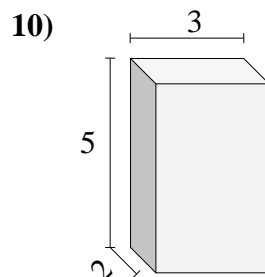
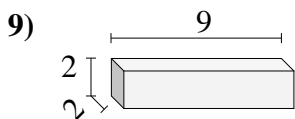
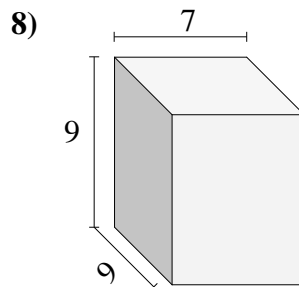
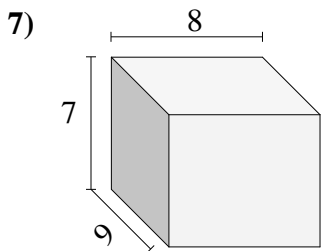
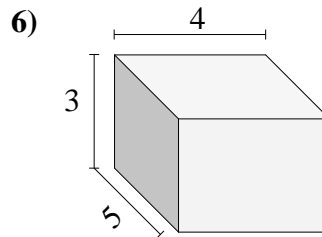
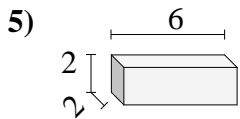
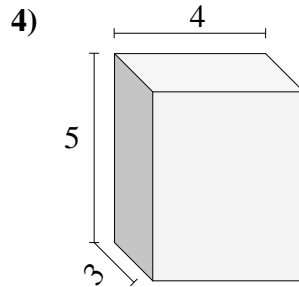
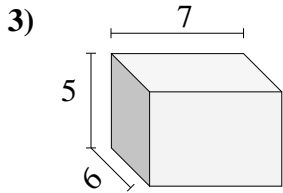
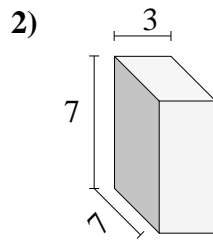
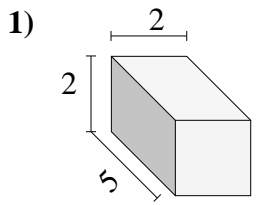


Respuestas

- 1. _____
- 2. _____
- 3. _____
- 4. _____
- 5. _____
- 6. _____
- 7. _____
- 8. _____
- 9. _____
- 10. _____



Encuentra el volumen de cada prisma rectangular. Mide en cm (no estan en escala).

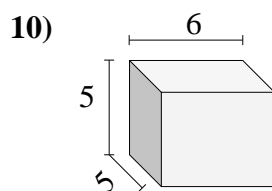
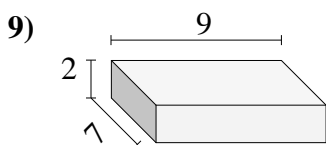
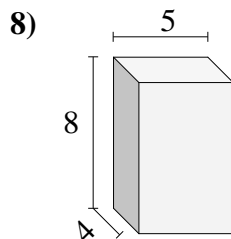
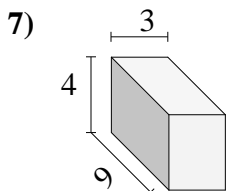
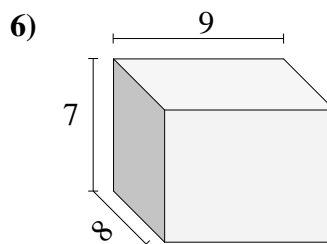
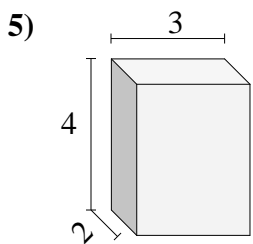
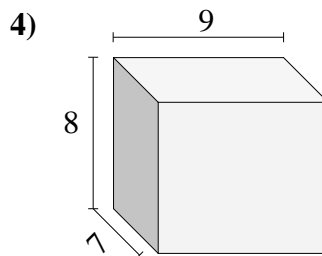
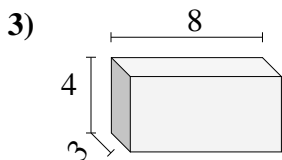
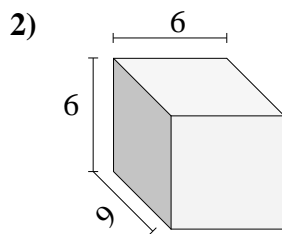
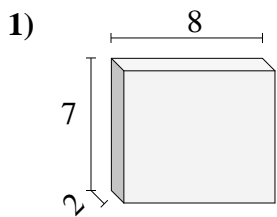


Respuestas

- 1. 20
- 2. 147
- 3. 210
- 4. 60
- 5. 24
- 6. 60
- 7. 504
- 8. 567
- 9. 36
- 10. 30



Encuentra el volumen de cada prisma rectangular. Mide en cm (no estan en escala).

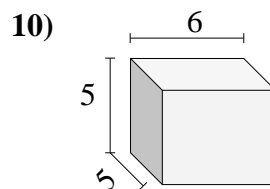
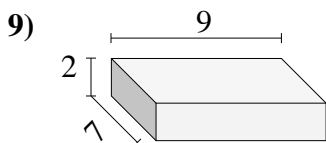
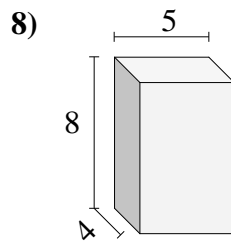
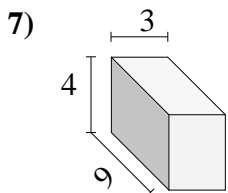
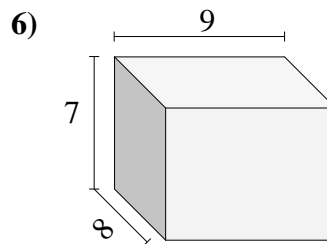
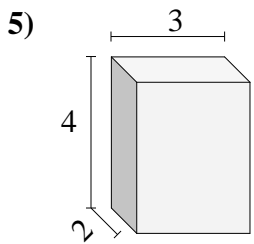
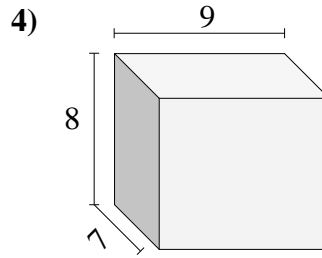
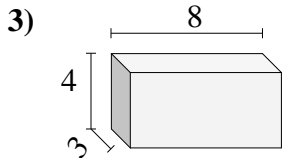
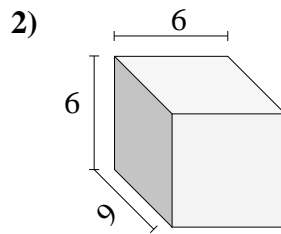
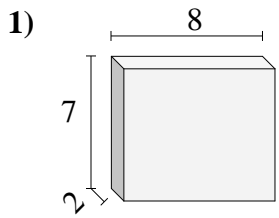


Respuestas

- 1. _____
- 2. _____
- 3. _____
- 4. _____
- 5. _____
- 6. _____
- 7. _____
- 8. _____
- 9. _____
- 10. _____



Encuentra el volumen de cada prisma rectangular. Mide en cm (no estan en escala).

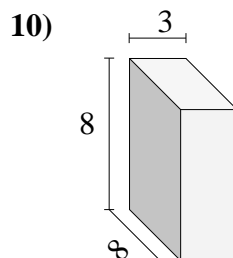
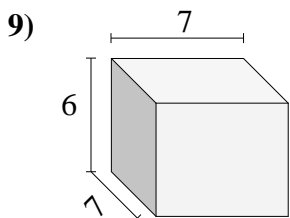
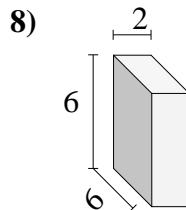
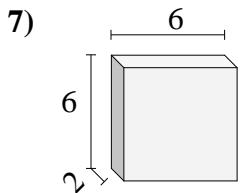
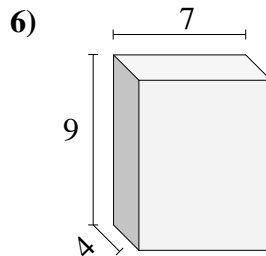
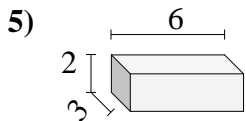
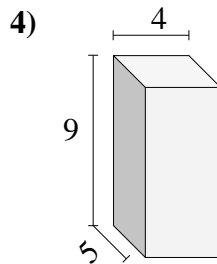
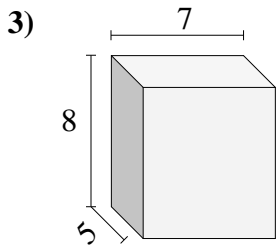
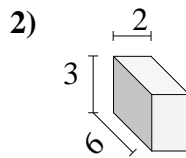
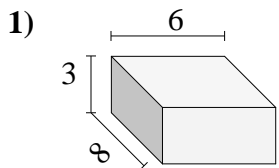


Respuestas

1. 112
2. 324
3. 96
4. 504
5. 24
6. 504
7. 108
8. 160
9. 126
10. 150



Encuentra el volumen de cada prisma rectangular. Mide en cm (no estan en escala).

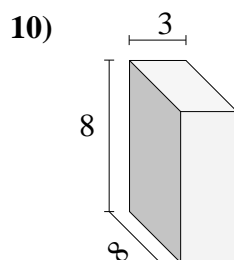
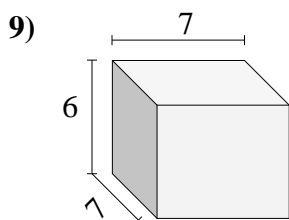
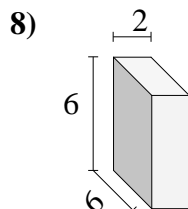
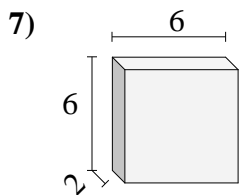
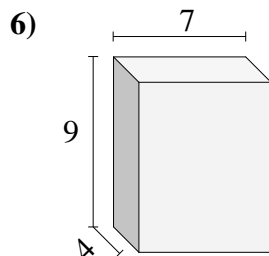
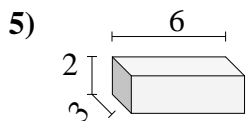
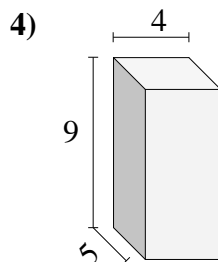
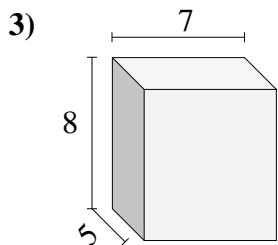
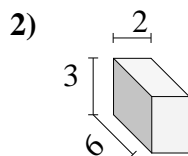
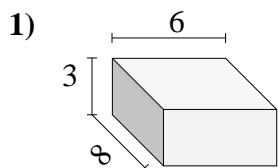


Respuestas

- 1. _____
- 2. _____
- 3. _____
- 4. _____
- 5. _____
- 6. _____
- 7. _____
- 8. _____
- 9. _____
- 10. _____

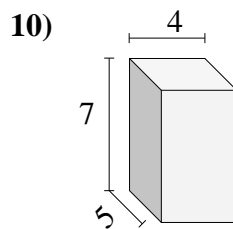
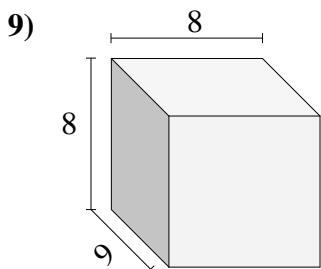
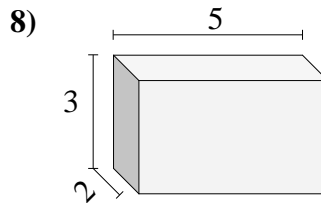
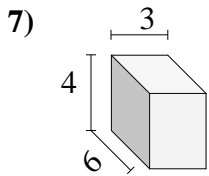
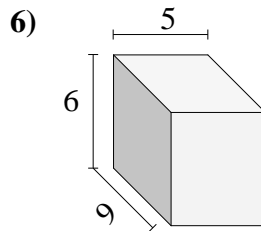
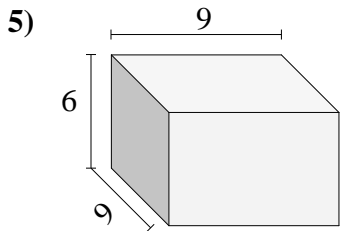
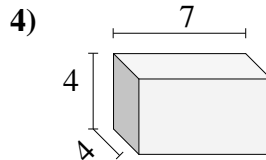
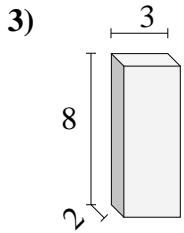
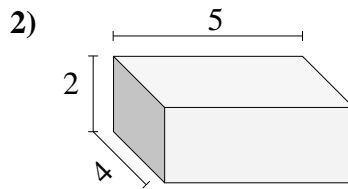
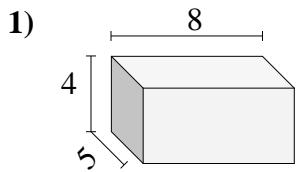


Encuentra el volumen de cada prisma rectangular. Mide en cm (no estan en escala).

**Respuestas**1. 1442. 363. 2804. 1805. 366. 2527. 728. 729. 29410. 192



Encuentra el volumen de cada prisma rectangular. Mide en cm (no estan en escala).

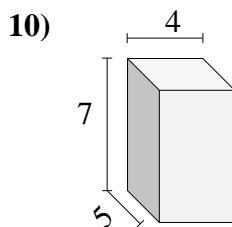
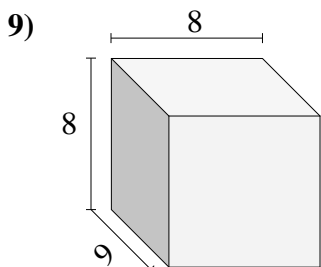
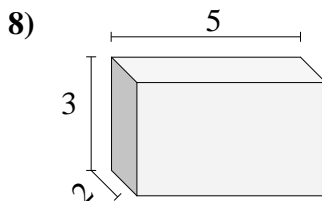
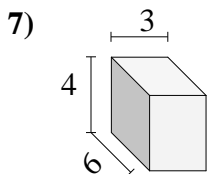
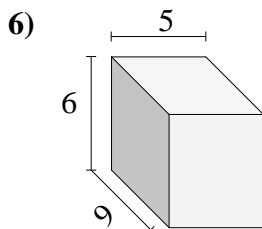
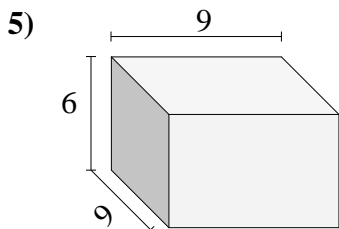
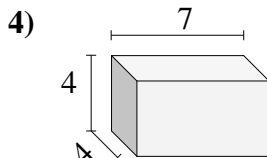
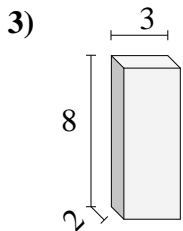
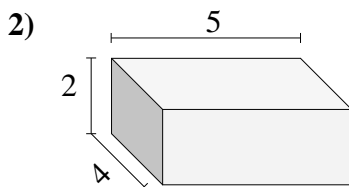
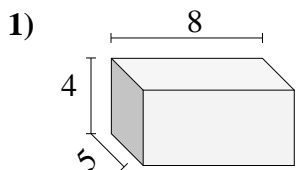


Respuestas

- 1. _____
- 2. _____
- 3. _____
- 4. _____
- 5. _____
- 6. _____
- 7. _____
- 8. _____
- 9. _____
- 10. _____



Encuentra el volumen de cada prisma rectangular. Mide en cm (no estan en escala).

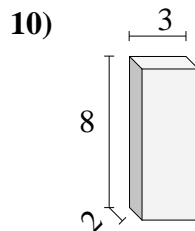
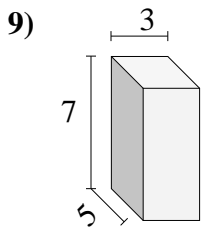
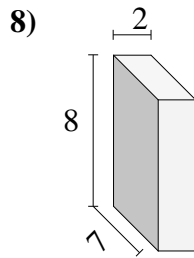
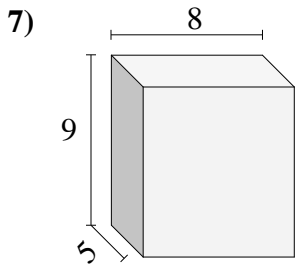
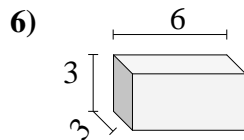
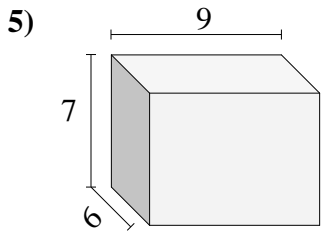
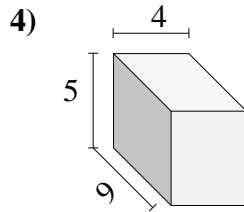
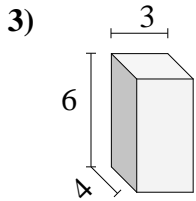
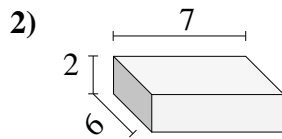
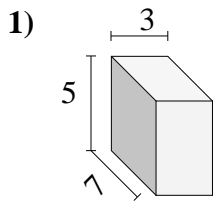


Respuestas

- 1. 160
- 2. 40
- 3. 48
- 4. 112
- 5. 486
- 6. 270
- 7. 72
- 8. 30
- 9. 576
- 10. 140



Encuentra el volumen de cada prisma rectangular. Mide en cm (no estan en escala).

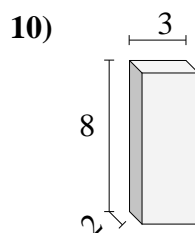
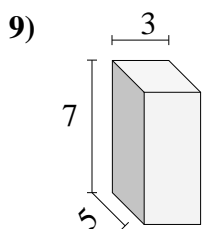
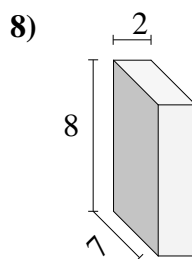
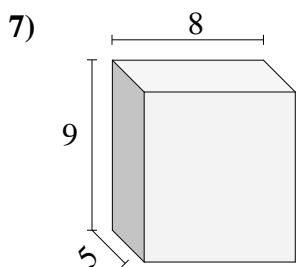
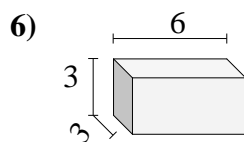
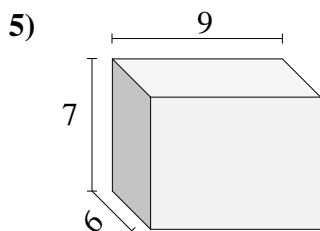
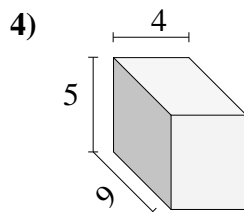
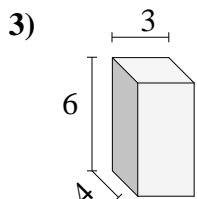
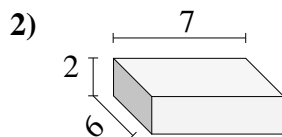
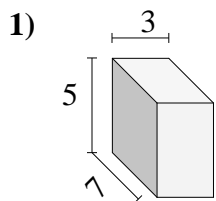


Respuestas

- 1. _____
- 2. _____
- 3. _____
- 4. _____
- 5. _____
- 6. _____
- 7. _____
- 8. _____
- 9. _____
- 10. _____

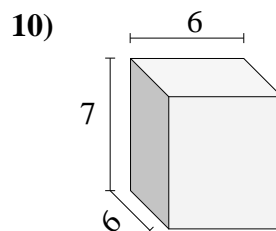
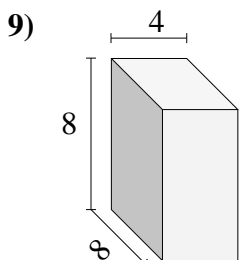
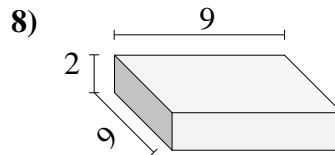
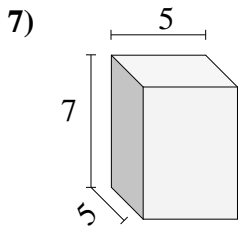
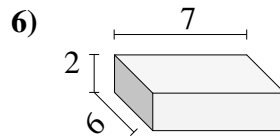
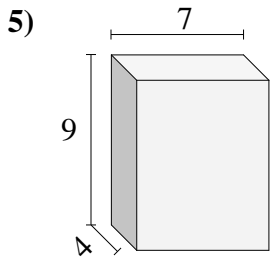
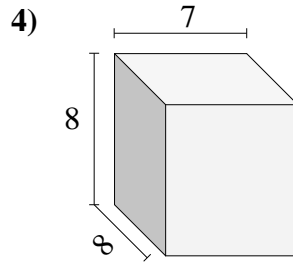
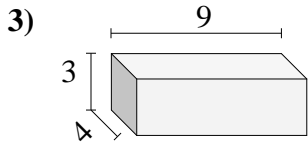
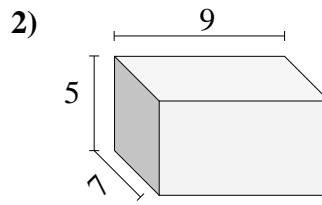
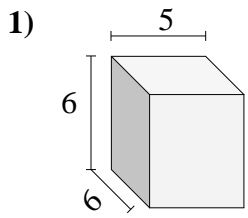


Encuentra el volumen de cada prisma rectangular. Mide en cm (no estan en escala).

**Respuestas**1. **105**2. **84**3. **72**4. **180**5. **378**6. **54**7. **360**8. **112**9. **105**10. **48**



Encuentra el volumen de cada prisma rectangular. Mide en cm (no estan en escala).

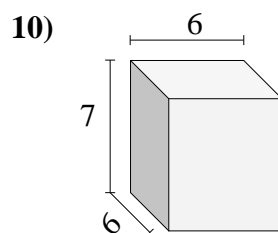
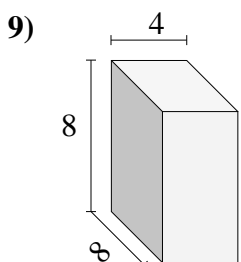
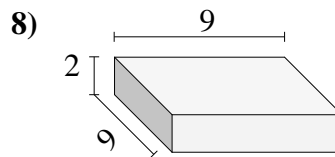
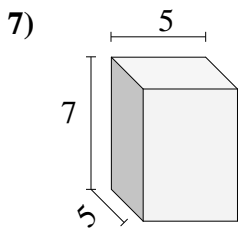
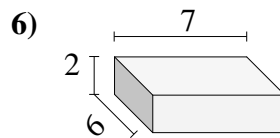
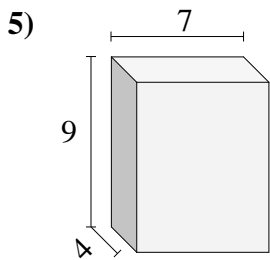
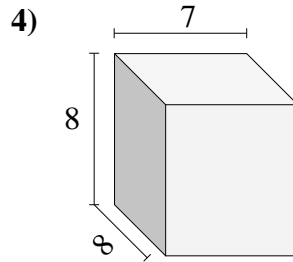
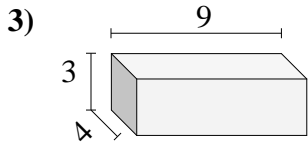
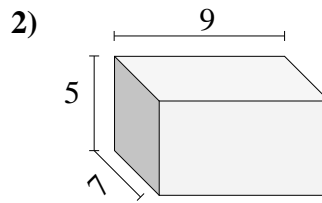
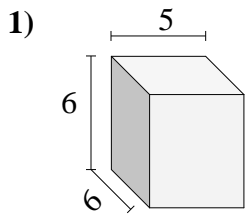


Respuestas

- 1. _____
- 2. _____
- 3. _____
- 4. _____
- 5. _____
- 6. _____
- 7. _____
- 8. _____
- 9. _____
- 10. _____



Encuentra el volumen de cada prisma rectangular. Mide en cm (no estan en escala).

**Respuestas**1. **180**2. **315**3. **108**4. **448**5. **252**6. **84**7. **175**8. **162**9. **256**10. **252**