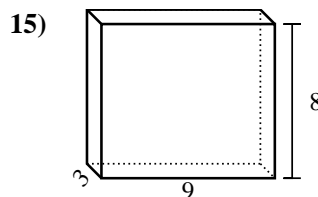
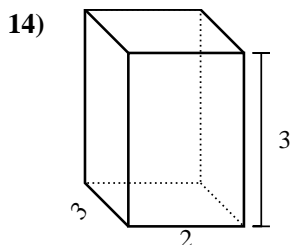
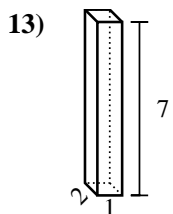
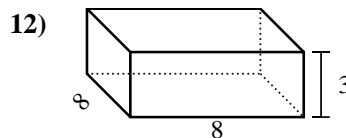
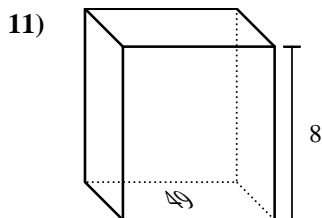
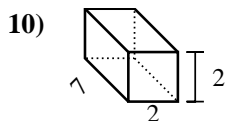
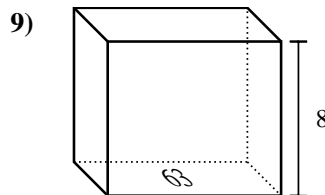
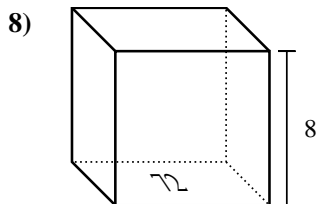
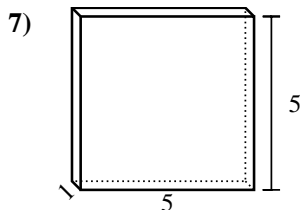
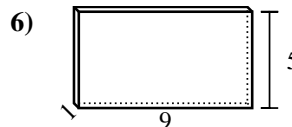
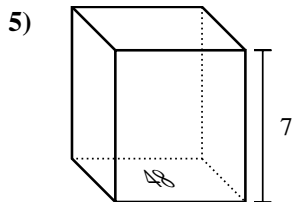
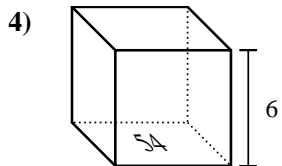
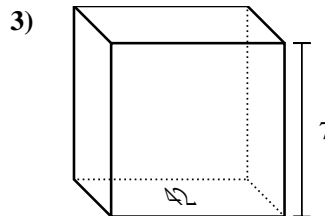
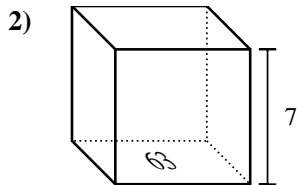
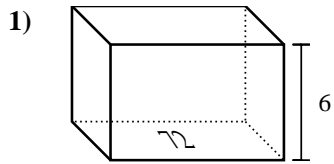




Encontrar el volumen de cada prisma rectangular. Recuerda  $V = \text{Base} \times \text{Altura}$  y  $V = \text{Largo} \times \text{ancho} \times \text{alto}$ .

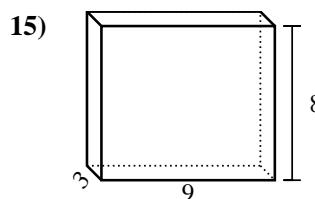
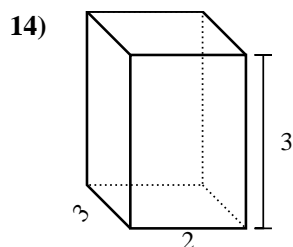
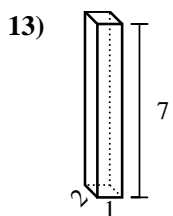
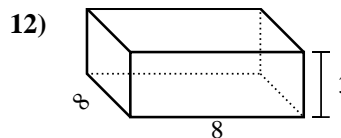
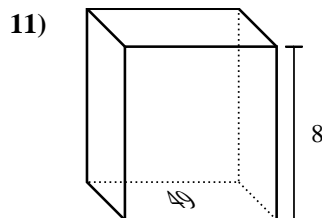
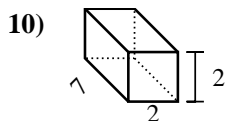
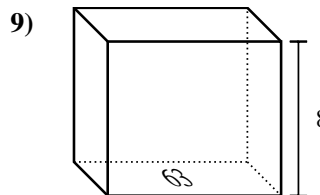
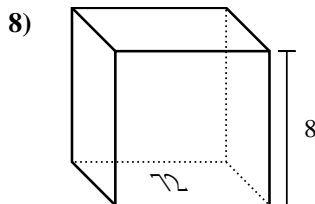
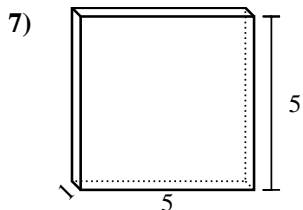
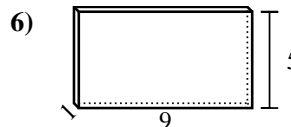
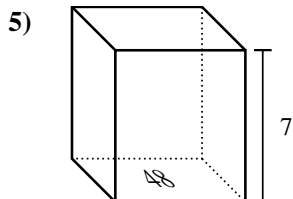
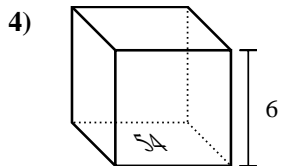
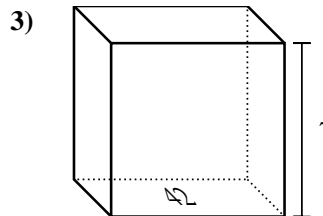
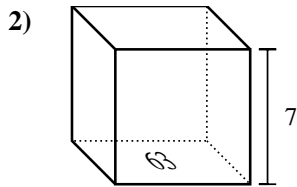
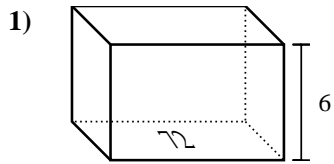
**Respuestas**



1. \_\_\_\_\_
2. \_\_\_\_\_
3. \_\_\_\_\_
4. \_\_\_\_\_
5. \_\_\_\_\_
6. \_\_\_\_\_
7. \_\_\_\_\_
8. \_\_\_\_\_
9. \_\_\_\_\_
10. \_\_\_\_\_
11. \_\_\_\_\_
12. \_\_\_\_\_
13. \_\_\_\_\_
14. \_\_\_\_\_
15. \_\_\_\_\_



Encontrar el volumen de cada prisma rectangular. Recuerda  $V = \text{Base} \times \text{Altura}$  y  $V = \text{Largo} \times \text{ancho} \times \text{alto}$ .



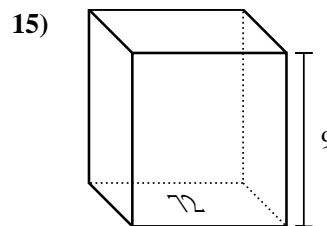
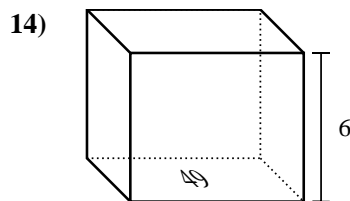
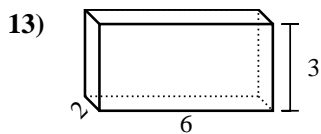
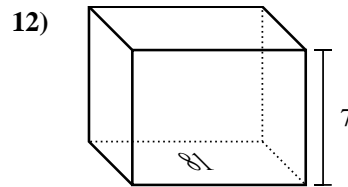
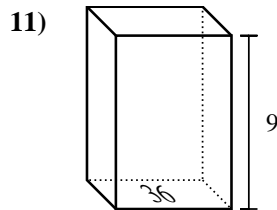
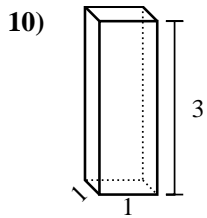
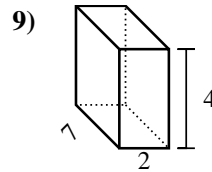
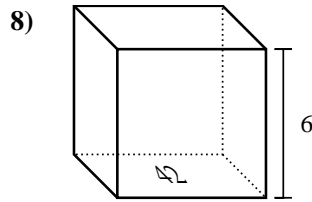
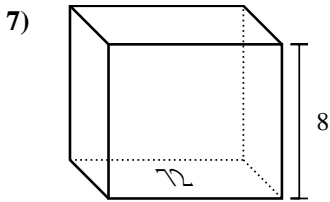
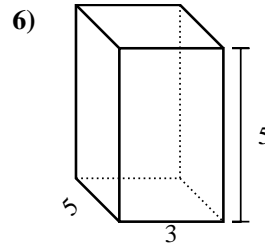
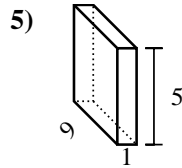
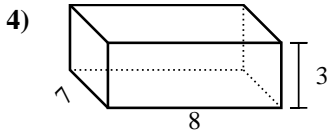
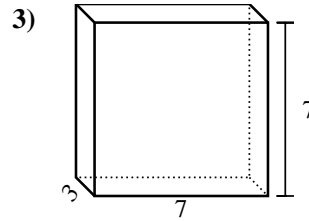
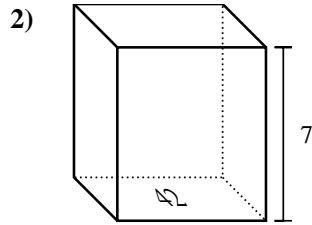
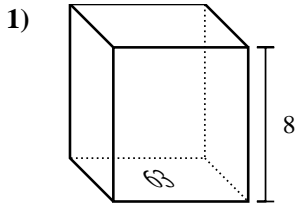
**Respuestas**

1. 432 cm<sup>3</sup>
2. 441 cm<sup>3</sup>
3. 294 cm<sup>3</sup>
4. 324 cm<sup>3</sup>
5. 336 cm<sup>3</sup>
6. 45 cm<sup>3</sup>
7. 25 cm<sup>3</sup>
8. 576 cm<sup>3</sup>
9. 504 cm<sup>3</sup>
10. 28 cm<sup>3</sup>
11. 392 cm<sup>3</sup>
12. 192 cm<sup>3</sup>
13. 14 cm<sup>3</sup>
14. 18 cm<sup>3</sup>
15. 216 cm<sup>3</sup>



Encontrar el volumen de cada prisma rectangular. Recuerda  $V = \text{Base} \times \text{Altura}$  y  $V = \text{Largo} \times \text{ancho} \times \text{alto}$ .

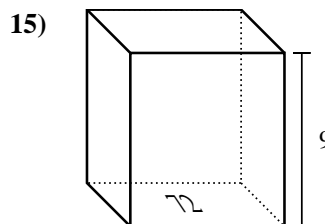
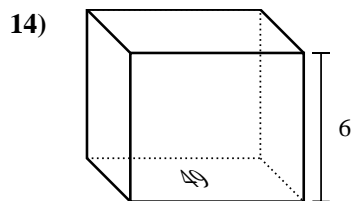
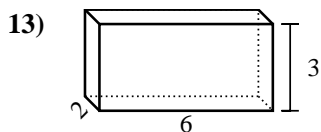
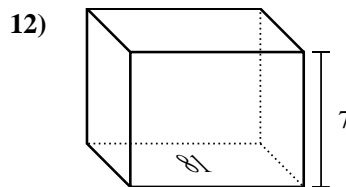
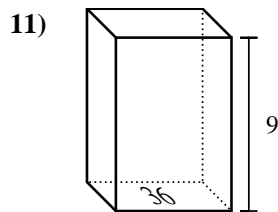
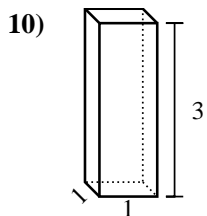
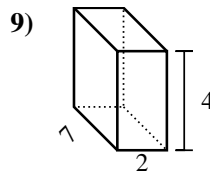
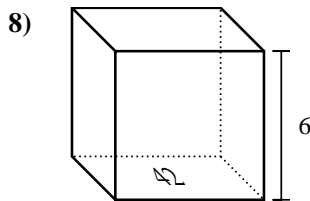
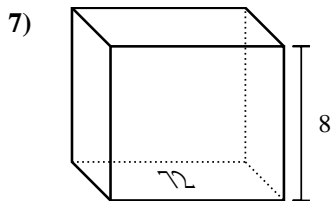
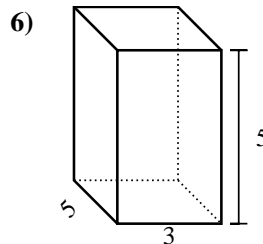
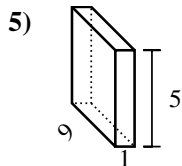
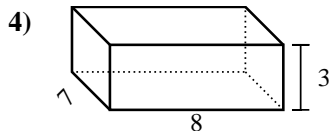
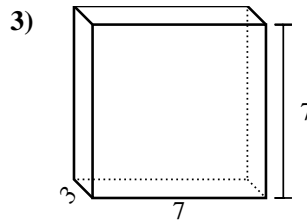
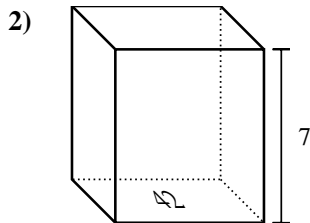
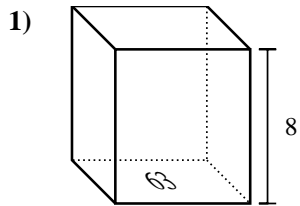
**Respuestas**



1. \_\_\_\_\_
2. \_\_\_\_\_
3. \_\_\_\_\_
4. \_\_\_\_\_
5. \_\_\_\_\_
6. \_\_\_\_\_
7. \_\_\_\_\_
8. \_\_\_\_\_
9. \_\_\_\_\_
10. \_\_\_\_\_
11. \_\_\_\_\_
12. \_\_\_\_\_
13. \_\_\_\_\_
14. \_\_\_\_\_
15. \_\_\_\_\_



Encontrar el volumen de cada prisma rectangular. Recuerda  $V = \text{Base} \times \text{Altura}$  y  $V = \text{Largo} \times \text{ancho} \times \text{alto}$ .



**Respuestas**

1. **504 cm<sup>3</sup>**

2. **294 cm<sup>3</sup>**

3. **147 cm<sup>3</sup>**

4. **168 cm<sup>3</sup>**

5. **45 cm<sup>3</sup>**

6. **75 cm<sup>3</sup>**

7. **576 cm<sup>3</sup>**

8. **252 cm<sup>3</sup>**

9. **56 cm<sup>3</sup>**

10. **3 cm<sup>3</sup>**

11. **324 cm<sup>3</sup>**

12. **567 cm<sup>3</sup>**

13. **36 cm<sup>3</sup>**

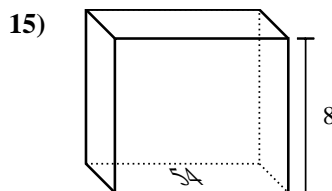
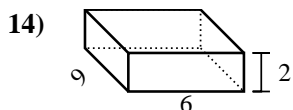
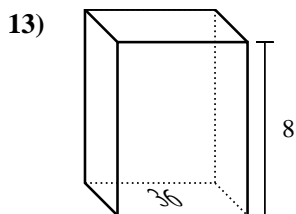
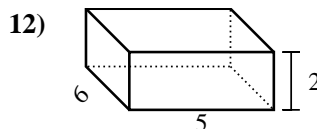
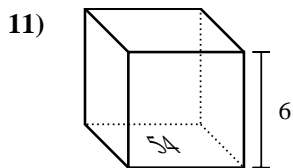
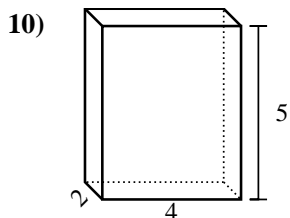
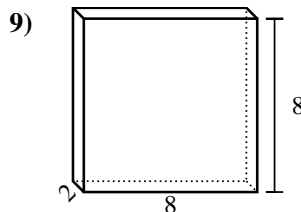
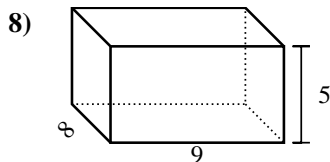
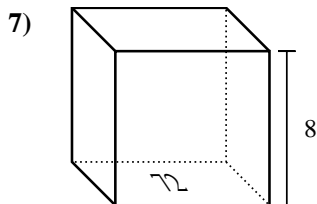
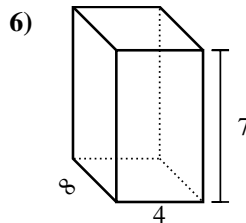
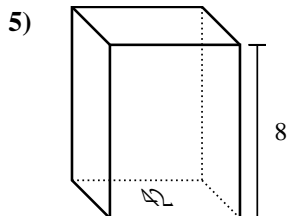
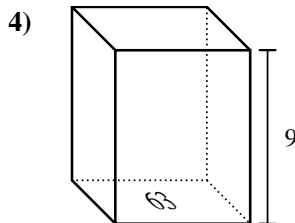
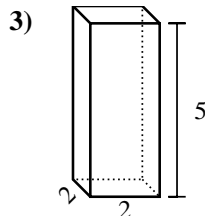
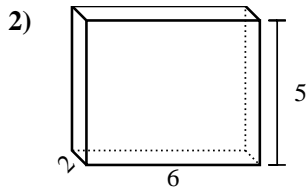
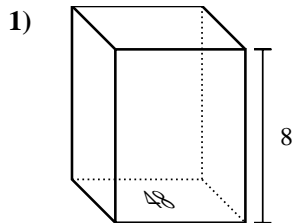
14. **294 cm<sup>3</sup>**

15. **648 cm<sup>3</sup>**



Encontrar el volumen de cada prisma rectangular. Recuerda  $V = \text{Base} \times \text{Altura}$  y  $V = \text{Largo} \times \text{ancho} \times \text{alto}$ .

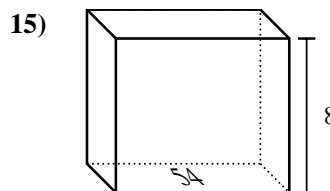
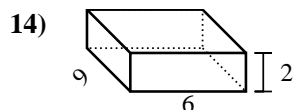
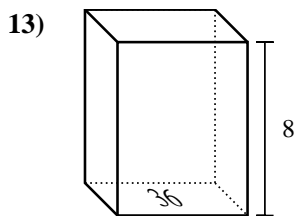
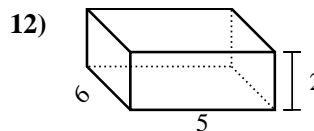
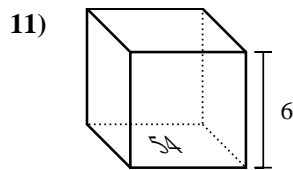
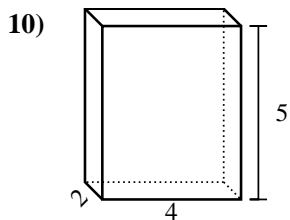
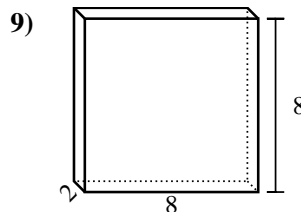
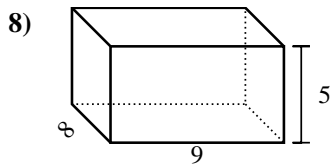
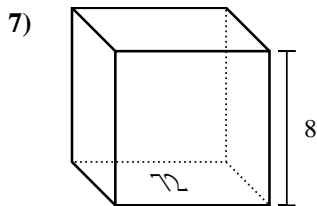
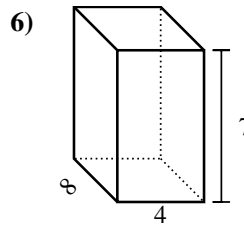
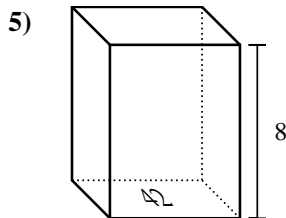
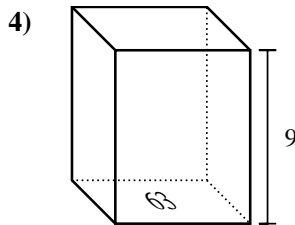
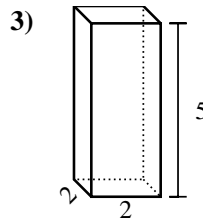
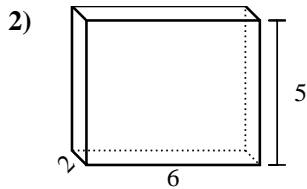
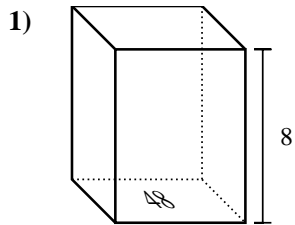
**Respuestas**



1. \_\_\_\_\_
2. \_\_\_\_\_
3. \_\_\_\_\_
4. \_\_\_\_\_
5. \_\_\_\_\_
6. \_\_\_\_\_
7. \_\_\_\_\_
8. \_\_\_\_\_
9. \_\_\_\_\_
10. \_\_\_\_\_
11. \_\_\_\_\_
12. \_\_\_\_\_
13. \_\_\_\_\_
14. \_\_\_\_\_
15. \_\_\_\_\_



Encontrar el volumen de cada prisma rectangular. Recuerda  $V = \text{Base} \times \text{Altura}$  y  $V = \text{Largo} \times \text{ancho} \times \text{alto}$ .



**Respuestas**

1. 384 cm<sup>3</sup>

2. 60 cm<sup>3</sup>

3. 20 cm<sup>3</sup>

4. 567 cm<sup>3</sup>

5. 336 cm<sup>3</sup>

6. 224 cm<sup>3</sup>

7. 576 cm<sup>3</sup>

8. 360 cm<sup>3</sup>

9. 128 cm<sup>3</sup>

10. 40 cm<sup>3</sup>

11. 324 cm<sup>3</sup>

12. 60 cm<sup>3</sup>

13. 288 cm<sup>3</sup>

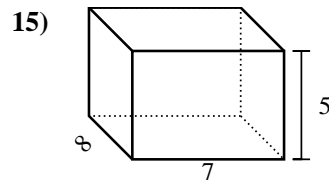
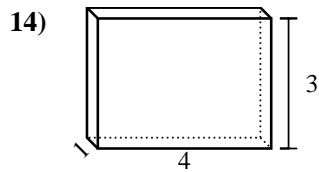
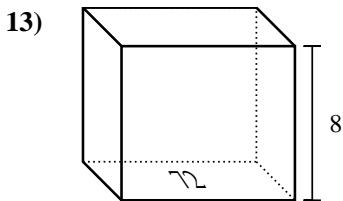
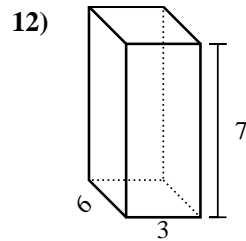
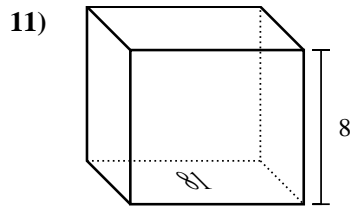
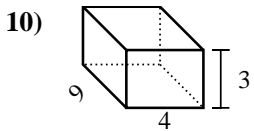
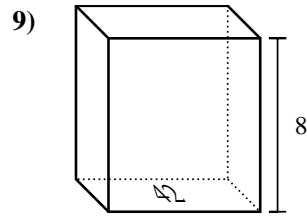
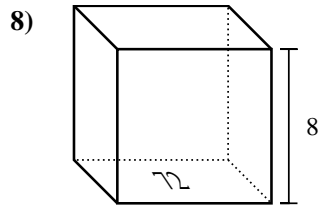
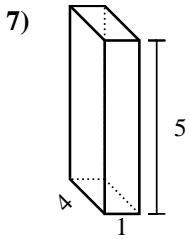
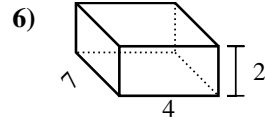
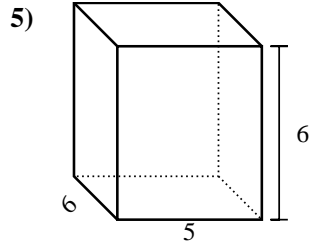
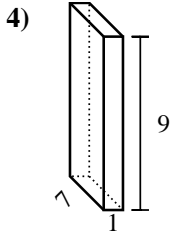
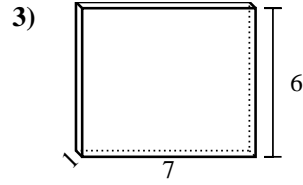
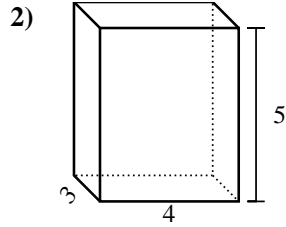
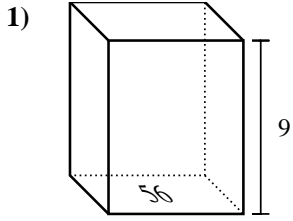
14. 108 cm<sup>3</sup>

15. 432 cm<sup>3</sup>



Encontrar el volumen de cada prisma rectangular. Recuerda  $V = \text{Base} \times \text{Altura}$  y  $V = \text{Largo} \times \text{ancho} \times \text{alto}$ .

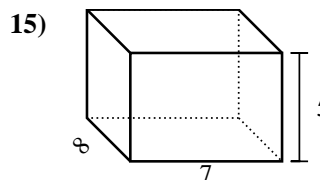
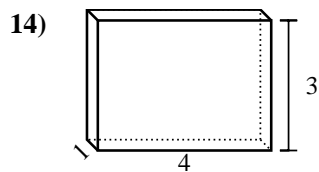
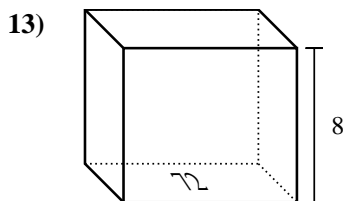
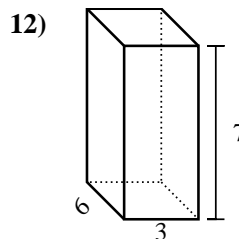
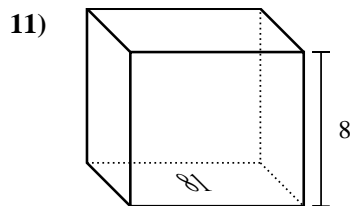
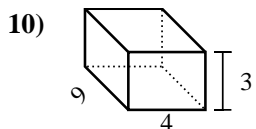
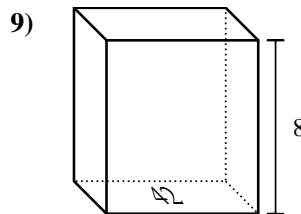
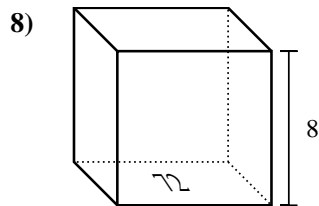
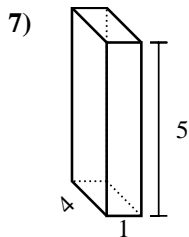
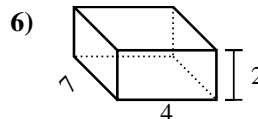
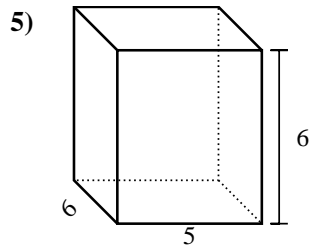
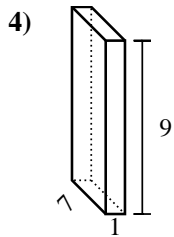
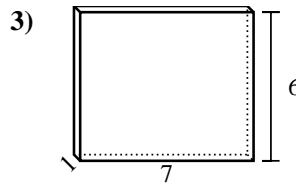
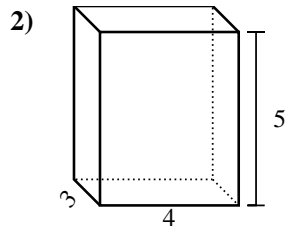
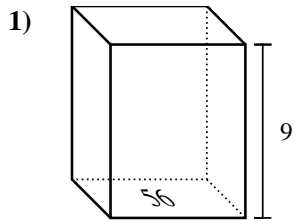
**Respuestas**



1. \_\_\_\_\_
2. \_\_\_\_\_
3. \_\_\_\_\_
4. \_\_\_\_\_
5. \_\_\_\_\_
6. \_\_\_\_\_
7. \_\_\_\_\_
8. \_\_\_\_\_
9. \_\_\_\_\_
10. \_\_\_\_\_
11. \_\_\_\_\_
12. \_\_\_\_\_
13. \_\_\_\_\_
14. \_\_\_\_\_
15. \_\_\_\_\_



Encontrar el volumen de cada prisma rectangular. Recuerda  $V = \text{Base} \times \text{Altura}$  y  $V = \text{Largo} \times \text{ancho} \times \text{alto}$ .



**Respuestas**

1. 504 cm<sup>3</sup>

2. 60 cm<sup>3</sup>

3. 42 cm<sup>3</sup>

4. 63 cm<sup>3</sup>

5. 180 cm<sup>3</sup>

6. 56 cm<sup>3</sup>

7. 20 cm<sup>3</sup>

8. 576 cm<sup>3</sup>

9. 336 cm<sup>3</sup>

10. 108 cm<sup>3</sup>

11. 648 cm<sup>3</sup>

12. 126 cm<sup>3</sup>

13. 576 cm<sup>3</sup>

14. 12 cm<sup>3</sup>

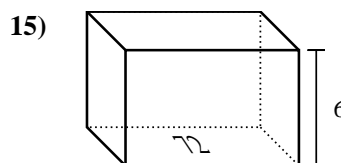
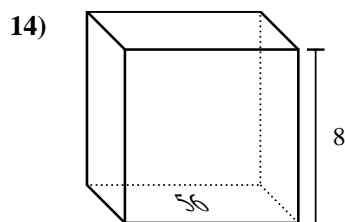
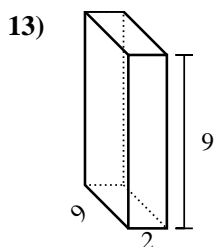
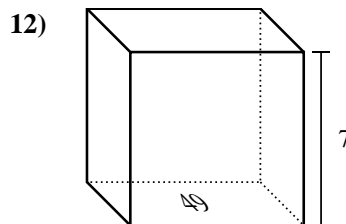
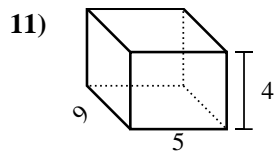
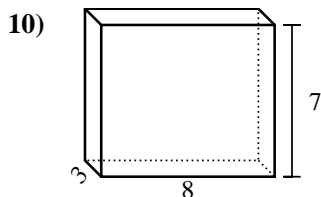
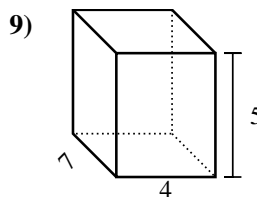
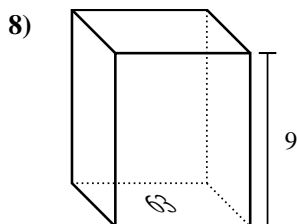
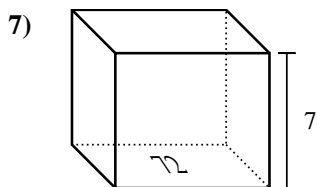
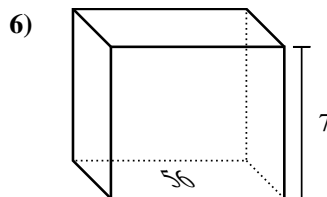
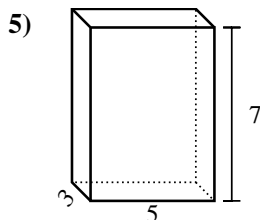
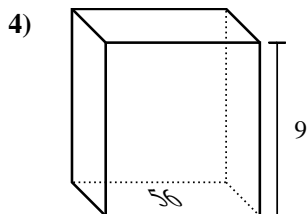
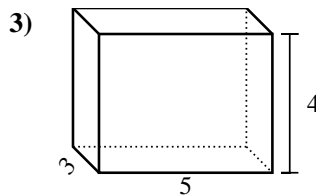
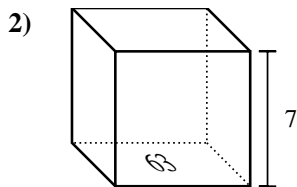
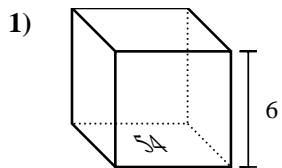
15. 280 cm<sup>3</sup>





Encontrar el volumen de cada prisma rectangular. Recuerda  $V = \text{Base} \times \text{Altura}$  y  $V = \text{Largo} \times \text{ancho} \times \text{alto}$ .

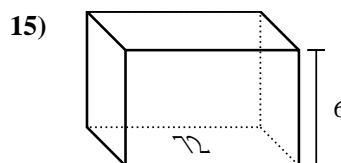
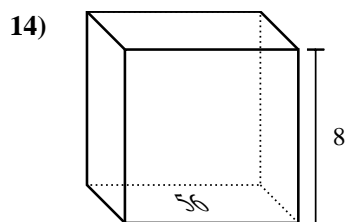
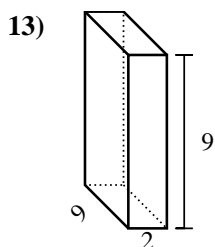
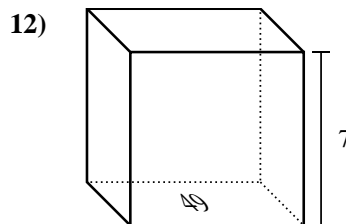
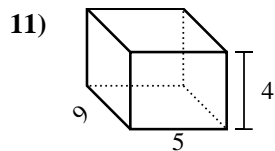
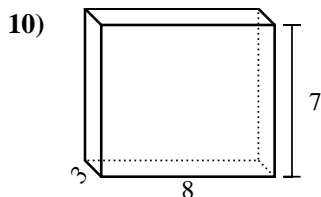
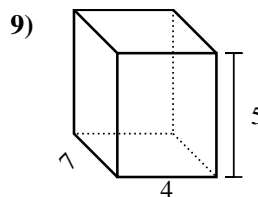
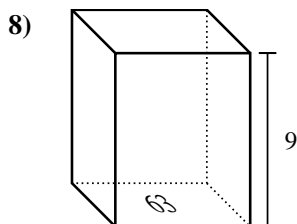
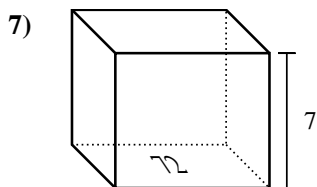
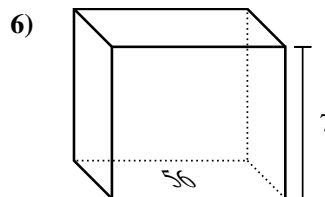
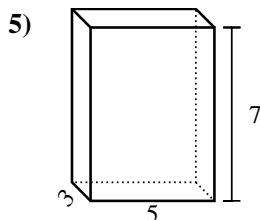
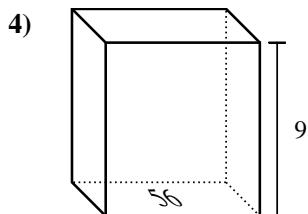
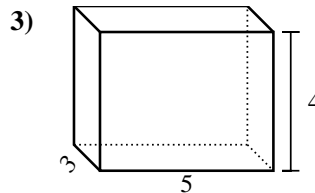
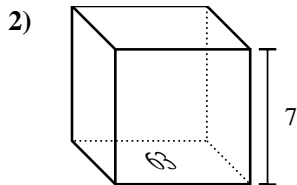
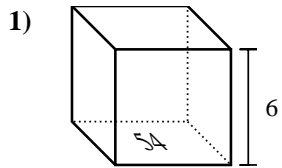
**Respuestas**



1. \_\_\_\_\_
2. \_\_\_\_\_
3. \_\_\_\_\_
4. \_\_\_\_\_
5. \_\_\_\_\_
6. \_\_\_\_\_
7. \_\_\_\_\_
8. \_\_\_\_\_
9. \_\_\_\_\_
10. \_\_\_\_\_
11. \_\_\_\_\_
12. \_\_\_\_\_
13. \_\_\_\_\_
14. \_\_\_\_\_
15. \_\_\_\_\_



Encontrar el volumen de cada prisma rectangular. Recuerda  $V = \text{Base} \times \text{Altura}$  y  $V = \text{Largo} \times \text{ancho} \times \text{alto}$ .



**Respuestas**

1. **324 cm<sup>3</sup>**

2. **441 cm<sup>3</sup>**

3. **60 cm<sup>3</sup>**

4. **504 cm<sup>3</sup>**

5. **105 cm<sup>3</sup>**

6. **392 cm<sup>3</sup>**

7. **504 cm<sup>3</sup>**

8. **567 cm<sup>3</sup>**

9. **140 cm<sup>3</sup>**

10. **168 cm<sup>3</sup>**

11. **180 cm<sup>3</sup>**

12. **343 cm<sup>3</sup>**

13. **162 cm<sup>3</sup>**

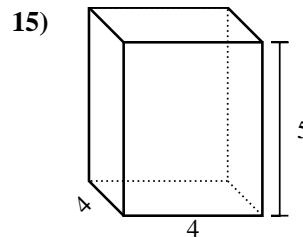
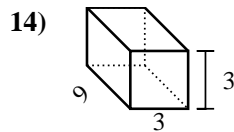
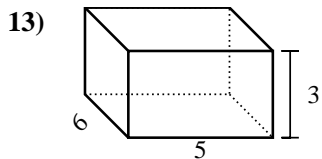
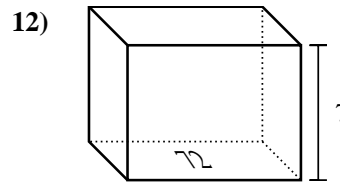
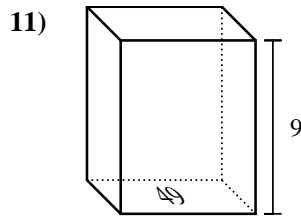
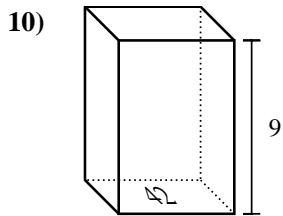
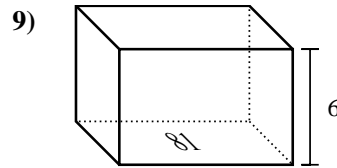
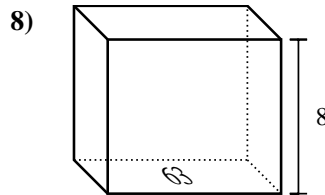
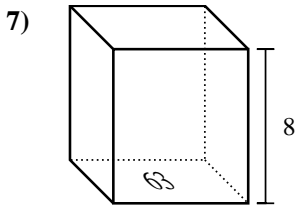
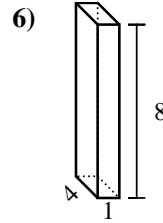
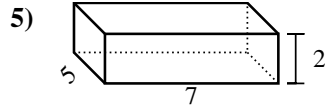
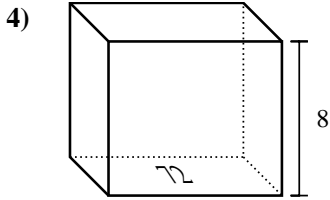
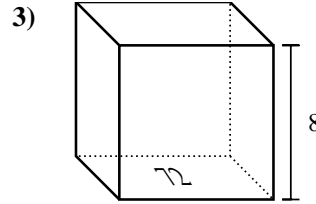
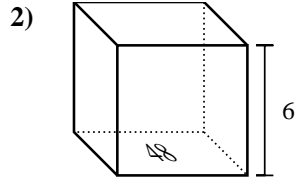
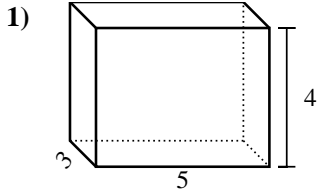
14. **448 cm<sup>3</sup>**

15. **432 cm<sup>3</sup>**



Encontrar el volumen de cada prisma rectangular. Recuerda  $V = \text{Base} \times \text{Altura}$  y  $V = \text{Largo} \times \text{ancho} \times \text{alto}$ .

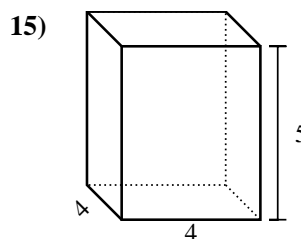
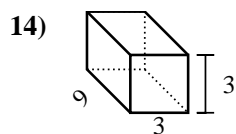
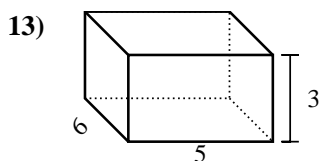
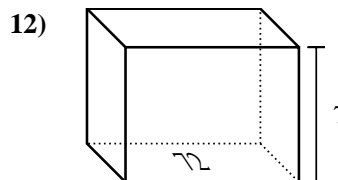
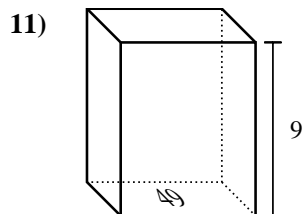
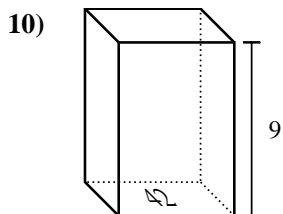
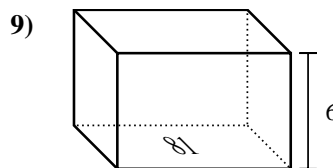
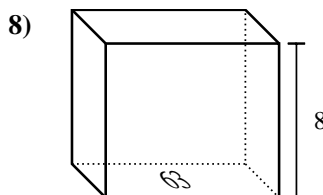
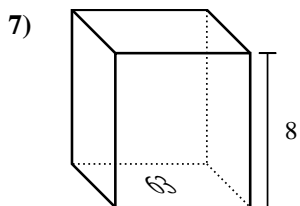
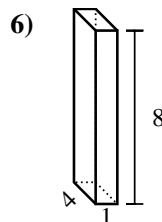
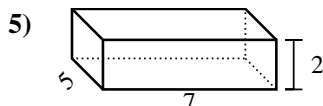
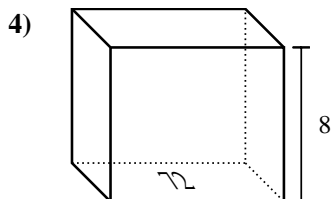
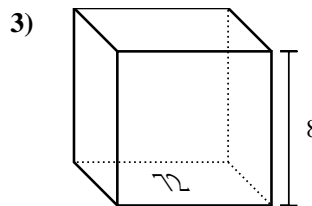
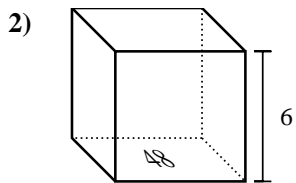
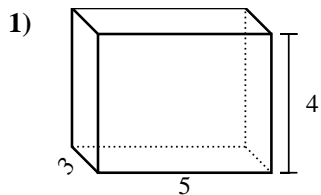
**Respuestas**



1. \_\_\_\_\_
2. \_\_\_\_\_
3. \_\_\_\_\_
4. \_\_\_\_\_
5. \_\_\_\_\_
6. \_\_\_\_\_
7. \_\_\_\_\_
8. \_\_\_\_\_
9. \_\_\_\_\_
10. \_\_\_\_\_
11. \_\_\_\_\_
12. \_\_\_\_\_
13. \_\_\_\_\_
14. \_\_\_\_\_
15. \_\_\_\_\_



Encontrar el volumen de cada prisma rectangular. Recuerda  $V = \text{Base} \times \text{Altura}$  y  $V = \text{Largo} \times \text{ancho} \times \text{alto}$ .



**Respuestas**

1. 60 cm<sup>3</sup>

2. 288 cm<sup>3</sup>

3. 576 cm<sup>3</sup>

4. 576 cm<sup>3</sup>

5. 70 cm<sup>3</sup>

6. 32 cm<sup>3</sup>

7. 504 cm<sup>3</sup>

8. 504 cm<sup>3</sup>

9. 486 cm<sup>3</sup>

10. 378 cm<sup>3</sup>

11. 441 cm<sup>3</sup>

12. 504 cm<sup>3</sup>

13. 90 cm<sup>3</sup>

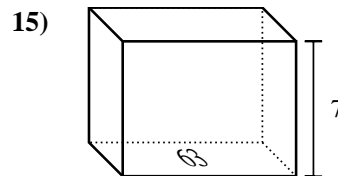
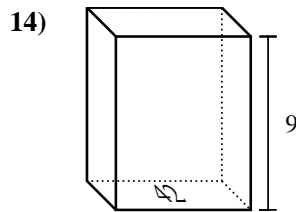
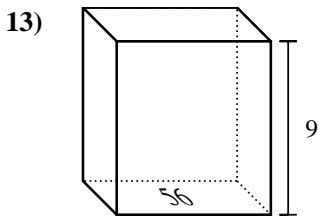
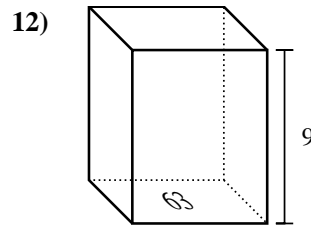
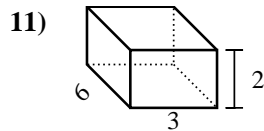
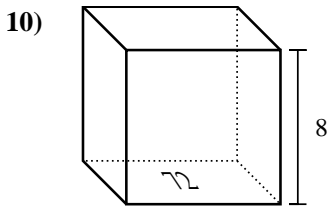
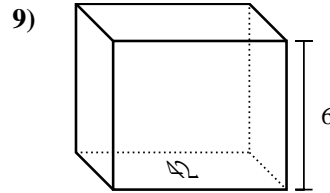
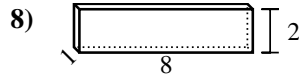
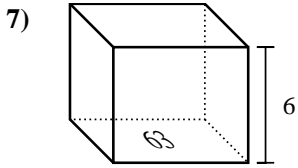
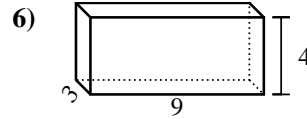
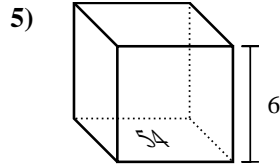
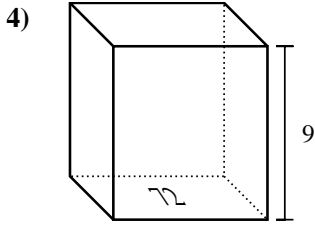
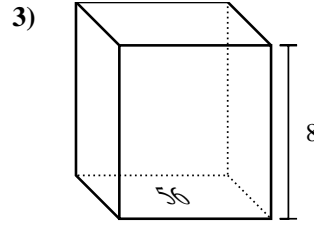
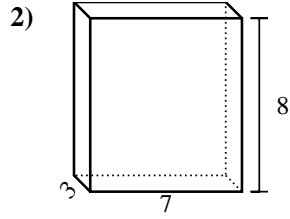
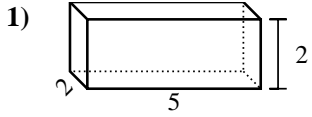
14. 81 cm<sup>3</sup>

15. 80 cm<sup>3</sup>



Encontrar el volumen de cada prisma rectangular. Recuerda  $V = \text{Base} \times \text{Altura}$  y  $V = \text{Largo} \times \text{ancho} \times \text{alto}$ .

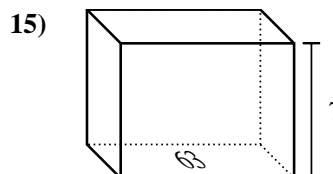
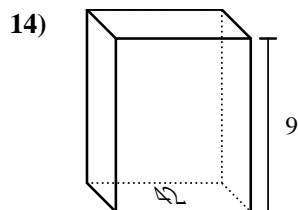
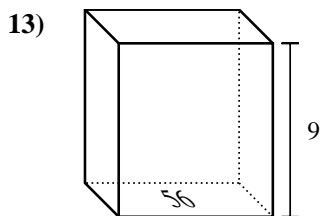
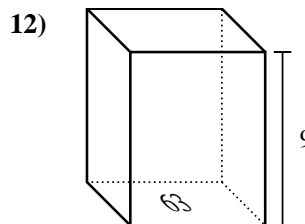
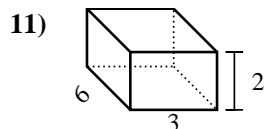
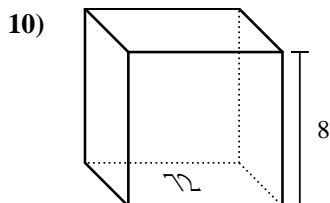
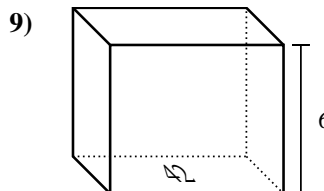
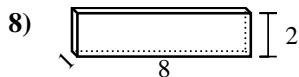
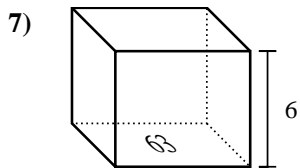
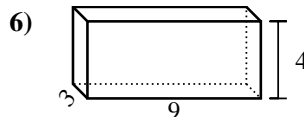
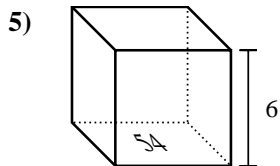
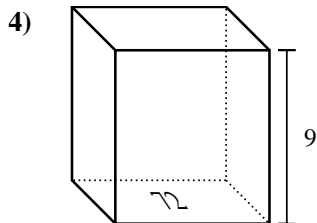
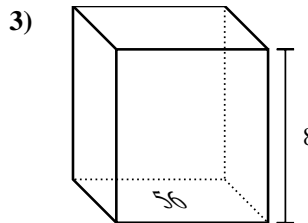
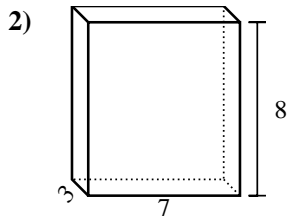
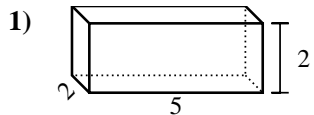
**Respuestas**



1. \_\_\_\_\_
2. \_\_\_\_\_
3. \_\_\_\_\_
4. \_\_\_\_\_
5. \_\_\_\_\_
6. \_\_\_\_\_
7. \_\_\_\_\_
8. \_\_\_\_\_
9. \_\_\_\_\_
10. \_\_\_\_\_
11. \_\_\_\_\_
12. \_\_\_\_\_
13. \_\_\_\_\_
14. \_\_\_\_\_
15. \_\_\_\_\_



Encontrar el volumen de cada prisma rectangular. Recuerda  $V = \text{Base} \times \text{Altura}$  y  $V = \text{Largo} \times \text{ancho} \times \text{alto}$ .



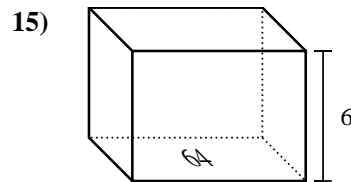
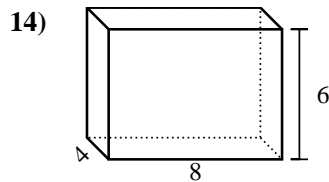
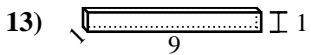
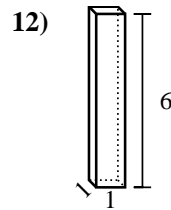
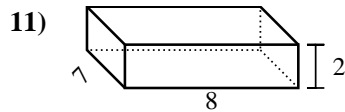
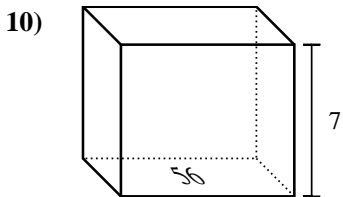
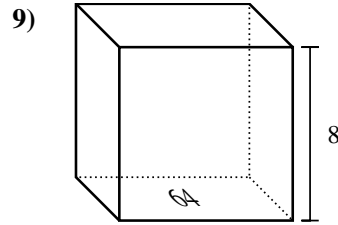
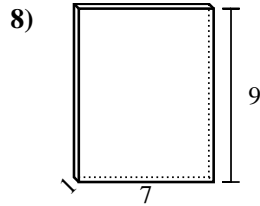
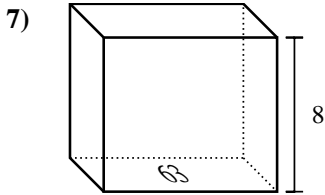
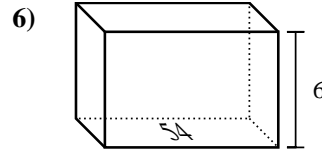
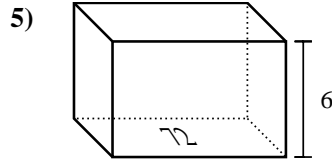
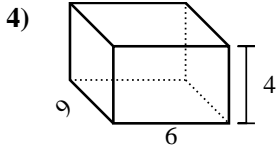
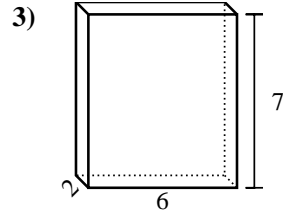
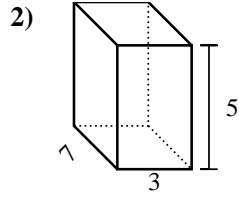
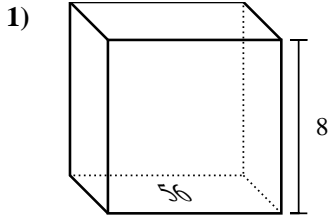
**Respuestas**

1. 20 cm<sup>3</sup>
2. 168 cm<sup>3</sup>
3. 448 cm<sup>3</sup>
4. 648 cm<sup>3</sup>
5. 324 cm<sup>3</sup>
6. 108 cm<sup>3</sup>
7. 378 cm<sup>3</sup>
8. 16 cm<sup>3</sup>
9. 252 cm<sup>3</sup>
10. 576 cm<sup>3</sup>
11. 36 cm<sup>3</sup>
12. 567 cm<sup>3</sup>
13. 504 cm<sup>3</sup>
14. 378 cm<sup>3</sup>
15. 441 cm<sup>3</sup>



Encontrar el volumen de cada prisma rectangular. Recuerda  $V = \text{Base} \times \text{Altura}$  y  $V = \text{Largo} \times \text{ancho} \times \text{alto}$ .

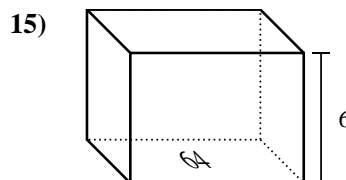
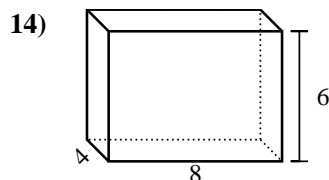
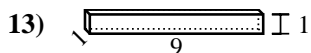
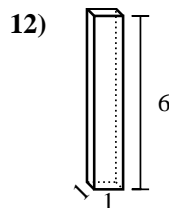
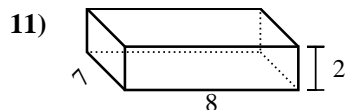
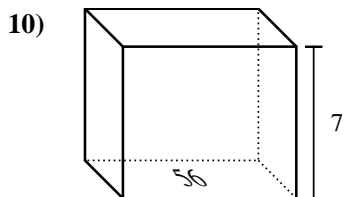
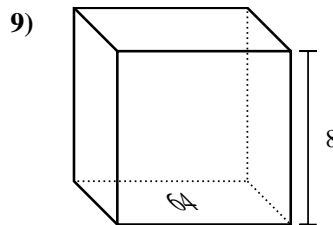
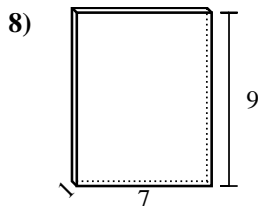
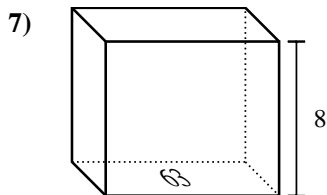
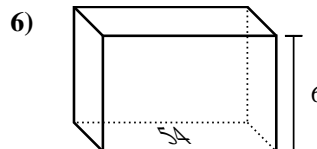
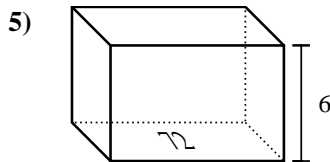
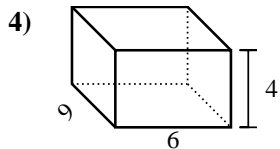
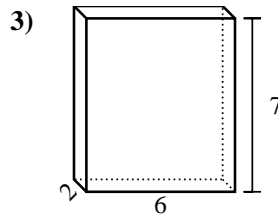
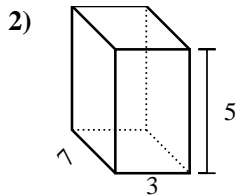
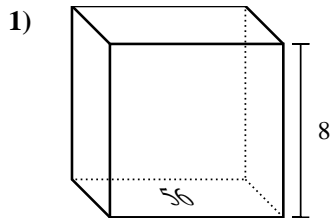
**Respuestas**



1. \_\_\_\_\_
2. \_\_\_\_\_
3. \_\_\_\_\_
4. \_\_\_\_\_
5. \_\_\_\_\_
6. \_\_\_\_\_
7. \_\_\_\_\_
8. \_\_\_\_\_
9. \_\_\_\_\_
10. \_\_\_\_\_
11. \_\_\_\_\_
12. \_\_\_\_\_
13. \_\_\_\_\_
14. \_\_\_\_\_
15. \_\_\_\_\_



Encontrar el volumen de cada prisma rectangular. Recuerda  $V = \text{Base} \times \text{Altura}$  y  $V = \text{Largo} \times \text{ancho} \times \text{alto}$ .



**Respuestas**

1. 448 cm<sup>3</sup>

2. 105 cm<sup>3</sup>

3. 84 cm<sup>3</sup>

4. 216 cm<sup>3</sup>

5. 432 cm<sup>3</sup>

6. 324 cm<sup>3</sup>

7. 504 cm<sup>3</sup>

8. 63 cm<sup>3</sup>

9. 512 cm<sup>3</sup>

10. 392 cm<sup>3</sup>

11. 112 cm<sup>3</sup>

12. 6 cm<sup>3</sup>

13. 9 cm<sup>3</sup>

14. 192 cm<sup>3</sup>

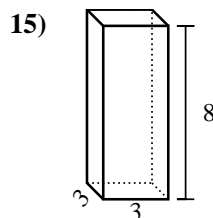
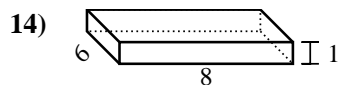
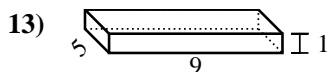
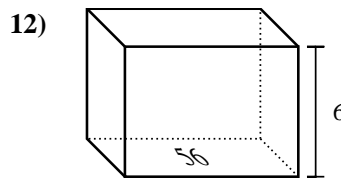
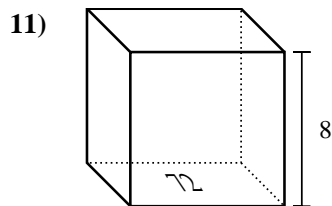
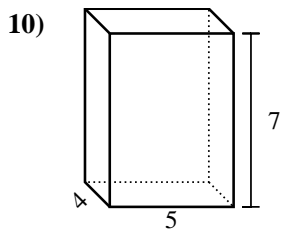
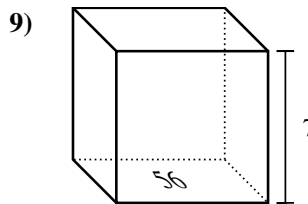
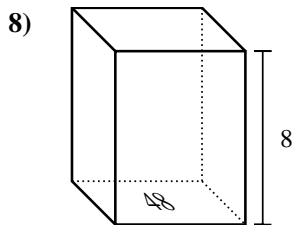
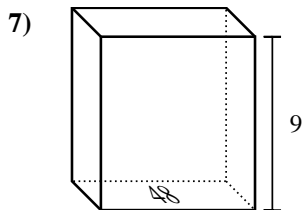
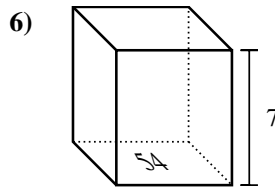
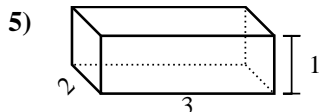
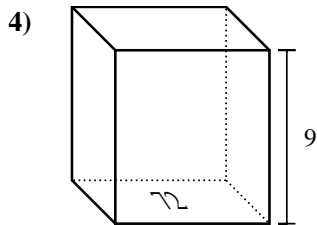
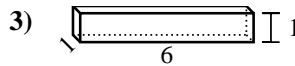
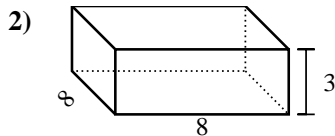
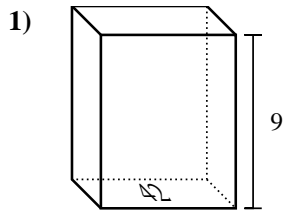
15. 384 cm<sup>3</sup>





Encontrar el volumen de cada prisma rectangular. Recuerda  $V = \text{Base} \times \text{Altura}$  y  $V = \text{Largo} \times \text{ancho} \times \text{alto}$ .

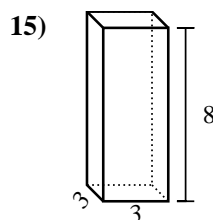
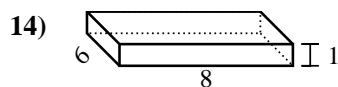
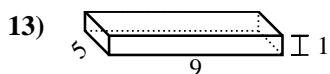
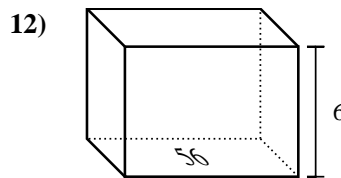
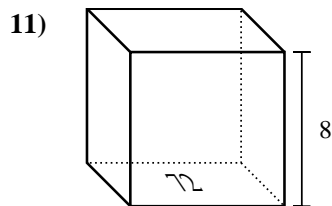
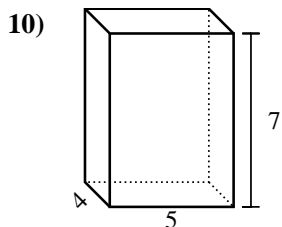
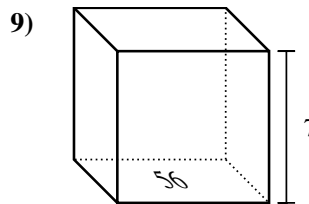
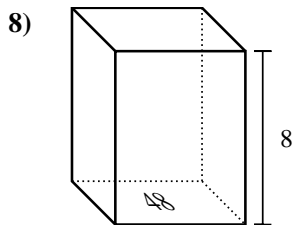
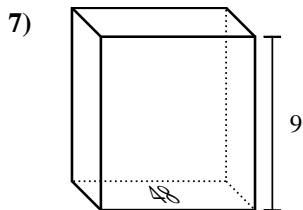
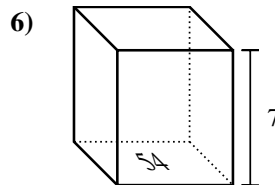
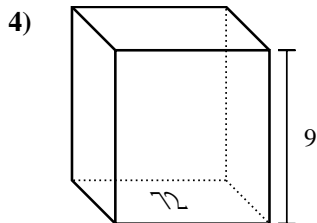
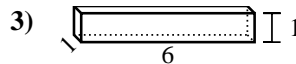
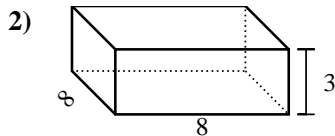
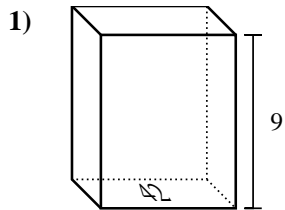
**Respuestas**



1. \_\_\_\_\_
2. \_\_\_\_\_
3. \_\_\_\_\_
4. \_\_\_\_\_
5. \_\_\_\_\_
6. \_\_\_\_\_
7. \_\_\_\_\_
8. \_\_\_\_\_
9. \_\_\_\_\_
10. \_\_\_\_\_
11. \_\_\_\_\_
12. \_\_\_\_\_
13. \_\_\_\_\_
14. \_\_\_\_\_
15. \_\_\_\_\_



Encontrar el volumen de cada prisma rectangular. Recuerda  $V = \text{Base} \times \text{Altura}$  y  $V = \text{Largo} \times \text{ancho} \times \text{alto}$ .



**Respuestas**

1. **378 cm<sup>3</sup>**

2. **192 cm<sup>3</sup>**

3. **6 cm<sup>3</sup>**

4. **648 cm<sup>3</sup>**

5. **6 cm<sup>3</sup>**

6. **378 cm<sup>3</sup>**

7. **432 cm<sup>3</sup>**

8. **384 cm<sup>3</sup>**

9. **392 cm<sup>3</sup>**

10. **140 cm<sup>3</sup>**

11. **576 cm<sup>3</sup>**

12. **336 cm<sup>3</sup>**

13. **45 cm<sup>3</sup>**

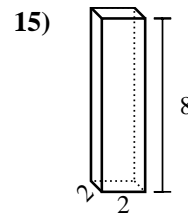
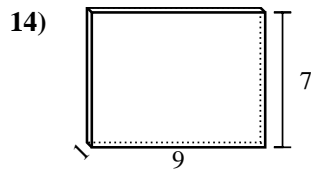
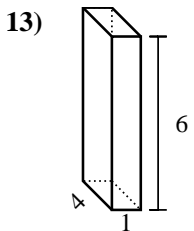
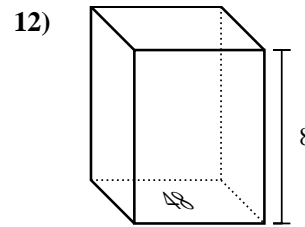
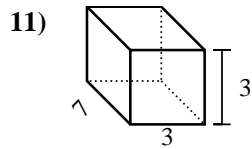
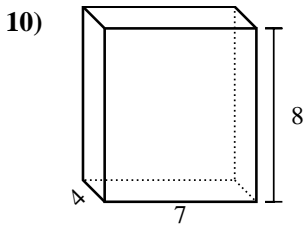
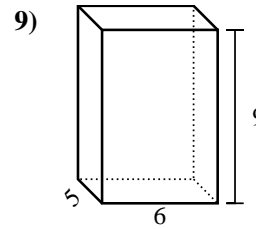
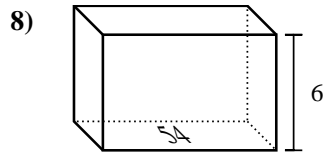
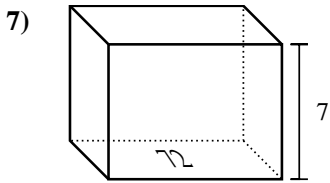
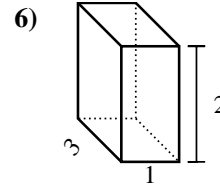
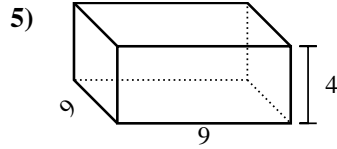
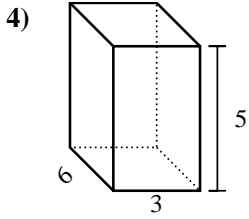
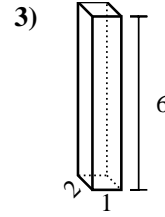
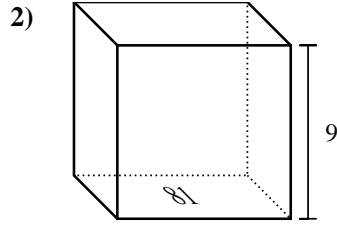
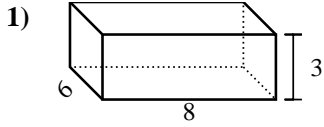
14. **48 cm<sup>3</sup>**

15. **72 cm<sup>3</sup>**



Encontrar el volumen de cada prisma rectangular. Recuerda  $V = \text{Base} \times \text{Altura}$  y  $V = \text{Largo} \times \text{ancho} \times \text{alto}$ .

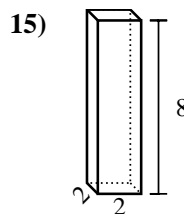
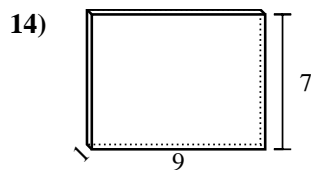
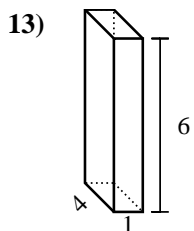
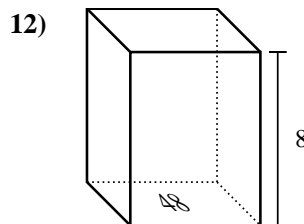
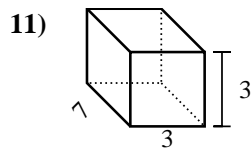
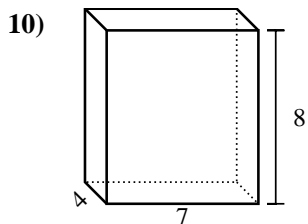
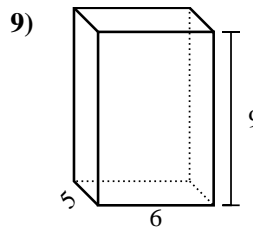
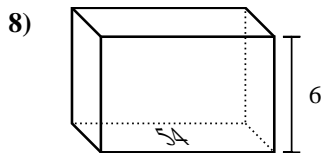
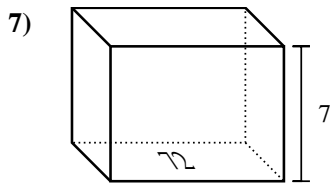
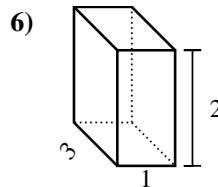
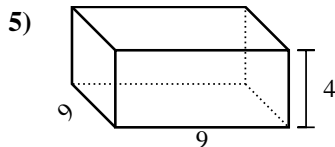
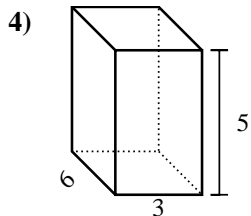
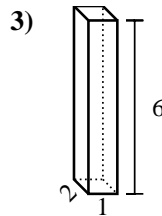
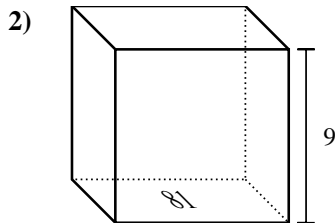
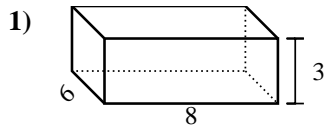
**Respuestas**



1. \_\_\_\_\_
2. \_\_\_\_\_
3. \_\_\_\_\_
4. \_\_\_\_\_
5. \_\_\_\_\_
6. \_\_\_\_\_
7. \_\_\_\_\_
8. \_\_\_\_\_
9. \_\_\_\_\_
10. \_\_\_\_\_
11. \_\_\_\_\_
12. \_\_\_\_\_
13. \_\_\_\_\_
14. \_\_\_\_\_
15. \_\_\_\_\_



Encontrar el volumen de cada prisma rectangular. Recuerda  $V = \text{Base} \times \text{Altura}$  y  $V = \text{Largo} \times \text{ancho} \times \text{alto}$ .



**Respuestas**

1. 144 cm<sup>3</sup>
2. 729 cm<sup>3</sup>
3. 12 cm<sup>3</sup>
4. 90 cm<sup>3</sup>
5. 324 cm<sup>3</sup>
6. 6 cm<sup>3</sup>
7. 504 cm<sup>3</sup>
8. 324 cm<sup>3</sup>
9. 270 cm<sup>3</sup>
10. 224 cm<sup>3</sup>
11. 63 cm<sup>3</sup>
12. 384 cm<sup>3</sup>
13. 24 cm<sup>3</sup>
14. 63 cm<sup>3</sup>
15. 32 cm<sup>3</sup>