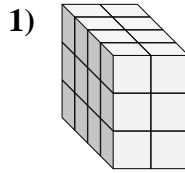
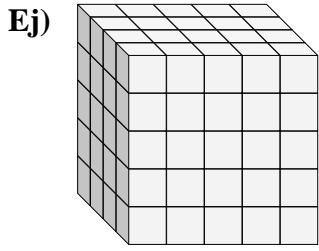




Encuentra el largo, ancho y alto del prisma rectangular. Después encuentra el volumen.

Respuestas



Ej. 4 5 5 100

1. _____

2. _____

3. _____

4. _____

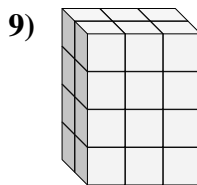
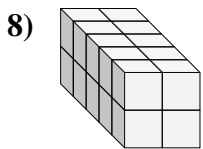
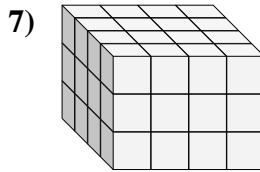
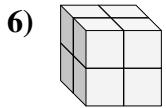
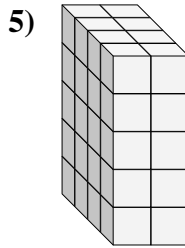
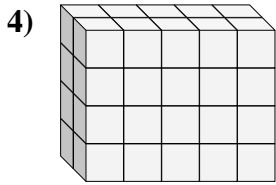
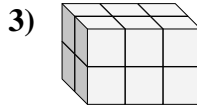
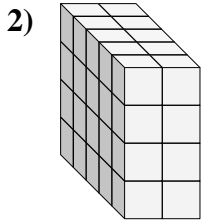
5. _____

6. _____

7. _____

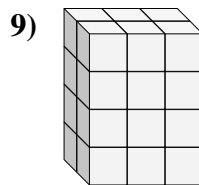
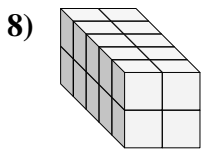
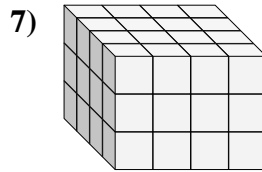
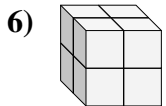
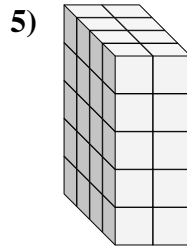
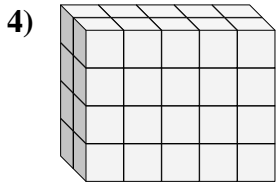
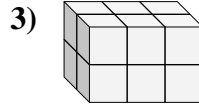
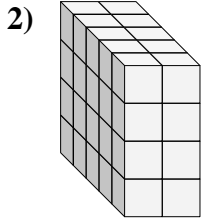
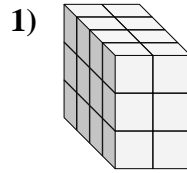
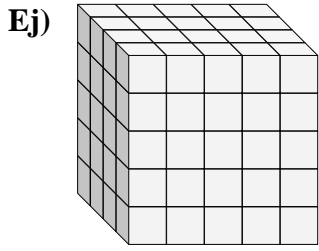
8. _____

9. _____





Encuentra el largo, ancho y alto del prisma rectangular. Después encuentra el volumen.



Respuestas

Ej.	<u>4</u>	<u>5</u>	<u>5</u>	<u>100</u>
1.	<u>4</u>	<u>2</u>	<u>3</u>	<u>24</u>
2.	<u>5</u>	<u>2</u>	<u>4</u>	<u>40</u>
3.	<u>2</u>	<u>3</u>	<u>2</u>	<u>12</u>
4.	<u>2</u>	<u>5</u>	<u>4</u>	<u>40</u>
5.	<u>4</u>	<u>2</u>	<u>5</u>	<u>40</u>
6.	<u>2</u>	<u>2</u>	<u>2</u>	<u>8</u>
7.	<u>4</u>	<u>4</u>	<u>3</u>	<u>48</u>
8.	<u>5</u>	<u>2</u>	<u>2</u>	<u>20</u>
9.	<u>2</u>	<u>3</u>	<u>4</u>	<u>24</u>