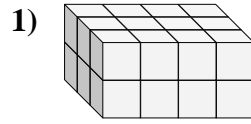
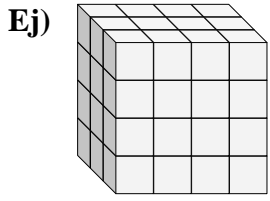




Encuentra el largo, ancho y alto del prisma rectangular. Después encuentra el volumen.

**Respuestas**



Ej. 3 4 4 48

1. \_\_\_\_\_

2. \_\_\_\_\_

3. \_\_\_\_\_

4. \_\_\_\_\_

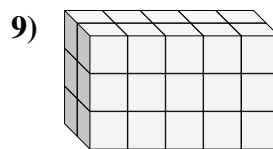
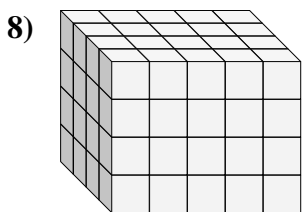
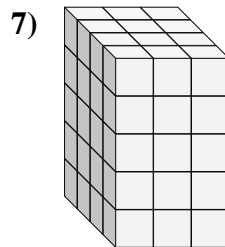
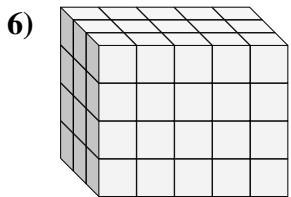
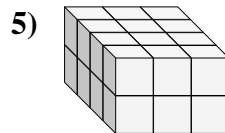
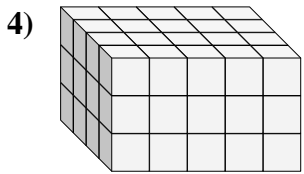
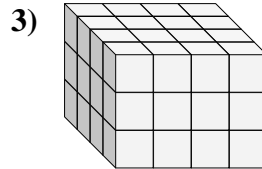
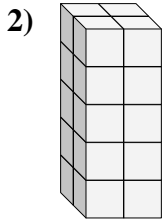
5. \_\_\_\_\_

6. \_\_\_\_\_

7. \_\_\_\_\_

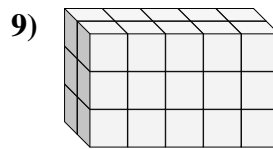
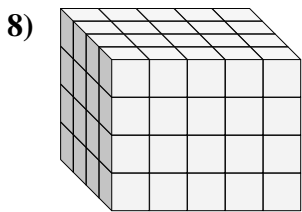
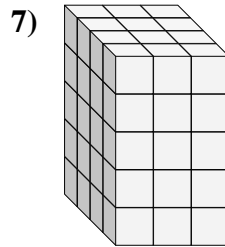
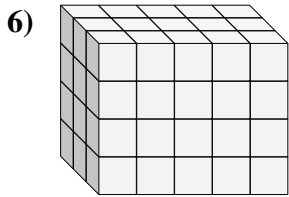
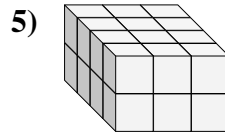
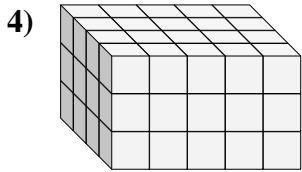
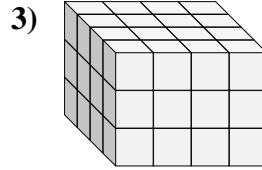
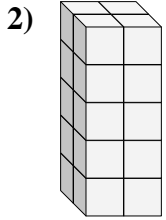
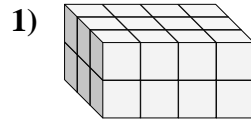
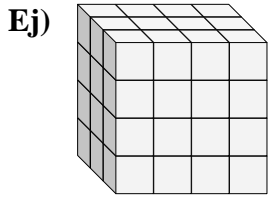
8. \_\_\_\_\_

9. \_\_\_\_\_





Encuentra el largo, ancho y alto del prisma rectangular. Después encuentra el volumen.



**Respuestas**

Ej.	<u>3</u>	<u>4</u>	<u>4</u>	<u>48</u>
1.	<u>3</u>	<u>4</u>	<u>2</u>	<u>24</u>
2.	<u>2</u>	<u>2</u>	<u>5</u>	<u>20</u>
3.	<u>4</u>	<u>4</u>	<u>3</u>	<u>48</u>
4.	<u>4</u>	<u>5</u>	<u>3</u>	<u>60</u>
5.	<u>4</u>	<u>3</u>	<u>2</u>	<u>24</u>
6.	<u>3</u>	<u>5</u>	<u>4</u>	<u>60</u>
7.	<u>4</u>	<u>3</u>	<u>5</u>	<u>60</u>
8.	<u>4</u>	<u>5</u>	<u>4</u>	<u>80</u>
9.	<u>2</u>	<u>5</u>	<u>3</u>	<u>30</u>