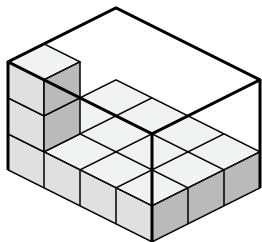


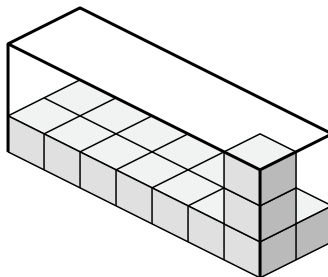


Determina el volumen de cada caja. Cada bloque es de una unidad cúbica ( $u^3$ ).

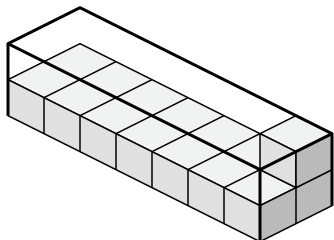
1)



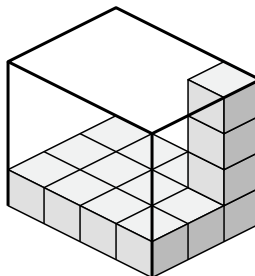
2)



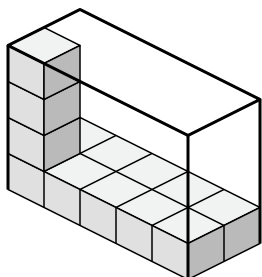
3)



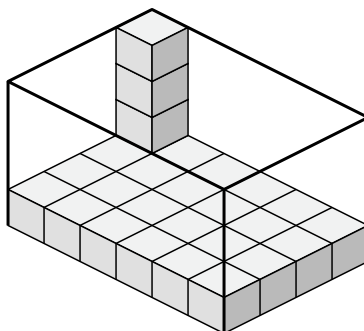
4)



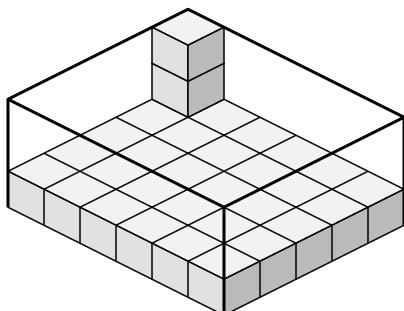
5)



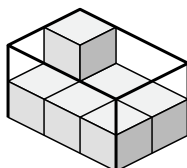
6)



7)



8)



**Respuestas**

1. \_\_\_\_\_

2. \_\_\_\_\_

3. \_\_\_\_\_

4. \_\_\_\_\_

5. \_\_\_\_\_

6. \_\_\_\_\_

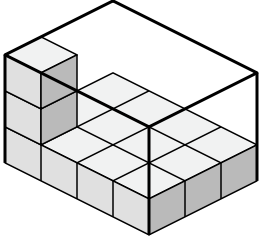
7. \_\_\_\_\_

8. \_\_\_\_\_

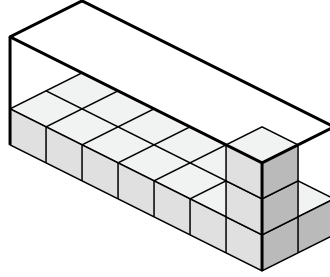


Determina el volumen de cada caja. Cada bloque es de una unidad cúbica ( $u^3$ ).

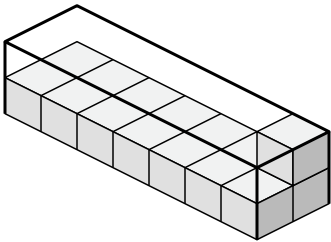
1)



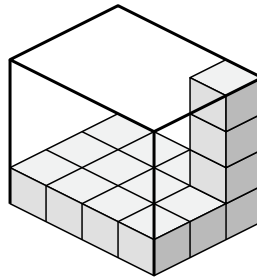
2)



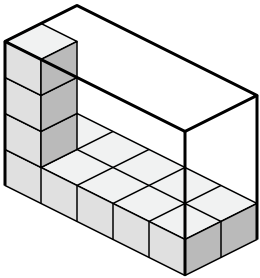
3)



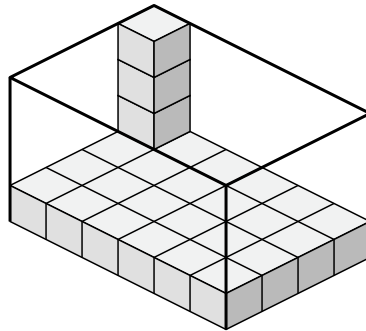
4)



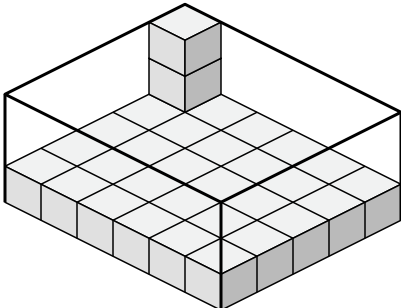
5)



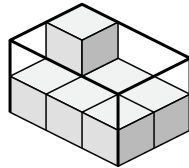
6)



7)



8)



**Respuestas**

1. 36  $u^3$

2. 42  $u^3$

3. 28  $u^3$

4. 48  $u^3$

5. 40  $u^3$

6. 96  $u^3$

7. 90  $u^3$

8. 12  $u^3$