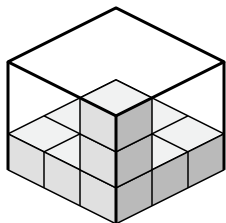


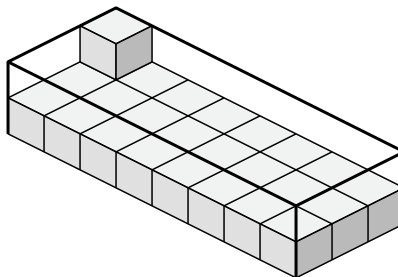


Determina el volumen de cada caja. Cada bloque es de una unidad cúbica (u^3).

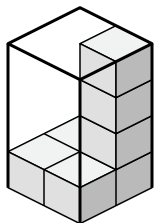
1)



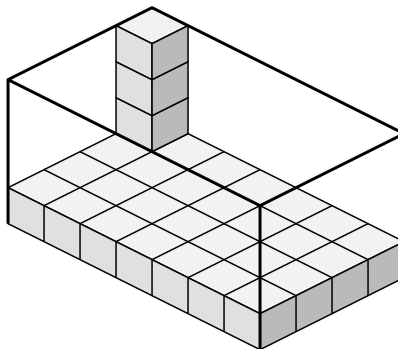
2)



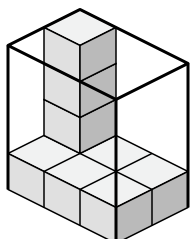
3)



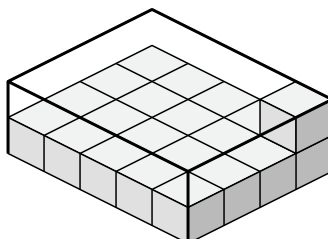
4)



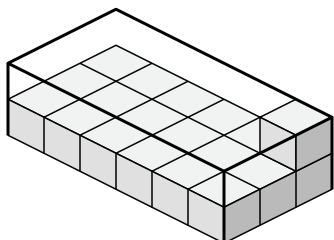
5)



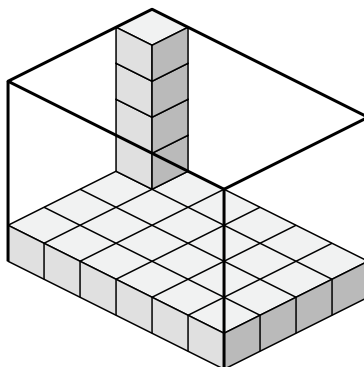
6)



7)



8)



Respuestas

1. _____

2. _____

3. _____

4. _____

5. _____

6. _____

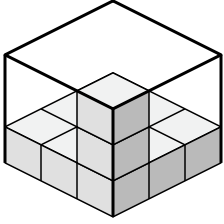
7. _____

8. _____

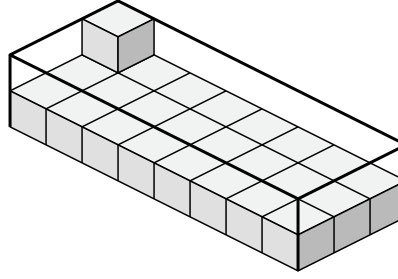


Determina el volumen de cada caja. Cada bloque es de una unidad cúbica (u^3).

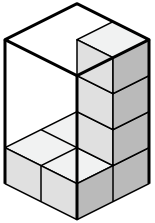
1)



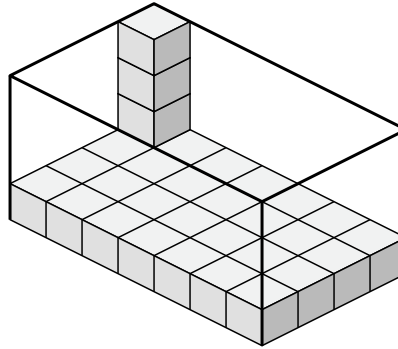
2)



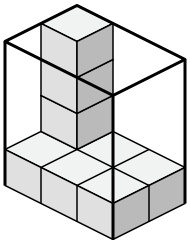
3)



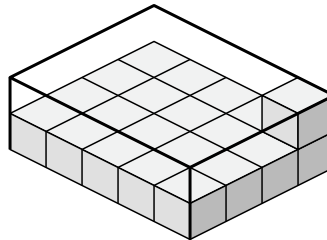
4)



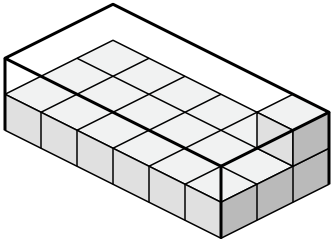
5)



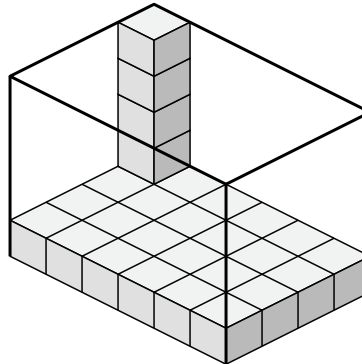
6)



7)



8)



Respuestas

1. 27 u^3

2. 48 u^3

3. 16 u^3

4. 112 u^3

5. 24 u^3

6. 40 u^3

7. 36 u^3

8. 120 u^3