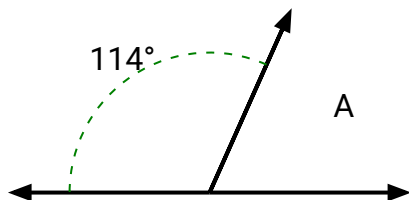




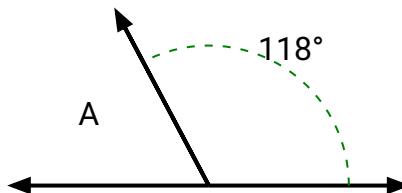
Encuentra el valor de 'A' en el conjunto de ángulos suplementarios.

Respuestas

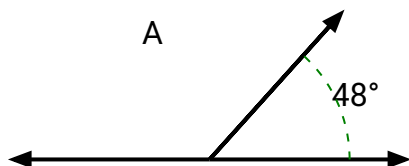
1)



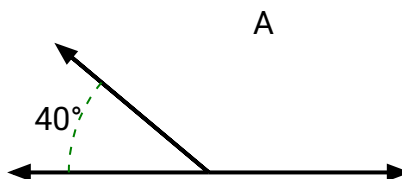
2)



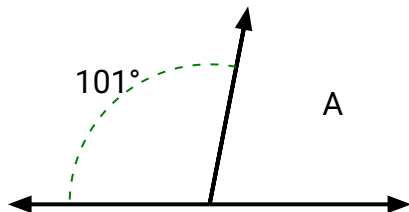
3)



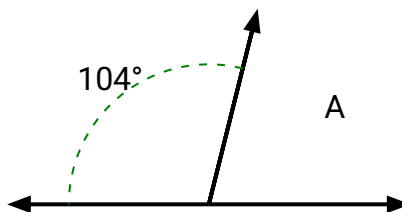
4)



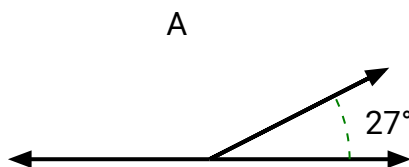
5)



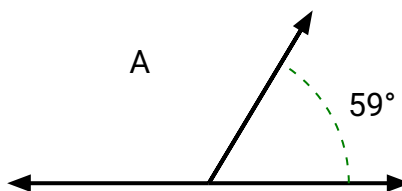
6)



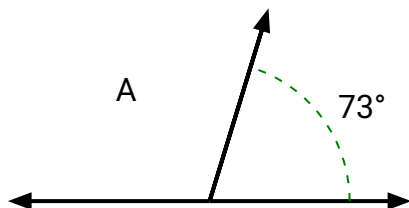
7)



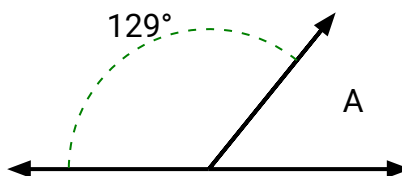
8)



9)



10)



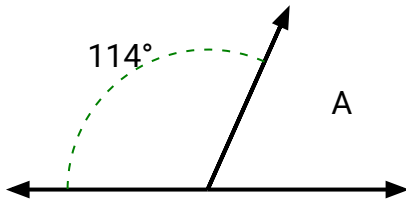
1. _____
2. _____
3. _____
4. _____
5. _____
6. _____
7. _____
8. _____
9. _____
10. _____



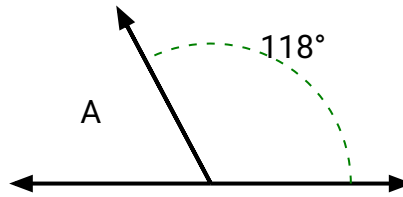
Encuentra el valor de 'A' en el conjunto de ángulos suplementarios.

Respuestas

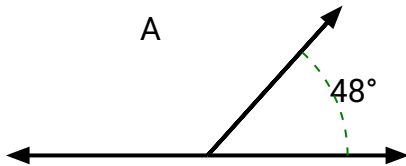
1)



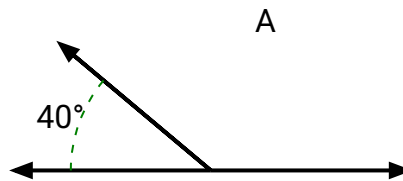
2)



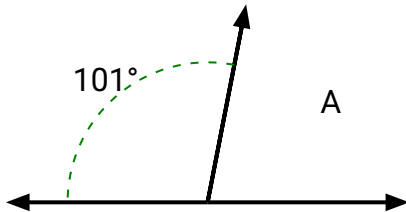
3)



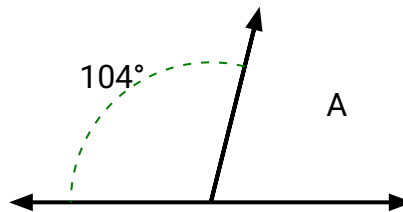
4)



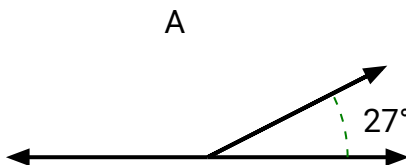
5)



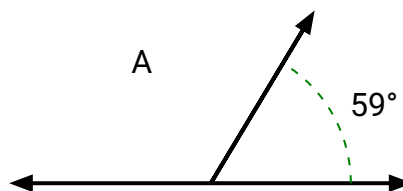
6)



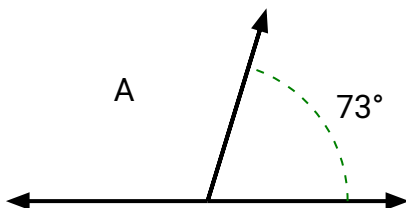
7)



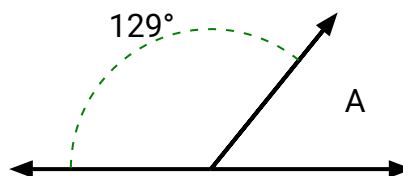
8)



9)



10)



1. **66°**
2. **62°**
3. **132°**
4. **140°**
5. **79°**
6. **76°**
7. **153°**
8. **121°**
9. **107°**
10. **51°**