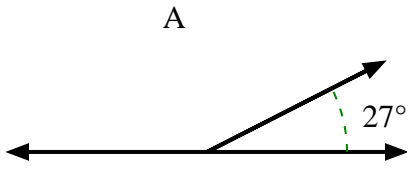




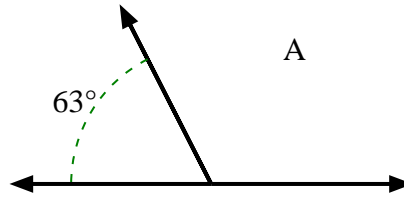
Encuentra el valor de 'A' en el conjunto de ángulos suplementarios.

Respuestas

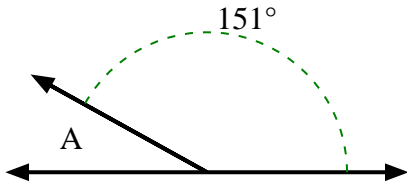
1)



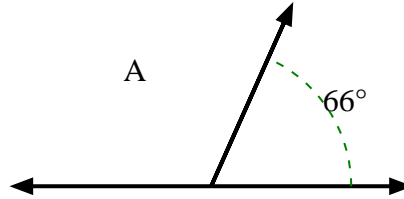
2)



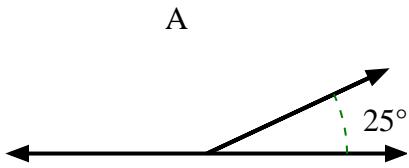
3)



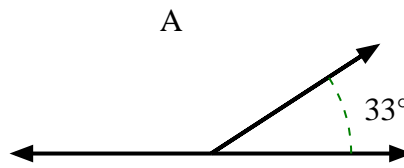
4)



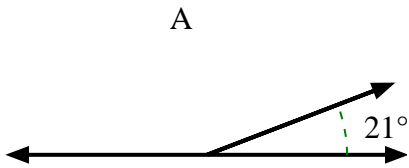
5)



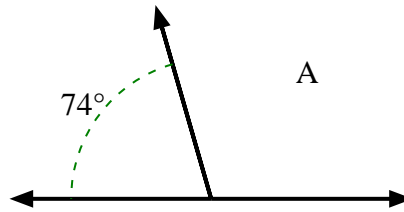
6)



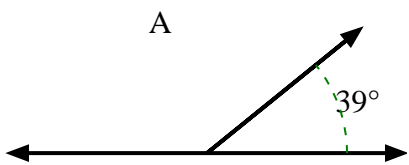
7)



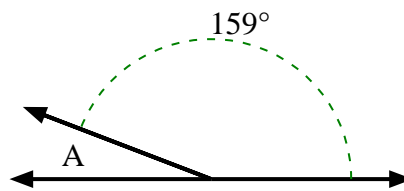
8)



9)



10)

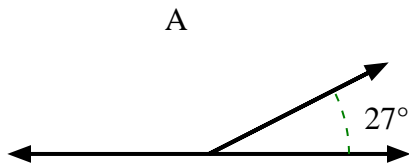


- 1. _____
- 2. _____
- 3. _____
- 4. _____
- 5. _____
- 6. _____
- 7. _____
- 8. _____
- 9. _____
- 10. _____

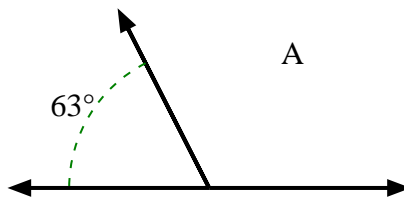


Encuentra el valor de 'A' en el conjunto de ángulos suplementarios.

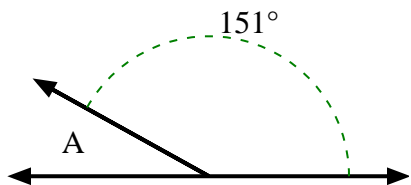
1)



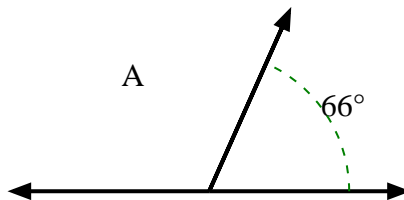
2)



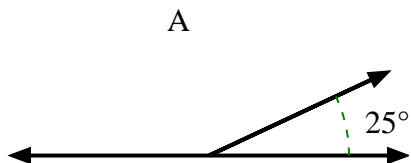
3)



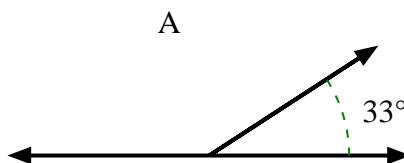
4)



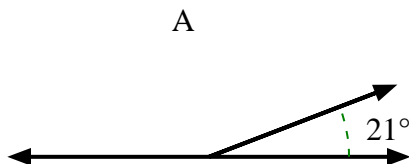
5)



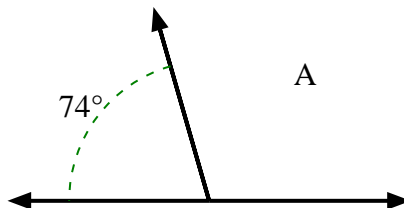
6)



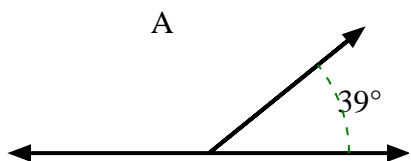
7)



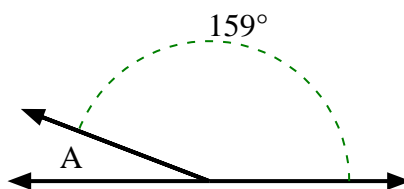
8)



9)



10)

**Respuestas**1. **153°**2. **117°**3. **29°**4. **114°**5. **155°**6. **147°**7. **159°**8. **106°**9. **141°**10. **21°**