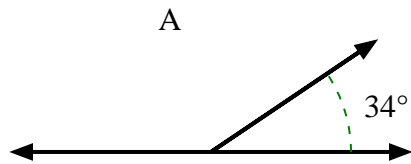




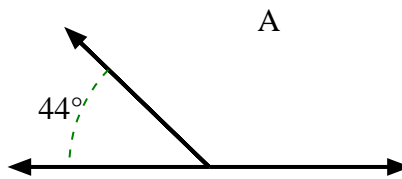
Encuentra el valor de 'A' en el conjunto de ángulos suplementarios.

**Respuestas**

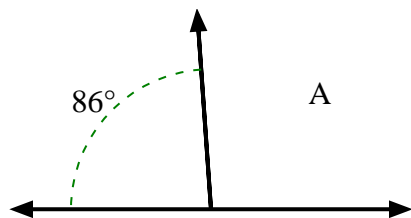
1)



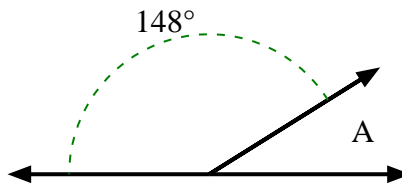
2)



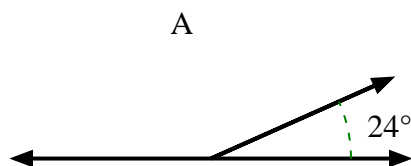
3)



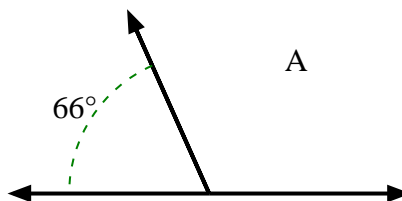
4)



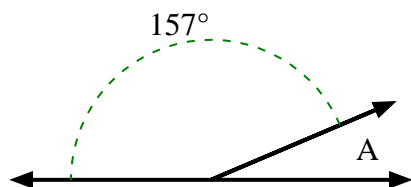
5)



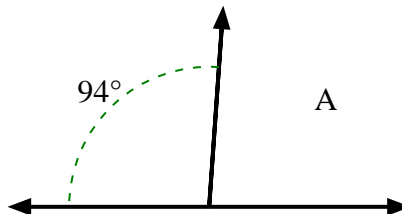
6)



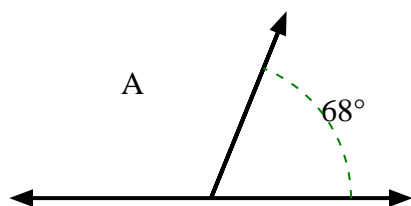
7)



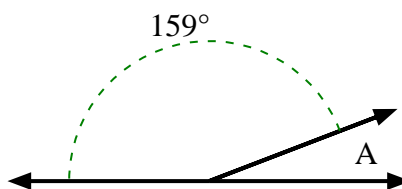
8)



9)



10)

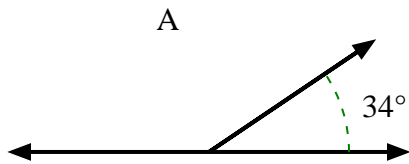


- 1. \_\_\_\_\_
- 2. \_\_\_\_\_
- 3. \_\_\_\_\_
- 4. \_\_\_\_\_
- 5. \_\_\_\_\_
- 6. \_\_\_\_\_
- 7. \_\_\_\_\_
- 8. \_\_\_\_\_
- 9. \_\_\_\_\_
- 10. \_\_\_\_\_

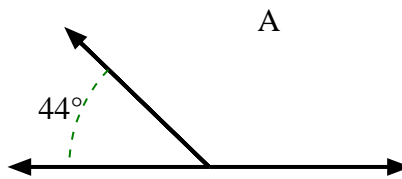


Encuentra el valor de 'A' en el conjunto de ángulos suplementarios.

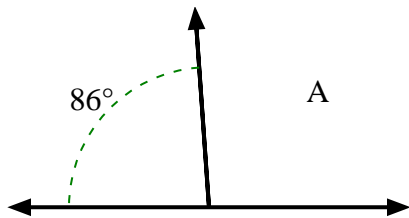
1)



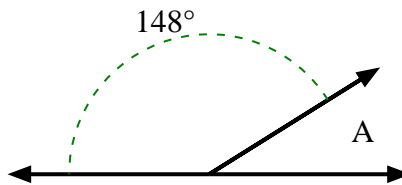
2)



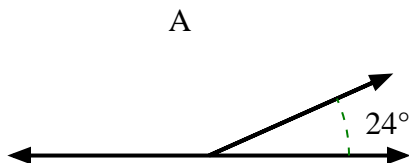
3)



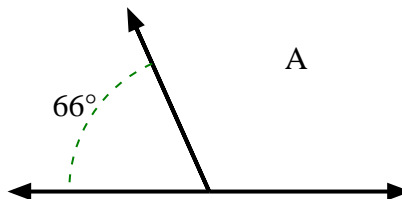
4)



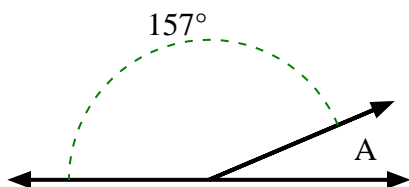
5)



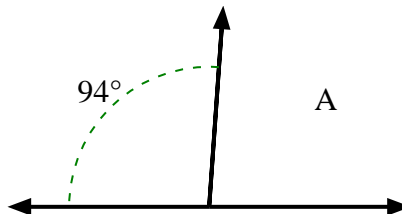
6)



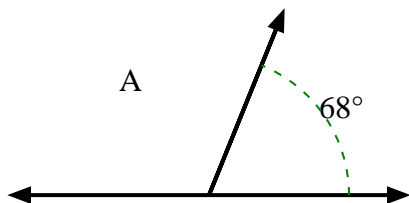
7)



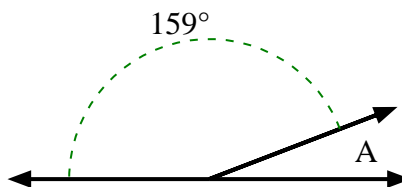
8)



9)



10)



**Respuestas**

1. **146°**

2. **136°**

3. **94°**

4. **32°**

5. **156°**

6. **114°**

7. **23°**

8. **86°**

9. **112°**

10. **21°**