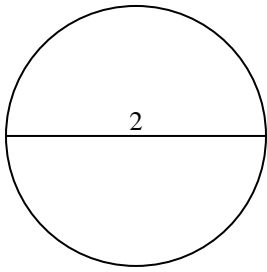


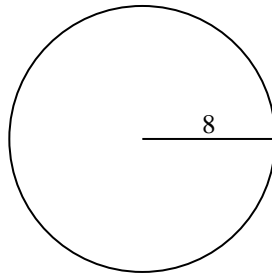


Encuentra el área y circunferencia de cada círculo. Los círculos no están a escala.

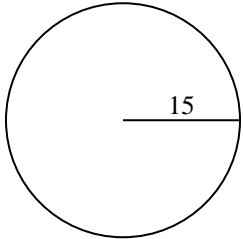
1)



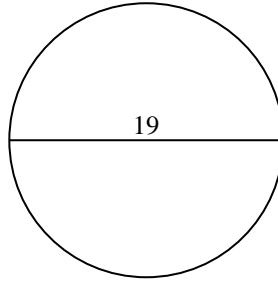
2)



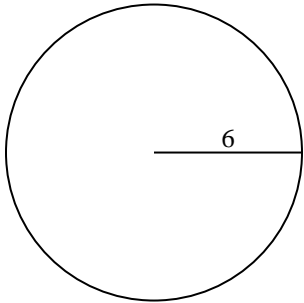
3)



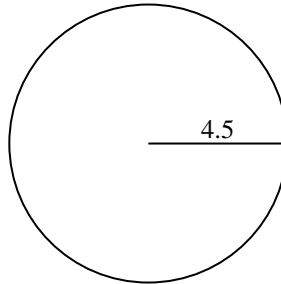
4)



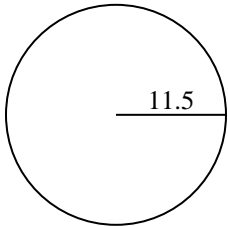
5)



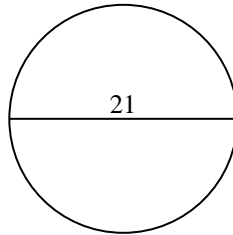
6)



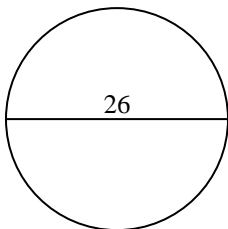
7)



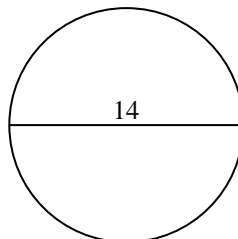
8)



9)



10)

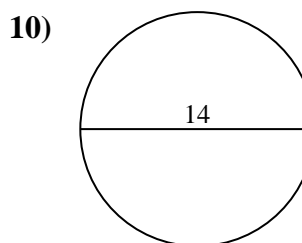
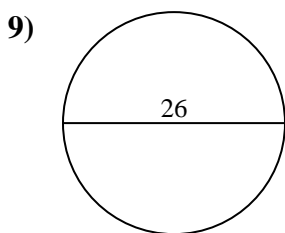
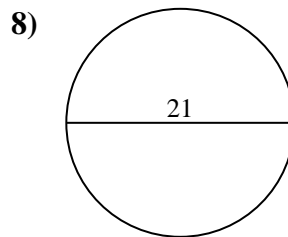
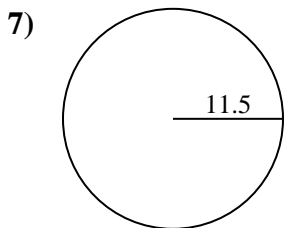
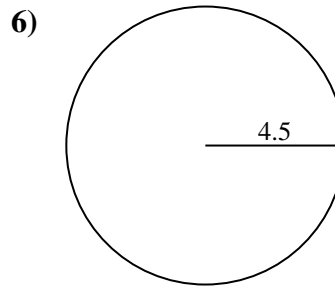
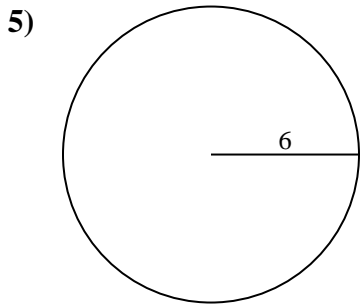
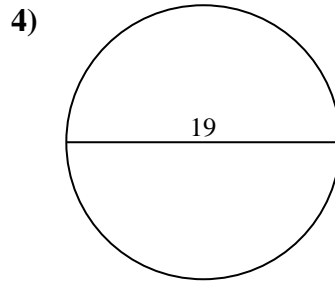
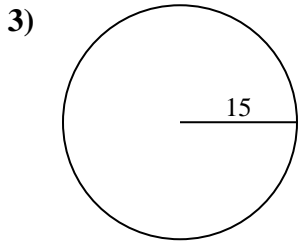
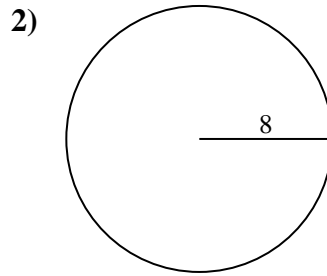
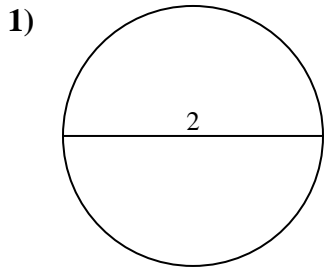


Respuestas

1. _____
2. _____
3. _____
4. _____
5. _____
6. _____
7. _____
8. _____
9. _____
10. _____



Encuentra el área y circunferencia de cada círculo. Los círculos no están a escala.

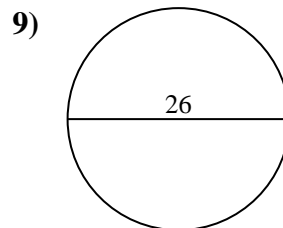
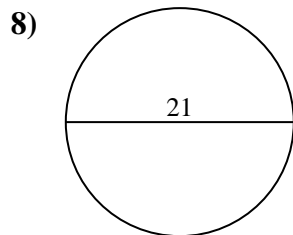
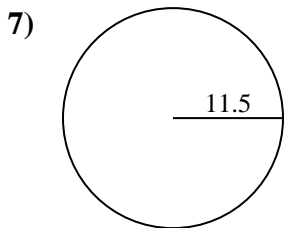
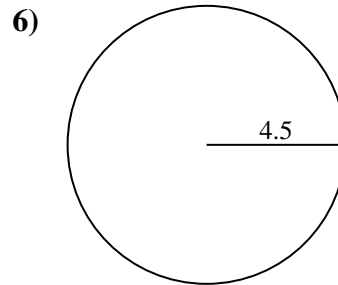
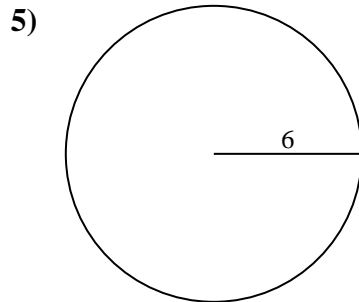
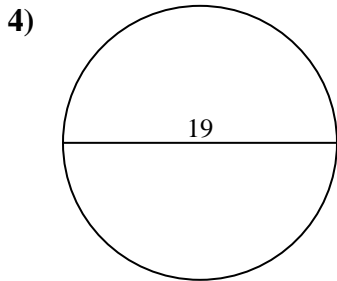
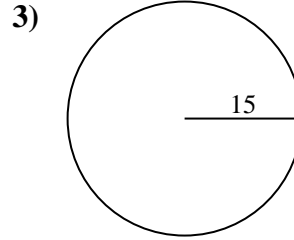
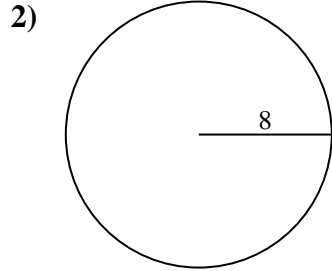
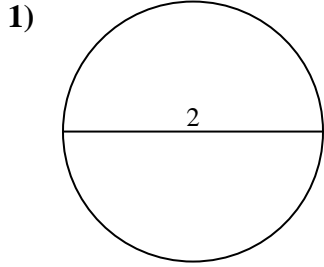
**Respuestas**

1.	<u>3.1</u>	<u>6.3</u>
2.	<u>201.1</u>	<u>50.3</u>
3.	<u>706.9</u>	<u>94.2</u>
4.	<u>283.5</u>	<u>59.7</u>
5.	<u>113.1</u>	<u>37.7</u>
6.	<u>63.6</u>	<u>28.3</u>
7.	<u>415.5</u>	<u>72.3</u>
8.	<u>346.4</u>	<u>66</u>
9.	<u>530.9</u>	<u>81.7</u>
10.	<u>153.9</u>	<u>44</u>



Encuentra el área y circunferencia de cada círculo. Los círculos no están a escala.

81.7	72.3	706.9	346.4	94.2
6.3	530.9	415.5	37.7	66
3.1	28.3	63.6	50.3	201.1
113.1	59.7	283.5		



Respuestas

1. _____
2. _____
3. _____
4. _____
5. _____
6. _____
7. _____
8. _____
9. _____