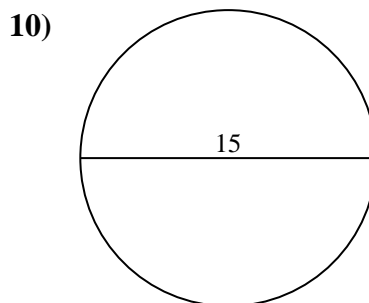
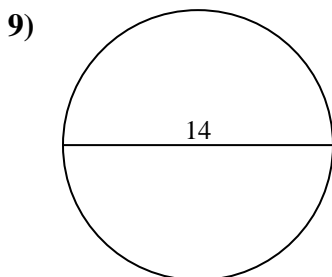
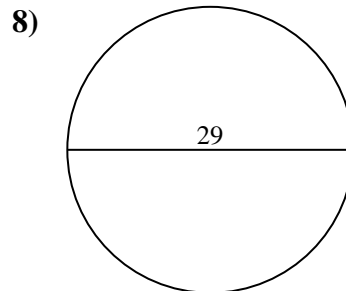
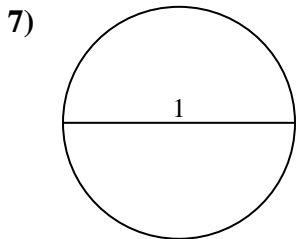
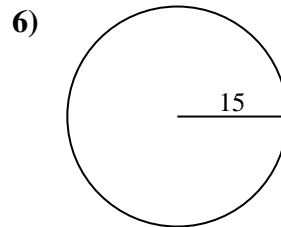
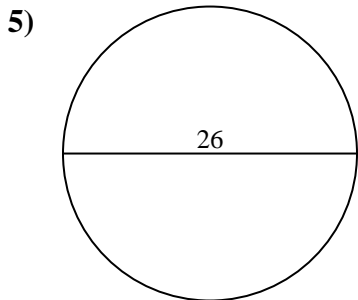
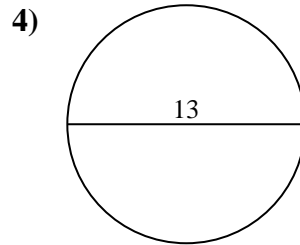
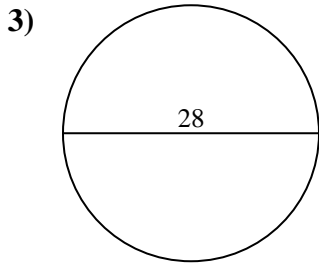
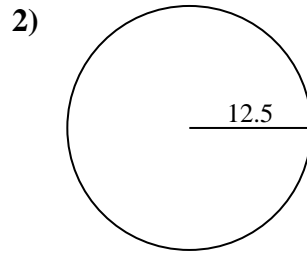
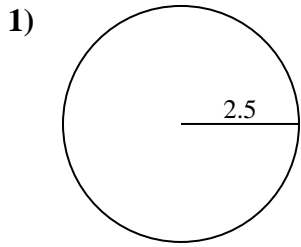




Encuentra el área y circunferencia de cada círculo. Los círculos no están a escala.

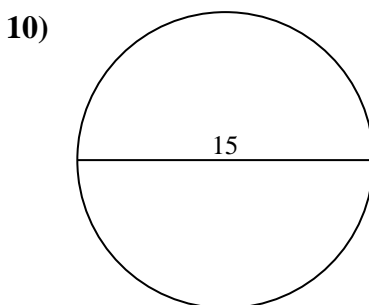
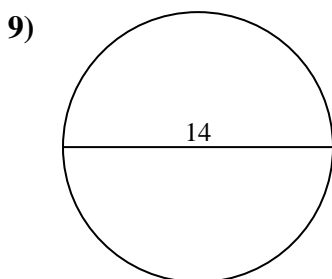
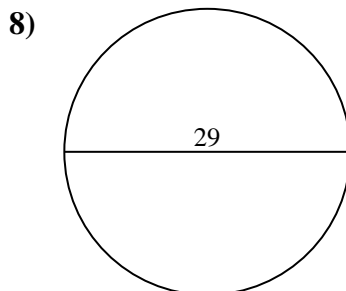
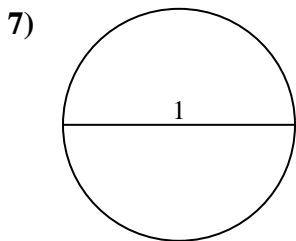
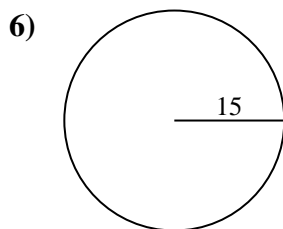
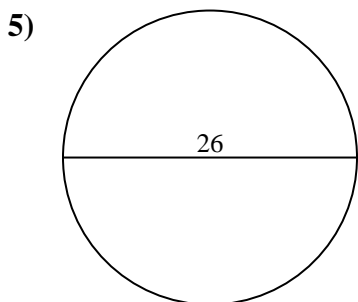
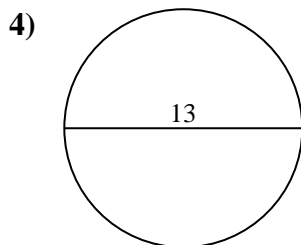
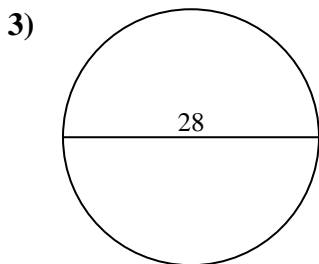
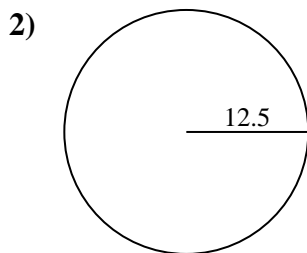
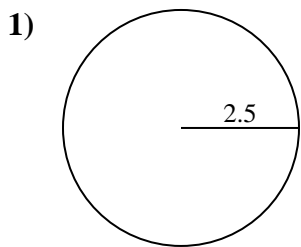


**Respuestas**

- 1. \_\_\_\_\_
- 2. \_\_\_\_\_
- 3. \_\_\_\_\_
- 4. \_\_\_\_\_
- 5. \_\_\_\_\_
- 6. \_\_\_\_\_
- 7. \_\_\_\_\_
- 8. \_\_\_\_\_
- 9. \_\_\_\_\_
- 10. \_\_\_\_\_



Encuentra el área y circunferencia de cada círculo. Los círculos no están a escala.



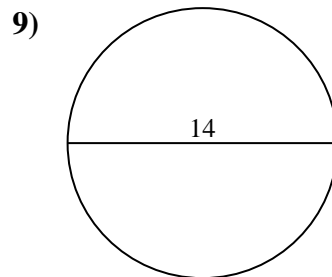
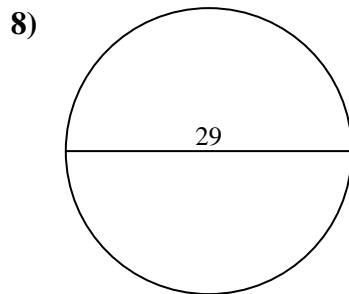
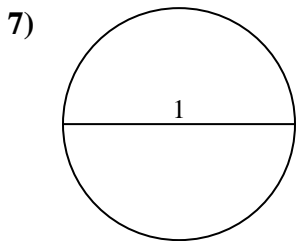
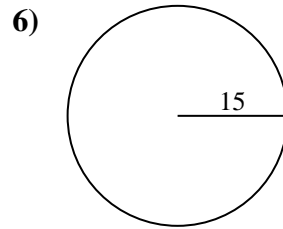
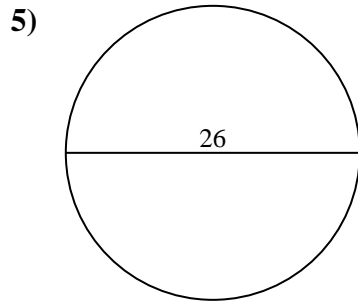
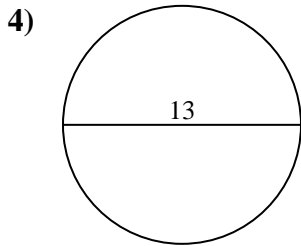
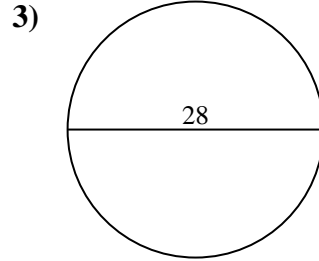
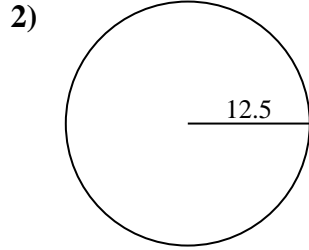
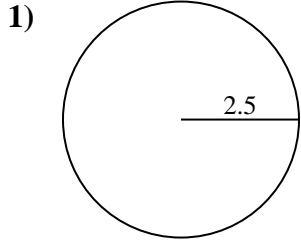
**Respuestas**

1.	<u>19.6</u>	<u>15.7</u>
2.	<u>490.9</u>	<u>78.5</u>
3.	<u>615.8</u>	<u>88</u>
4.	<u>132.7</u>	<u>40.8</u>
5.	<u>530.9</u>	<u>81.7</u>
6.	<u>706.9</u>	<u>94.2</u>
7.	<u>0.8</u>	<u>3.1</u>
8.	<u>660.5</u>	<u>91.1</u>
9.	<u>153.9</u>	<u>44</u>
10.	<u>176.7</u>	<u>47.1</u>



Encuentra el área y circunferencia de cada círculo. Los círculos no están a escala.

490.9	78.5	15.7	88	530.9
0.8	153.9	44	660.5	3.1
615.8	81.7	94.2	91.1	19.6
706.9	132.7	40.8		



**Respuestas**

1. \_\_\_\_\_
2. \_\_\_\_\_
3. \_\_\_\_\_
4. \_\_\_\_\_
5. \_\_\_\_\_
6. \_\_\_\_\_
7. \_\_\_\_\_
8. \_\_\_\_\_
9. \_\_\_\_\_