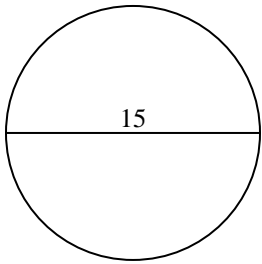


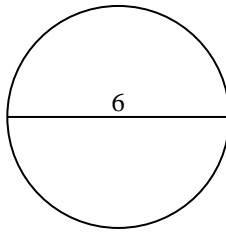


Encuentra el área y circunferencia de cada círculo. Los círculos no están a escala.

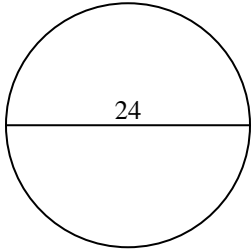
1)



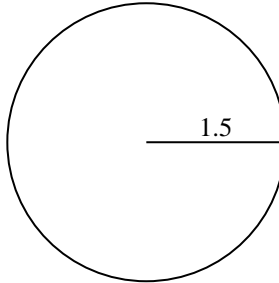
2)



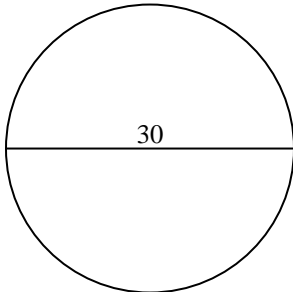
3)



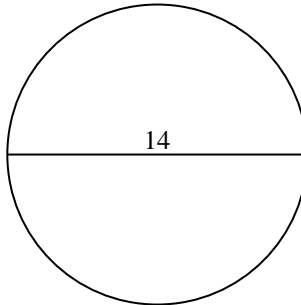
4)



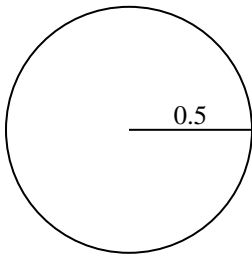
5)



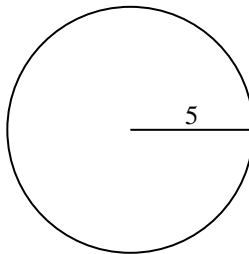
6)



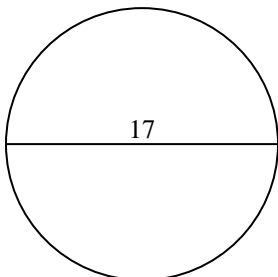
7)



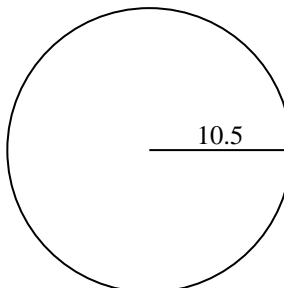
8)



9)



10)

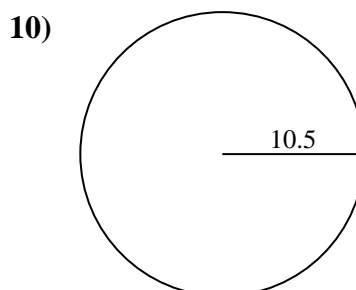
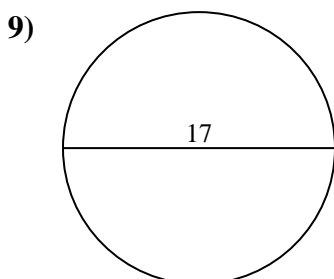
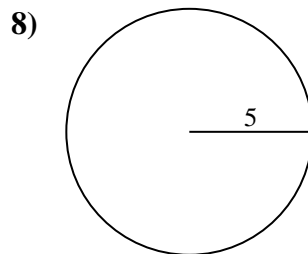
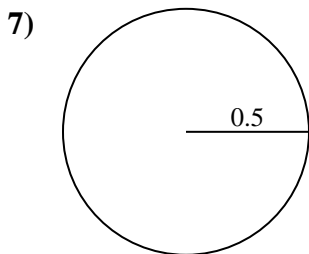
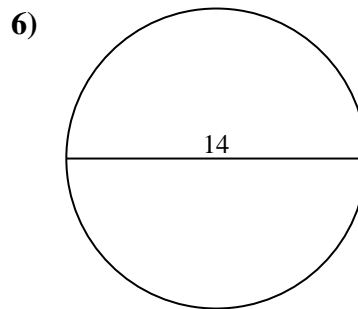
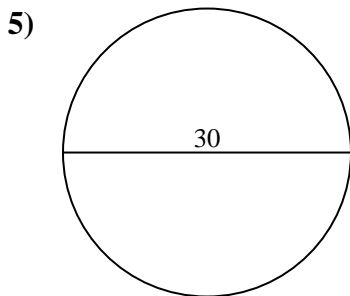
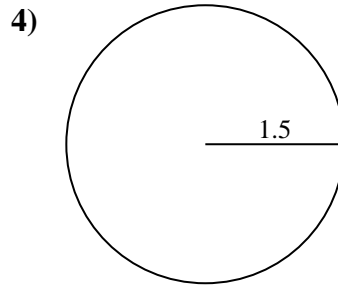
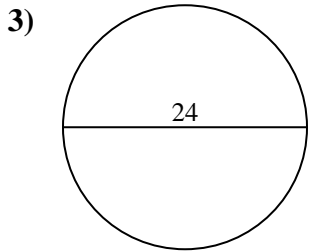
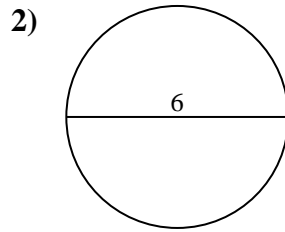
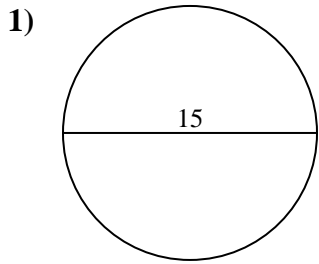


Respuestas

- 1. _____
- 2. _____
- 3. _____
- 4. _____
- 5. _____
- 6. _____
- 7. _____
- 8. _____
- 9. _____
- 10. _____



Encuentra el área y circunferencia de cada círculo. Los círculos no están a escala.

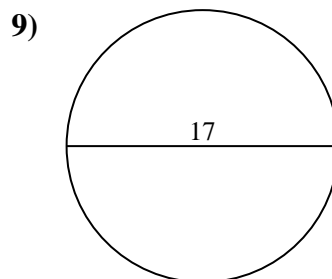
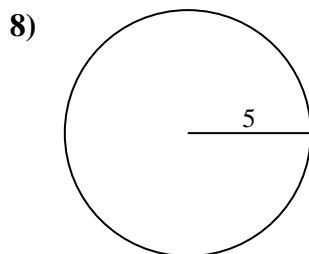
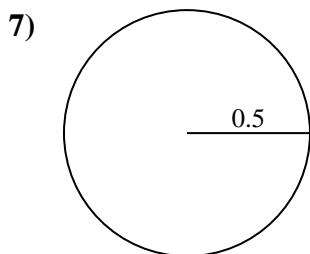
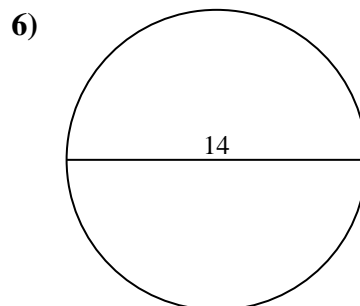
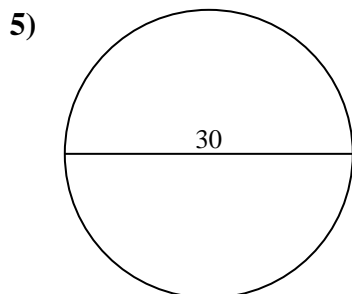
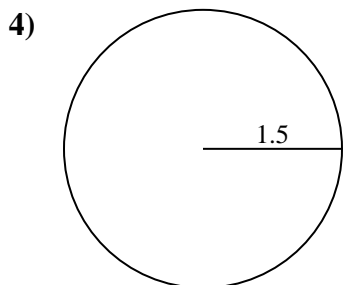
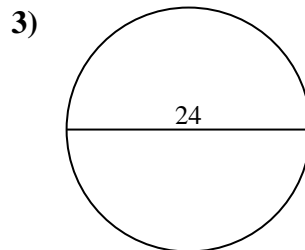
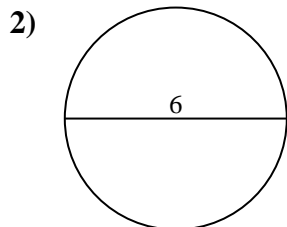
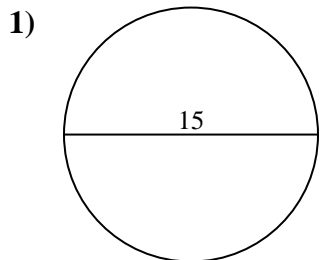
**Respuestas**

1.	<u>176.7</u>	<u>47.1</u>
2.	<u>28.3</u>	<u>18.8</u>
3.	<u>452.4</u>	<u>75.4</u>
4.	<u>7.1</u>	<u>9.4</u>
5.	<u>706.9</u>	<u>94.2</u>
6.	<u>153.9</u>	<u>44</u>
7.	<u>0.8</u>	<u>3.1</u>
8.	<u>78.5</u>	<u>31.4</u>
9.	<u>227</u>	<u>53.4</u>
10.	<u>346.4</u>	<u>66</u>



Encuentra el área y circunferencia de cada círculo. Los círculos no están a escala.

78.5	75.4	7.1	18.8	53.4
31.4	28.3	153.9	3.1	9.4
176.7	0.8	452.4	706.9	47.1
227	44	94.2		



Respuestas

1. _____
2. _____
3. _____
4. _____
5. _____
6. _____
7. _____
8. _____
9. _____