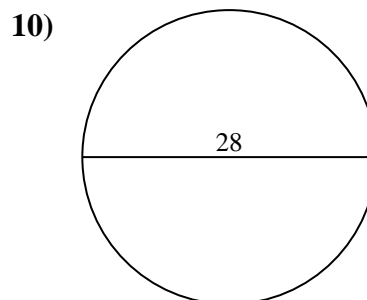
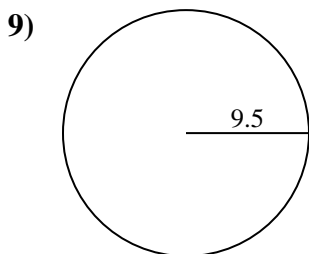
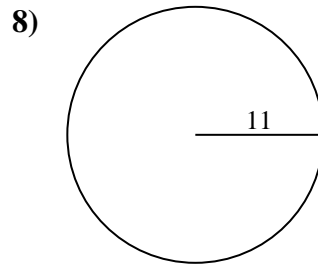
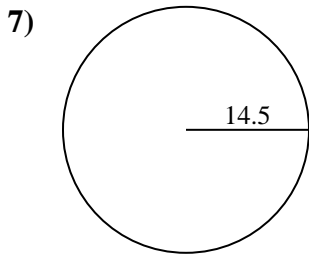
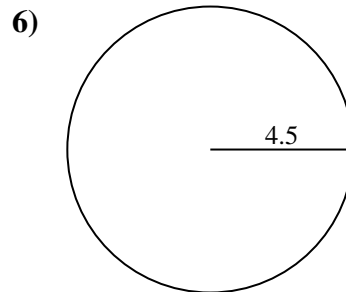
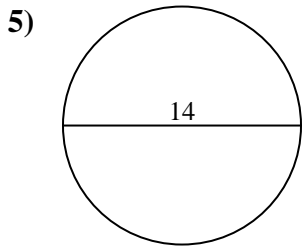
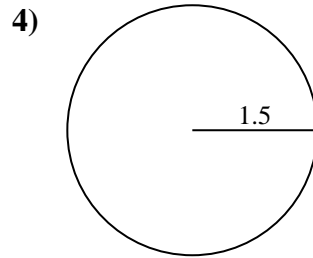
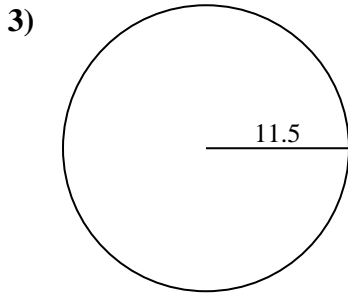
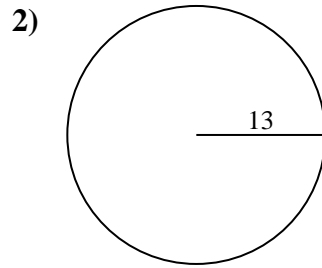
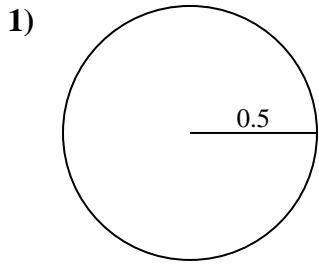




Encuentra el área y circunferencia de cada círculo. Los círculos no están a escala.

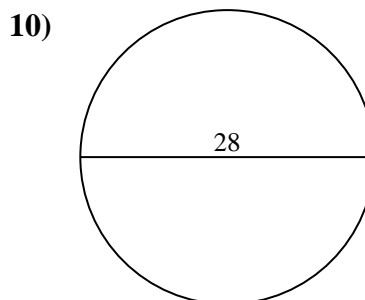
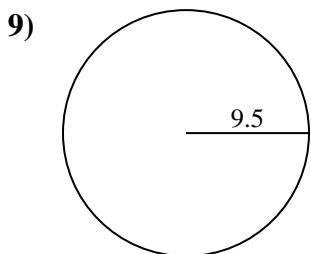
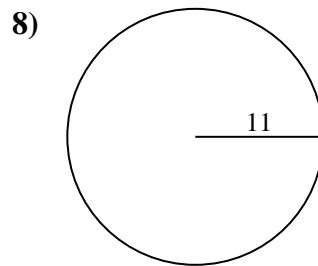
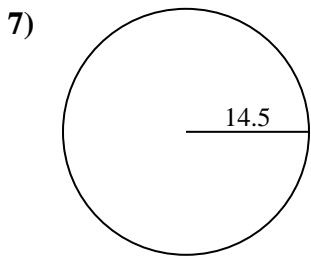
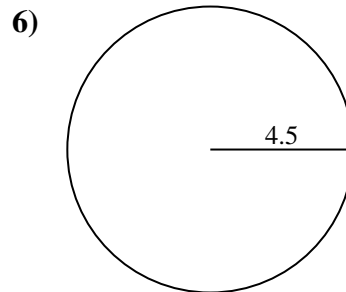
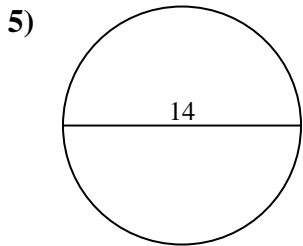
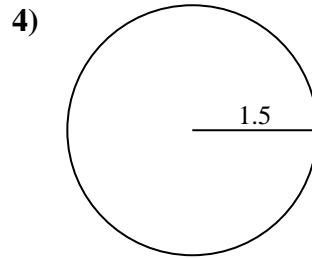
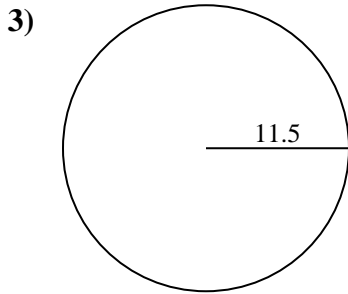
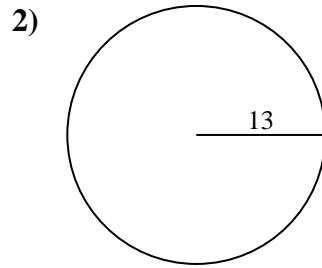
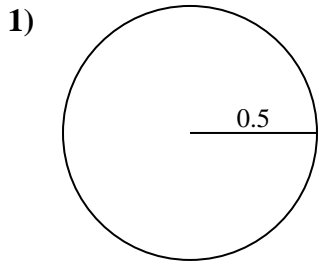


Respuestas

- 1. _____
- 2. _____
- 3. _____
- 4. _____
- 5. _____
- 6. _____
- 7. _____
- 8. _____
- 9. _____
- 10. _____



Encuentra el área y circunferencia de cada círculo. Los círculos no están a escala.



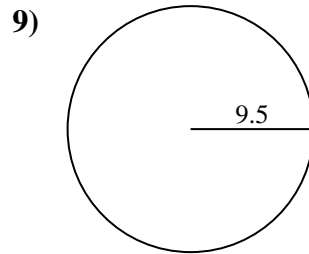
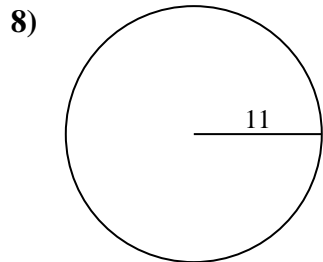
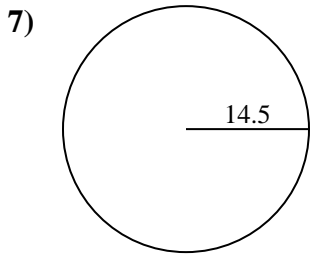
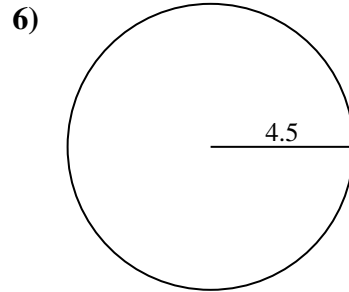
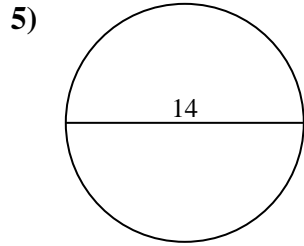
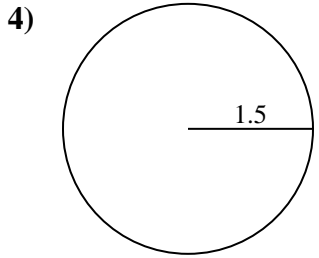
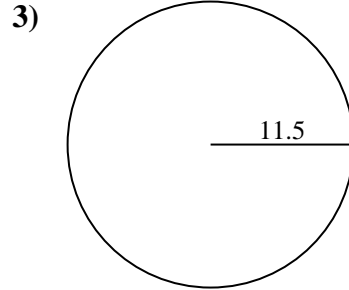
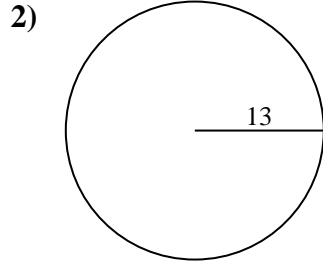
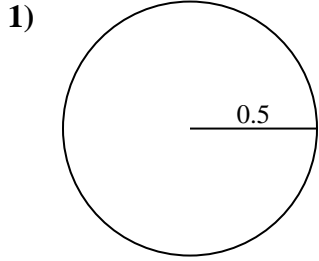
Respuestas

1.	<u>0.8</u>	<u>3.1</u>
2.	<u>530.9</u>	<u>81.7</u>
3.	<u>415.5</u>	<u>72.3</u>
4.	<u>7.1</u>	<u>9.4</u>
5.	<u>153.9</u>	<u>44</u>
6.	<u>63.6</u>	<u>28.3</u>
7.	<u>660.5</u>	<u>91.1</u>
8.	<u>380.1</u>	<u>69.1</u>
9.	<u>283.5</u>	<u>59.7</u>
10.	<u>615.8</u>	<u>88</u>



Encuentra el área y circunferencia de cada círculo. Los círculos no están a escala.

44	9.4	3.1	153.9	380.1
530.9	415.5	59.7	72.3	660.5
28.3	63.6	283.5	0.8	69.1
81.7	91.1	7.1		



Respuestas

1. _____
2. _____
3. _____
4. _____
5. _____
6. _____
7. _____
8. _____
9. _____