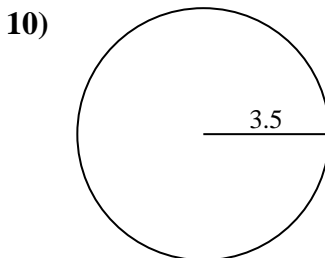
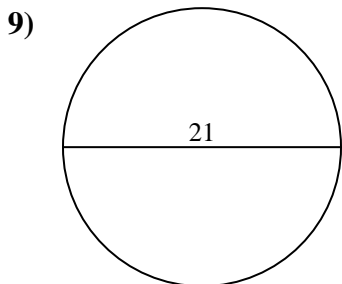
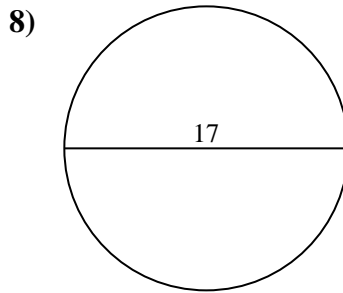
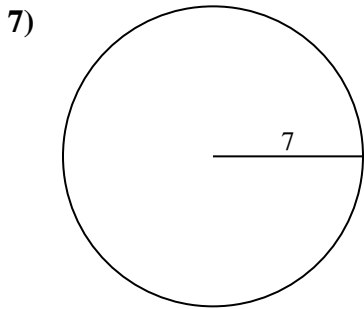
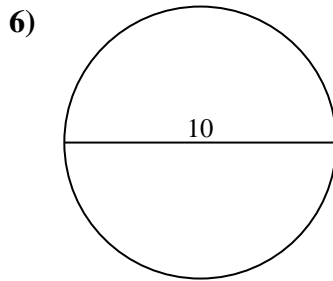
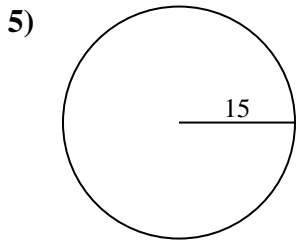
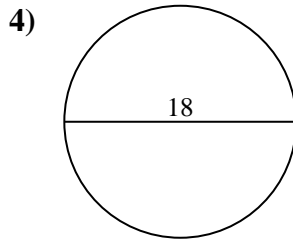
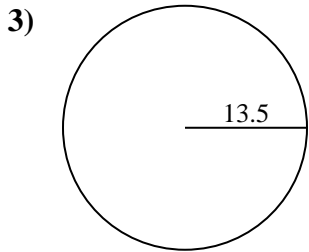
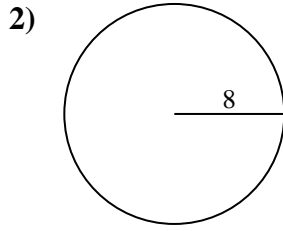
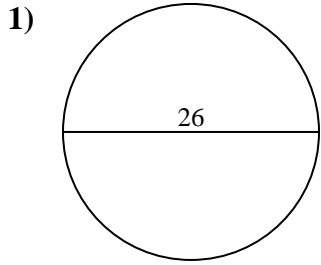




Encuentra el área de cada círculo. Los círculos no están a escala.

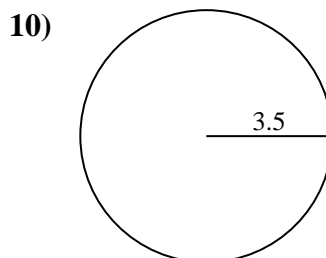
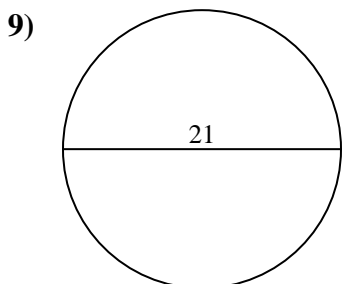
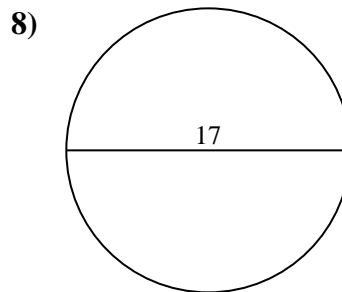
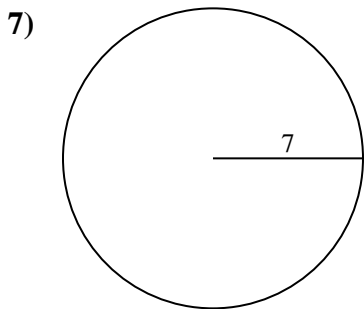
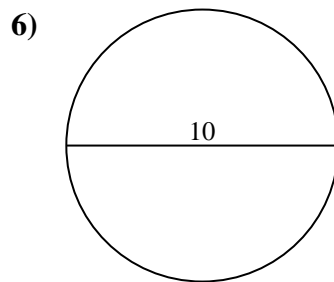
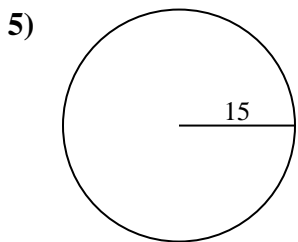
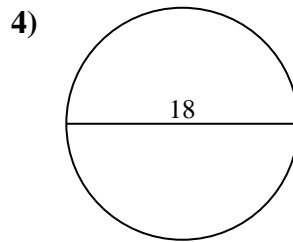
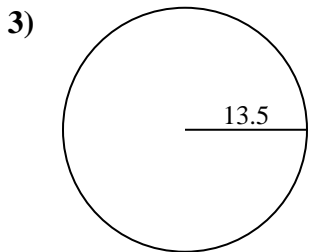
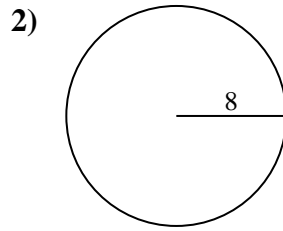
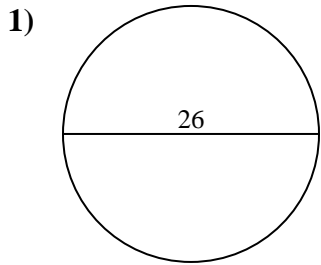
**Respuestas**



- 1. \_\_\_\_\_
- 2. \_\_\_\_\_
- 3. \_\_\_\_\_
- 4. \_\_\_\_\_
- 5. \_\_\_\_\_
- 6. \_\_\_\_\_
- 7. \_\_\_\_\_
- 8. \_\_\_\_\_
- 9. \_\_\_\_\_
- 10. \_\_\_\_\_



Encuentra el área de cada círculo. Los círculos no están a escala.



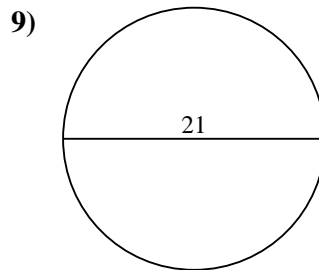
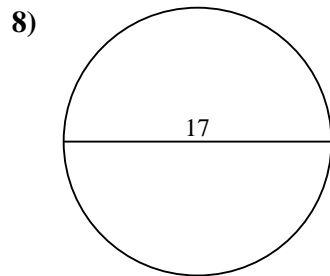
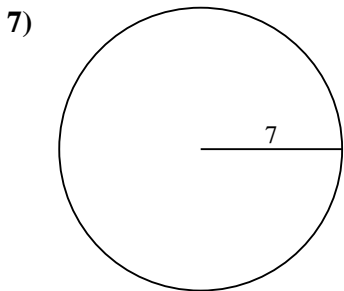
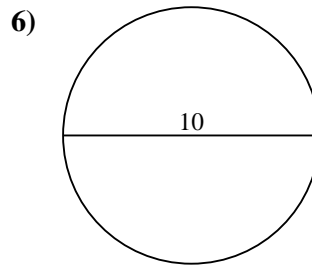
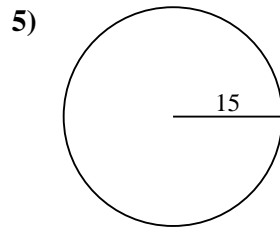
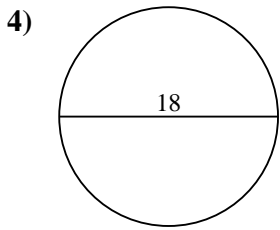
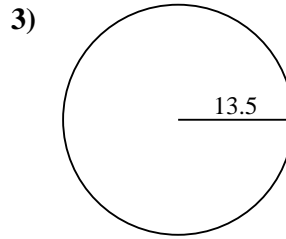
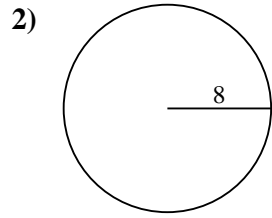
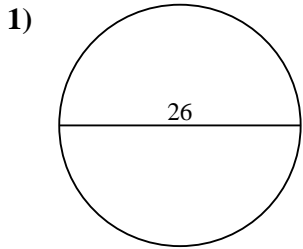
**Respuestas**

1. 530.9
2. 201.1
3. 572.6
4. 254.5
5. 706.9
6. 78.5
7. 153.9
8. 227
9. 346.4
10. 38.5



Encuentra el área de cada círculo. Los círculos no están a escala.

572.6	78.5	227	346.4	530.9
153.9	201.1	706.9	254.5	



**Respuestas**

1. \_\_\_\_\_
2. \_\_\_\_\_
3. \_\_\_\_\_
4. \_\_\_\_\_
5. \_\_\_\_\_
6. \_\_\_\_\_
7. \_\_\_\_\_
8. \_\_\_\_\_
9. \_\_\_\_\_