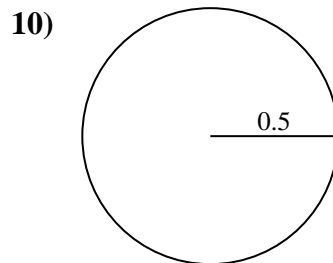
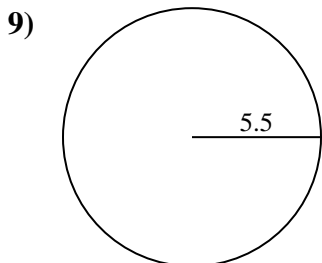
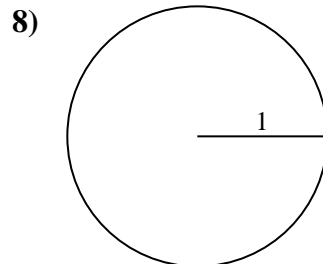
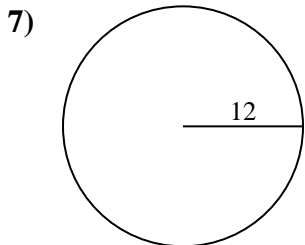
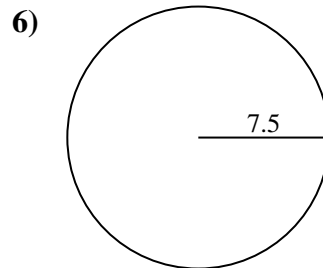
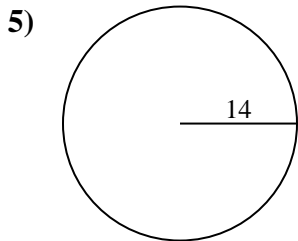
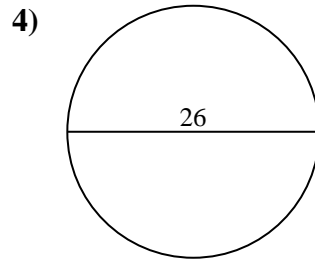
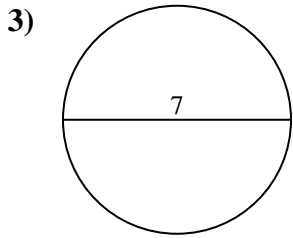
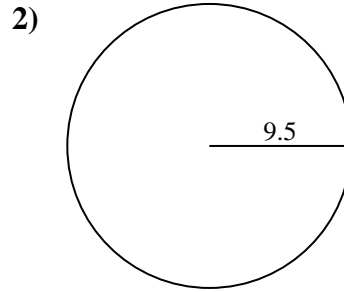
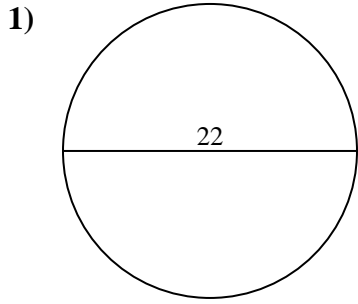




Encuentra el área de cada círculo. Los círculos no están a escala.

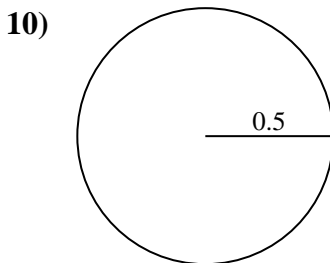
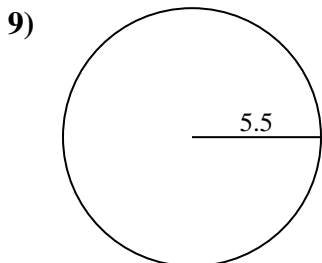
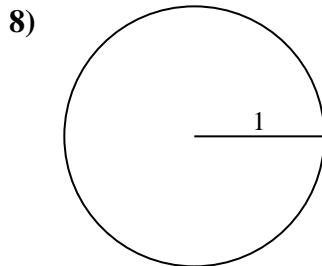
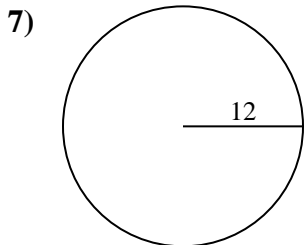
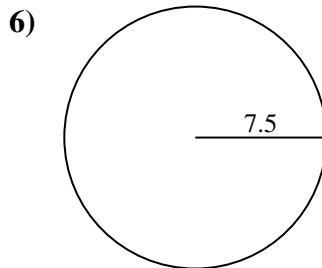
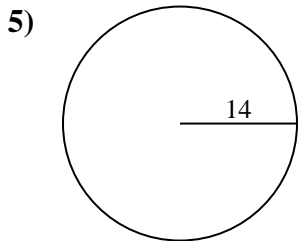
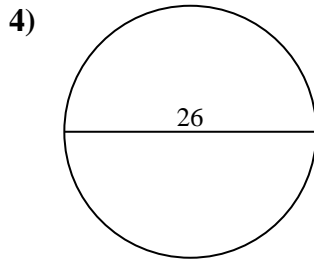
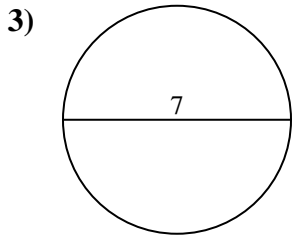
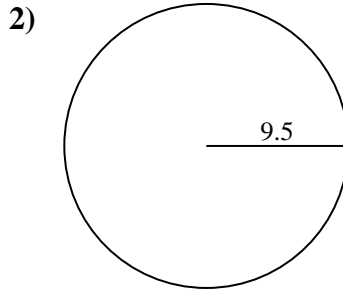
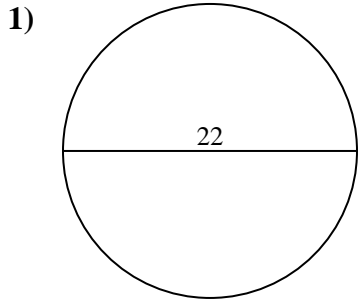


Respuestas

- 1. _____
- 2. _____
- 3. _____
- 4. _____
- 5. _____
- 6. _____
- 7. _____
- 8. _____
- 9. _____
- 10. _____



Encuentra el área de cada círculo. Los círculos no están a escala.



Respuestas

1. **380.1**

2. **283.5**

3. **38.5**

4. **530.9**

5. **615.8**

6. **176.7**

7. **452.4**

8. **3.1**

9. **95**

10. **0.8**



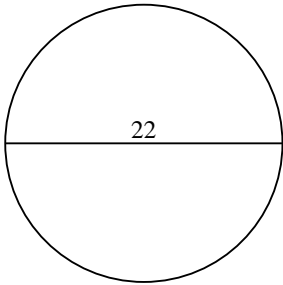
Encuentra el área de cada círculo. Los círculos no están a escala.

176.7	38.5	530.9	283.5	95
615.8	3.1	452.4	380.1	

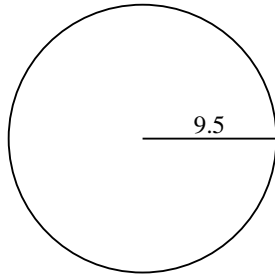
Respuestas

1. _____
2. _____
3. _____
4. _____
5. _____
6. _____
7. _____
8. _____
9. _____

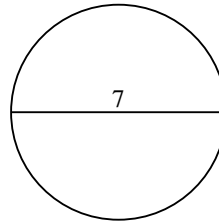
1)



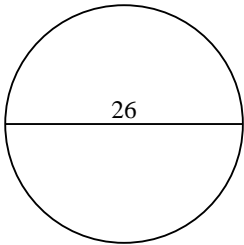
2)



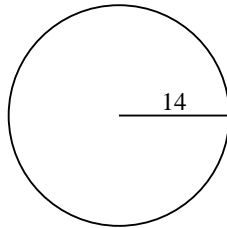
3)



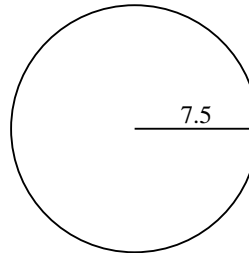
4)



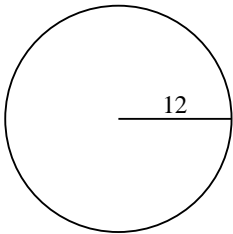
5)



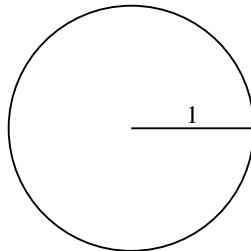
6)



7)



8)



9)

