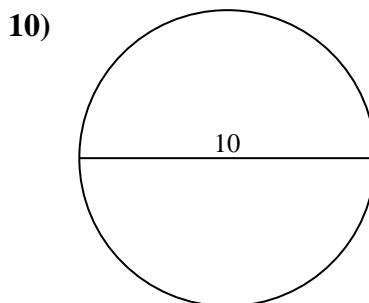
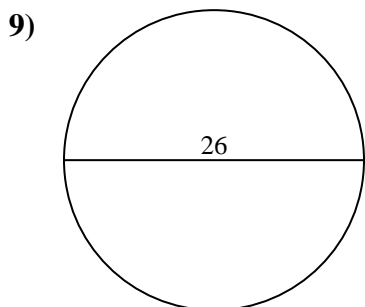
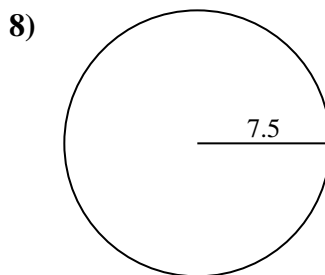
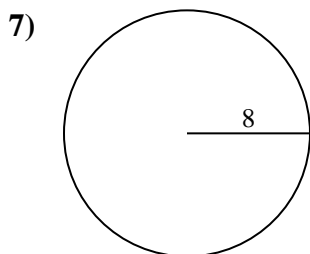
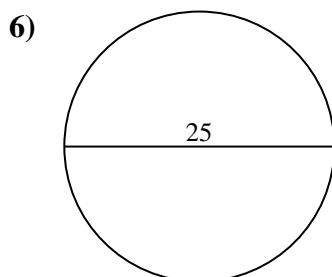
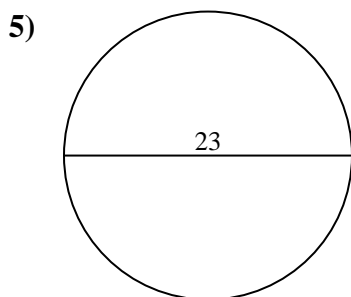
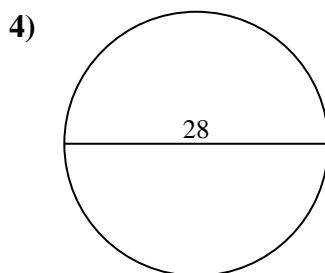
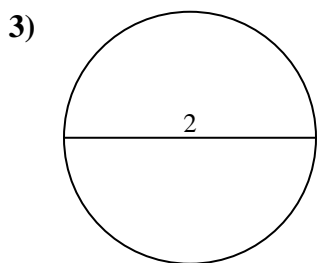
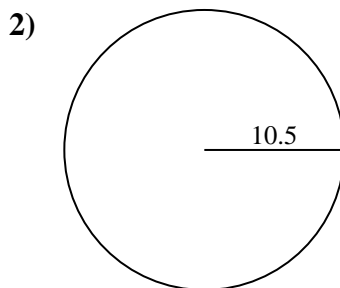
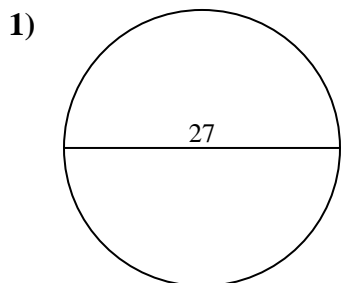




Encuentra el área de cada círculo. Los círculos no están a escala.

Respuestas

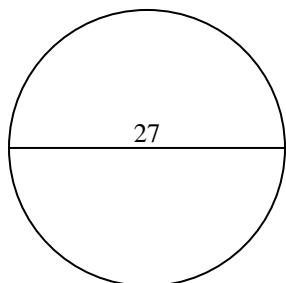


- 1. _____
- 2. _____
- 3. _____
- 4. _____
- 5. _____
- 6. _____
- 7. _____
- 8. _____
- 9. _____
- 10. _____

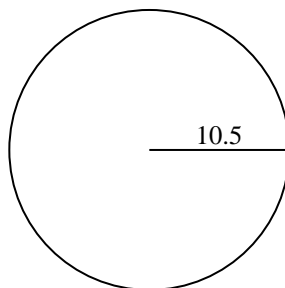


Encuentra el área de cada círculo. Los círculos no están a escala.

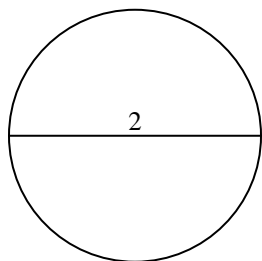
1)



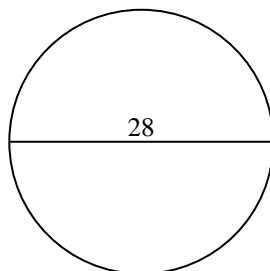
2)



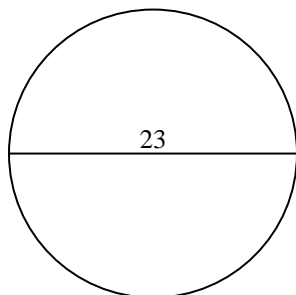
3)



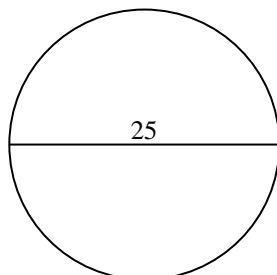
4)



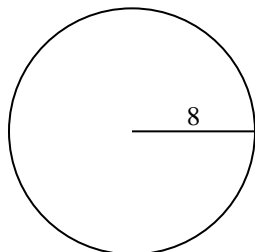
5)



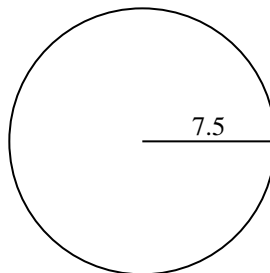
6)



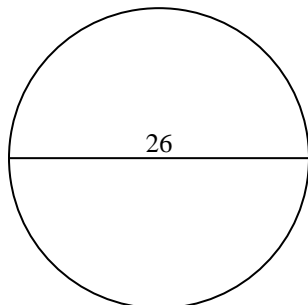
7)



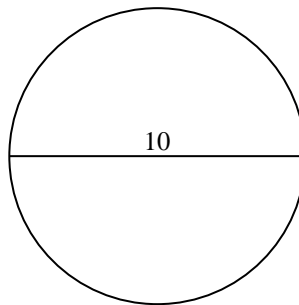
8)



9)



10)

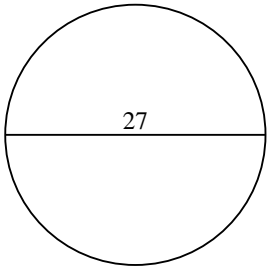
**Respuestas**1. 572.62. 346.43. 3.14. 615.85. 415.56. 490.97. 201.18. 176.79. 530.910. 78.5



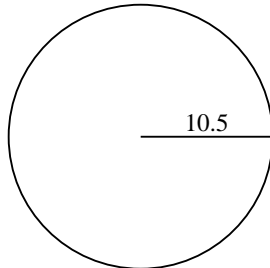
Encuentra el área de cada círculo. Los círculos no están a escala.

530.9	3.1	615.8	201.1	490.9
572.6	415.5	176.7	346.4	

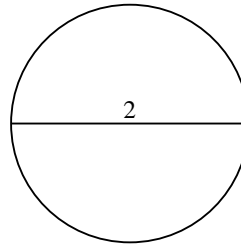
1)



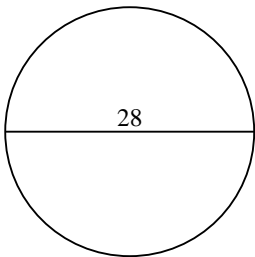
2)



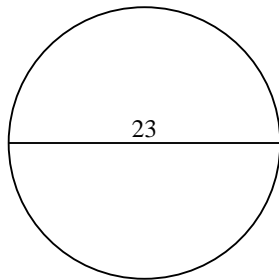
3)



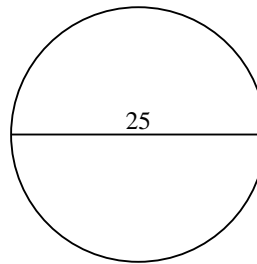
4)



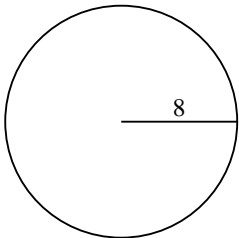
5)



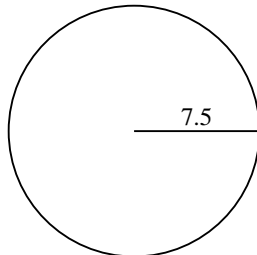
6)



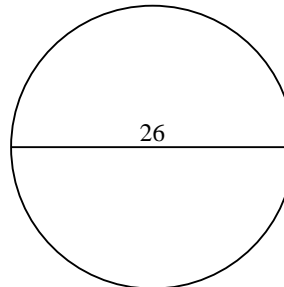
7)



8)



9)



Respuestas

1. _____
2. _____
3. _____
4. _____
5. _____
6. _____
7. _____
8. _____
9. _____