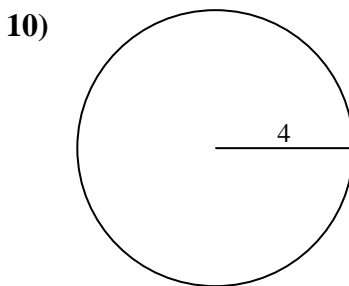
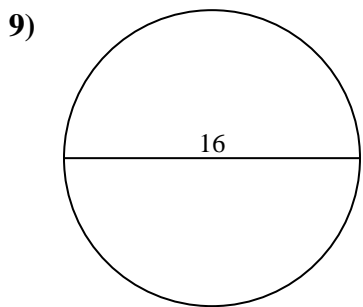
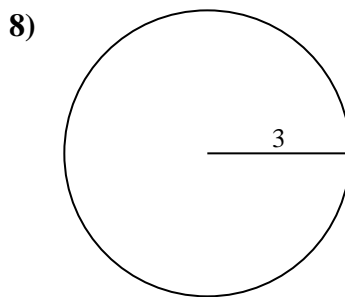
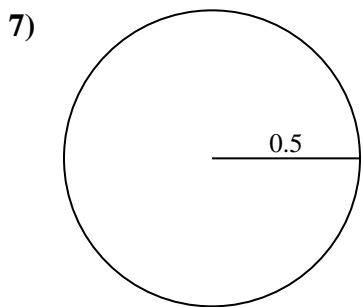
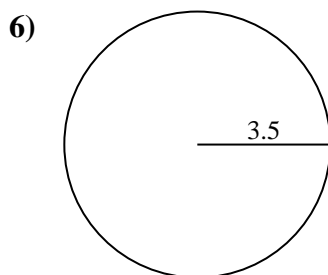
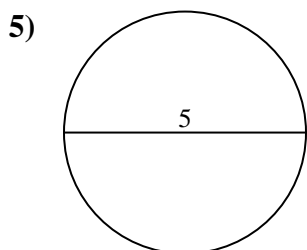
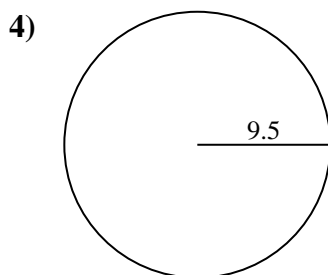
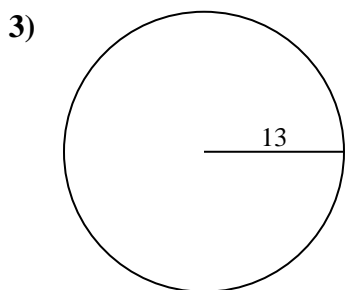
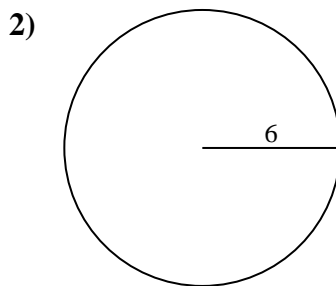
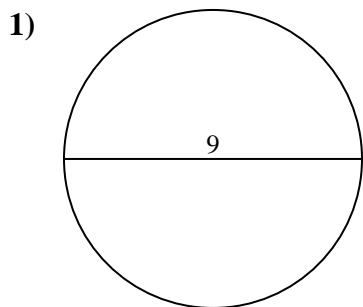




Encuentra el área de cada círculo. Los círculos no están a escala.

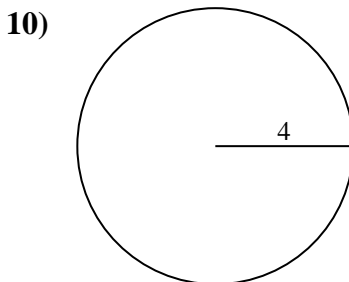
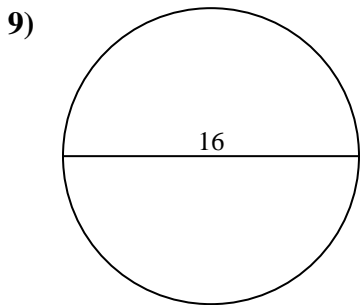
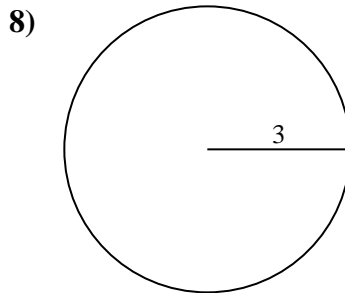
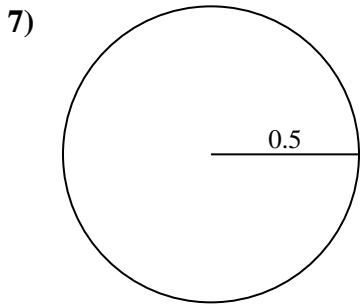
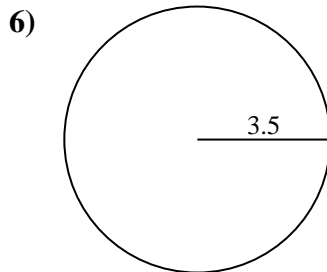
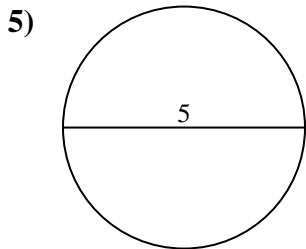
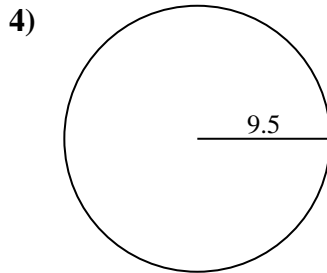
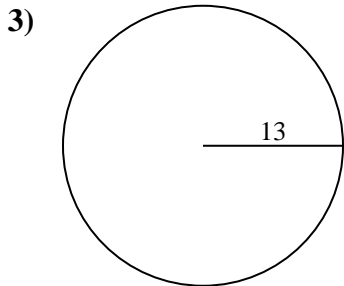
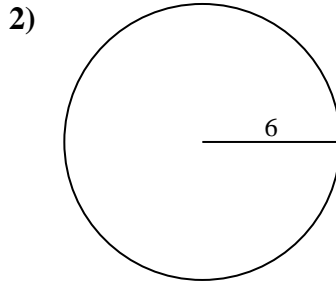
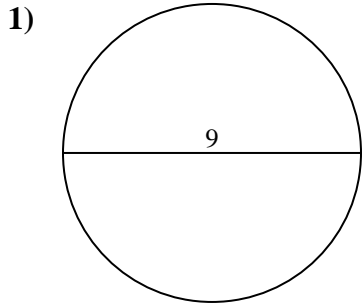
**Respuestas**



- 1. \_\_\_\_\_
- 2. \_\_\_\_\_
- 3. \_\_\_\_\_
- 4. \_\_\_\_\_
- 5. \_\_\_\_\_
- 6. \_\_\_\_\_
- 7. \_\_\_\_\_
- 8. \_\_\_\_\_
- 9. \_\_\_\_\_
- 10. \_\_\_\_\_



Encuentra el área de cada círculo. Los círculos no están a escala.



**Respuestas**

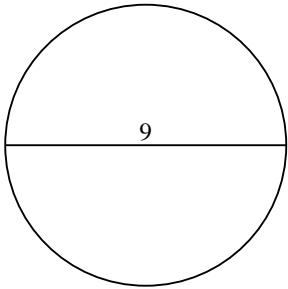
- 1. 63.6
- 2. 113.1
- 3. 530.9
- 4. 283.5
- 5. 19.6
- 6. 38.5
- 7. 0.8
- 8. 28.3
- 9. 201.1
- 10. 50.3



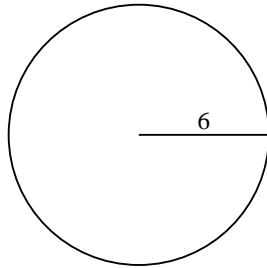
Encuentra el área de cada círculo. Los círculos no están a escala.

28.3	113.1	201.1	38.5	283.5
0.8	19.6	63.6	530.9	

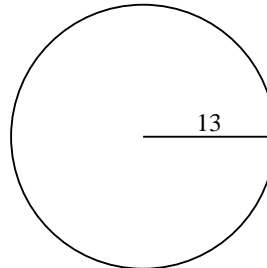
1)



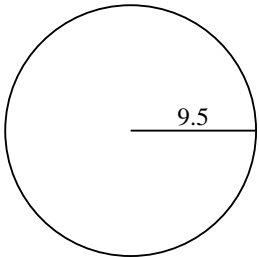
2)



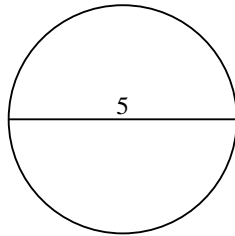
3)



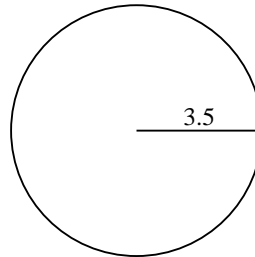
4)



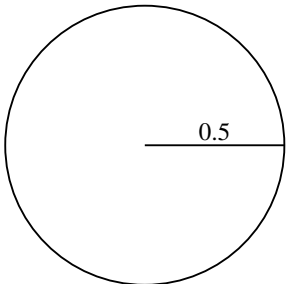
5)



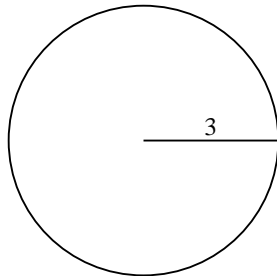
6)



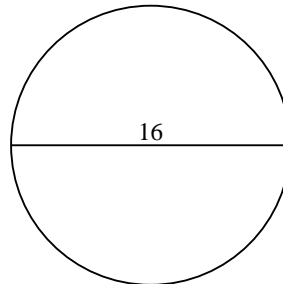
7)



8)



9)



**Respuestas**

1. \_\_\_\_\_
2. \_\_\_\_\_
3. \_\_\_\_\_
4. \_\_\_\_\_
5. \_\_\_\_\_
6. \_\_\_\_\_
7. \_\_\_\_\_
8. \_\_\_\_\_
9. \_\_\_\_\_