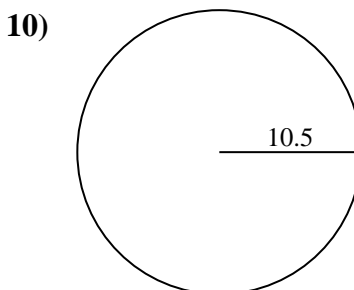
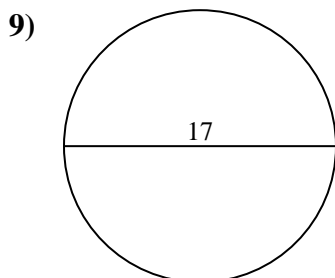
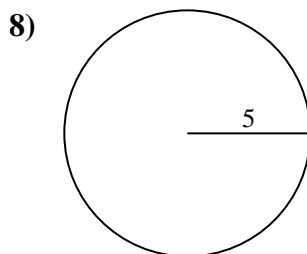
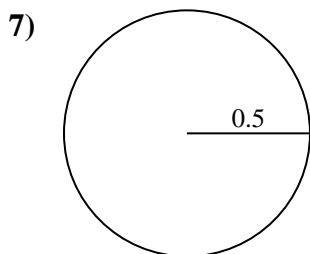
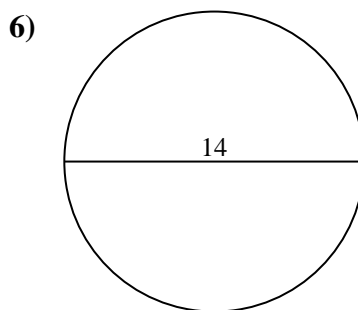
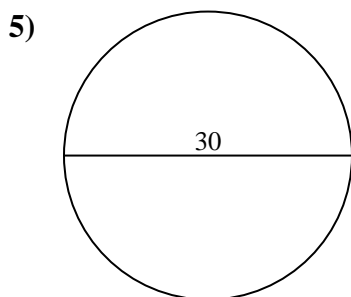
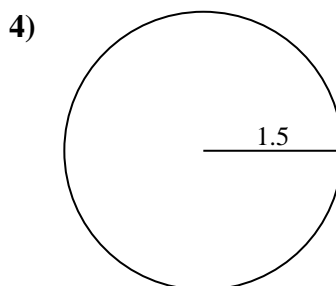
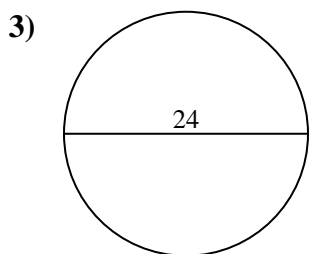
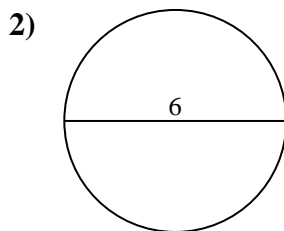
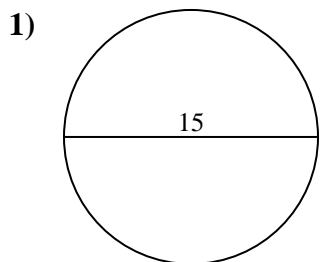




Encuentra el área de cada círculo. Los círculos no están a escala.

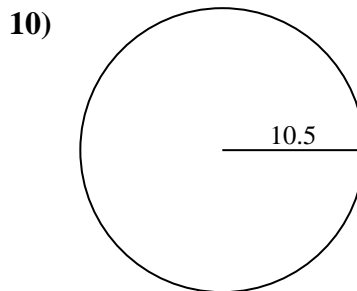
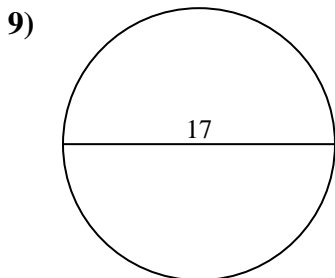
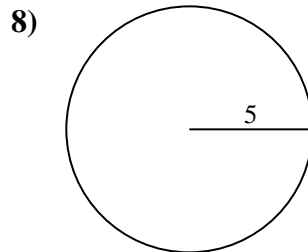
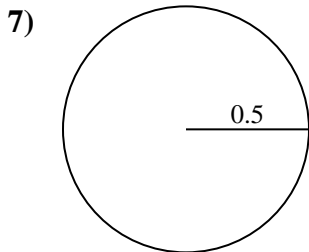
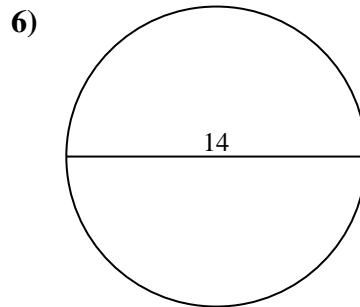
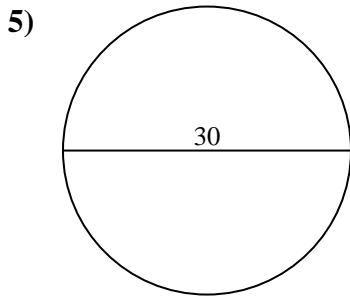
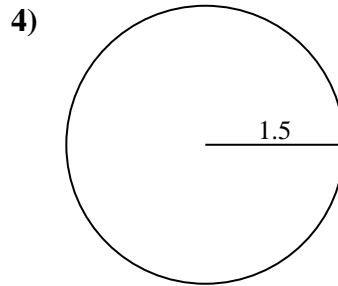
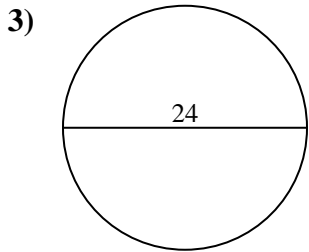
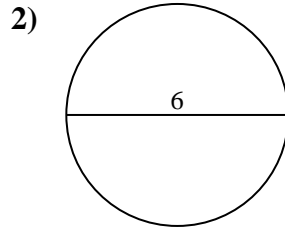
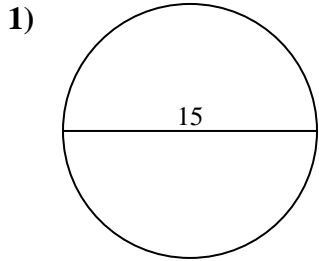


Respuestas

- 1. _____
- 2. _____
- 3. _____
- 4. _____
- 5. _____
- 6. _____
- 7. _____
- 8. _____
- 9. _____
- 10. _____



Encuentra el área de cada círculo. Los círculos no están a escala.



Respuestas

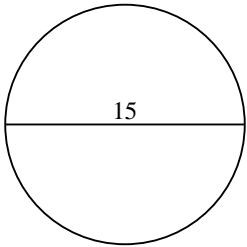
- 1. 176.7
- 2. 28.3
- 3. 452.4
- 4. 7.1
- 5. 706.9
- 6. 153.9
- 7. 0.8
- 8. 78.5
- 9. 227
- 10. 346.4



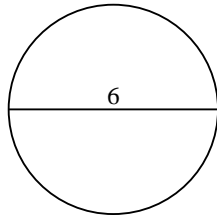
Encuentra el área de cada círculo. Los círculos no están a escala.

452.4	0.8	153.9	7.1	227
28.3	78.5	706.9	176.7	

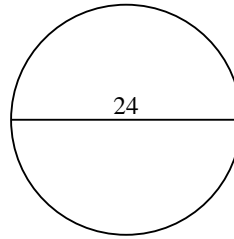
1)



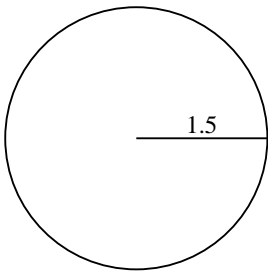
2)



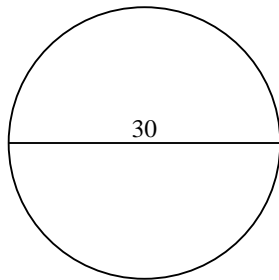
3)



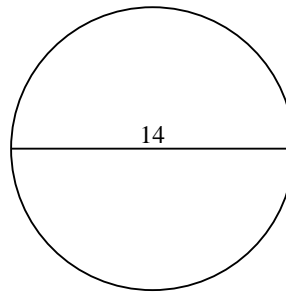
4)



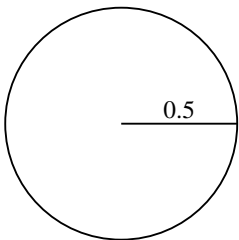
5)



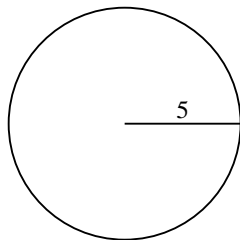
6)



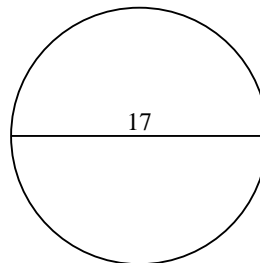
7)



8)



9)



Respuestas

1. _____
2. _____
3. _____
4. _____
5. _____
6. _____
7. _____
8. _____
9. _____