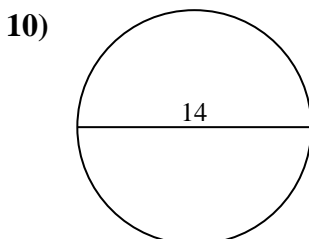
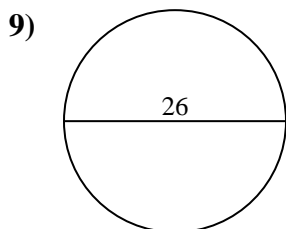
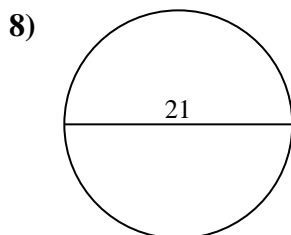
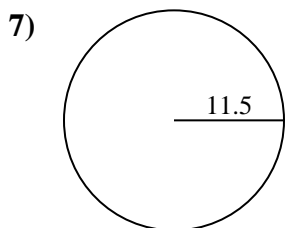
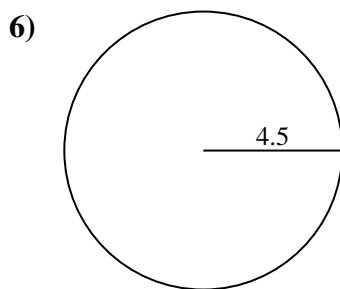
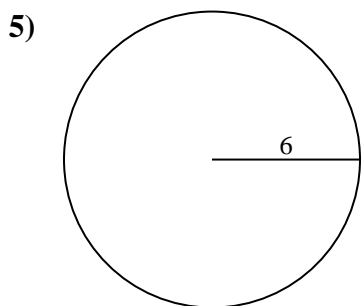
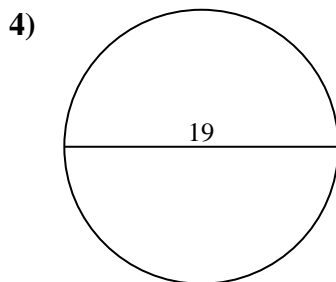
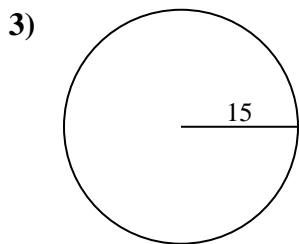
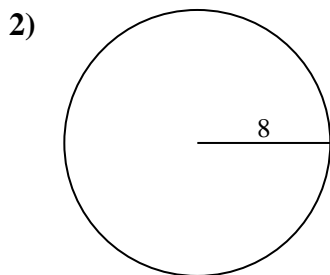
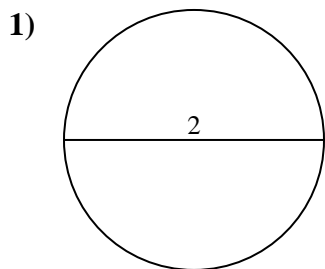




Encuentra el área de cada círculo. Los círculos no están a escala.

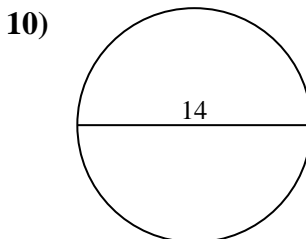
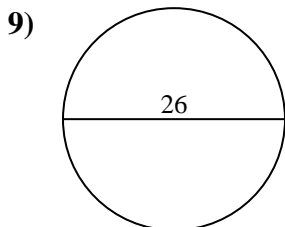
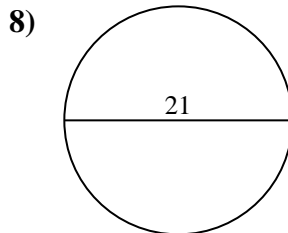
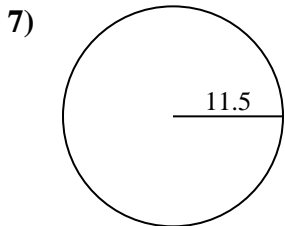
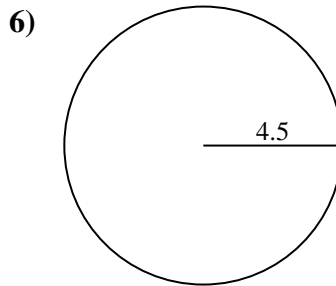
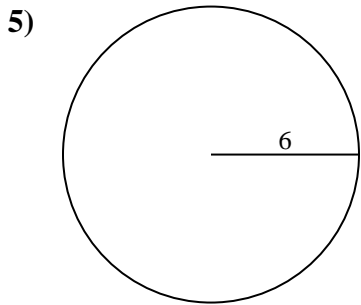
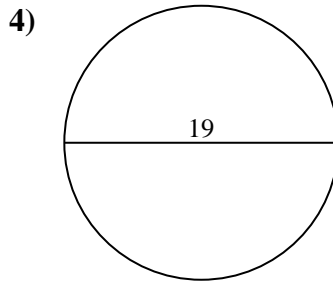
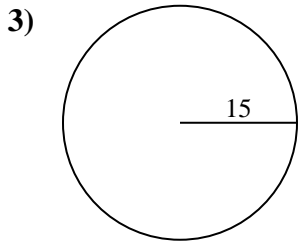
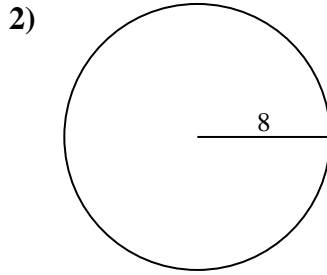
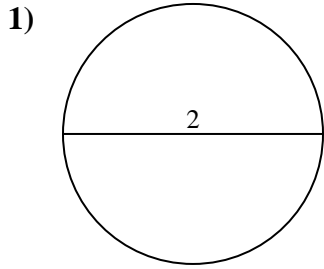


Respuestas

- 1. _____
- 2. _____
- 3. _____
- 4. _____
- 5. _____
- 6. _____
- 7. _____
- 8. _____
- 9. _____
- 10. _____



Encuentra el área de cada círculo. Los círculos no están a escala.



Respuestas

1. 3.1

2. 201.1

3. 706.9

4. 283.5

5. 113.1

6. 63.6

7. 415.5

8. 346.4

9. 530.9

10. 153.9



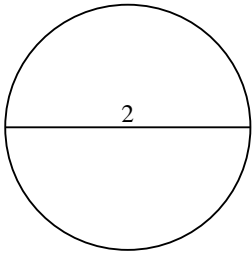
Encuentra el área de cada círculo. Los círculos no están a escala.

201.1	3.1	283.5	346.4	63.6
706.9	113.1	530.9	415.5	

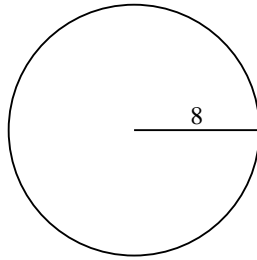
Respuestas

1. _____
2. _____
3. _____
4. _____
5. _____
6. _____
7. _____
8. _____
9. _____

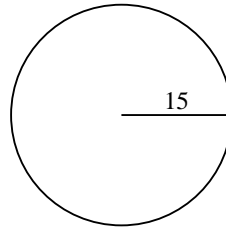
1)



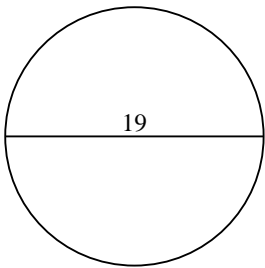
2)



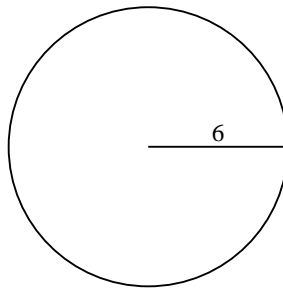
3)



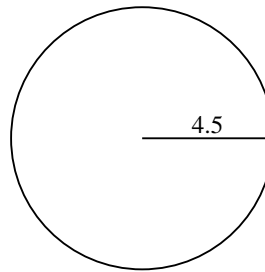
4)



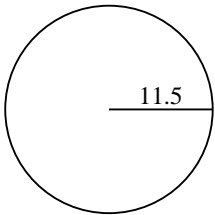
5)



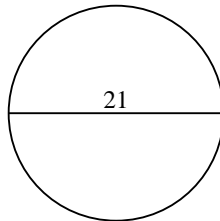
6)



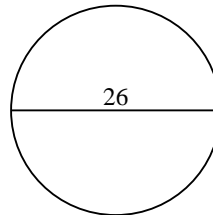
7)



8)

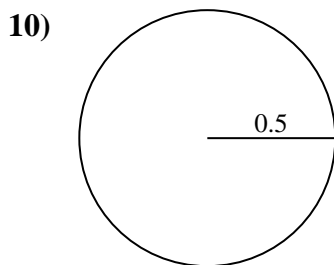
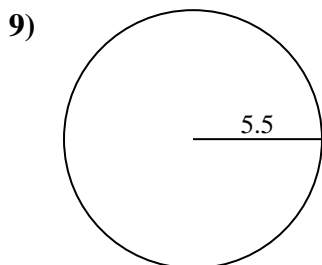
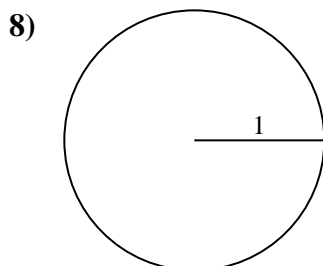
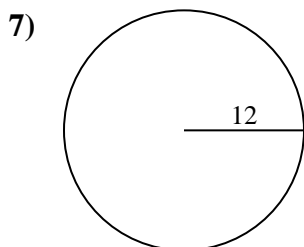
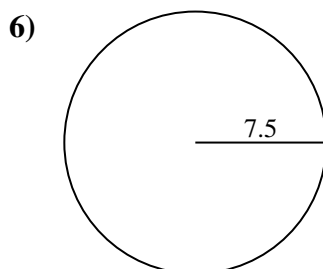
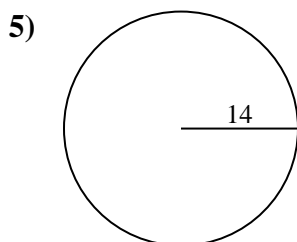
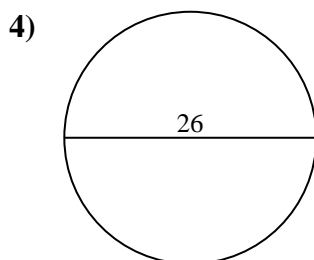
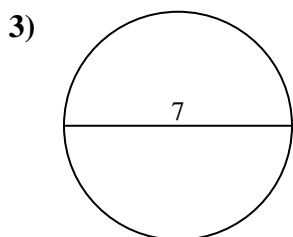
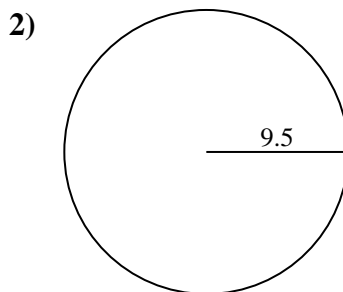
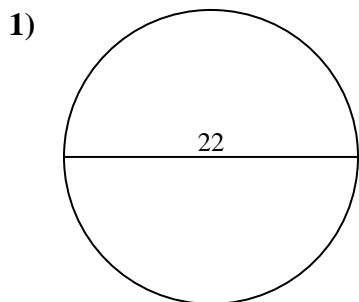


9)





Encuentra el área de cada círculo. Los círculos no están a escala.

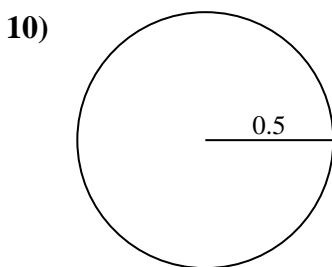
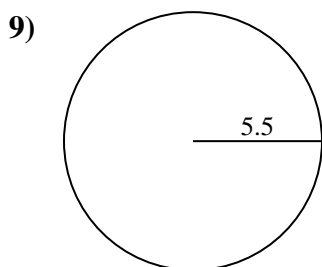
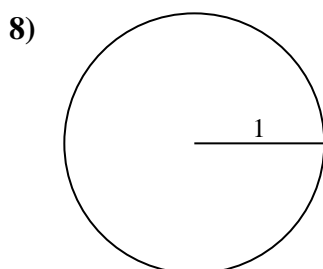
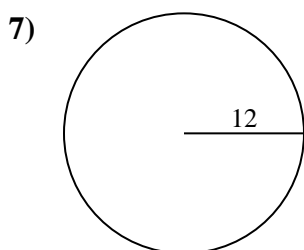
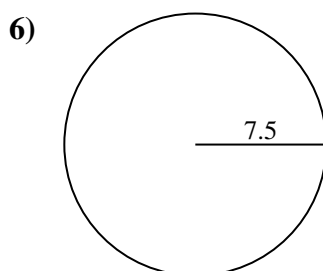
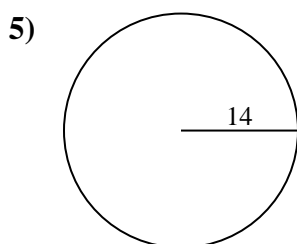
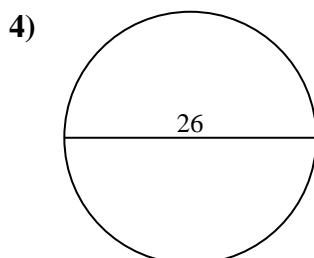
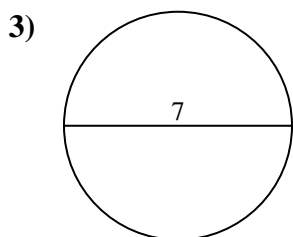
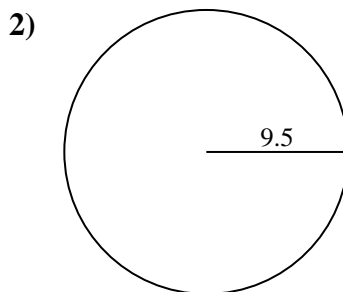
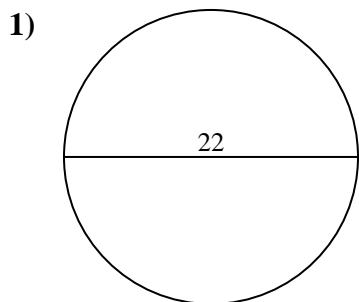


Respuestas

- 1. _____
- 2. _____
- 3. _____
- 4. _____
- 5. _____
- 6. _____
- 7. _____
- 8. _____
- 9. _____
- 10. _____



Encuentra el área de cada círculo. Los círculos no están a escala.



Respuestas

1. **380.1**

2. **283.5**

3. **38.5**

4. **530.9**

5. **615.8**

6. **176.7**

7. **452.4**

8. **3.1**

9. **95**

10. **0.8**



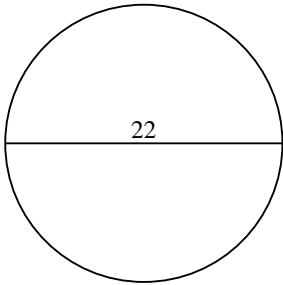
Encuentra el área de cada círculo. Los círculos no están a escala.

176.7	38.5	530.9	283.5	95
615.8	3.1	452.4	380.1	

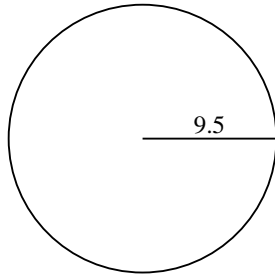
Respuestas

1. _____
2. _____
3. _____
4. _____
5. _____
6. _____
7. _____
8. _____
9. _____

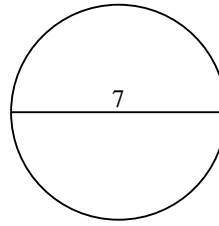
1)



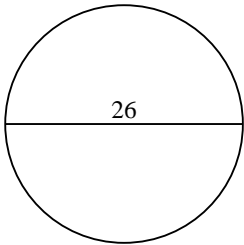
2)



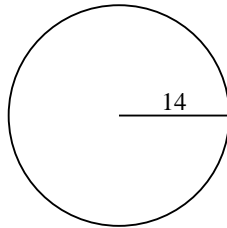
3)



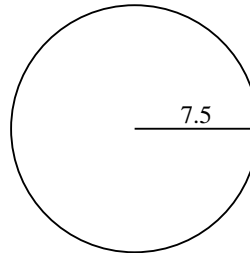
4)



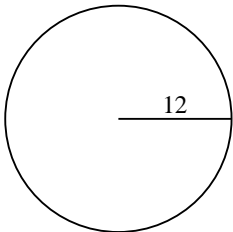
5)



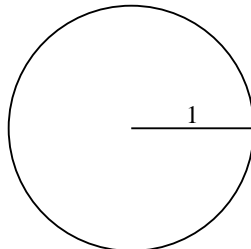
6)



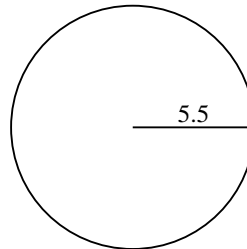
7)



8)



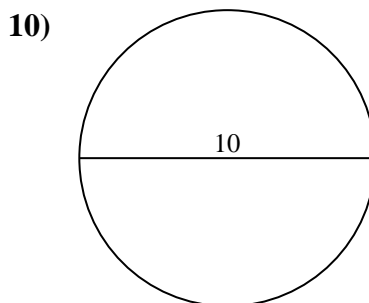
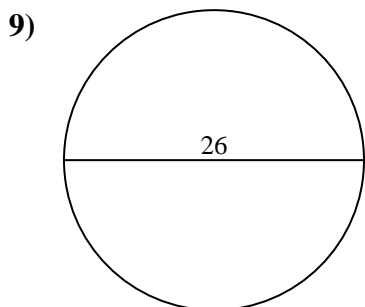
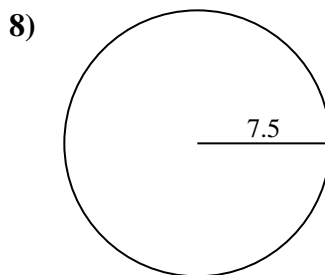
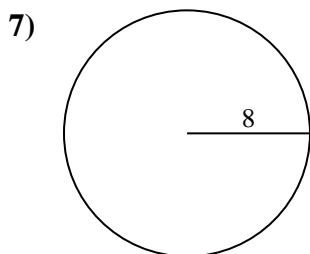
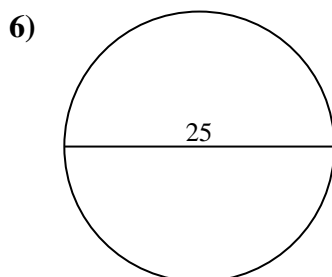
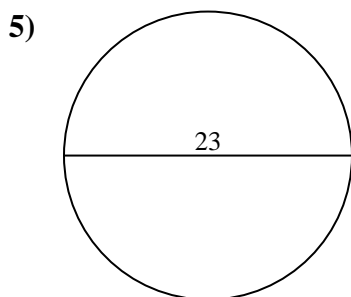
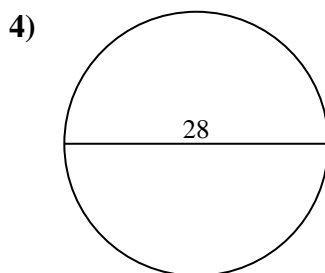
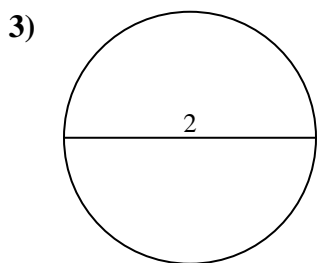
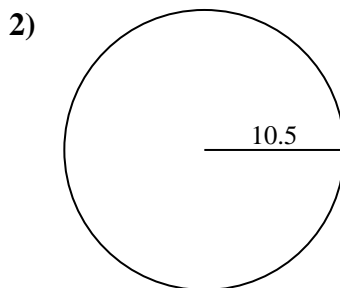
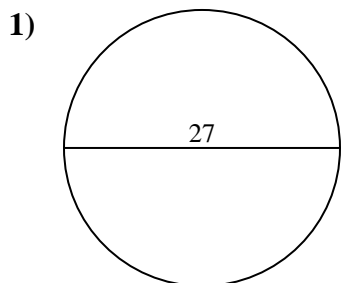
9)





Encuentra el área de cada círculo. Los círculos no están a escala.

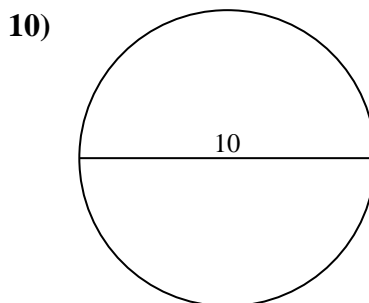
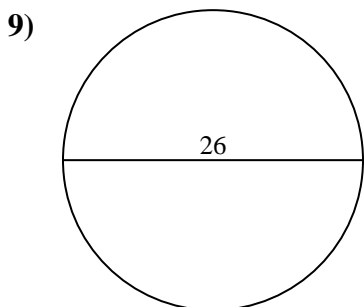
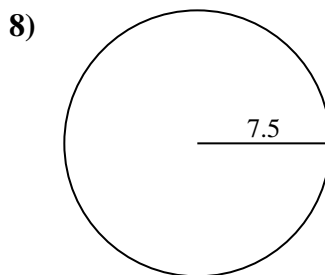
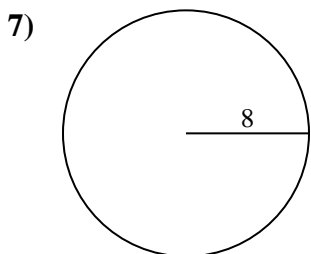
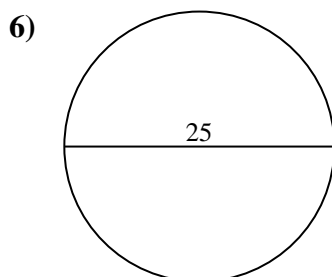
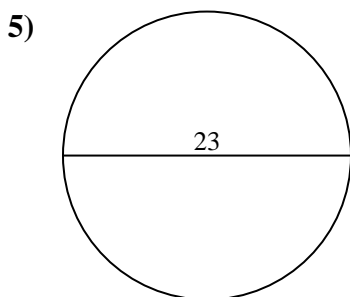
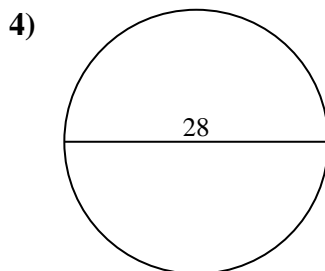
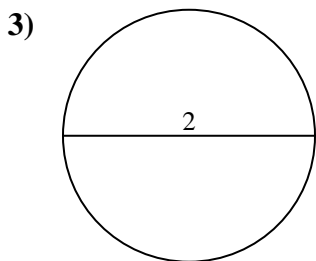
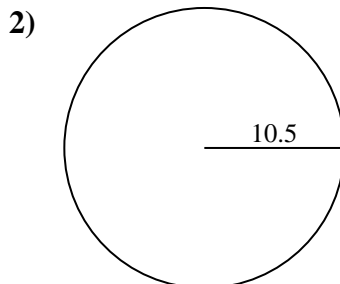
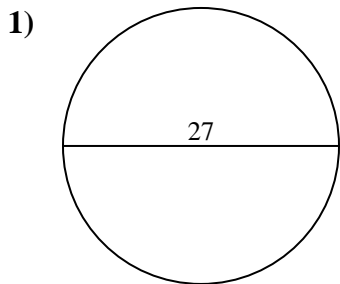
Respuestas



- 1. _____
- 2. _____
- 3. _____
- 4. _____
- 5. _____
- 6. _____
- 7. _____
- 8. _____
- 9. _____
- 10. _____



Encuentra el área de cada círculo. Los círculos no están a escala.



Respuestas

1. 572.6

2. 346.4

3. 3.1

4. 615.8

5. 415.5

6. 490.9

7. 201.1

8. 176.7

9. 530.9

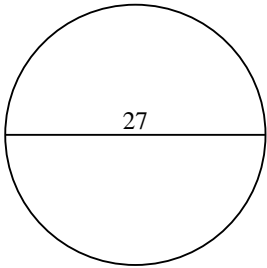
10. 78.5



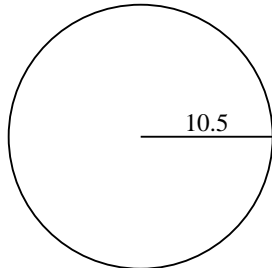
Encuentra el área de cada círculo. Los círculos no están a escala.

530.9	3.1	615.8	201.1	490.9
572.6	415.5	176.7	346.4	

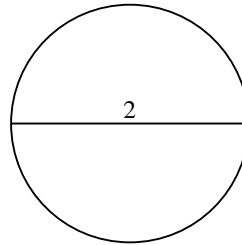
1)



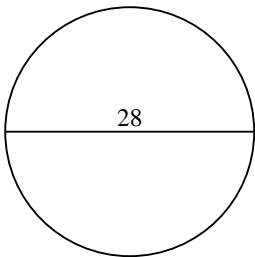
2)



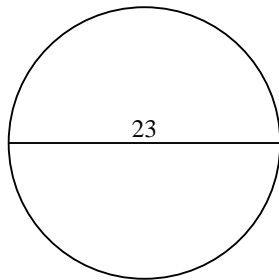
3)



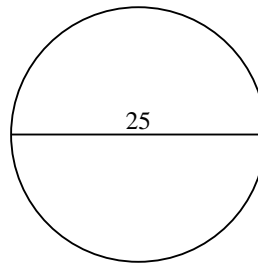
4)



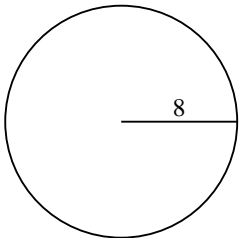
5)



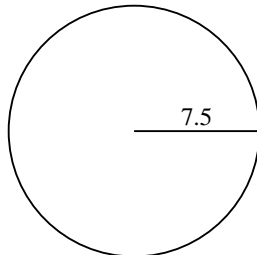
6)



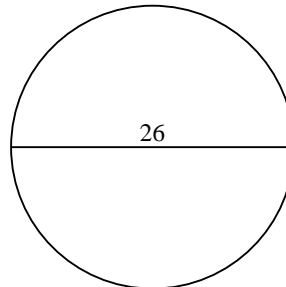
7)



8)



9)

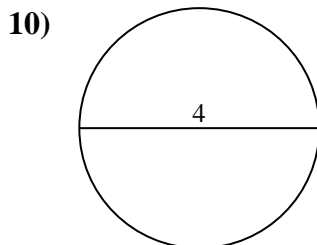
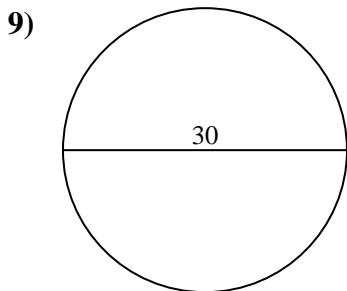
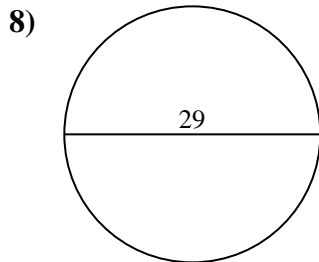
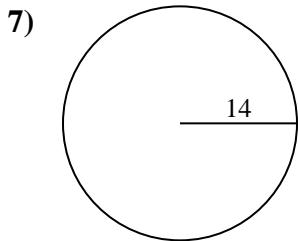
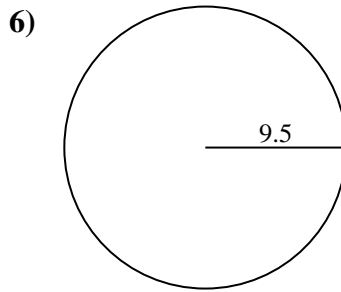
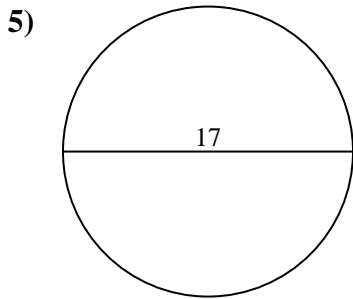
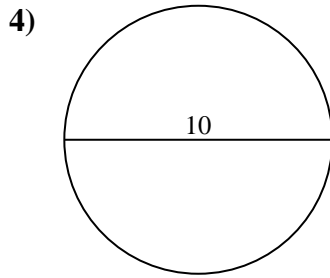
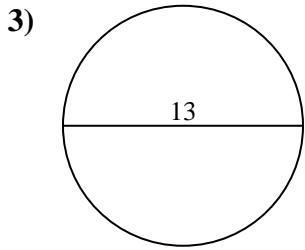
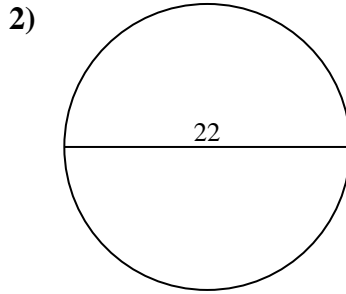
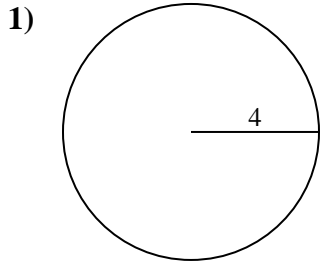


Respuestas

1. _____
2. _____
3. _____
4. _____
5. _____
6. _____
7. _____
8. _____
9. _____



Encuentra el área de cada círculo. Los círculos no están a escala.

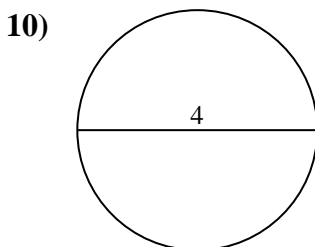
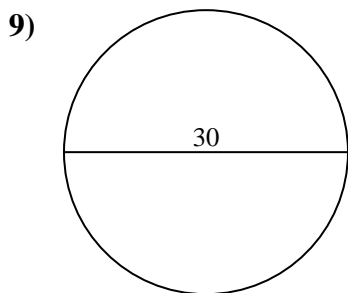
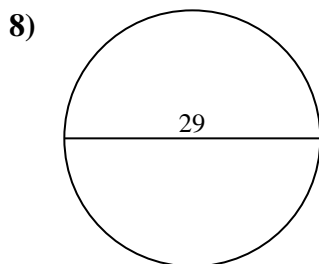
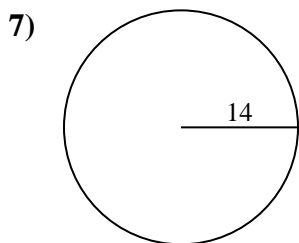
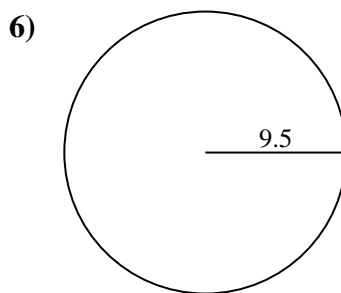
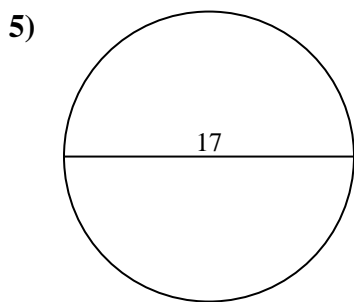
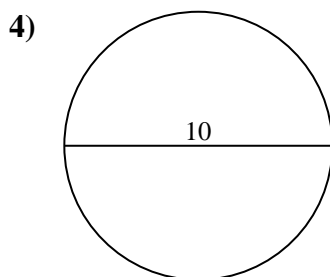
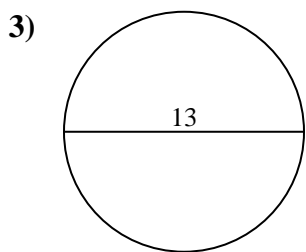
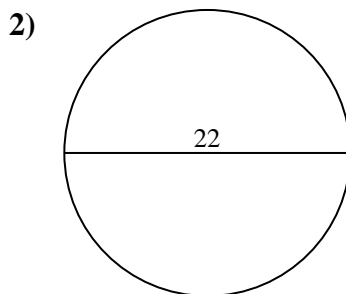
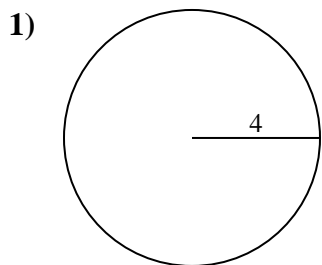


Respuestas

1. _____
2. _____
3. _____
4. _____
5. _____
6. _____
7. _____
8. _____
9. _____
10. _____



Encuentra el área de cada círculo. Los círculos no están a escala.



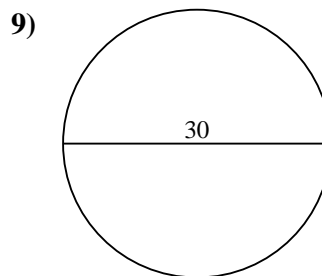
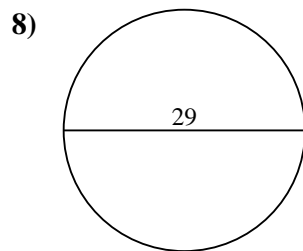
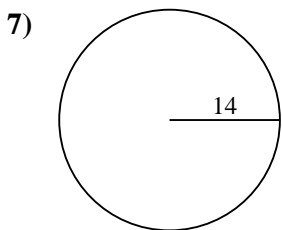
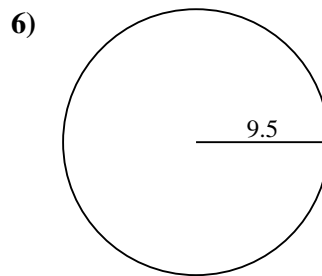
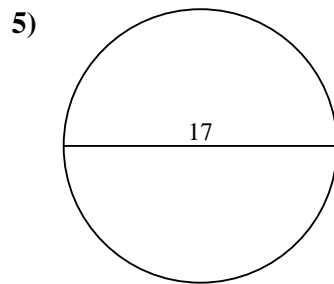
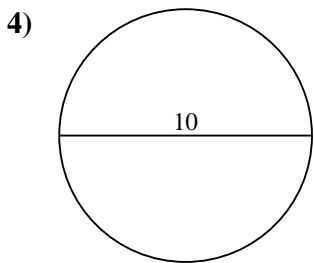
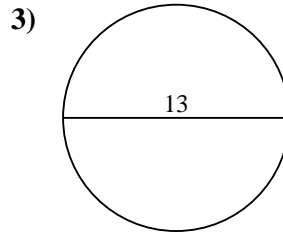
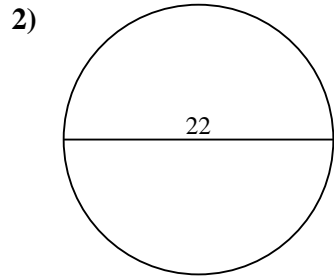
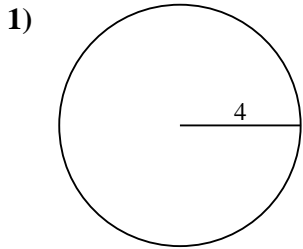
Respuestas

- 1. 50.3
- 2. 380.1
- 3. 132.7
- 4. 78.5
- 5. 227
- 6. 283.5
- 7. 615.8
- 8. 660.5
- 9. 706.9
- 10. 12.6



Encuentra el área de cada círculo. Los círculos no están a escala.

78.5	227	660.5	615.8	380.1
283.5	132.7	50.3	706.9	



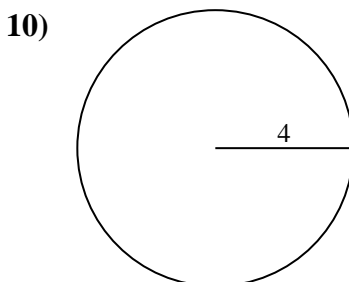
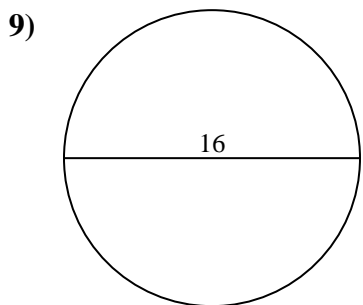
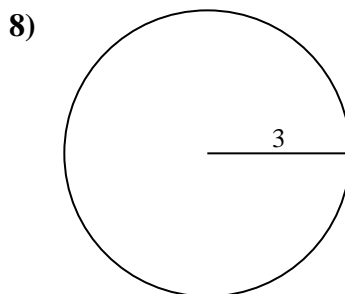
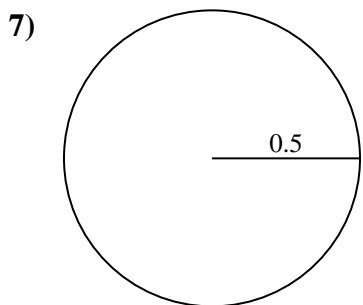
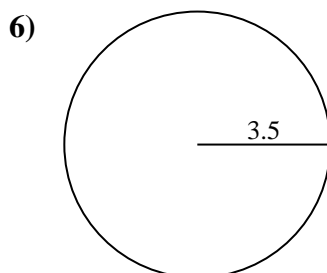
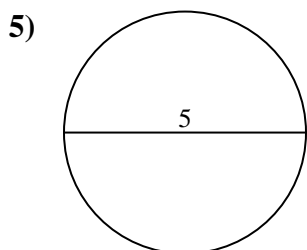
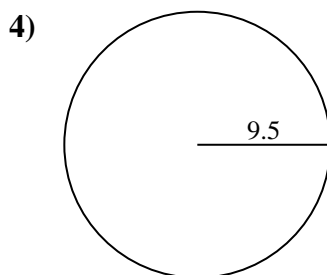
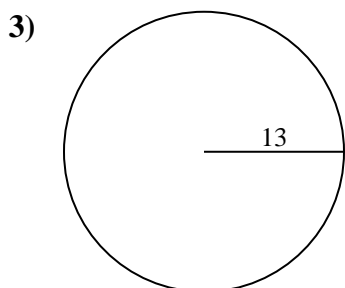
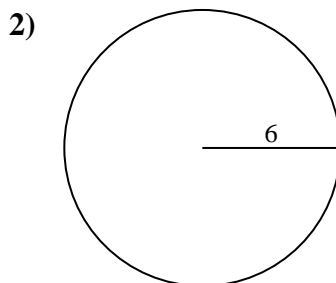
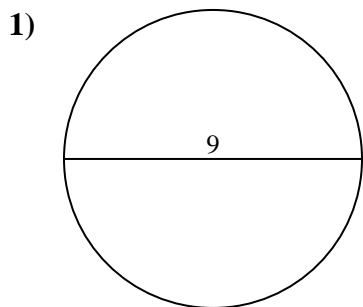
Respuestas

1. _____
2. _____
3. _____
4. _____
5. _____
6. _____
7. _____
8. _____
9. _____



Encuentra el área de cada círculo. Los círculos no están a escala.

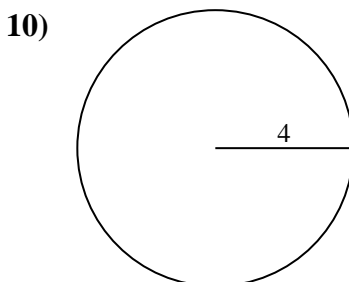
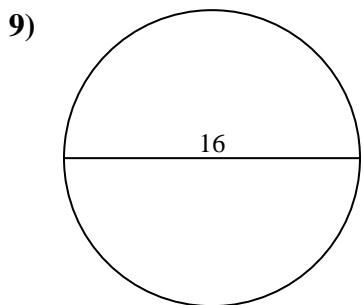
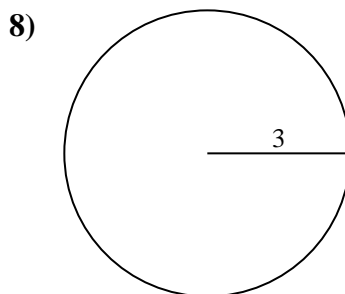
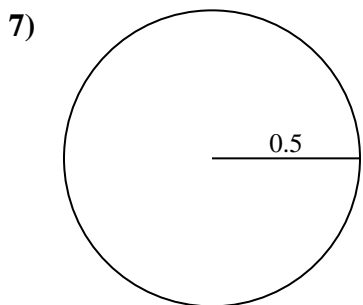
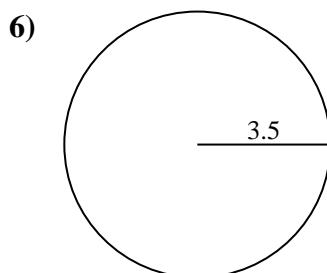
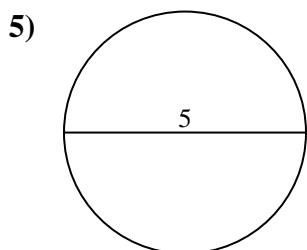
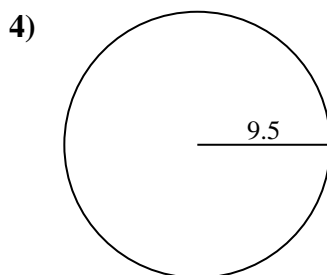
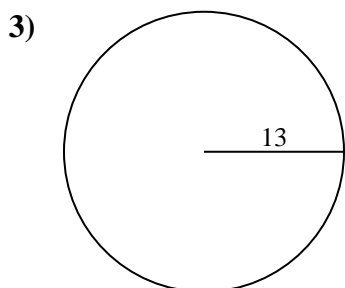
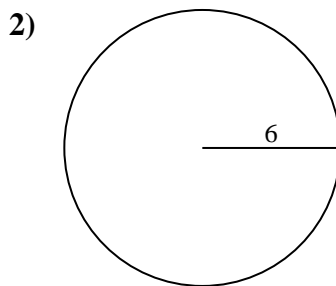
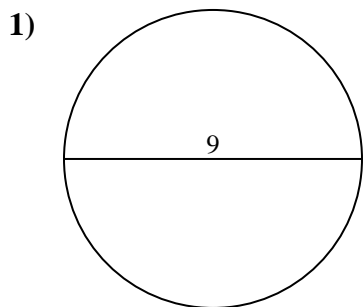
Respuestas



- 1. _____
- 2. _____
- 3. _____
- 4. _____
- 5. _____
- 6. _____
- 7. _____
- 8. _____
- 9. _____
- 10. _____



Encuentra el área de cada círculo. Los círculos no están a escala.



Respuestas

1. 63.6

2. 113.1

3. 530.9

4. 283.5

5. 19.6

6. 38.5

7. 0.8

8. 28.3

9. 201.1

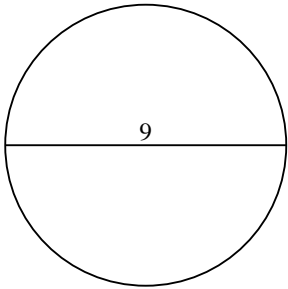
10. 50.3



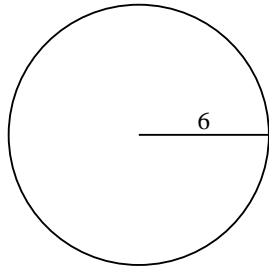
Encuentra el área de cada círculo. Los círculos no están a escala.

28.3	113.1	201.1	38.5	283.5
0.8	19.6	63.6	530.9	

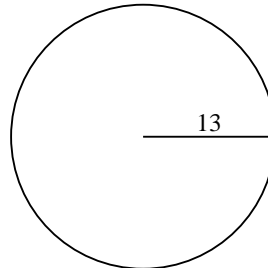
1)



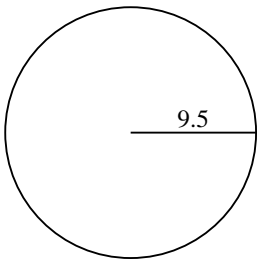
2)



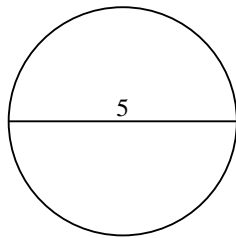
3)



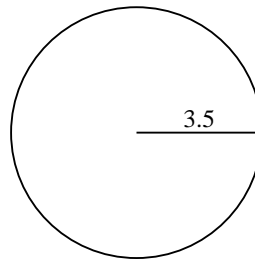
4)



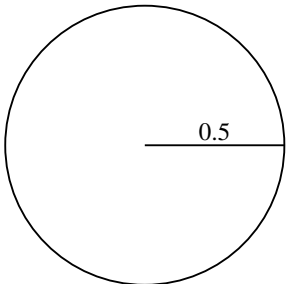
5)



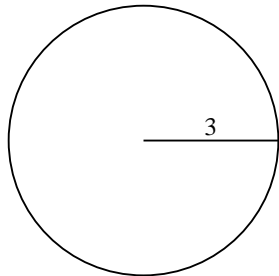
6)



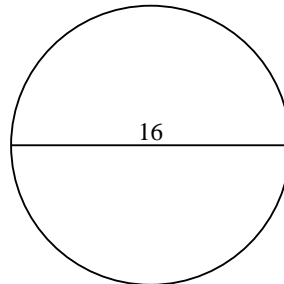
7)



8)



9)



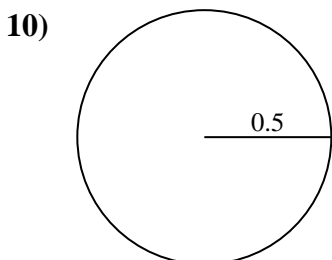
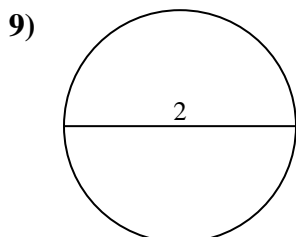
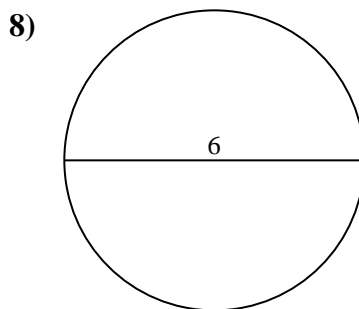
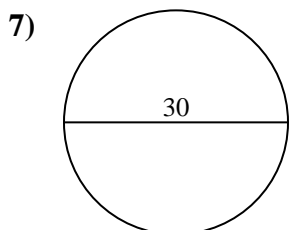
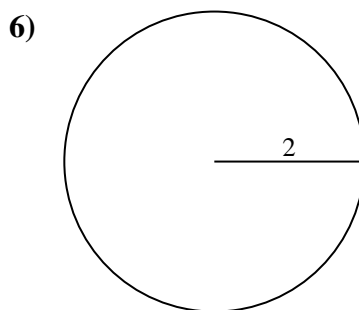
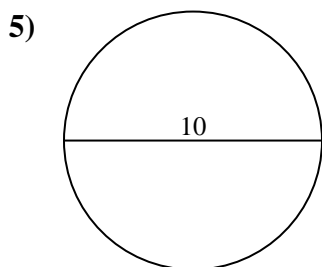
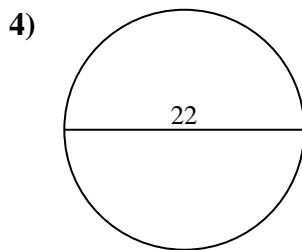
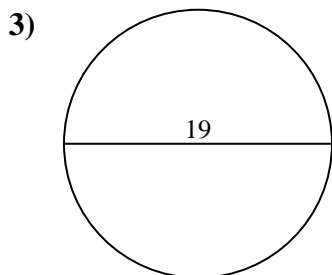
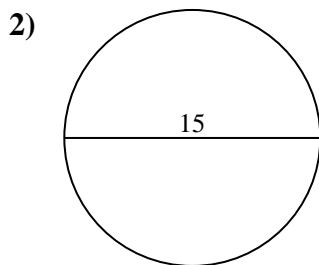
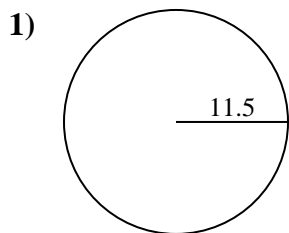
Respuestas

1. _____
2. _____
3. _____
4. _____
5. _____
6. _____
7. _____
8. _____
9. _____



Encuentra el área de cada círculo. Los círculos no están a escala.

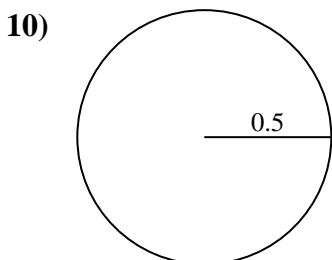
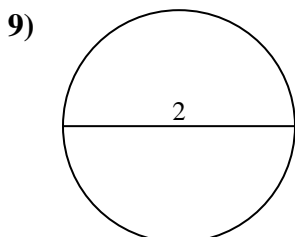
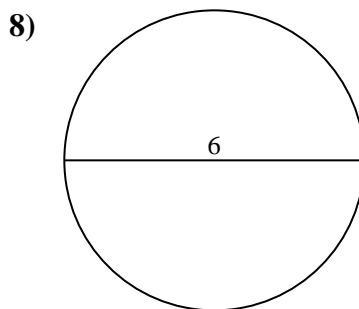
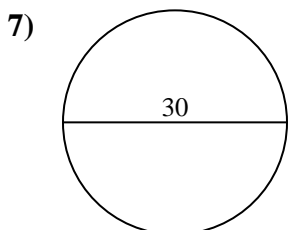
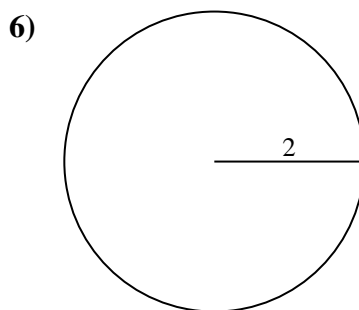
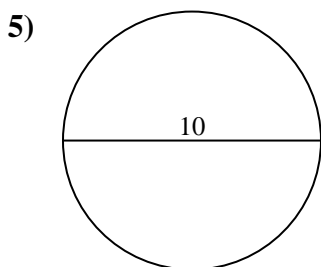
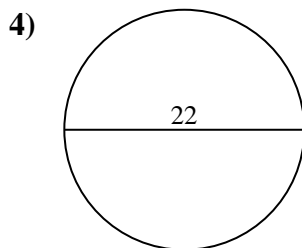
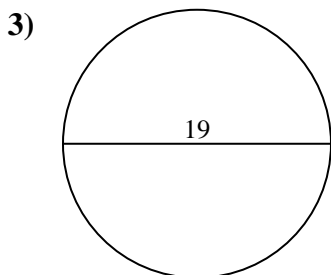
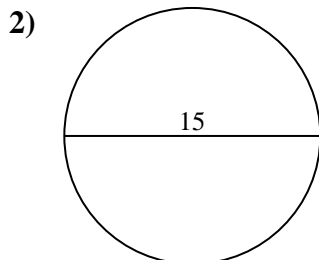
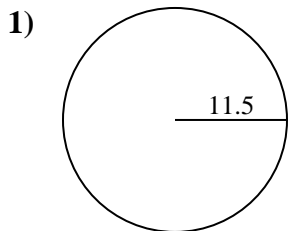
Respuestas



- 1. _____
- 2. _____
- 3. _____
- 4. _____
- 5. _____
- 6. _____
- 7. _____
- 8. _____
- 9. _____
- 10. _____



Encuentra el área de cada círculo. Los círculos no están a escala.



Respuestas

1. 415.5

2. 176.7

3. 283.5

4. 380.1

5. 78.5

6. 12.6

7. 706.9

8. 28.3

9. 3.1

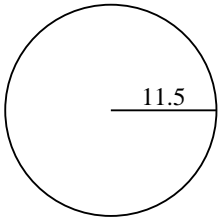
10. 0.8



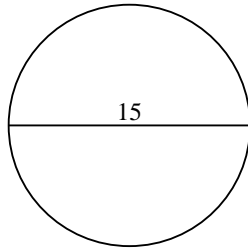
Encuentra el área de cada círculo. Los círculos no están a escala.

283.5	176.7	415.5	3.1	78.5
380.1	706.9	28.3	12.6	

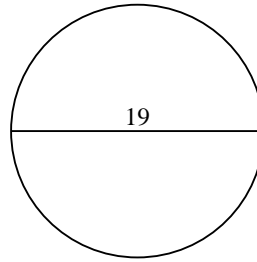
1)



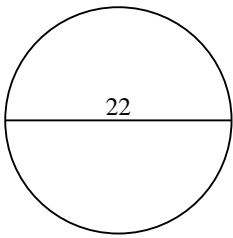
2)



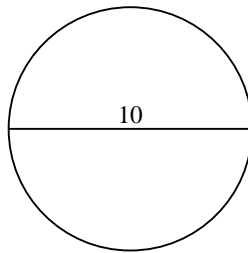
3)



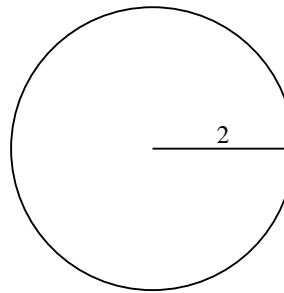
4)



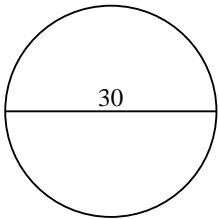
5)



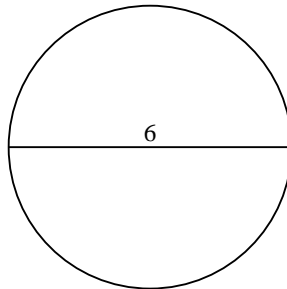
6)



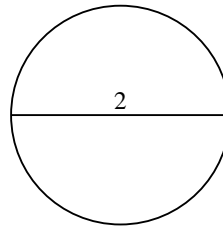
7)



8)



9)



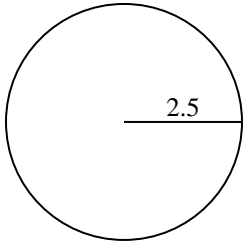
Respuestas

1. _____
2. _____
3. _____
4. _____
5. _____
6. _____
7. _____
8. _____
9. _____

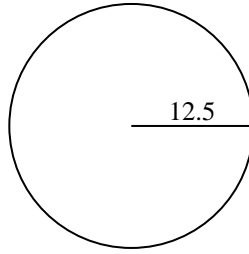


Encuentra el área de cada círculo. Los círculos no están a escala.

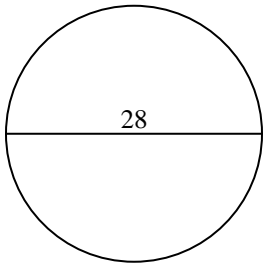
1)



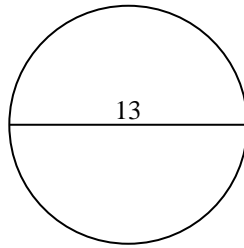
2)



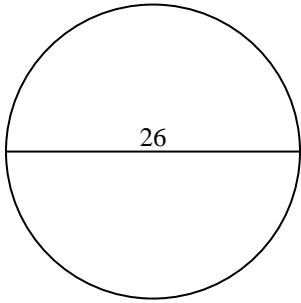
3)



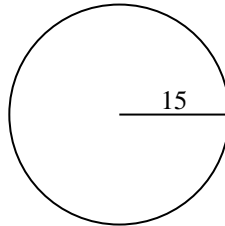
4)



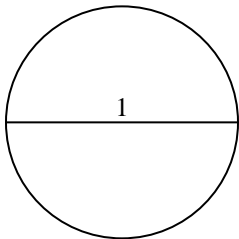
5)



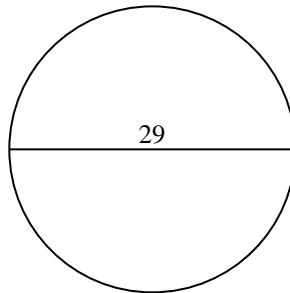
6)



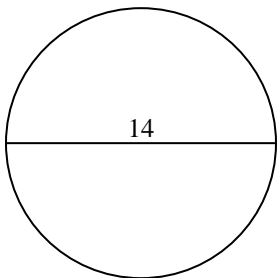
7)



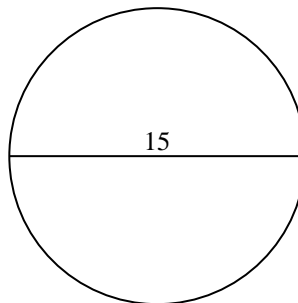
8)



9)



10)

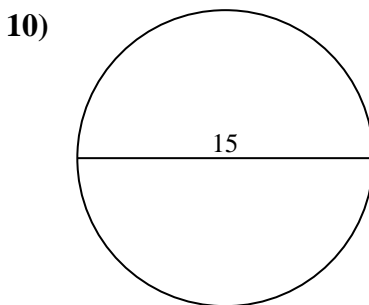
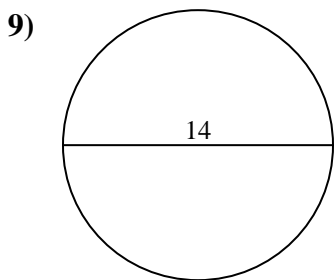
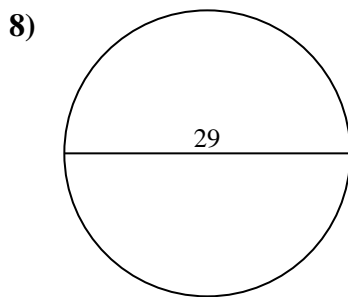
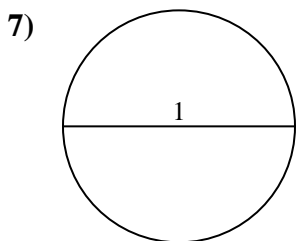
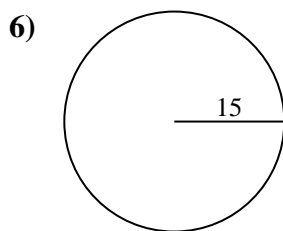
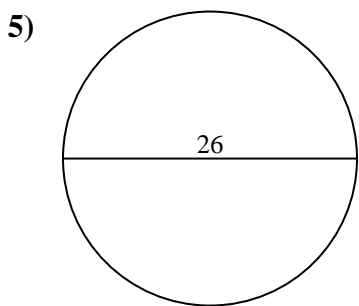
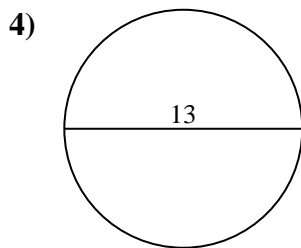
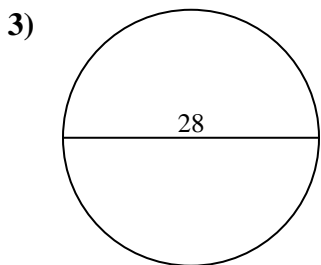
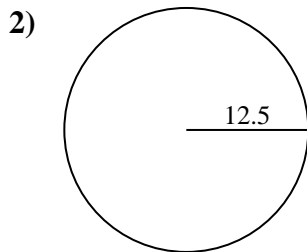
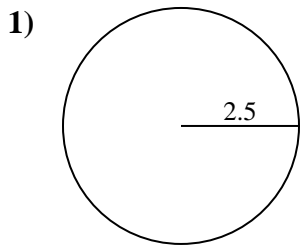


Respuestas

- 1. _____
- 2. _____
- 3. _____
- 4. _____
- 5. _____
- 6. _____
- 7. _____
- 8. _____
- 9. _____
- 10. _____



Encuentra el área de cada círculo. Los círculos no están a escala.



Respuestas

1. 19.6

2. 490.9

3. 615.8

4. 132.7

5. 530.9

6. 706.9

7. 0.8

8. 660.5

9. 153.9

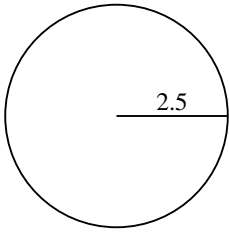
10. 176.7



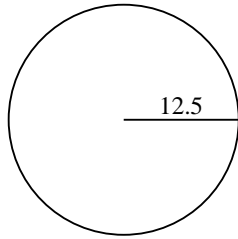
Encuentra el área de cada círculo. Los círculos no están a escala.

490.9	615.8	706.9	132.7	153.9
19.6	530.9	0.8	660.5	

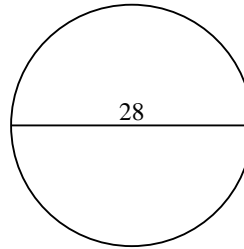
1)



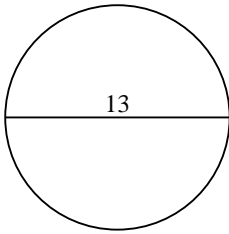
2)



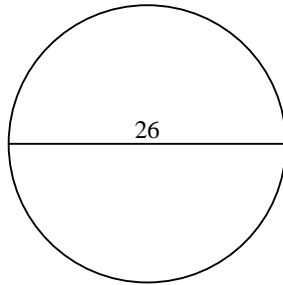
3)



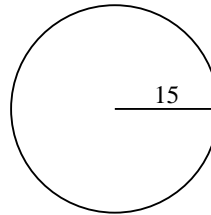
4)



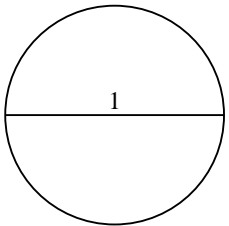
5)



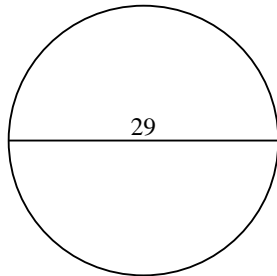
6)



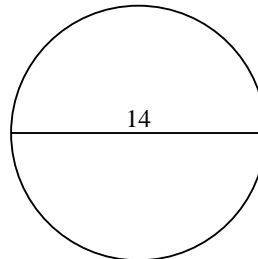
7)



8)



9)



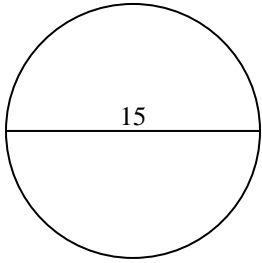
Respuestas

1. _____
2. _____
3. _____
4. _____
5. _____
6. _____
7. _____
8. _____
9. _____

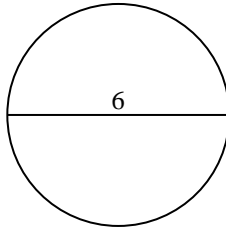


Encuentra el área de cada círculo. Los círculos no están a escala.

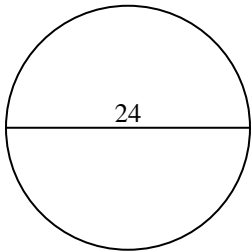
1)



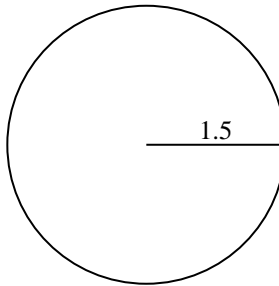
2)



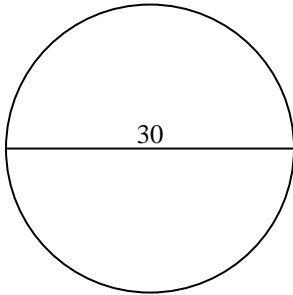
3)



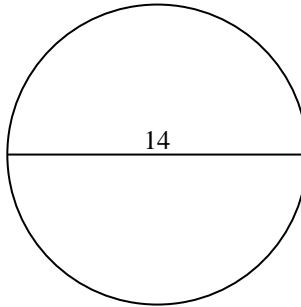
4)



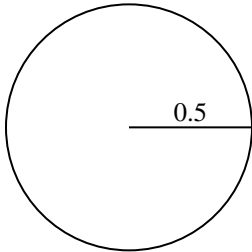
5)



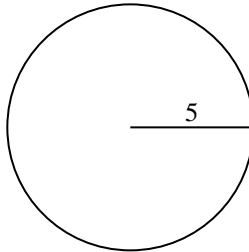
6)



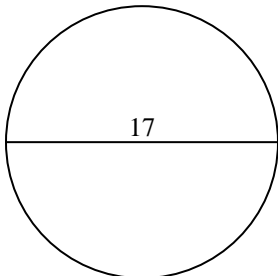
7)



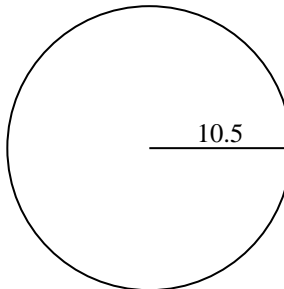
8)



9)



10)

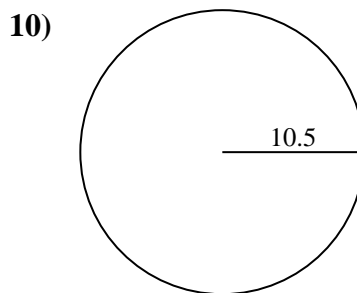
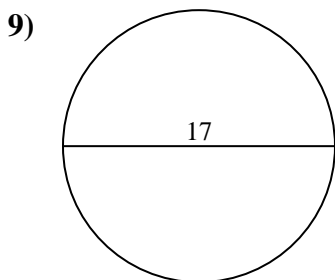
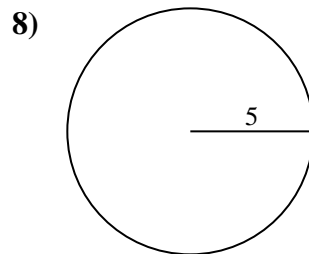
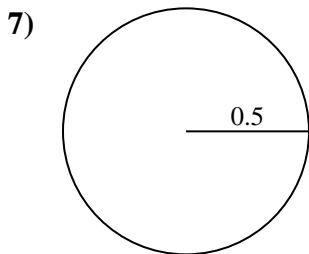
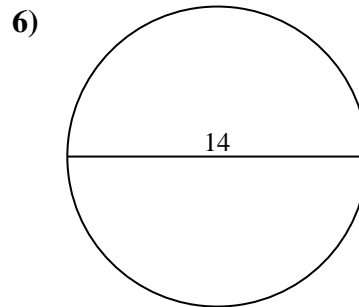
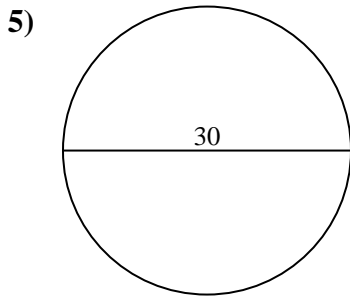
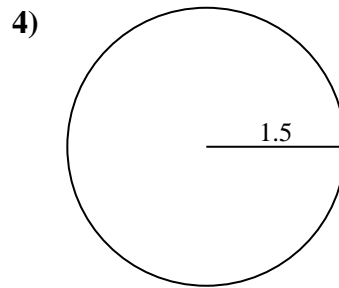
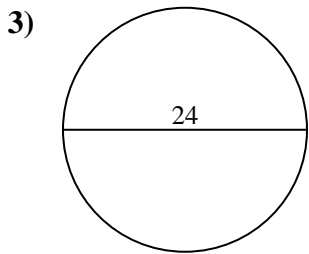
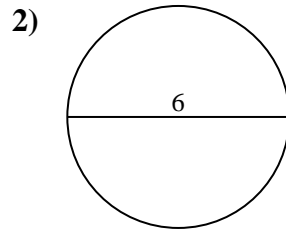
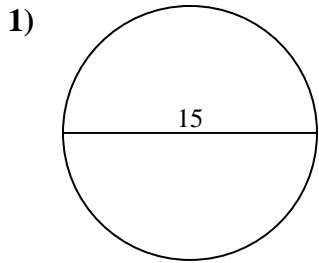


Respuestas

- 1. _____
- 2. _____
- 3. _____
- 4. _____
- 5. _____
- 6. _____
- 7. _____
- 8. _____
- 9. _____
- 10. _____



Encuentra el área de cada círculo. Los círculos no están a escala.



Respuestas

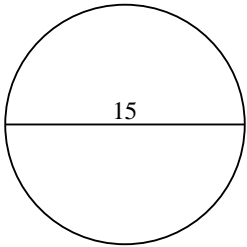
1. 176.7
2. 28.3
3. 452.4
4. 7.1
5. 706.9
6. 153.9
7. 0.8
8. 78.5
9. 227
10. 346.4



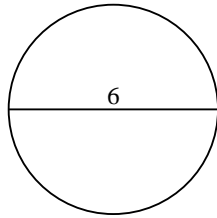
Encuentra el área de cada círculo. Los círculos no están a escala.

452.4	0.8	153.9	7.1	227
28.3	78.5	706.9	176.7	

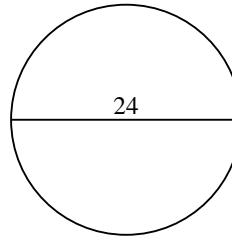
1)



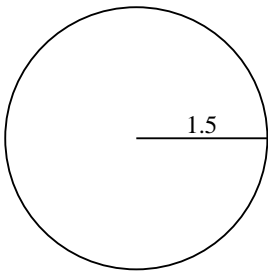
2)



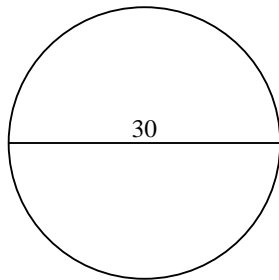
3)



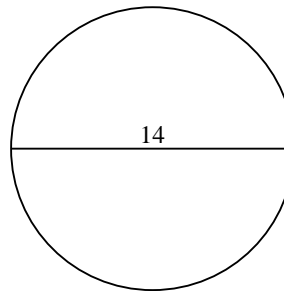
4)



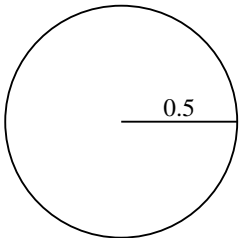
5)



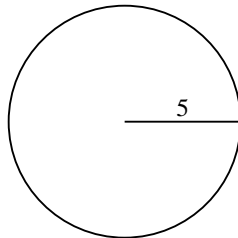
6)



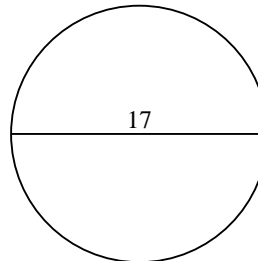
7)



8)



9)



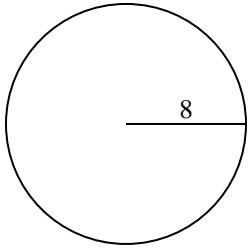
Respuestas

1. _____
2. _____
3. _____
4. _____
5. _____
6. _____
7. _____
8. _____
9. _____

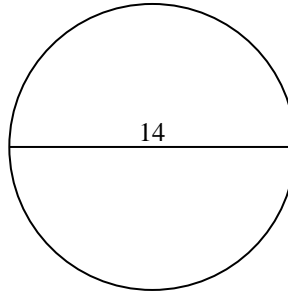


Encuentra el área de cada círculo. Los círculos no están a escala.

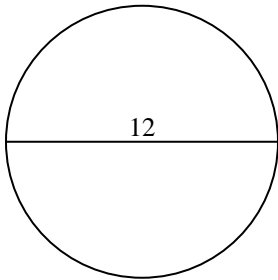
1)



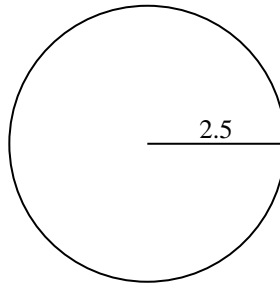
2)



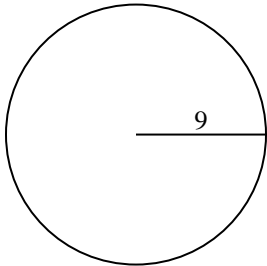
3)



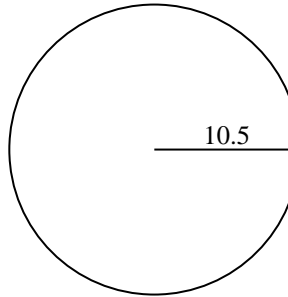
4)



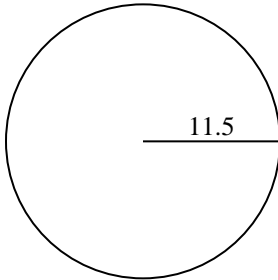
5)



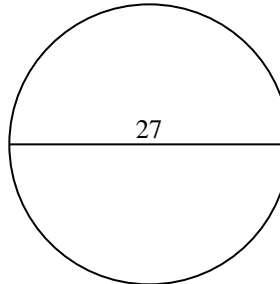
6)



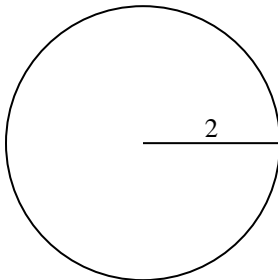
7)



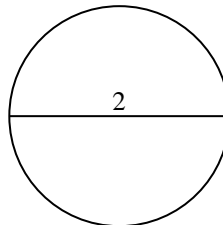
8)



9)



10)



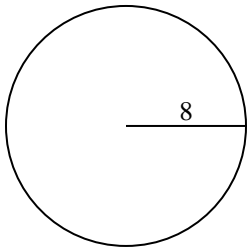
Respuestas

- 1. _____
- 2. _____
- 3. _____
- 4. _____
- 5. _____
- 6. _____
- 7. _____
- 8. _____
- 9. _____
- 10. _____

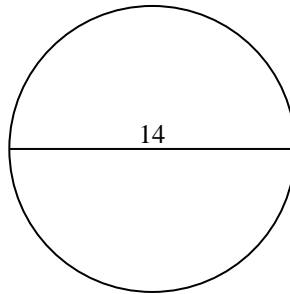


Encuentra el área de cada círculo. Los círculos no están a escala.

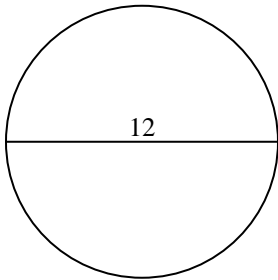
1)



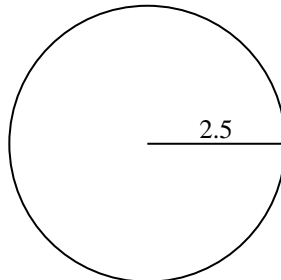
2)



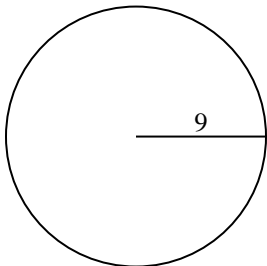
3)



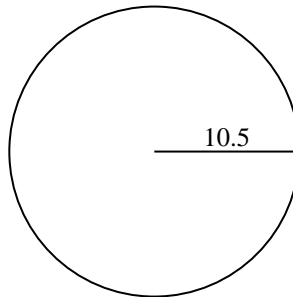
4)



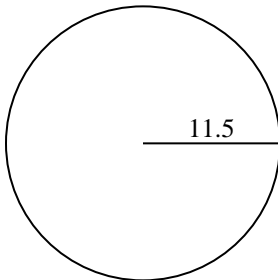
5)



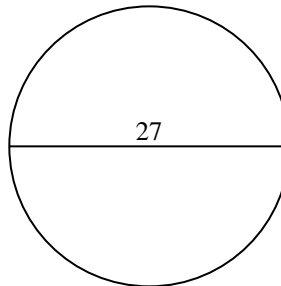
6)



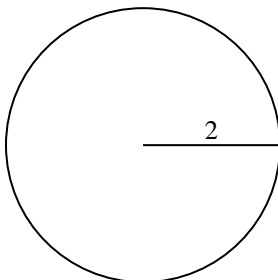
7)



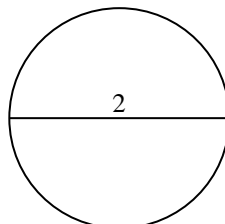
8)



9)



10)

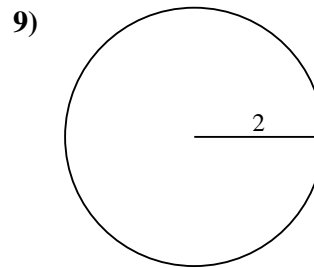
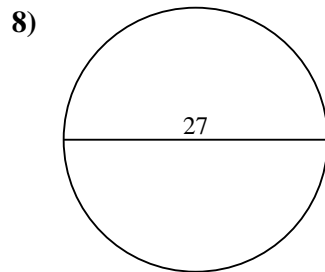
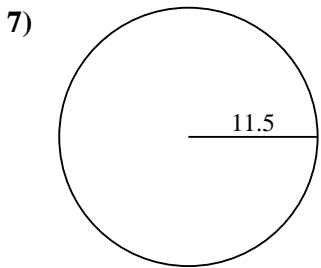
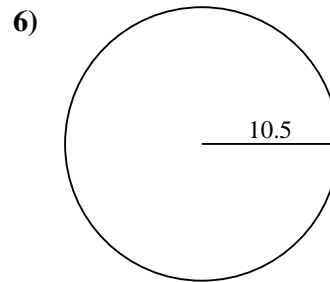
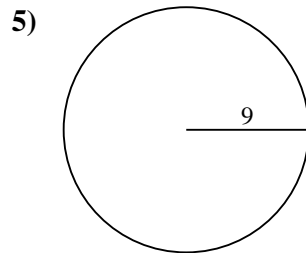
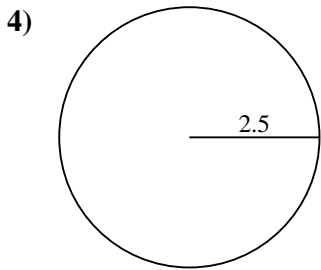
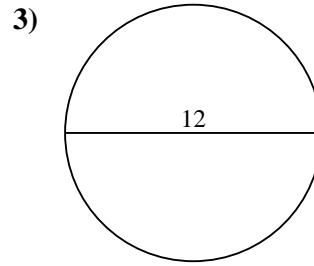
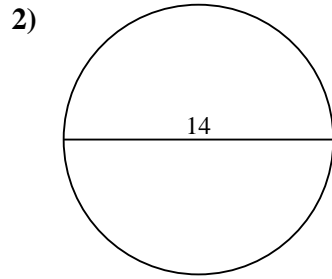
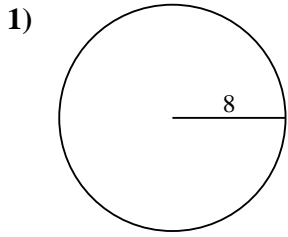
**Respuestas**1. 201.12. 153.93. 113.14. 19.65. 254.56. 346.47. 415.58. 572.69. 12.610. 3.1



Encuentra el área de cada círculo. Los círculos no están a escala.

572.6	113.1	415.5	12.6	346.4
201.1	153.9	254.5	19.6	

Respuestas

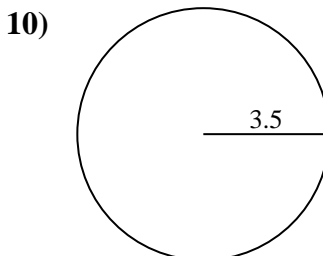
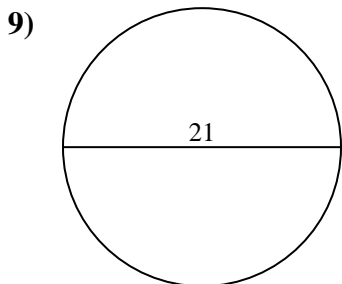
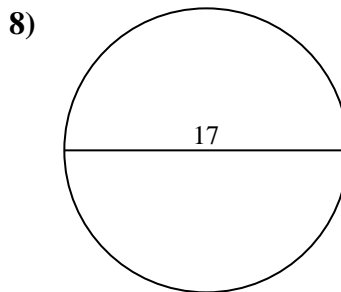
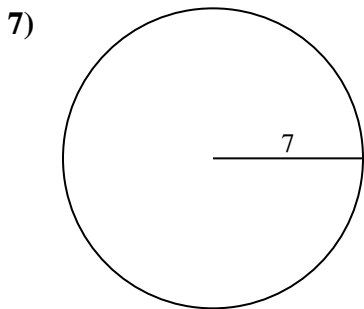
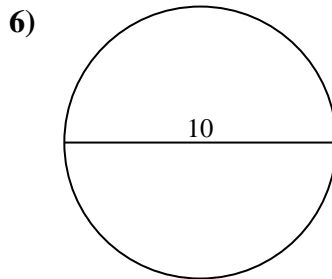
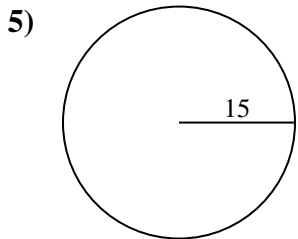
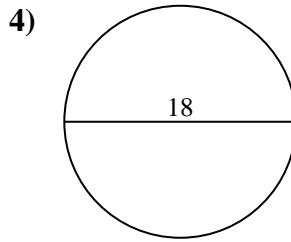
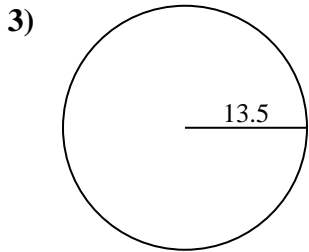
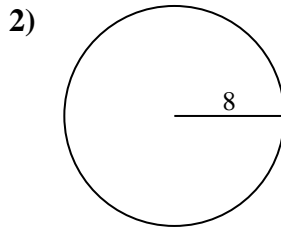
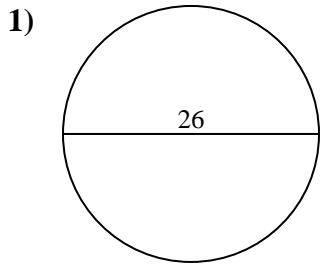


- 1. _____
- 2. _____
- 3. _____
- 4. _____
- 5. _____
- 6. _____
- 7. _____
- 8. _____
- 9. _____



Encuentra el área de cada círculo. Los círculos no están a escala.

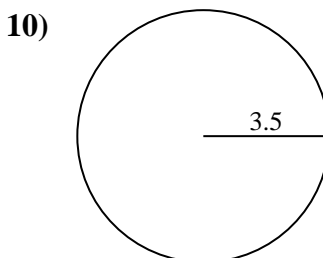
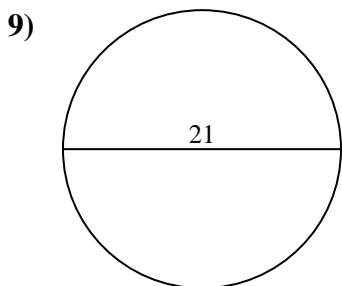
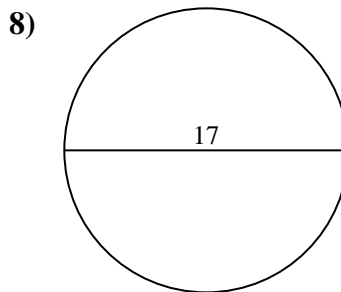
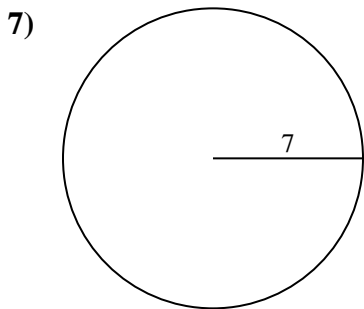
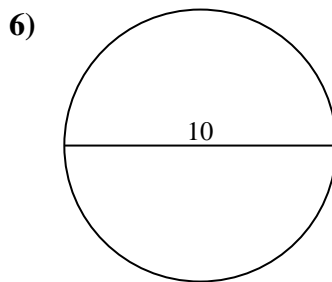
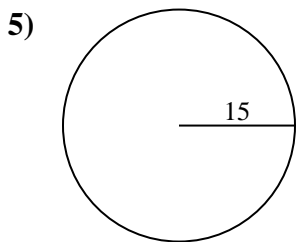
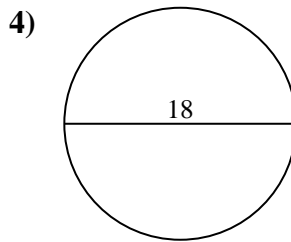
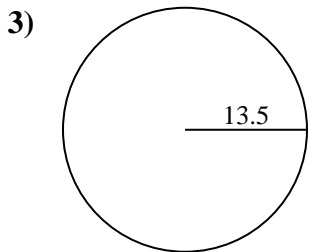
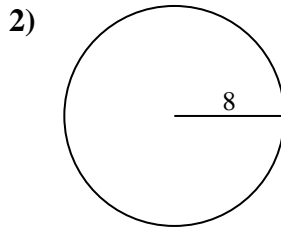
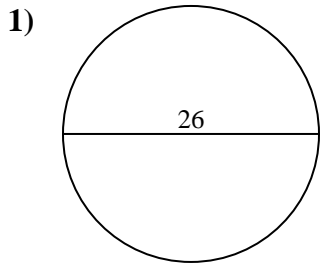
Respuestas



- 1. _____
- 2. _____
- 3. _____
- 4. _____
- 5. _____
- 6. _____
- 7. _____
- 8. _____
- 9. _____
- 10. _____



Encuentra el área de cada círculo. Los círculos no están a escala.



Respuestas

1. 530.9

2. 201.1

3. 572.6

4. 254.5

5. 706.9

6. 78.5

7. 153.9

8. 227

9. 346.4

10. 38.5

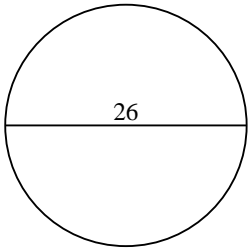


Encuentra el área de cada círculo. Los círculos no están a escala.

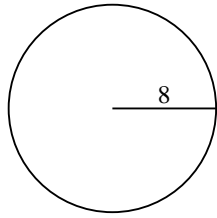
572.6	78.5	227	346.4	530.9
153.9	201.1	706.9	254.5	

Respuestas

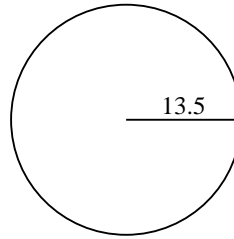
1)



2)



3)



1. _____

2. _____

3. _____

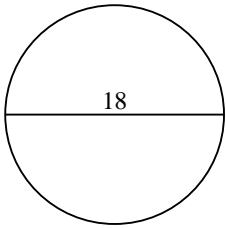
4. _____

5. _____

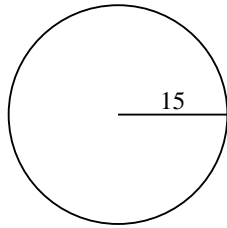
6. _____

7. _____

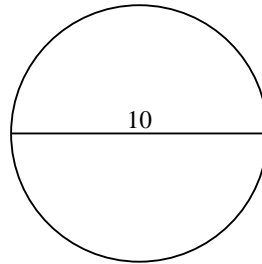
4)



5)



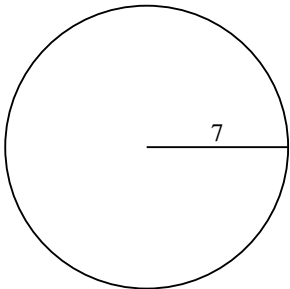
6)



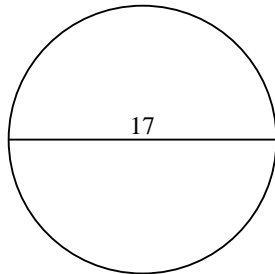
8. _____

9. _____

7)



8)



9)

