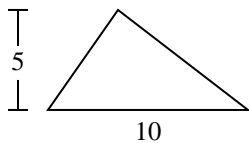


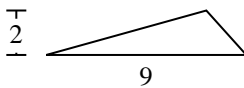


Encuentra el área de cada triángulo. Redondea tu respuesta a la décima más cercana.

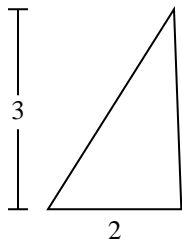
1)



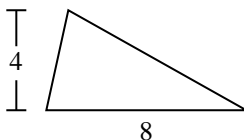
2)



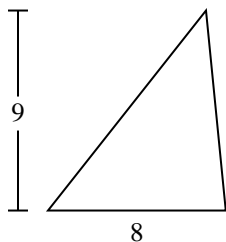
3)



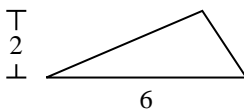
4)



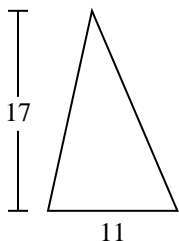
5)



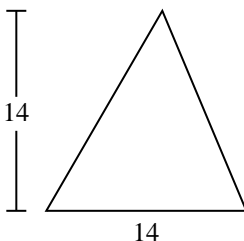
6)



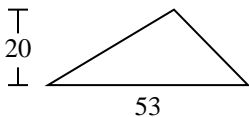
7)



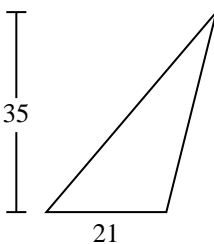
8)



9)



10)



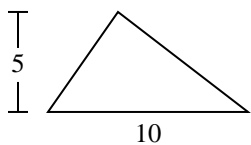
**Respuestas**

- 1. \_\_\_\_\_
- 2. \_\_\_\_\_
- 3. \_\_\_\_\_
- 4. \_\_\_\_\_
- 5. \_\_\_\_\_
- 6. \_\_\_\_\_
- 7. \_\_\_\_\_
- 8. \_\_\_\_\_
- 9. \_\_\_\_\_
- 10. \_\_\_\_\_

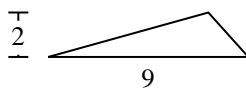


Encuentra el área de cada triángulo. Redondea tu respuesta a la décima más cercana.

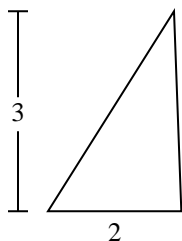
1)



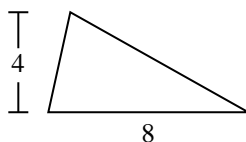
2)



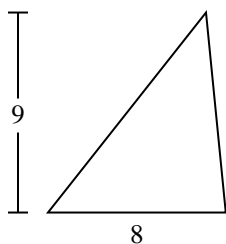
3)



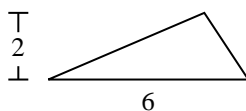
4)



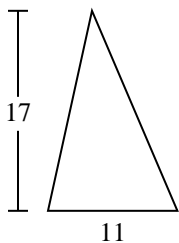
5)



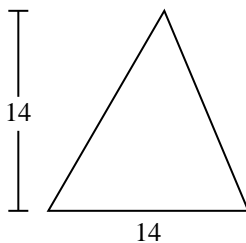
6)



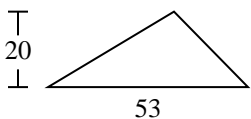
7)



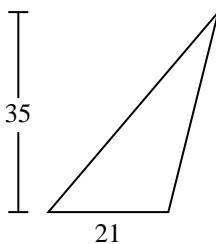
8)



9)



10)

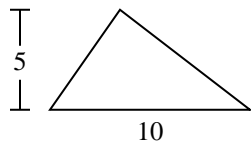
**Respuestas**1. 252. 93. 34. 165. 366. 67. 93.58. 989. 53010. 367.5



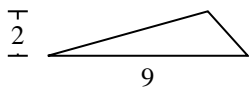
Encuentra el área de cada triángulo. Redondea tu respuesta a la décima más cercana.

93.5	98	530	25	9
6	36	16	3	

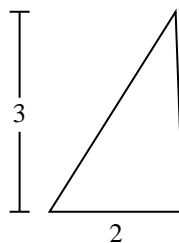
1)



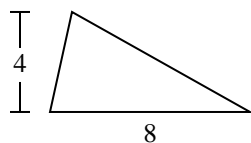
2)



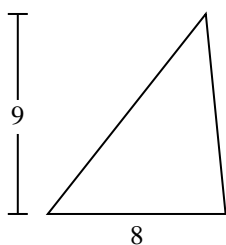
3)



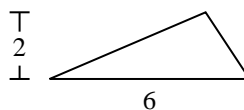
4)



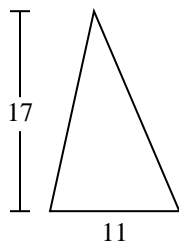
5)



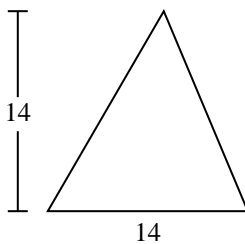
6)



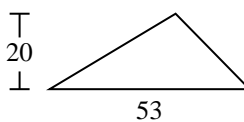
7)



8)



9)



**Respuestas**

1. \_\_\_\_\_
2. \_\_\_\_\_
3. \_\_\_\_\_
4. \_\_\_\_\_
5. \_\_\_\_\_
6. \_\_\_\_\_
7. \_\_\_\_\_
8. \_\_\_\_\_
9. \_\_\_\_\_