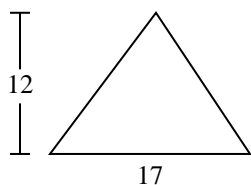




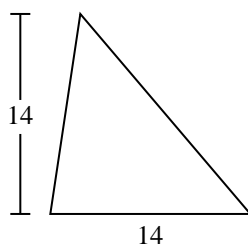
Encuentra el área de cada triángulo. Redondea tu respuesta a la décima más cercana.

Respuestas

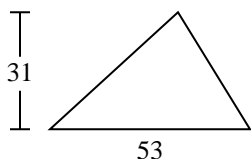
1)



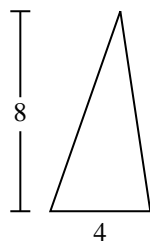
2)



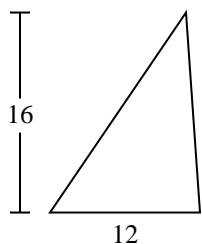
3)



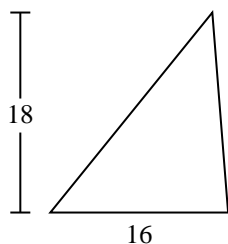
4)



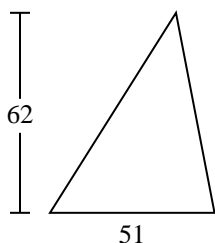
5)



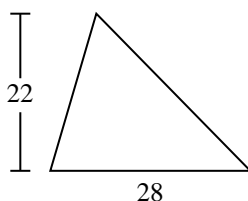
6)



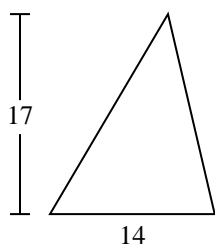
7)



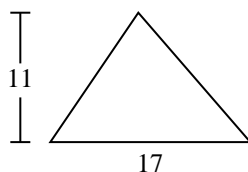
8)



9)



10)

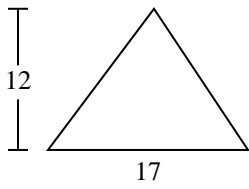


- 1. _____
- 2. _____
- 3. _____
- 4. _____
- 5. _____
- 6. _____
- 7. _____
- 8. _____
- 9. _____
- 10. _____

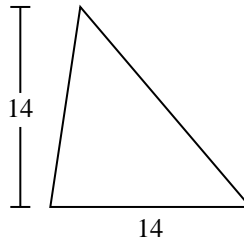


Encuentra el área de cada triángulo. Redondea tu respuesta a la décima más cercana.

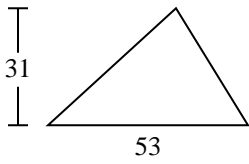
1)



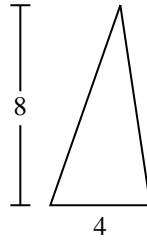
2)



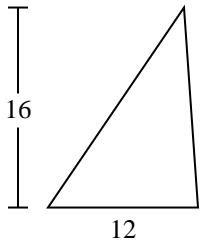
3)



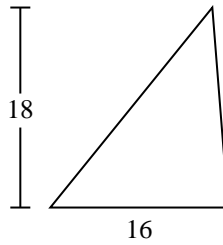
4)



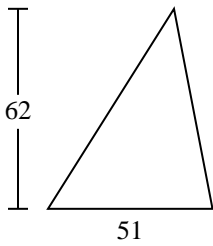
5)



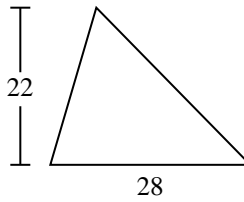
6)



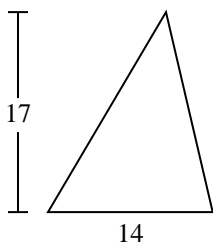
7)



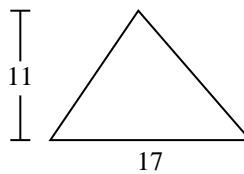
8)



9)



10)



Respuestas

1. **102**

2. **98**

3. **821.5**

4. **16**

5. **96**

6. **144**

7. **1,581**

8. **308**

9. **119**

10. **93.5**



Encuentra el área de cada triángulo. Redondea tu respuesta a la décima más cercana.

102

1,581

308

144

16

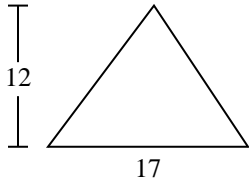
119

821.5

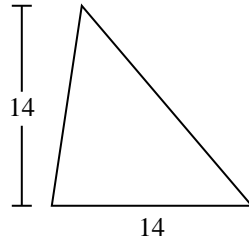
98

96

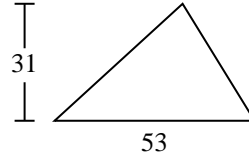
1)



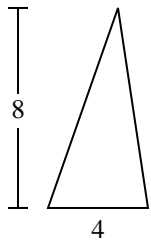
2)



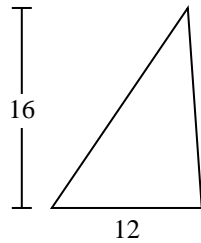
3)



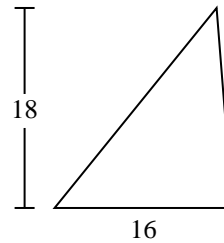
4)



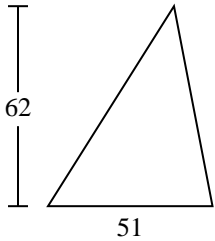
5)



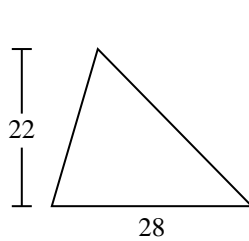
6)



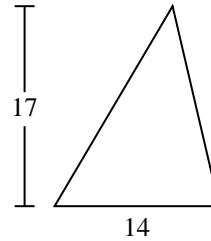
7)



8)



9)



Respuestas

1. _____
2. _____
3. _____
4. _____
5. _____
6. _____
7. _____
8. _____
9. _____