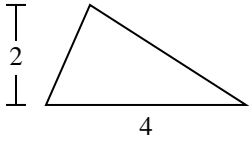


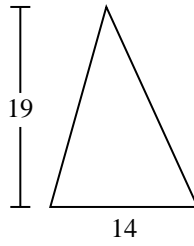


Encuentra el área de cada triángulo. Redondea tu respuesta a la décima más cercana.

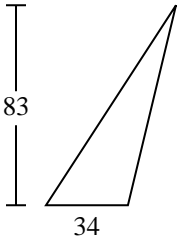
1)



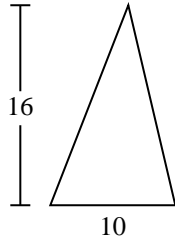
2)



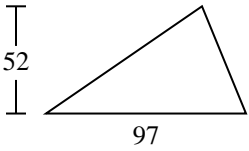
3)



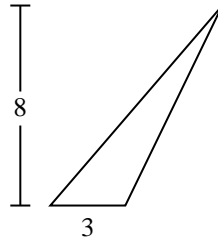
4)



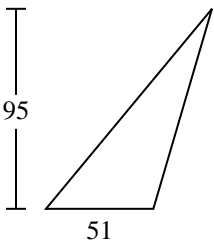
5)



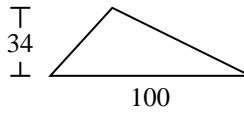
6)



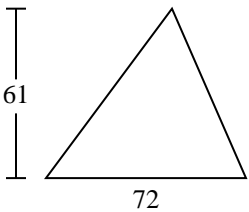
7)



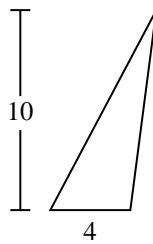
8)



9)



10)



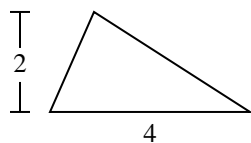
Respuestas

1. _____
2. _____
3. _____
4. _____
5. _____
6. _____
7. _____
8. _____
9. _____
10. _____

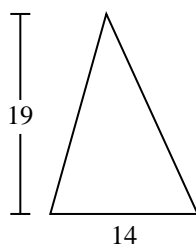


Encuentra el área de cada triángulo. Redondea tu respuesta a la décima más cercana.

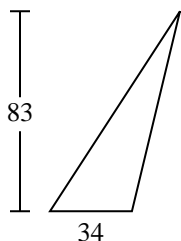
1)



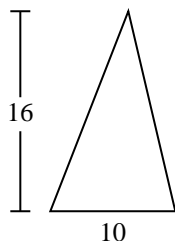
2)



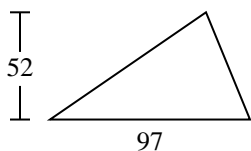
3)



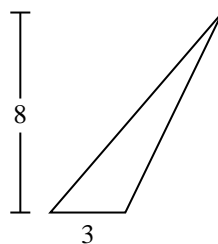
4)



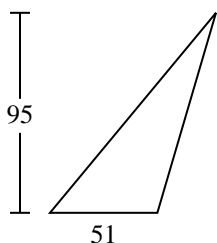
5)



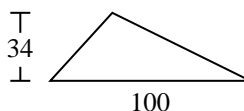
6)



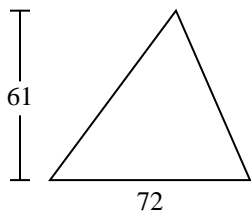
7)



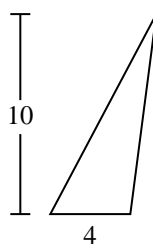
8)



9)



10)

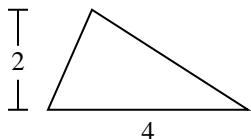
Respuestas1. 42. 1333. 1,4114. 805. 2,5226. 127. 2,422.58. 1,7009. 2,19610. 20



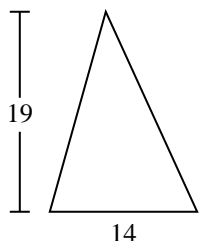
Encuentra el área de cada triángulo. Redondea tu respuesta a la décima más cercana.

133	4	1,411	2,522	2,196
1,700	2,422.5	80	12	

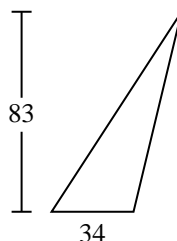
1)



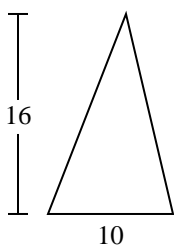
2)



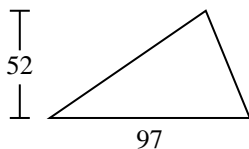
3)



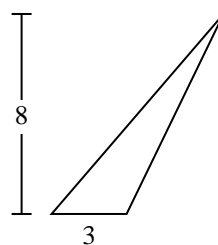
4)



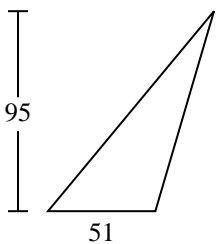
5)



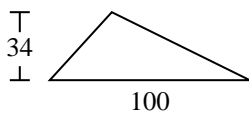
6)



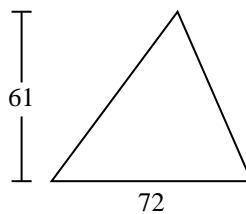
7)



8)



9)



Respuestas

1. _____
2. _____
3. _____
4. _____
5. _____
6. _____
7. _____
8. _____
9. _____