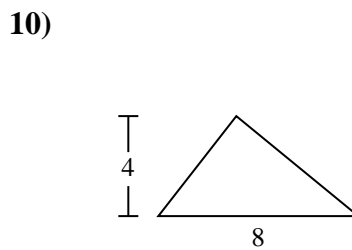
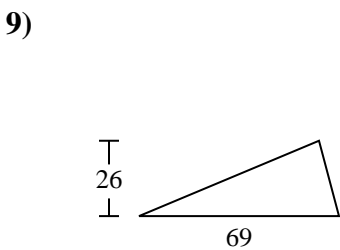
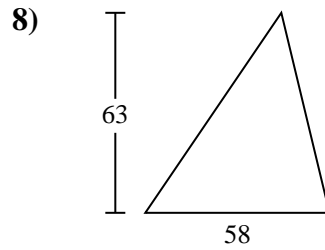
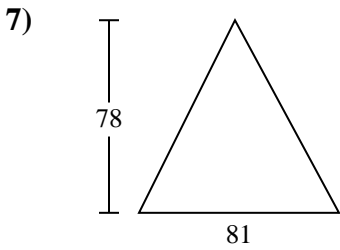
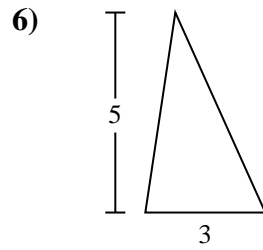
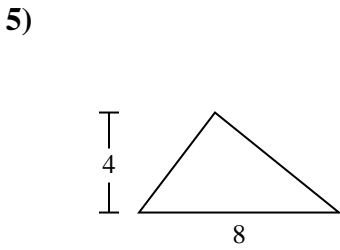
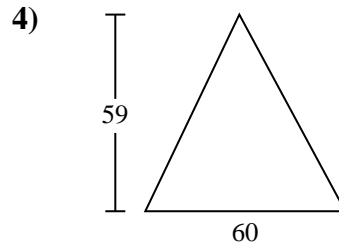
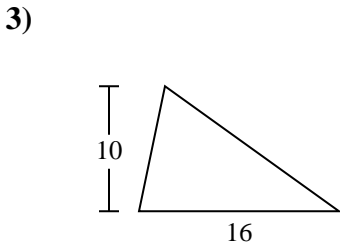
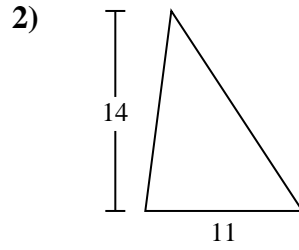
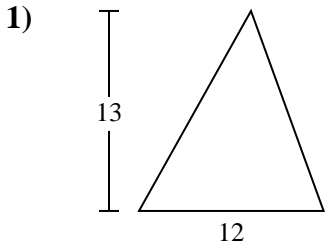




Encuentra el área de cada triángulo. Redondea tu respuesta a la décima más cercana.

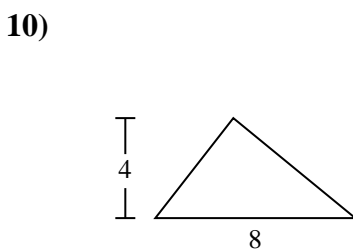
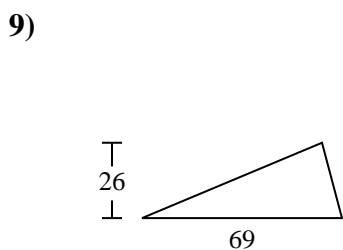
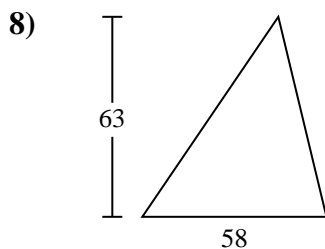
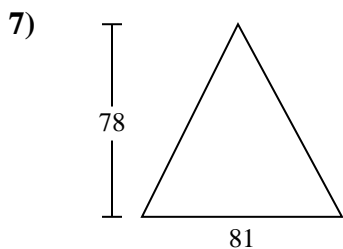
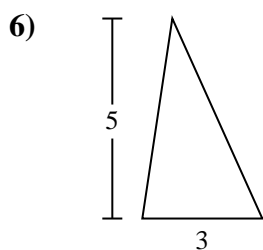
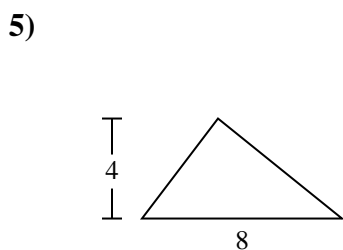
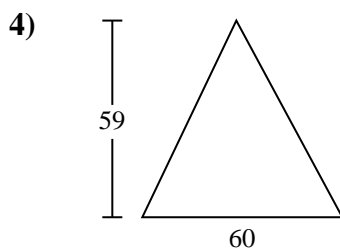
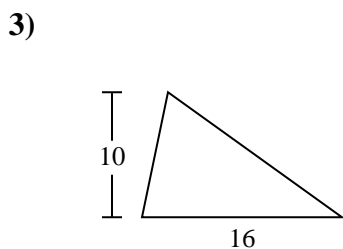
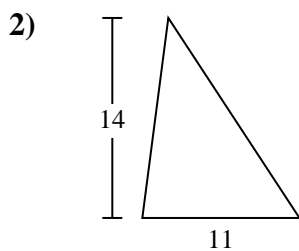
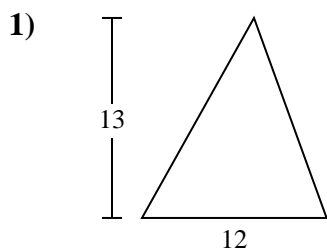
Respuestas



- 1. _____
- 2. _____
- 3. _____
- 4. _____
- 5. _____
- 6. _____
- 7. _____
- 8. _____
- 9. _____
- 10. _____



Encuentra el área de cada triángulo. Redondea tu respuesta a la décima más cercana.



Respuestas

1. 78
2. 77
3. 80
4. 1,770
5. 16
6. 7.5
7. 3,159
8. 1,827
9. 897
10. 16



Encuentra el área de cada triángulo. Redondea tu respuesta a la décima más cercana.

1,827

1,770

7.5

78

3,159

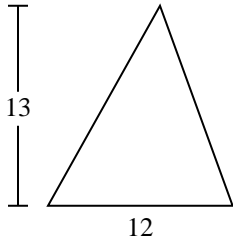
80

77

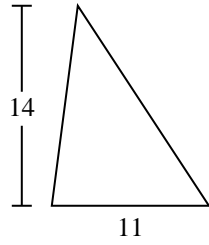
897

16

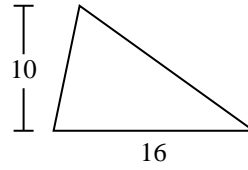
1)



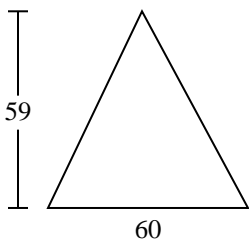
2)



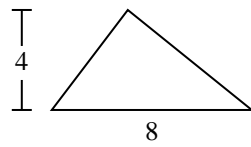
3)



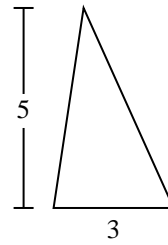
4)



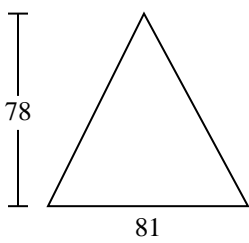
5)



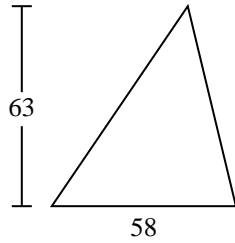
6)



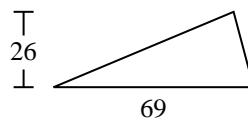
7)



8)



9)



Respuestas

1. _____
2. _____
3. _____
4. _____
5. _____
6. _____
7. _____
8. _____
9. _____