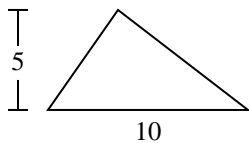


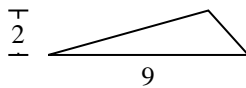


Encuentra el área de cada triángulo. Redondea tu respuesta a la décima más cercana.

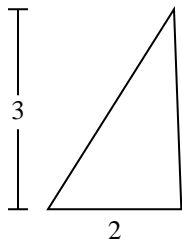
1)



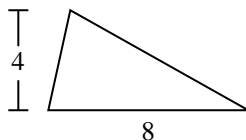
2)



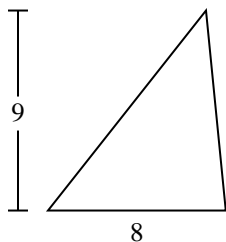
3)



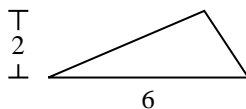
4)



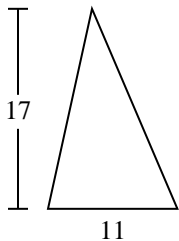
5)



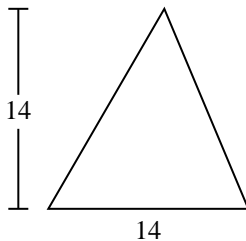
6)



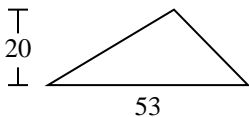
7)



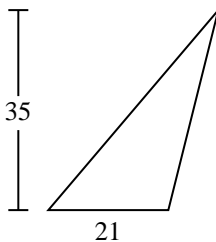
8)



9)



10)



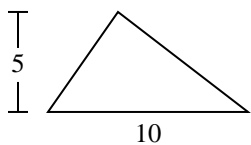
Respuestas

- 1. _____
- 2. _____
- 3. _____
- 4. _____
- 5. _____
- 6. _____
- 7. _____
- 8. _____
- 9. _____
- 10. _____

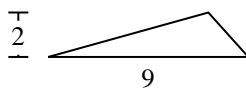


Encuentra el área de cada triángulo. Redondea tu respuesta a la décima más cercana.

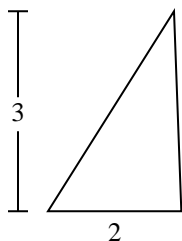
1)



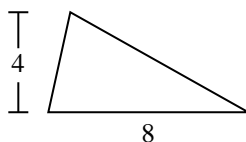
2)



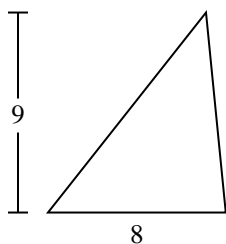
3)



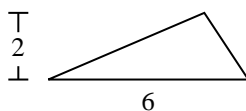
4)



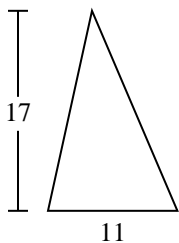
5)



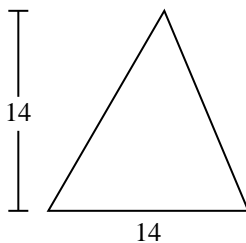
6)



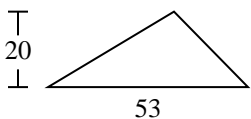
7)



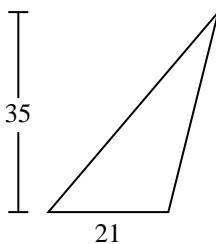
8)



9)



10)



Respuestas

1. 25

2. 9

3. 3

4. 16

5. 36

6. 6

7. 93.5

8. 98

9. 530

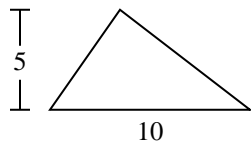
10. 367.5



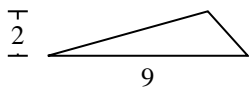
Encuentra el área de cada triángulo. Redondea tu respuesta a la décima más cercana.

93.5	98	530	25	9
6	36	16	3	

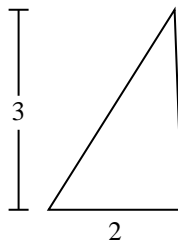
1)



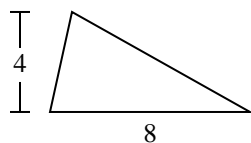
2)



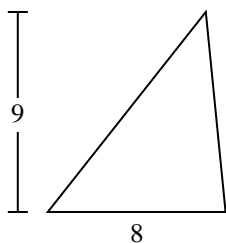
3)



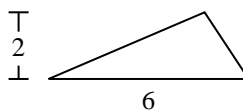
4)



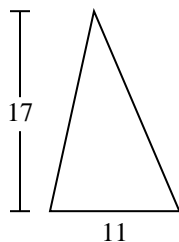
5)



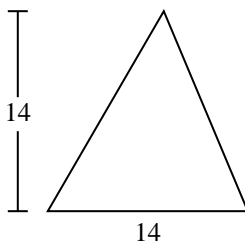
6)



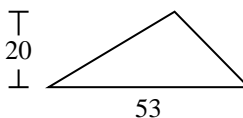
7)



8)



9)



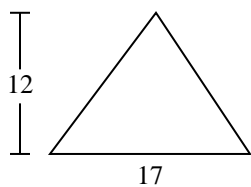
Respuestas

1. _____
2. _____
3. _____
4. _____
5. _____
6. _____
7. _____
8. _____
9. _____

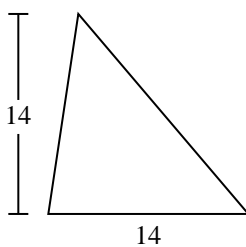


Encuentra el área de cada triángulo. Redondea tu respuesta a la décima más cercana.

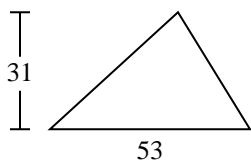
1)



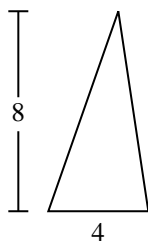
2)



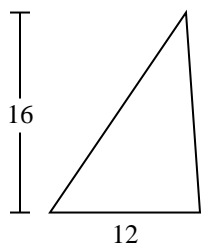
3)



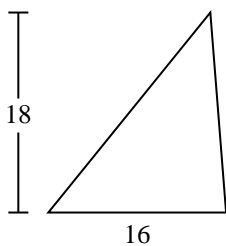
4)



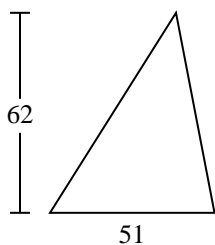
5)



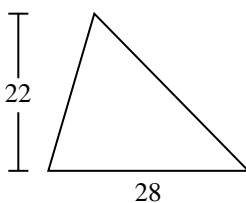
6)



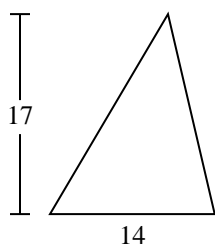
7)



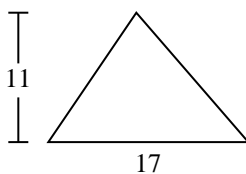
8)



9)



10)



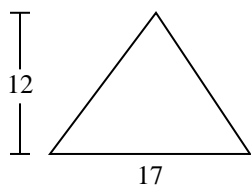
Respuestas

- 1. _____
- 2. _____
- 3. _____
- 4. _____
- 5. _____
- 6. _____
- 7. _____
- 8. _____
- 9. _____
- 10. _____

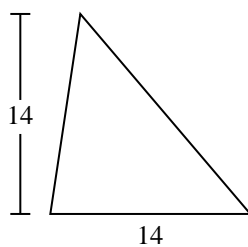


Encuentra el área de cada triángulo. Redondea tu respuesta a la décima más cercana.

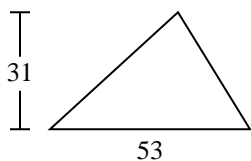
1)



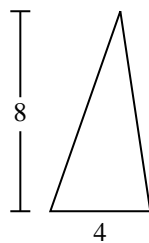
2)



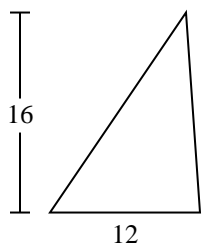
3)



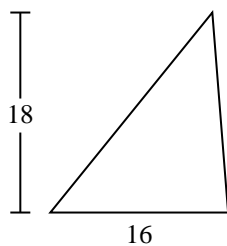
4)



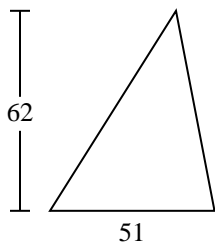
5)



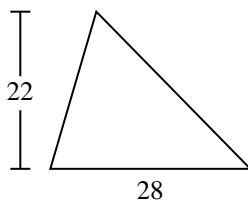
6)



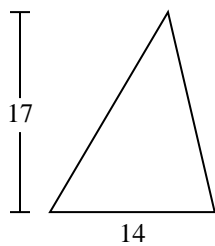
7)



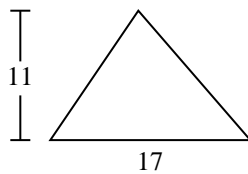
8)



9)



10)



Respuestas

1. **102**

2. **98**

3. **821.5**

4. **16**

5. **96**

6. **144**

7. **1,581**

8. **308**

9. **119**

10. **93.5**



Encuentra el área de cada triángulo. Redondea tu respuesta a la décima más cercana.

102

1,581

308

144

16

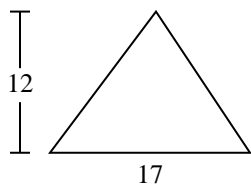
119

821.5

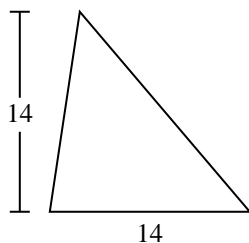
98

96

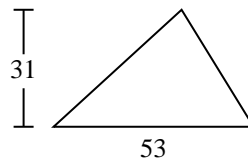
1)



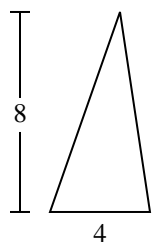
2)



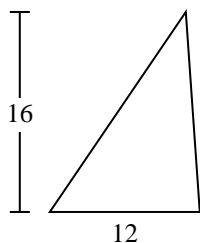
3)



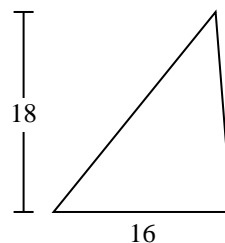
4)



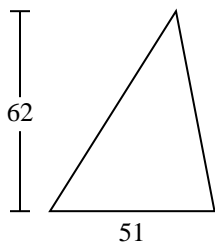
5)



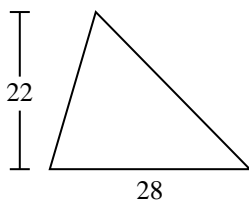
6)



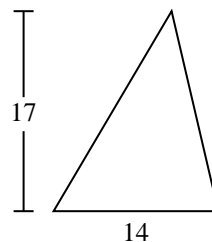
7)



8)



9)



Respuestas

1. _____

2. _____

3. _____

4. _____

5. _____

6. _____

7. _____

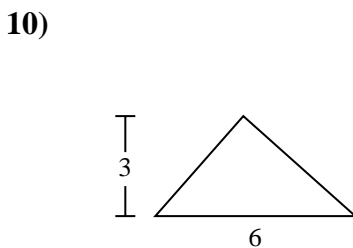
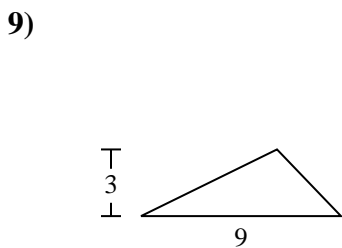
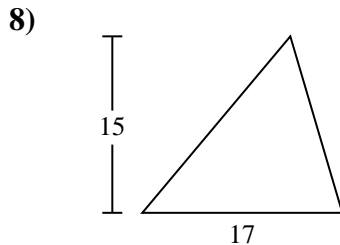
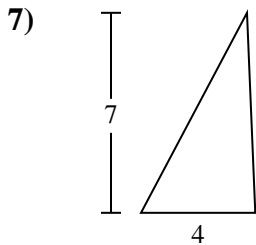
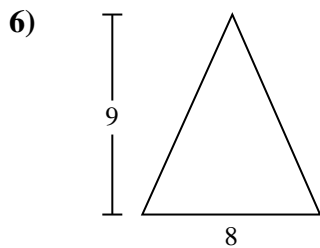
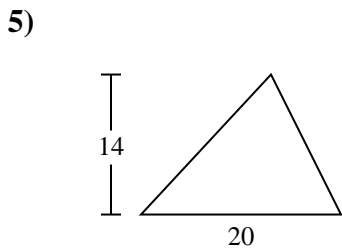
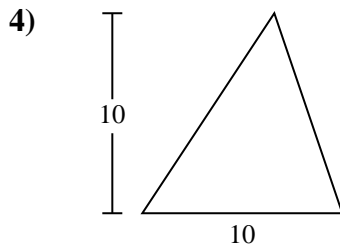
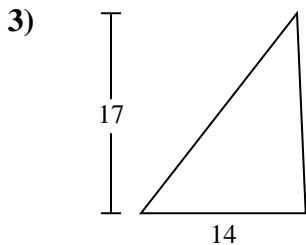
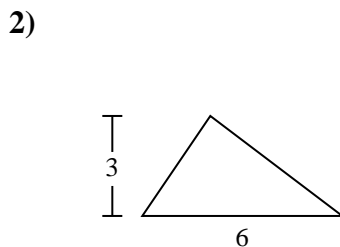
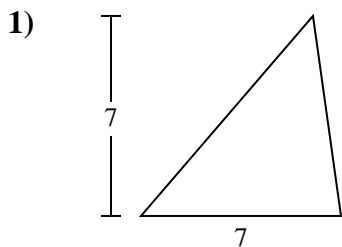
8. _____

9. _____



Encuentra el área de cada triángulo. Redondea tu respuesta a la décima más cercana.

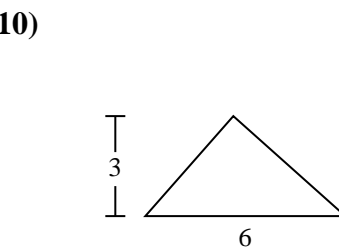
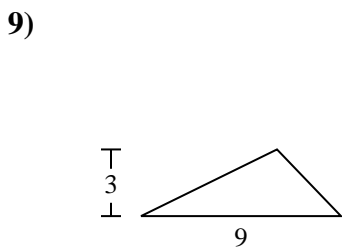
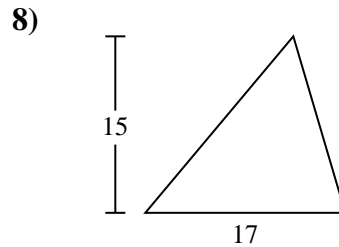
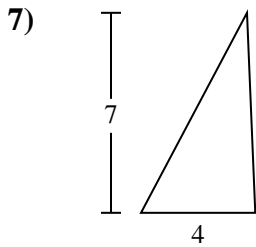
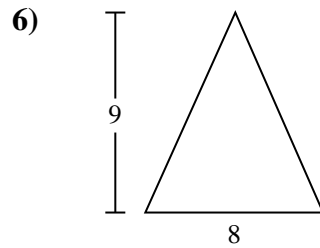
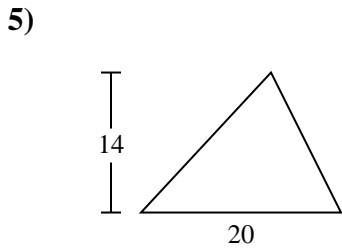
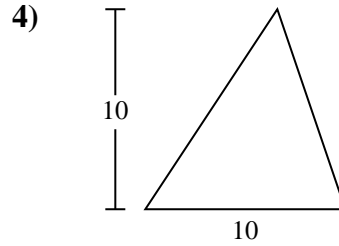
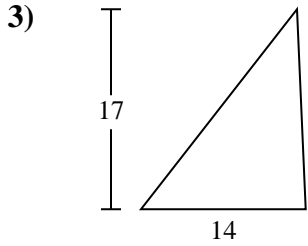
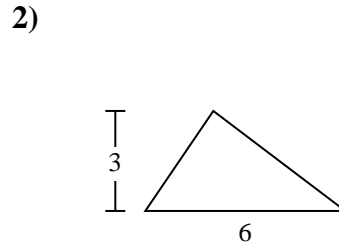
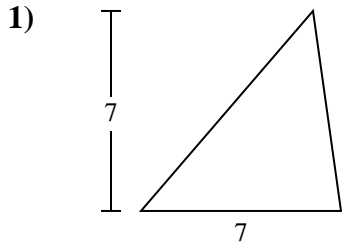
Respuestas



- 1. _____
- 2. _____
- 3. _____
- 4. _____
- 5. _____
- 6. _____
- 7. _____
- 8. _____
- 9. _____
- 10. _____



Encuentra el área de cada triángulo. Redondea tu respuesta a la décima más cercana.



Respuestas

1. 24.5
2. 9
3. 119
4. 50
5. 140
6. 36
7. 14
8. 127.5
9. 13.5
10. 9



Encuentra el área de cada triángulo. Redondea tu respuesta a la décima más cercana.

127.5

13.5

119

140

14

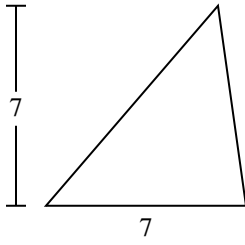
24.5

9

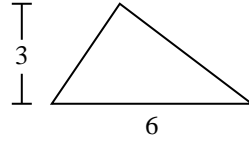
36

50

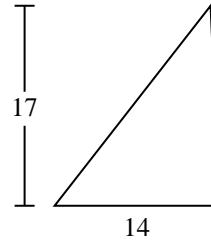
1)



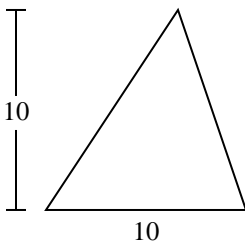
2)



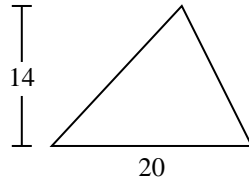
3)



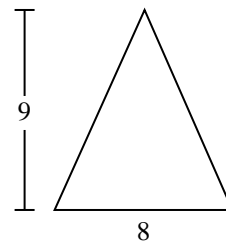
4)



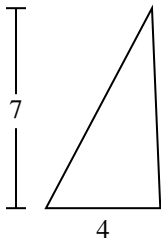
5)



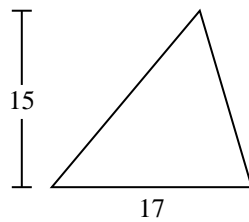
6)



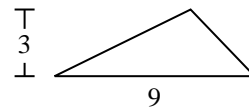
7)



8)



9)



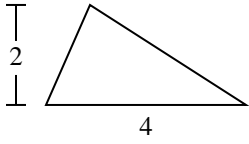
Respuestas

1. _____
2. _____
3. _____
4. _____
5. _____
6. _____
7. _____
8. _____
9. _____

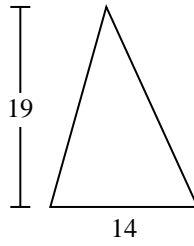


Encuentra el área de cada triángulo. Redondea tu respuesta a la décima más cercana.

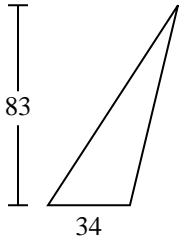
1)



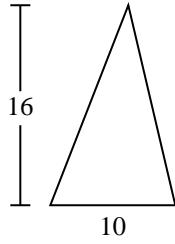
2)



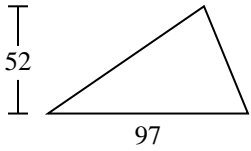
3)



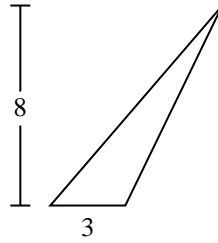
4)



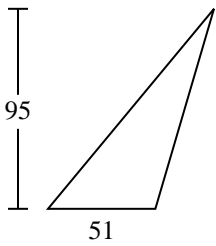
5)



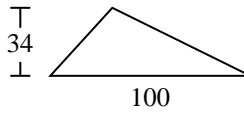
6)



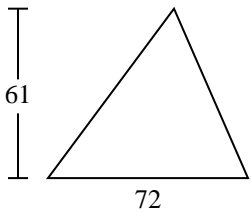
7)



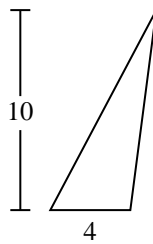
8)



9)



10)



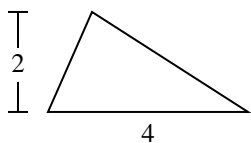
Respuestas

1. _____
2. _____
3. _____
4. _____
5. _____
6. _____
7. _____
8. _____
9. _____
10. _____

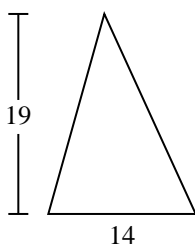


Encuentra el área de cada triángulo. Redondea tu respuesta a la décima más cercana.

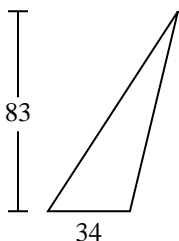
1)



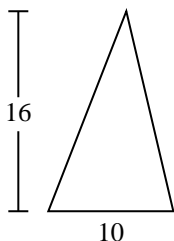
2)



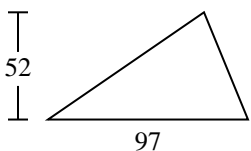
3)



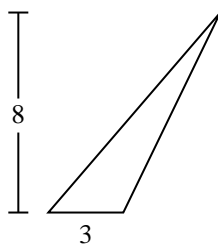
4)



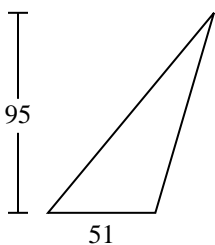
5)



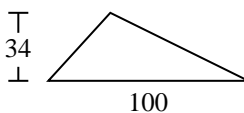
6)



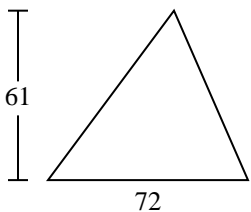
7)



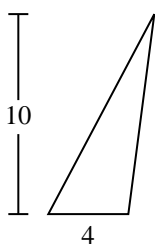
8)



9)



10)

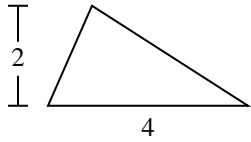
**Respuestas**1. 42. 1333. 1,4114. 805. 2,5226. 127. 2,422.58. 1,7009. 2,19610. 20



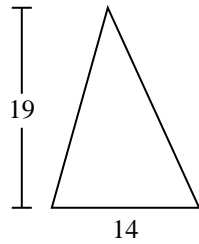
Encuentra el área de cada triángulo. Redondea tu respuesta a la décima más cercana.

133	4	1,411	2,522	2,196
1,700	2,422.5	80	12	

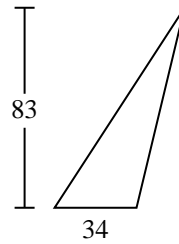
1)



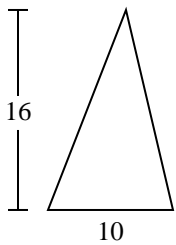
2)



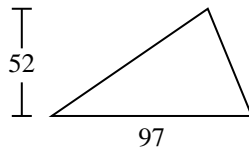
3)



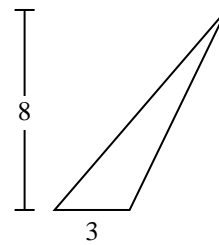
4)



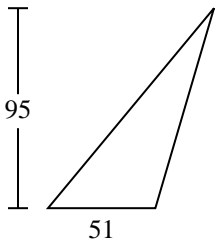
5)



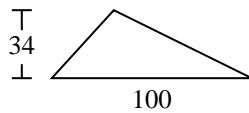
6)



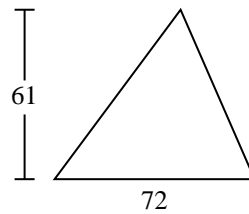
7)



8)



9)



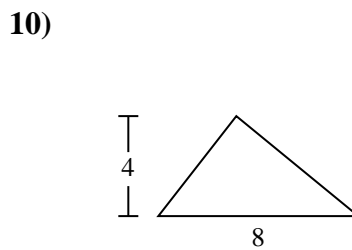
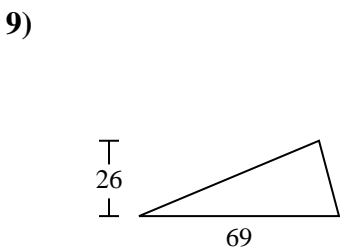
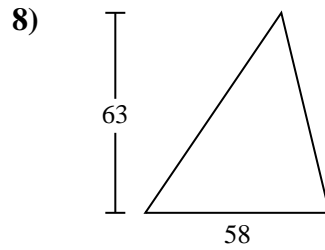
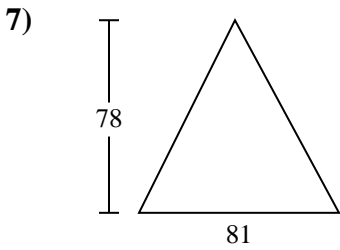
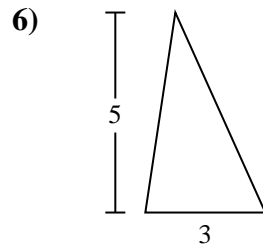
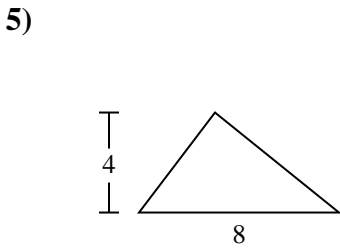
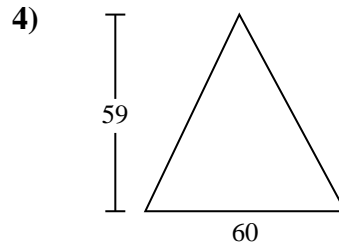
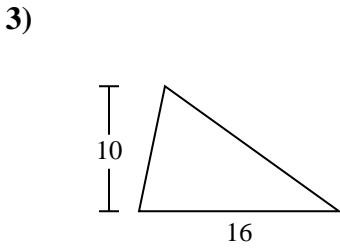
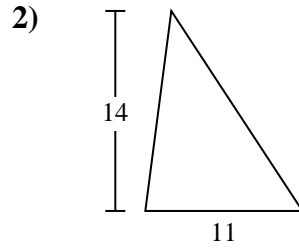
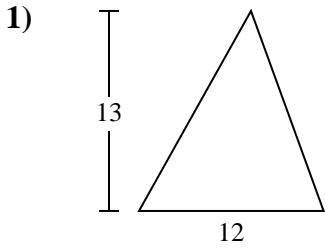
Respuestas

1. _____
2. _____
3. _____
4. _____
5. _____
6. _____
7. _____
8. _____
9. _____



Encuentra el área de cada triángulo. Redondea tu respuesta a la décima más cercana.

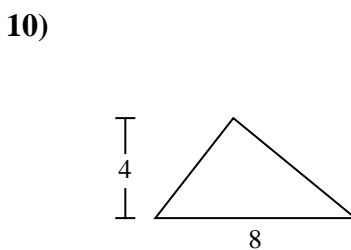
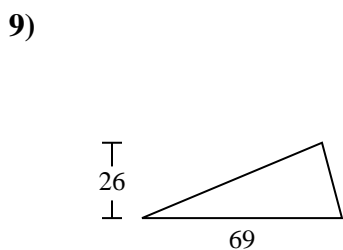
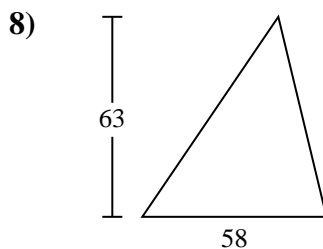
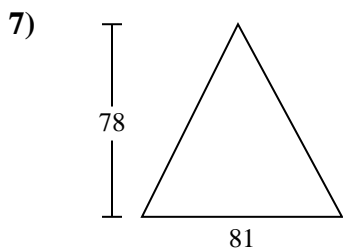
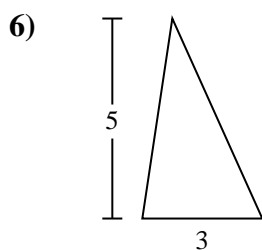
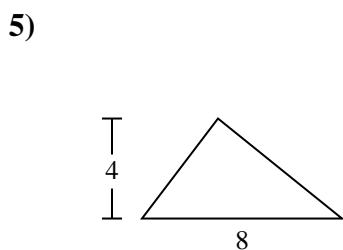
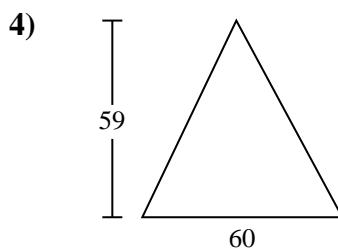
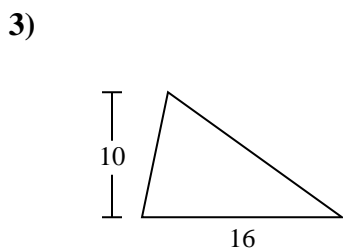
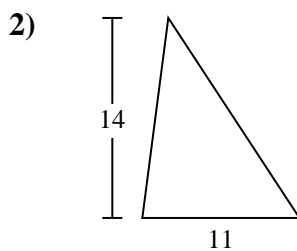
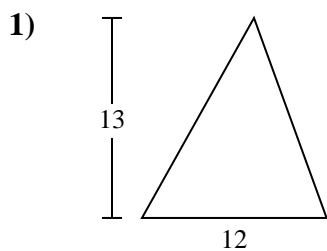
Respuestas



- 1. _____
- 2. _____
- 3. _____
- 4. _____
- 5. _____
- 6. _____
- 7. _____
- 8. _____
- 9. _____
- 10. _____



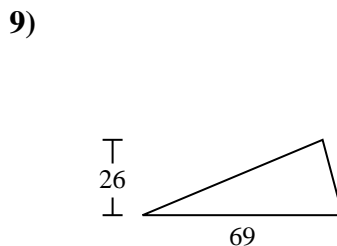
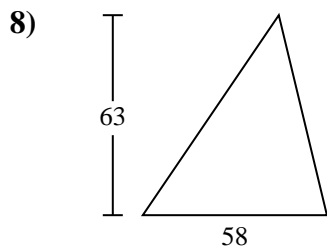
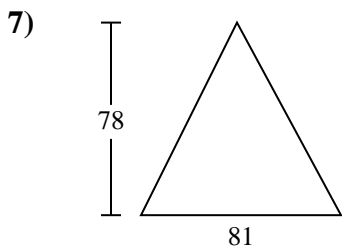
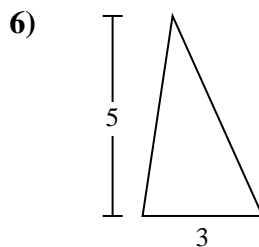
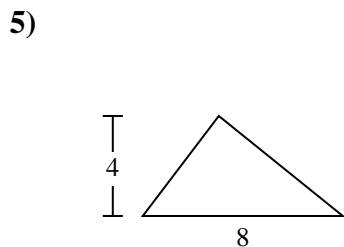
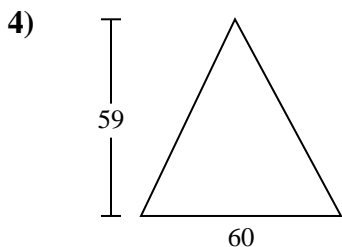
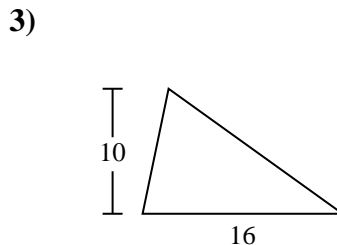
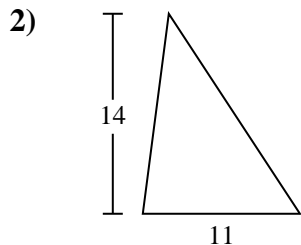
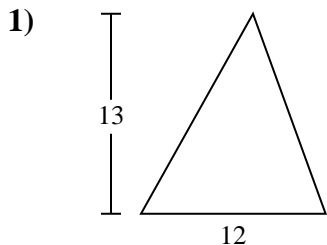
Encuentra el área de cada triángulo. Redondea tu respuesta a la décima más cercana.

**Respuestas**1. 782. 773. 804. 1,7705. 166. 7.57. 3,1598. 1,8279. 89710. 16



Encuentra el área de cada triángulo. Redondea tu respuesta a la décima más cercana.

1,827	1,770	7.5	78	3,159
80	77	897	16	



Respuestas

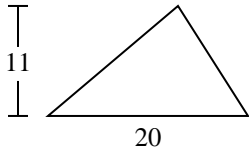
1. _____
2. _____
3. _____
4. _____
5. _____
6. _____
7. _____
8. _____
9. _____



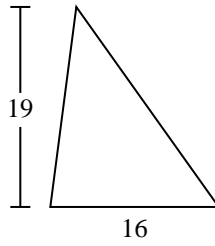
Encuentra el área de cada triángulo. Redondea tu respuesta a la décima más cercana.

Respuestas

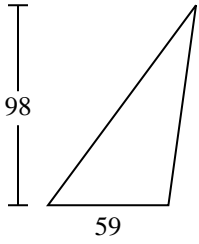
1)



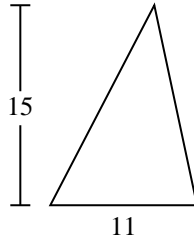
2)



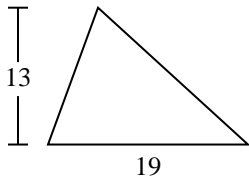
3)



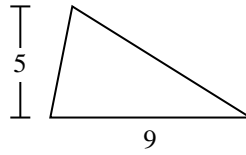
4)



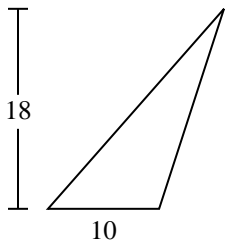
5)



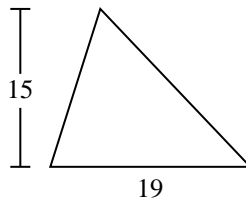
6)



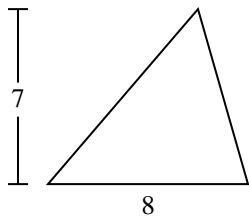
7)



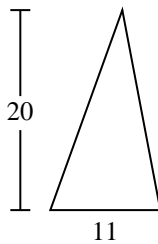
8)



9)



10)

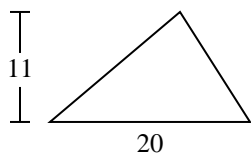


- 1. _____
- 2. _____
- 3. _____
- 4. _____
- 5. _____
- 6. _____
- 7. _____
- 8. _____
- 9. _____
- 10. _____

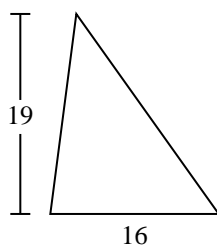


Encuentra el área de cada triángulo. Redondea tu respuesta a la décima más cercana.

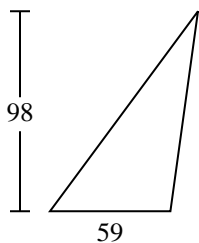
1)



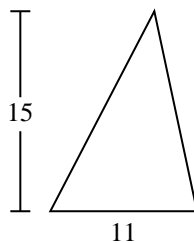
2)



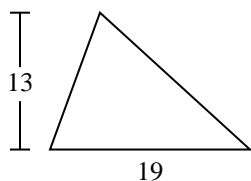
3)



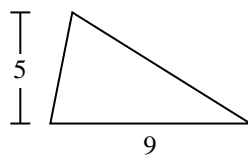
4)



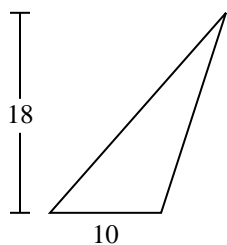
5)



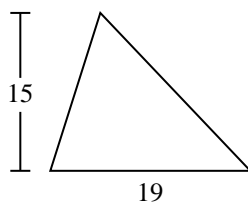
6)



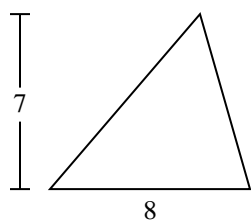
7)



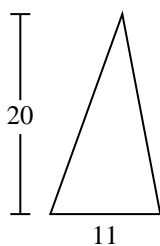
8)



9)



10)

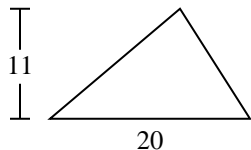
**Respuestas**1. **110**2. **152**3. **2,891**4. **82.5**5. **123.5**6. **22.5**7. **90**8. **142.5**9. **28**10. **110**



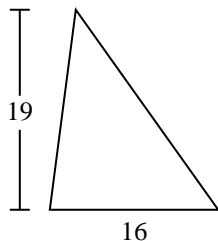
Encuentra el área de cada triángulo. Redondea tu respuesta a la décima más cercana.

22.5	152	28	90	142.5
123.5	2,891	82.5	110	

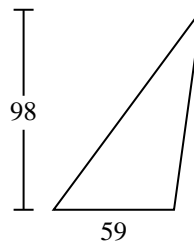
1)



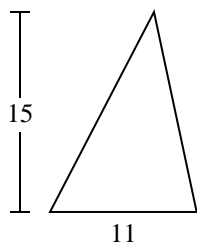
2)



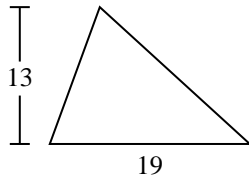
3)



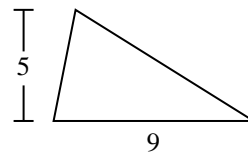
4)



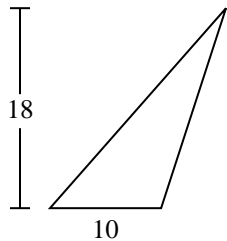
5)



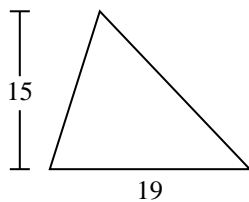
6)



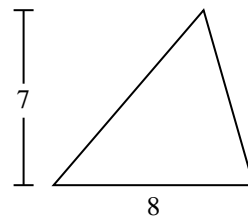
7)



8)



9)



Respuestas

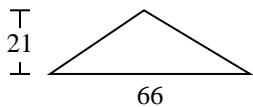
1. _____
2. _____
3. _____
4. _____
5. _____
6. _____
7. _____
8. _____
9. _____



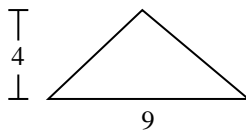
Encuentra el área de cada triángulo. Redondea tu respuesta a la décima más cercana.

Respuestas

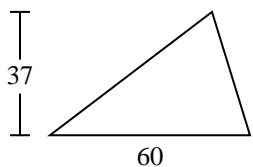
1)



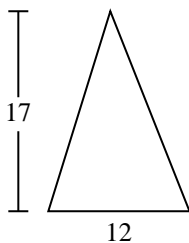
2)



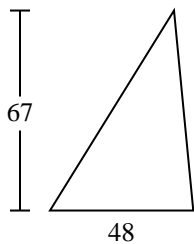
3)



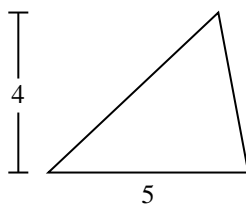
4)



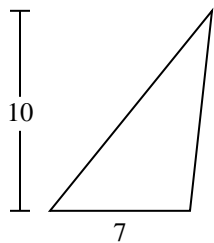
5)



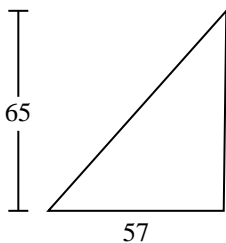
6)



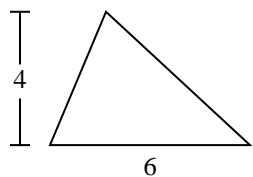
7)



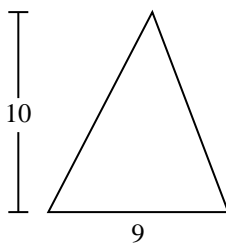
8)



9)



10)

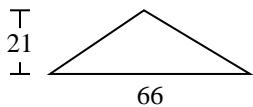


- 1. _____
- 2. _____
- 3. _____
- 4. _____
- 5. _____
- 6. _____
- 7. _____
- 8. _____
- 9. _____
- 10. _____

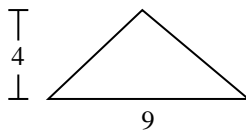


Encuentra el área de cada triángulo. Redondea tu respuesta a la décima más cercana.

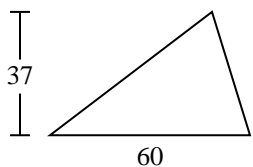
1)



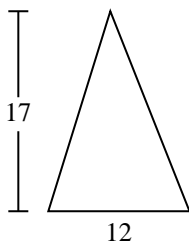
2)



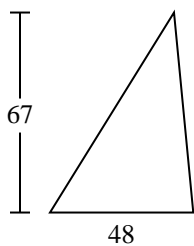
3)



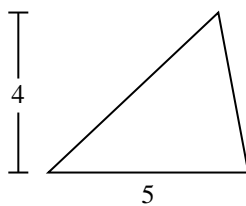
4)



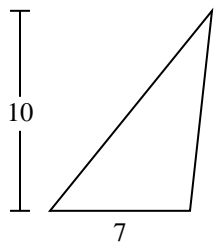
5)



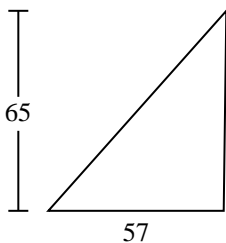
6)



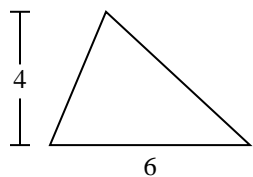
7)



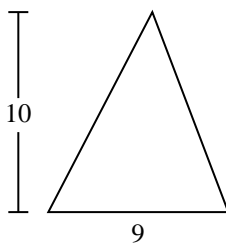
8)



9)



10)

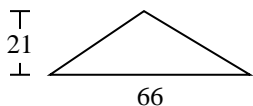
**Respuestas**1. 6932. 183. 1,1104. 1025. 1,6086. 107. 358. 1,852.59. 1210. 45



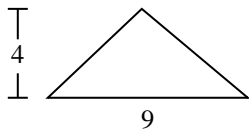
Encuentra el área de cada triángulo. Redondea tu respuesta a la décima más cercana.

1,110	693	102	1,852.5	10
18	12	1,608	35	

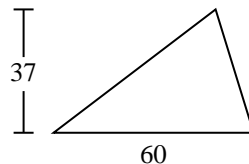
1)



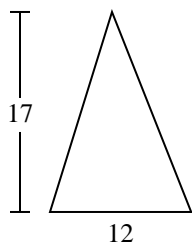
2)



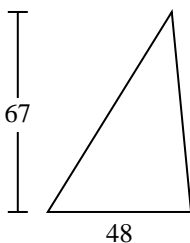
3)



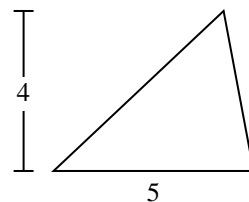
4)



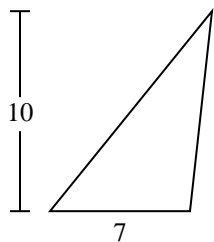
5)



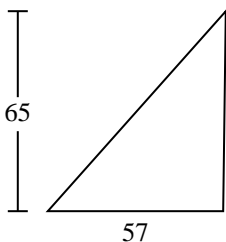
6)



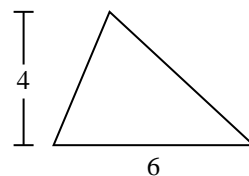
7)



8)



9)



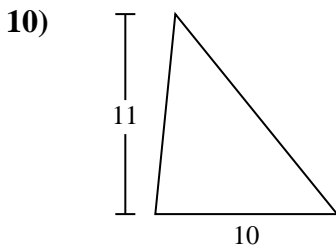
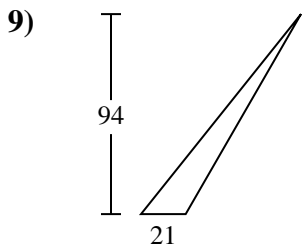
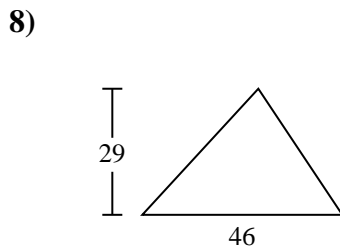
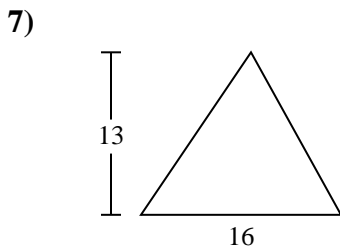
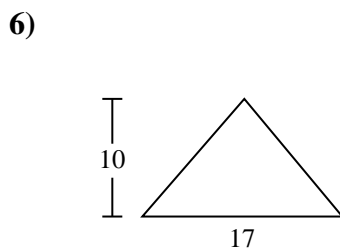
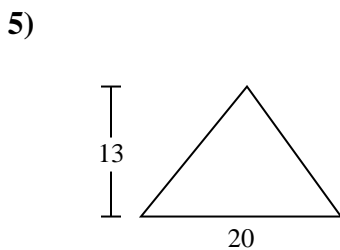
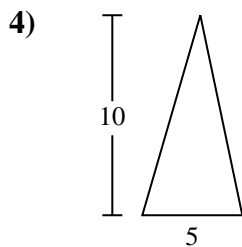
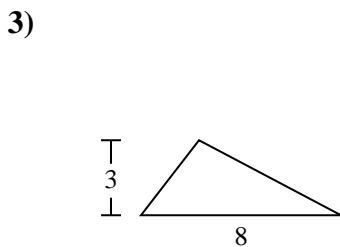
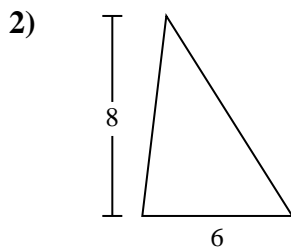
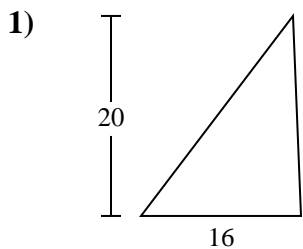
Respuestas

1. _____
2. _____
3. _____
4. _____
5. _____
6. _____
7. _____
8. _____
9. _____



Encuentra el área de cada triángulo. Redondea tu respuesta a la décima más cercana.

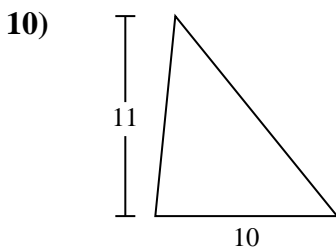
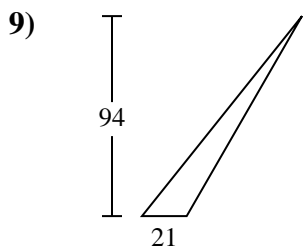
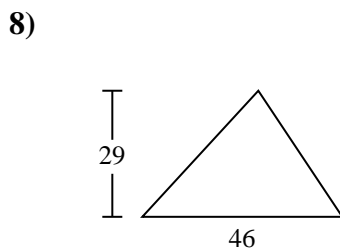
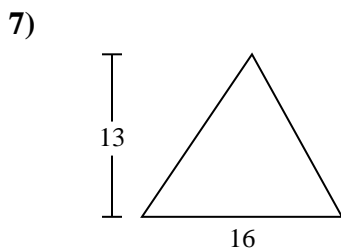
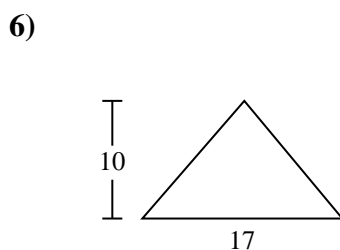
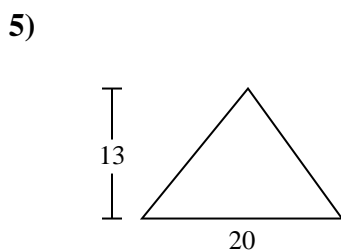
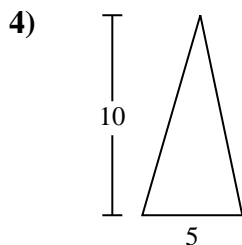
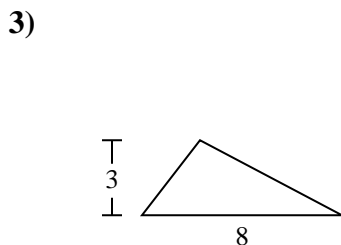
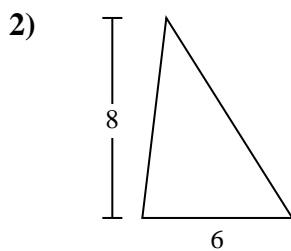
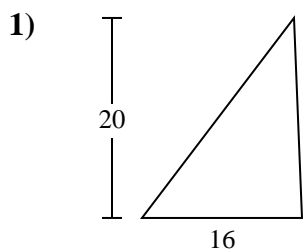
Respuestas



- 1. _____
- 2. _____
- 3. _____
- 4. _____
- 5. _____
- 6. _____
- 7. _____
- 8. _____
- 9. _____
- 10. _____



Encuentra el área de cada triángulo. Redondea tu respuesta a la décima más cercana.



Respuestas

1. 160
2. 24
3. 12
4. 25
5. 130
6. 85
7. 104
8. 667
9. 987
10. 55



Encuentra el área de cada triángulo. Redondea tu respuesta a la décima más cercana.

25

160

85

24

667

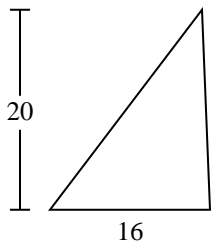
987

104

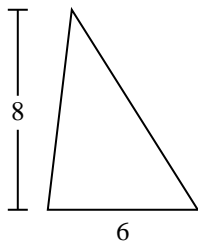
12

130

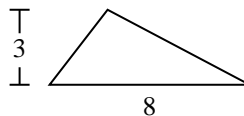
1)



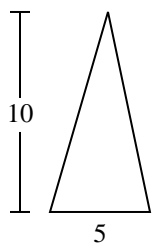
2)



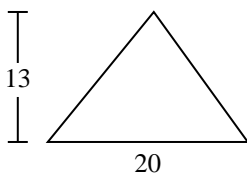
3)



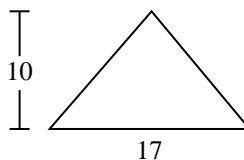
4)



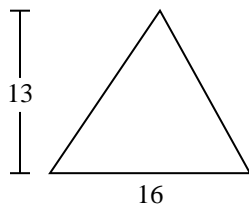
5)



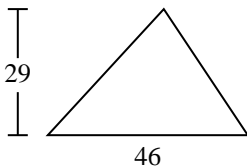
6)



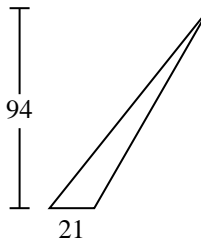
7)



8)



9)



Respuestas

1. _____

2. _____

3. _____

4. _____

5. _____

6. _____

7. _____

8. _____

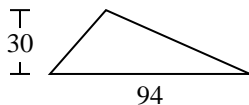
9. _____



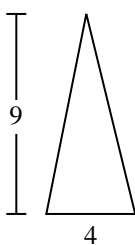
Encuentra el área de cada triángulo. Redondea tu respuesta a la décima más cercana.

Respuestas

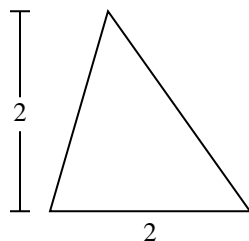
1)



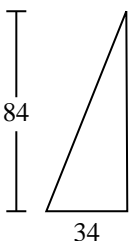
2)



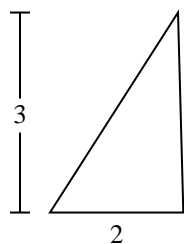
3)



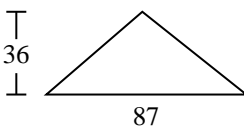
4)



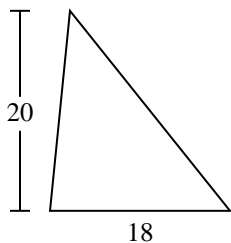
5)



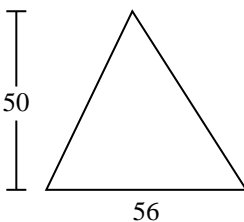
6)



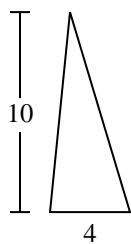
7)



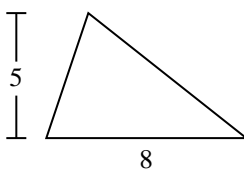
8)



9)



10)

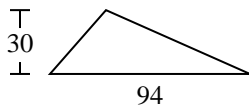


- 1. _____
- 2. _____
- 3. _____
- 4. _____
- 5. _____
- 6. _____
- 7. _____
- 8. _____
- 9. _____
- 10. _____

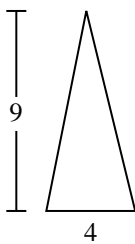


Encuentra el área de cada triángulo. Redondea tu respuesta a la décima más cercana.

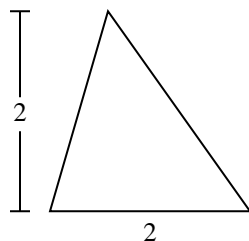
1)



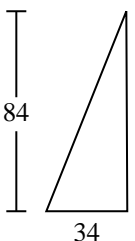
2)



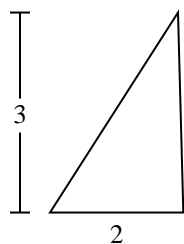
3)



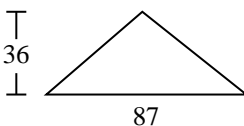
4)



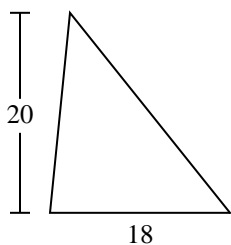
5)



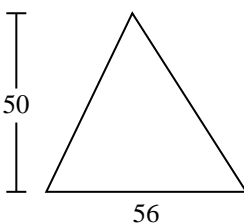
6)



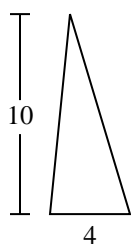
7)



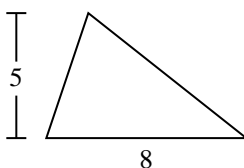
8)



9)



10)

**Respuestas**1. 1,4102. 183. 24. 1,4285. 36. 1,5667. 1808. 1,4009. 2010. 20



Encuentra el área de cada triángulo. Redondea tu respuesta a la décima más cercana.

180

1,428

18

1,566

1,400

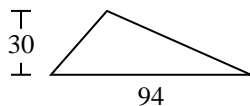
3

2

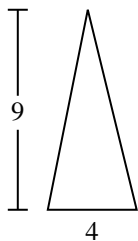
20

1,410

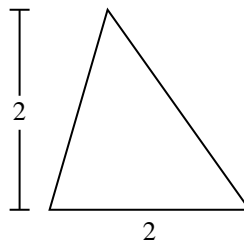
1)



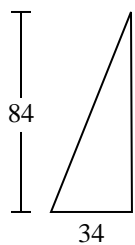
2)



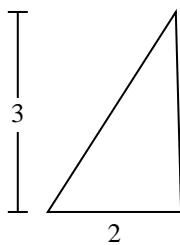
3)



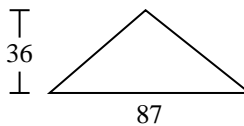
4)



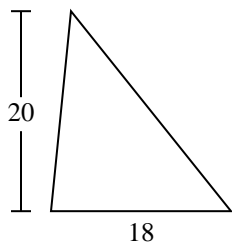
5)



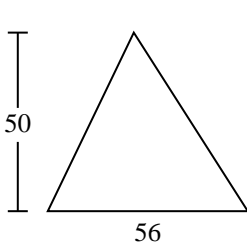
6)



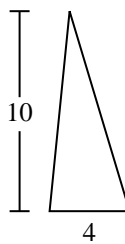
7)



8)



9)



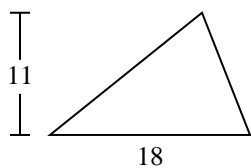
Respuestas

1. _____
2. _____
3. _____
4. _____
5. _____
6. _____
7. _____
8. _____
9. _____



Encuentra el área de cada triángulo. Redondea tu respuesta a la décima más cercana.

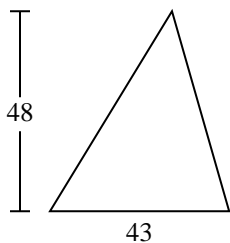
1)



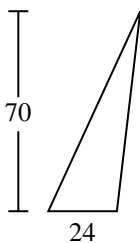
2)



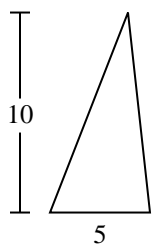
3)



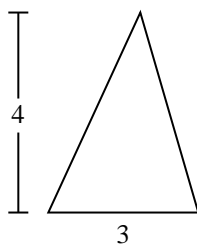
4)



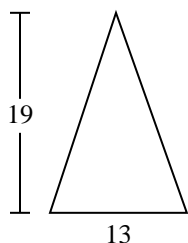
5)



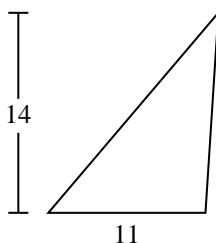
6)



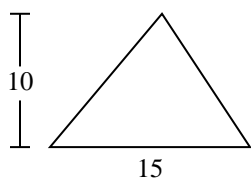
7)



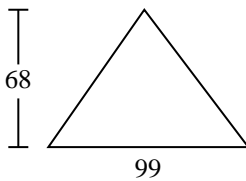
8)



9)



10)



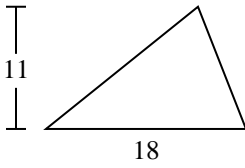
Respuestas

- 1. _____
- 2. _____
- 3. _____
- 4. _____
- 5. _____
- 6. _____
- 7. _____
- 8. _____
- 9. _____
- 10. _____



Encuentra el área de cada triángulo. Redondea tu respuesta a la décima más cercana.

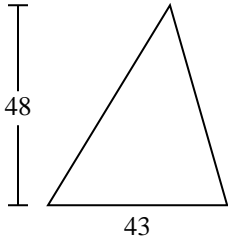
1)



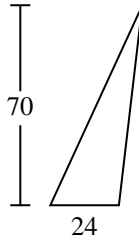
2)



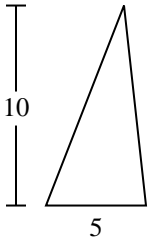
3)



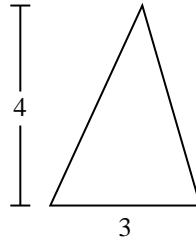
4)



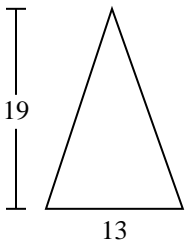
5)



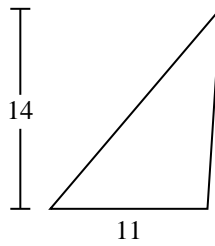
6)



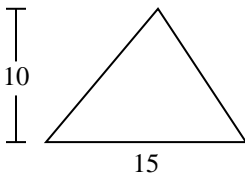
7)



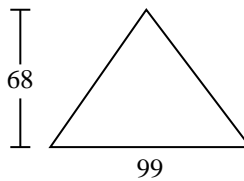
8)



9)



10)

**Respuestas**

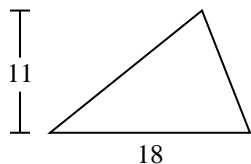
1. 99
2. 7
3. 1,032
4. 840
5. 25
6. 6
7. 123.5
8. 77
9. 75
10. 3,366



Encuentra el área de cada triángulo. Redondea tu respuesta a la décima más cercana.

77	6	99	1,032	25
840	75	123.5	7	

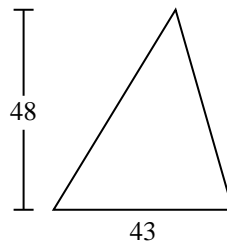
1)



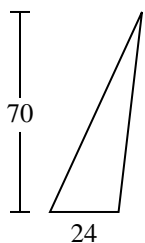
2)



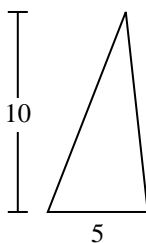
3)



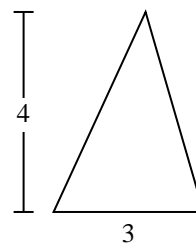
4)



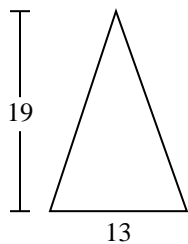
5)



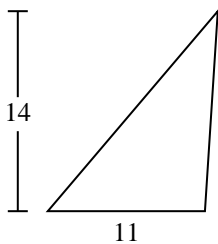
6)



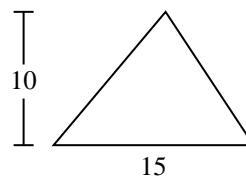
7)



8)



9)



Respuestas

1. _____
2. _____
3. _____
4. _____
5. _____
6. _____
7. _____
8. _____
9. _____