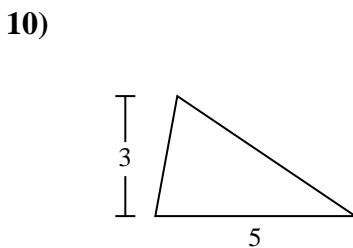
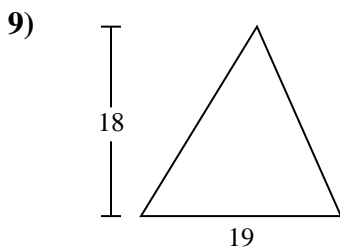
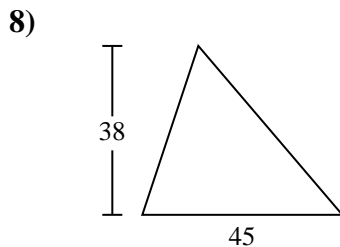
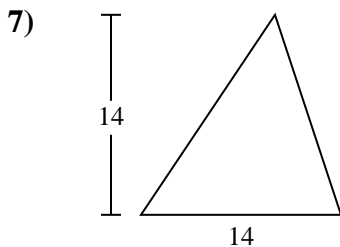
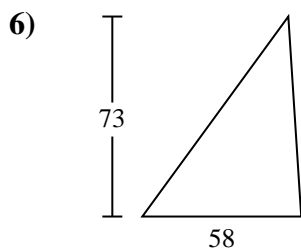
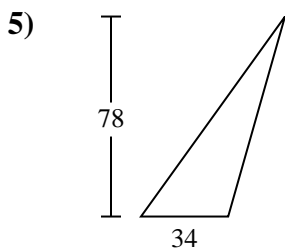
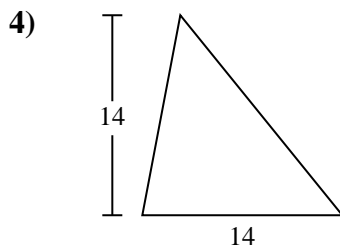
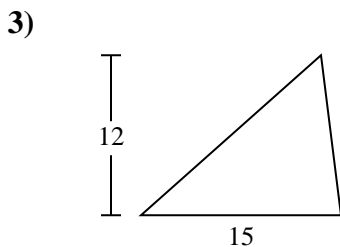
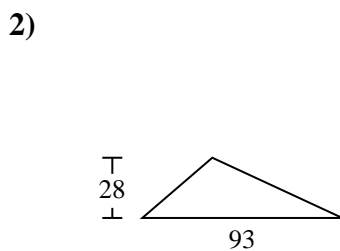
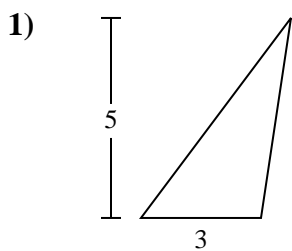




Encuentra el área de cada triángulo. Redondea tu respuesta a la décima más cercana.

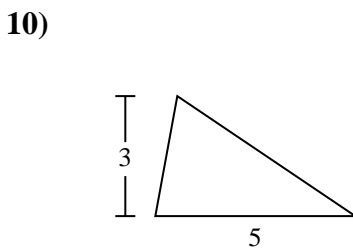
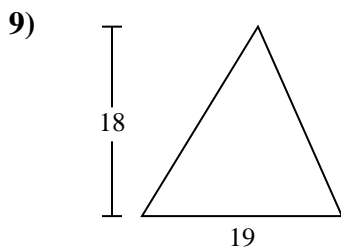
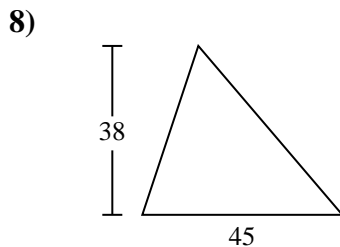
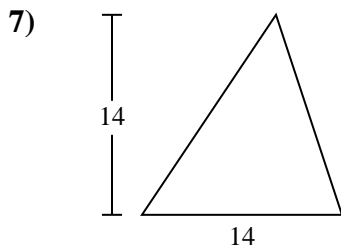
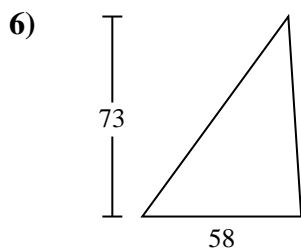
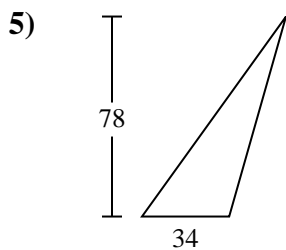
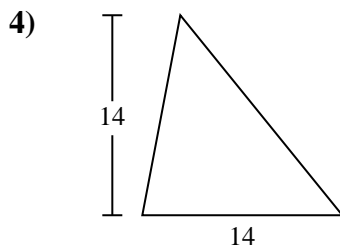
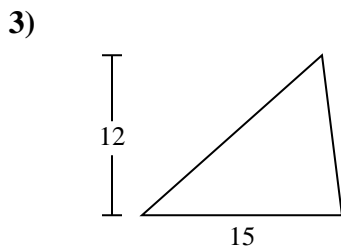
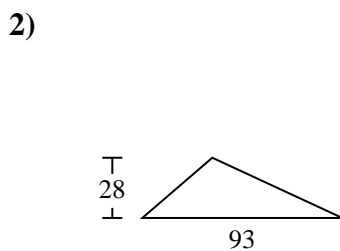
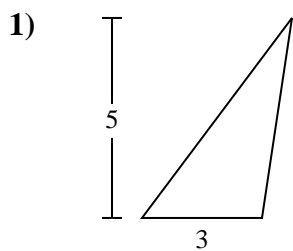
Respuestas



- 1. _____
- 2. _____
- 3. _____
- 4. _____
- 5. _____
- 6. _____
- 7. _____
- 8. _____
- 9. _____
- 10. _____



Encuentra el área de cada triángulo. Redondea tu respuesta a la décima más cercana.



Respuestas

1. 7.5
2. 1,302
3. 90
4. 98
5. 1,326
6. 2,117
7. 98
8. 855
9. 171
10. 7.5



Encuentra el área de cada triángulo. Redondea tu respuesta a la décima más cercana.

90

171

1,302

98

855

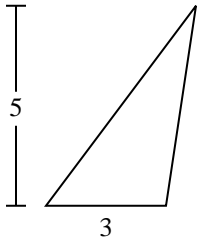
98

7.5

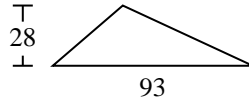
1,326

2,117

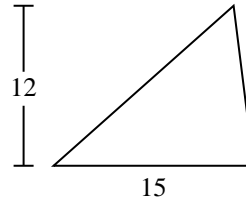
1)



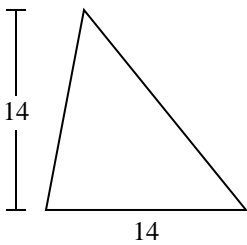
2)



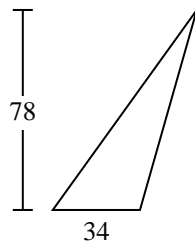
3)



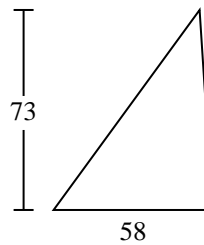
4)



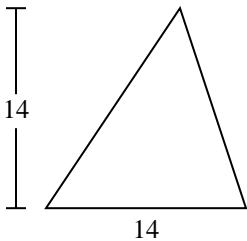
5)



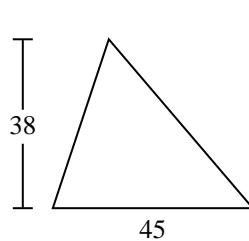
6)



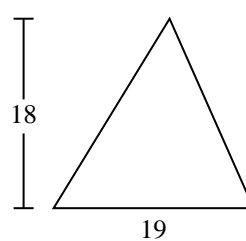
7)



8)



9)



Respuestas

1. _____
2. _____
3. _____
4. _____
5. _____
6. _____
7. _____
8. _____
9. _____