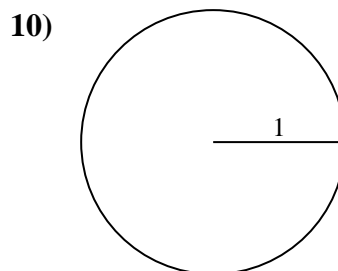
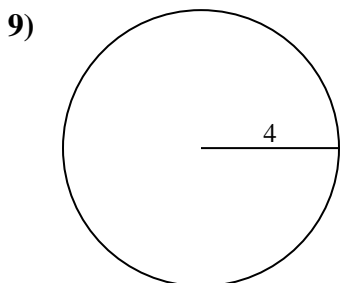
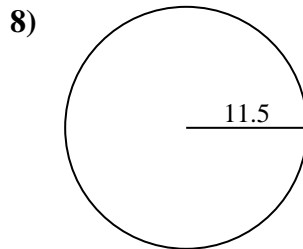
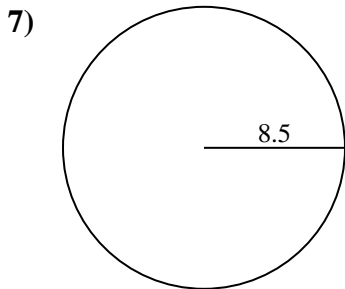
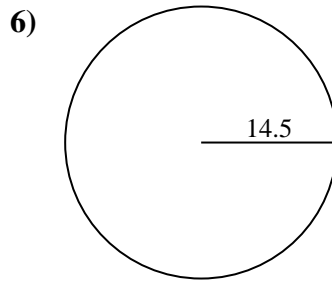
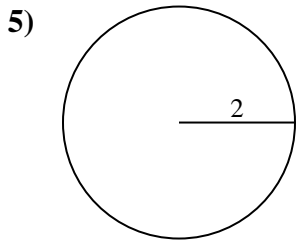
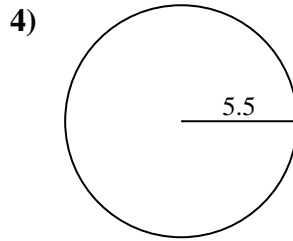
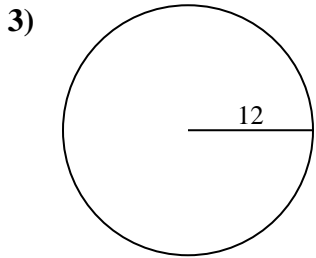
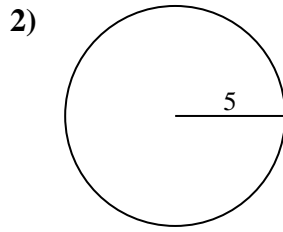
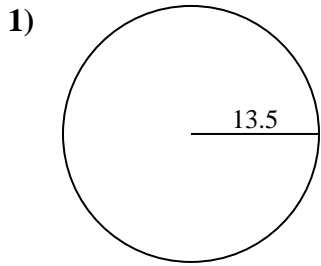




Encuentra la circunferencia de cada círculo. Los círculos no están a escala.

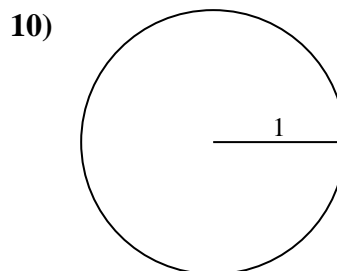
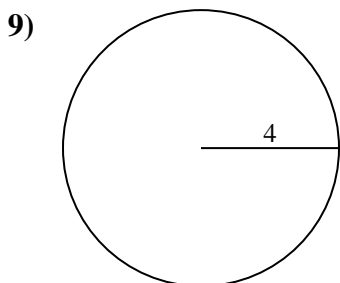
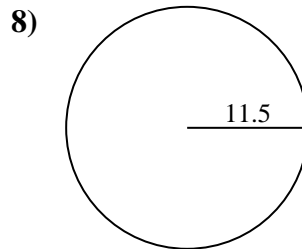
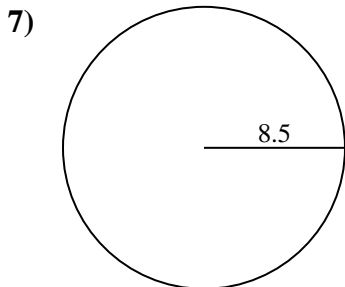
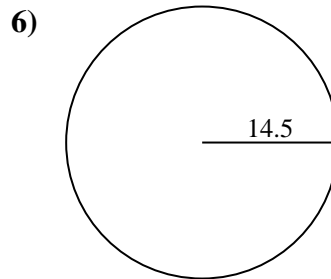
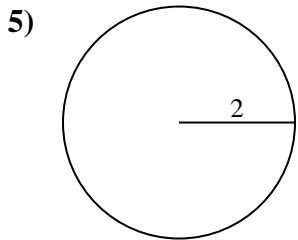
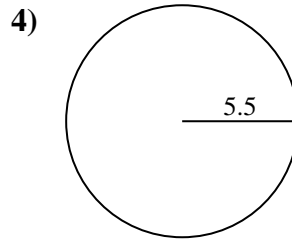
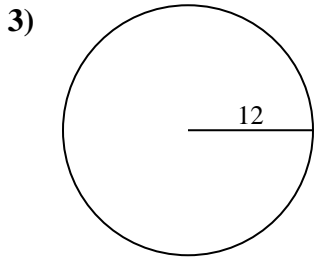
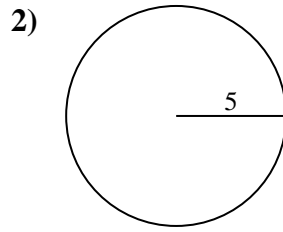
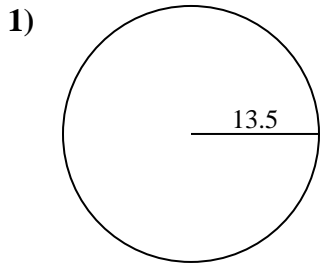


**Respuestas**

- 1. \_\_\_\_\_
- 2. \_\_\_\_\_
- 3. \_\_\_\_\_
- 4. \_\_\_\_\_
- 5. \_\_\_\_\_
- 6. \_\_\_\_\_
- 7. \_\_\_\_\_
- 8. \_\_\_\_\_
- 9. \_\_\_\_\_
- 10. \_\_\_\_\_



Encuentra la circunferencia de cada círculo. Los círculos no están a escala.



**Respuestas**

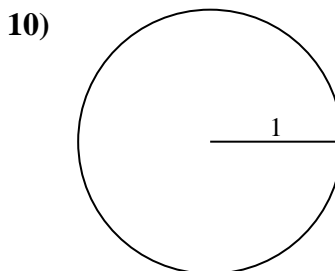
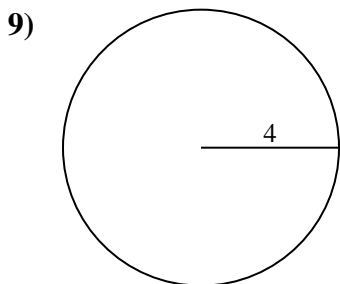
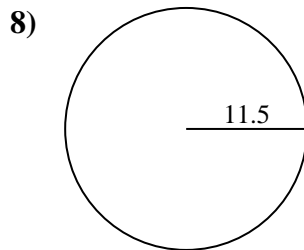
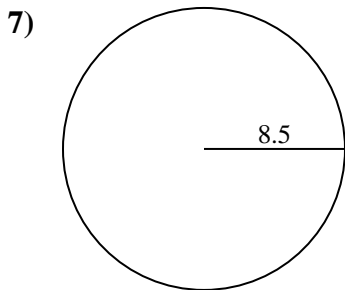
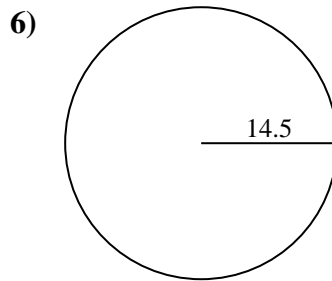
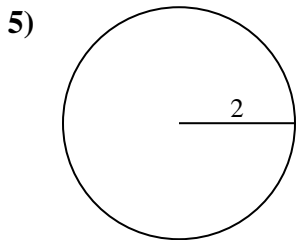
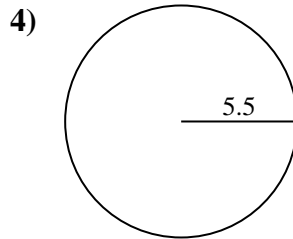
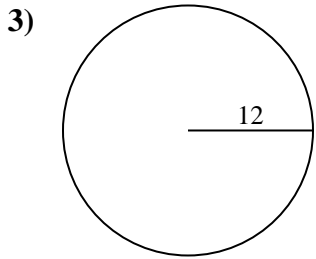
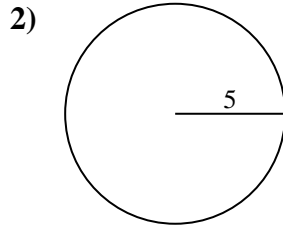
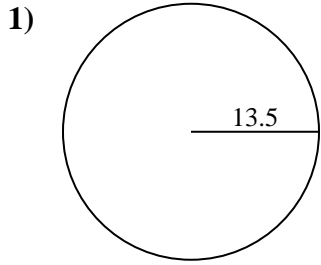
1. 84.82 cm
2. 31.42 cm
3. 75.4 cm
4. 34.56 cm
5. 12.57 cm
6. 91.11 cm
7. 53.41 cm
8. 72.26 cm
9. 25.13 cm
10. 6.28 cm



Encuentra la circunferencia de cada círculo. Los círculos no están a escala.

53.41 cm	84.82 cm	31.42 cm	72.26 cm	34.56 cm
12.57 cm	75.4 cm	91.11 cm	6.28 cm	25.13 cm

**Respuestas**



- 1. \_\_\_\_\_
- 2. \_\_\_\_\_
- 3. \_\_\_\_\_
- 4. \_\_\_\_\_
- 5. \_\_\_\_\_
- 6. \_\_\_\_\_
- 7. \_\_\_\_\_
- 8. \_\_\_\_\_
- 9. \_\_\_\_\_
- 10. \_\_\_\_\_