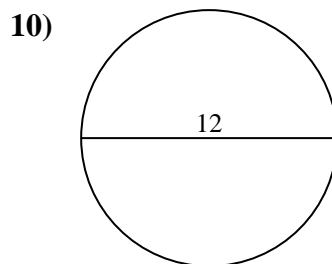
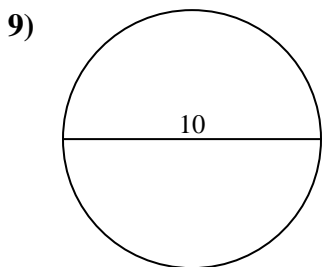
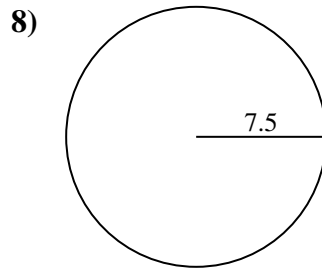
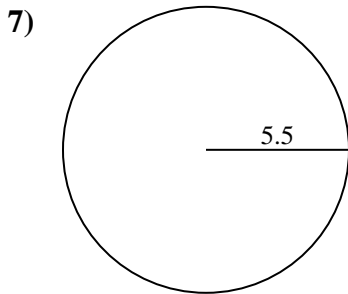
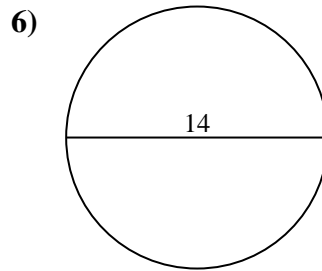
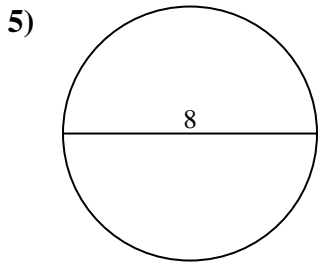
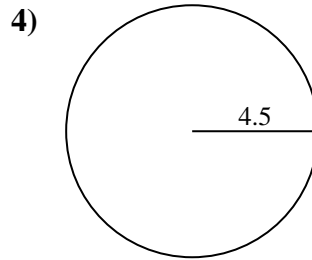
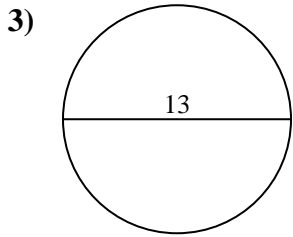
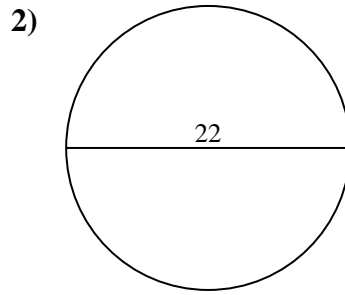
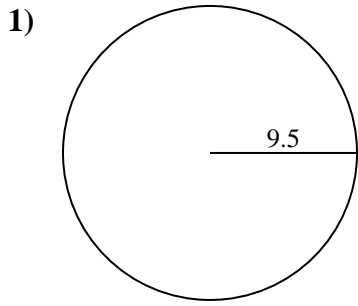




Encuentra la circunferencia de cada círculo. Los círculos no están a escala.

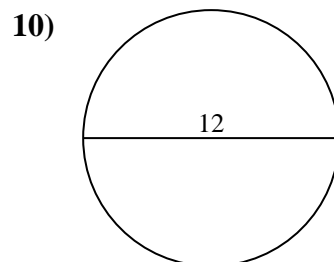
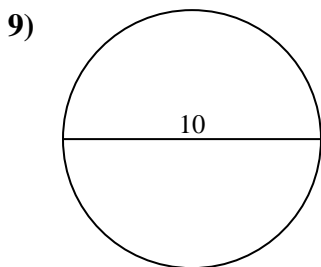
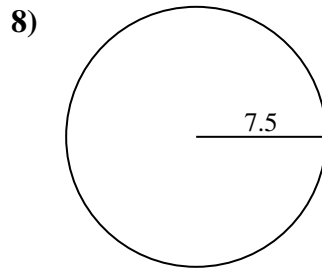
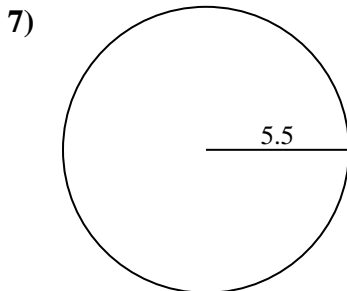
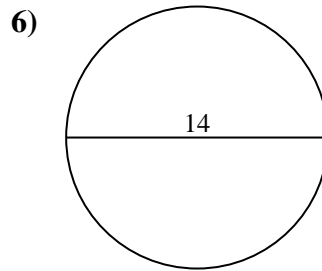
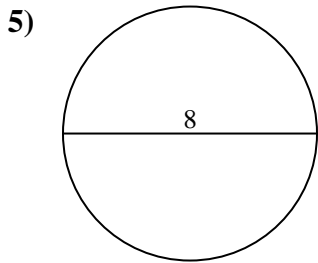
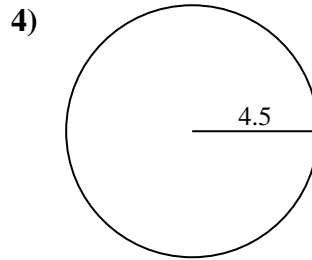
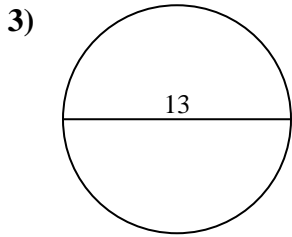
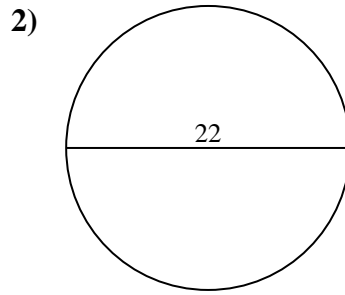
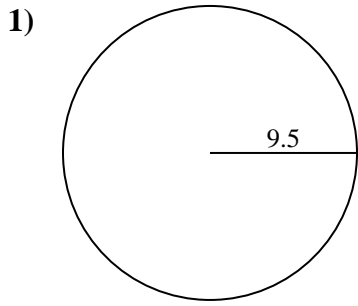


**Respuestas**

1. \_\_\_\_\_
2. \_\_\_\_\_
3. \_\_\_\_\_
4. \_\_\_\_\_
5. \_\_\_\_\_
6. \_\_\_\_\_
7. \_\_\_\_\_
8. \_\_\_\_\_
9. \_\_\_\_\_
10. \_\_\_\_\_



Encuentra la circunferencia de cada círculo. Los círculos no están a escala.



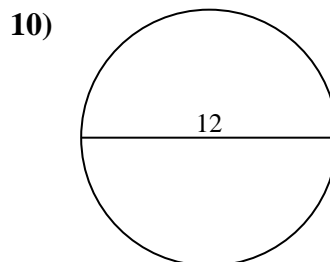
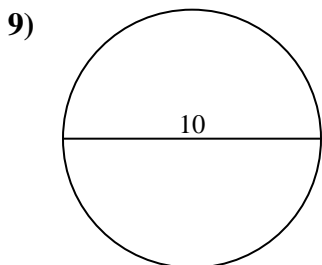
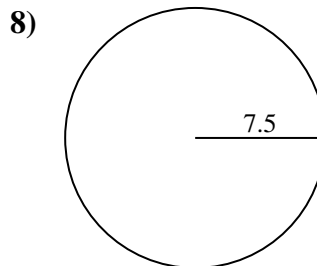
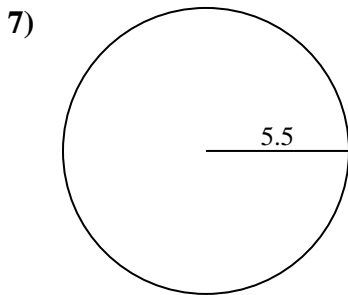
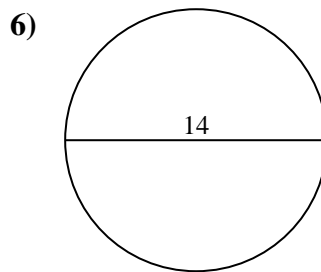
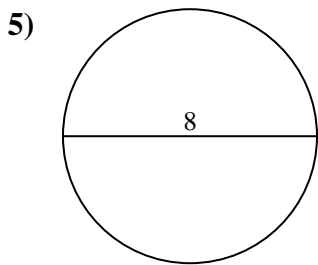
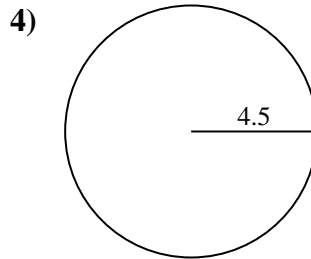
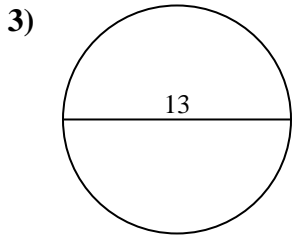
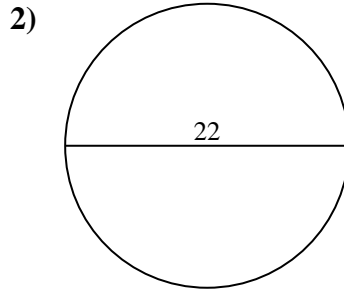
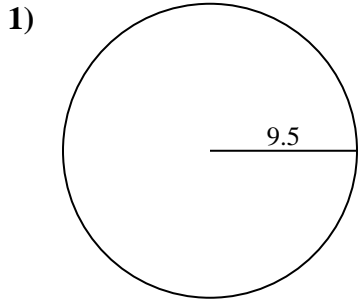
**Respuestas**

1. 59.69 cm
2. 69.12 cm
3. 40.84 cm
4. 28.27 cm
5. 25.13 cm
6. 43.98 cm
7. 34.56 cm
8. 47.12 cm
9. 31.42 cm
10. 37.7 cm



Encuentra la circunferencia de cada círculo. Los círculos no están a escala.

59.69 cm	25.13 cm	31.42 cm	40.84 cm	34.56 cm
28.27 cm	37.7 cm	69.12 cm	47.12 cm	43.98 cm



**Respuestas**

1. \_\_\_\_\_
2. \_\_\_\_\_
3. \_\_\_\_\_
4. \_\_\_\_\_
5. \_\_\_\_\_
6. \_\_\_\_\_
7. \_\_\_\_\_
8. \_\_\_\_\_
9. \_\_\_\_\_
10. \_\_\_\_\_