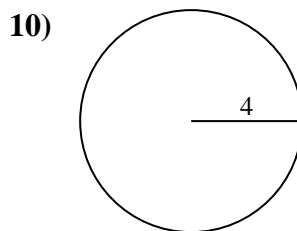
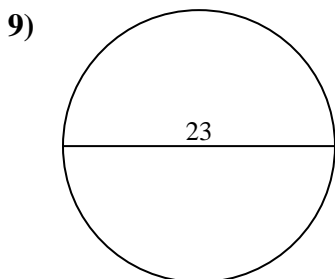
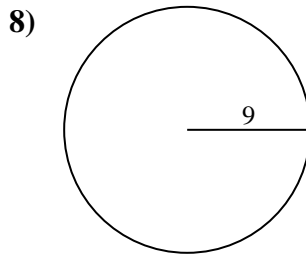
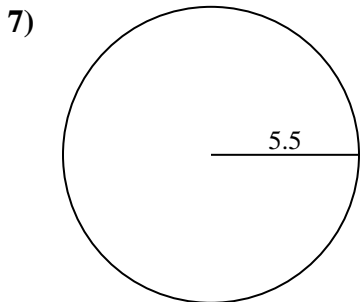
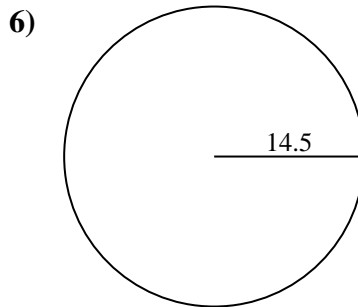
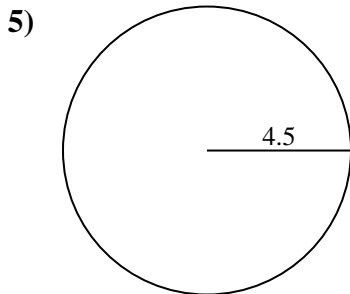
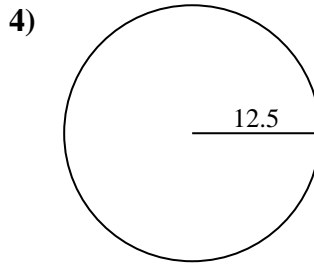
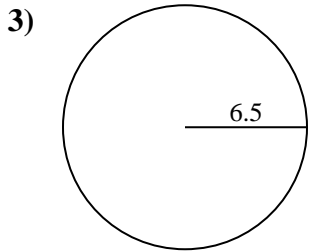
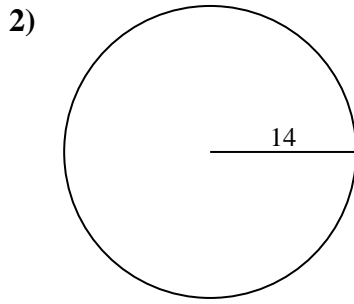
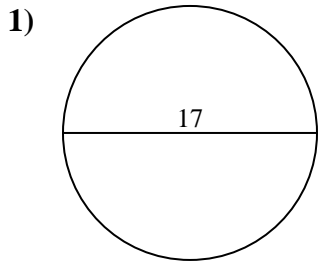




Encuentra la circunferencia de cada círculo. Los círculos no están a escala.

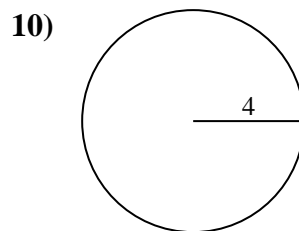
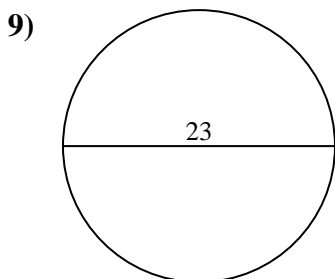
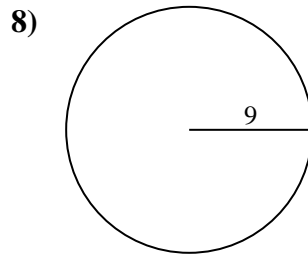
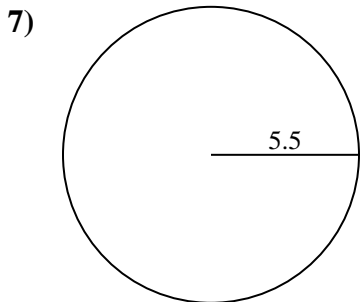
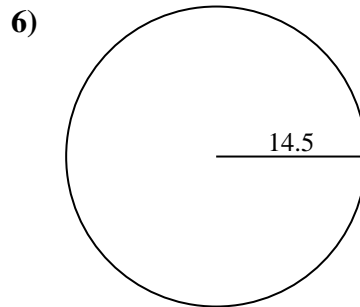
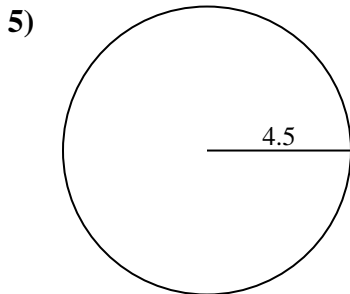
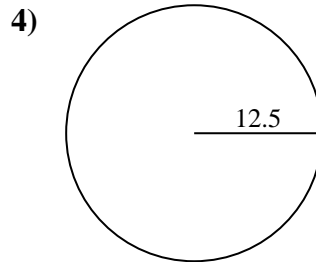
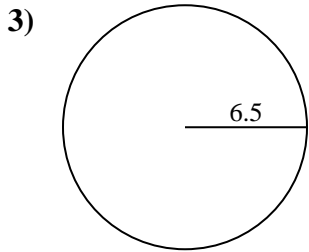
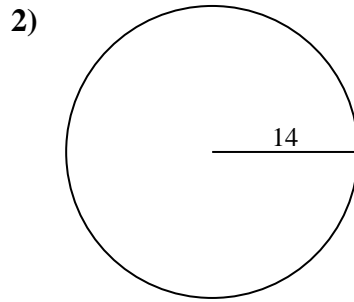
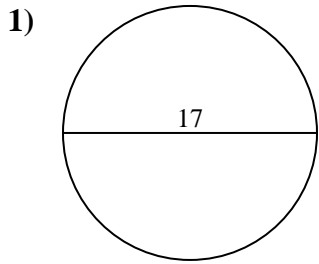


**Respuestas**

- 1. \_\_\_\_\_
- 2. \_\_\_\_\_
- 3. \_\_\_\_\_
- 4. \_\_\_\_\_
- 5. \_\_\_\_\_
- 6. \_\_\_\_\_
- 7. \_\_\_\_\_
- 8. \_\_\_\_\_
- 9. \_\_\_\_\_
- 10. \_\_\_\_\_



Encuentra la circunferencia de cada círculo. Los círculos no están a escala.



**Respuestas**

1. **53.41 cm**
2. **87.96 cm**
3. **40.84 cm**
4. **78.54 cm**
5. **28.27 cm**
6. **91.11 cm**
7. **34.56 cm**
8. **56.55 cm**
9. **72.26 cm**
10. **25.13 cm**



Encuentra la circunferencia de cada círculo. Los círculos no están a escala.

72.26 cm

40.84 cm

34.56 cm

53.41 cm

25.13 cm

28.27 cm

87.96 cm

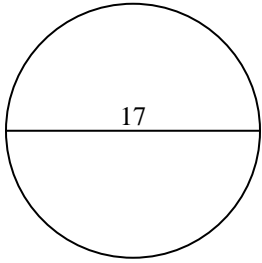
78.54 cm

91.11 cm

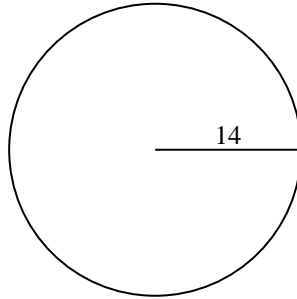
56.55 cm

**Respuestas**

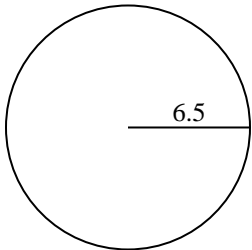
1)



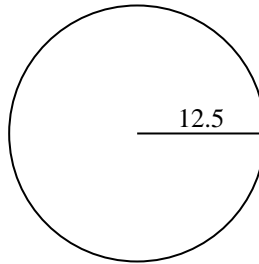
2)



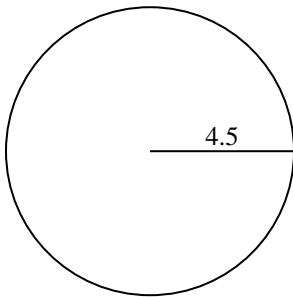
3)



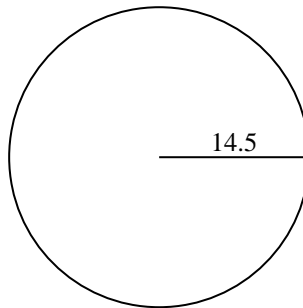
4)



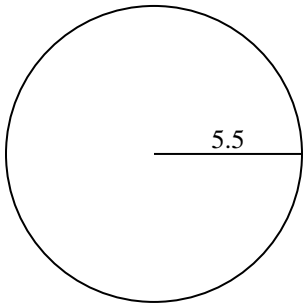
5)



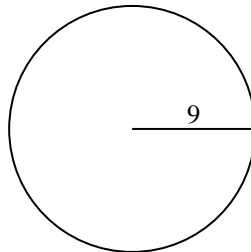
6)



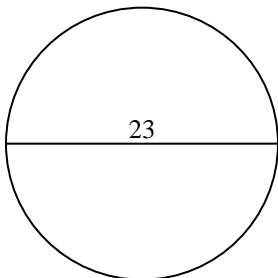
7)



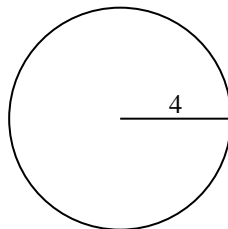
8)



9)



10)



1. \_\_\_\_\_
2. \_\_\_\_\_
3. \_\_\_\_\_
4. \_\_\_\_\_
5. \_\_\_\_\_
6. \_\_\_\_\_
7. \_\_\_\_\_
8. \_\_\_\_\_
9. \_\_\_\_\_
10. \_\_\_\_\_