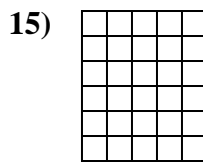
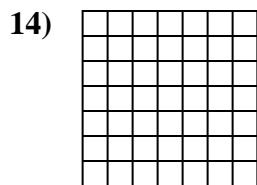
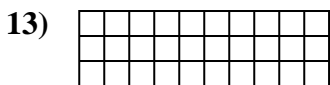

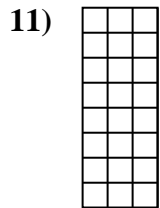
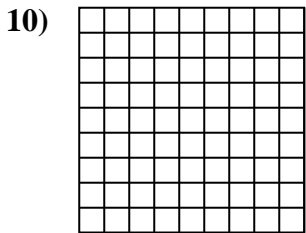
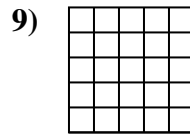
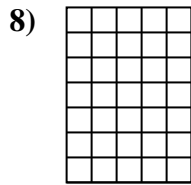
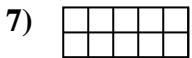
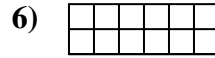
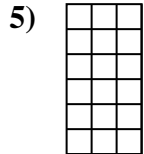
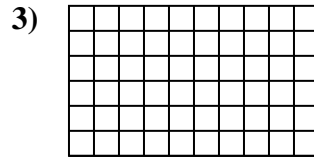
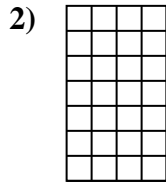
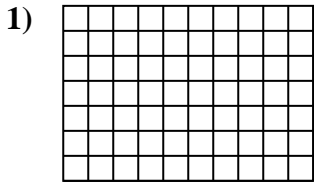




Determina el área. Cada SVGREPLACE = 1 unidad (u²)



Respuestas

1. _____

2. _____

3. _____

4. _____

5. _____

6. _____

7. _____

8. _____

9. _____

10. _____

11. _____

12. _____

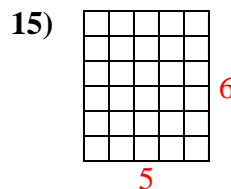
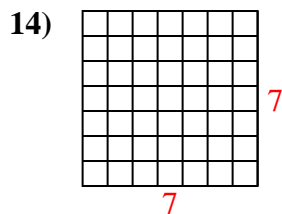
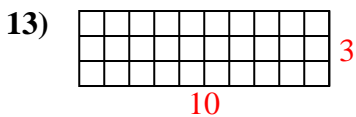
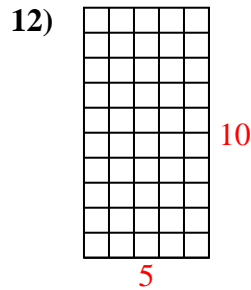
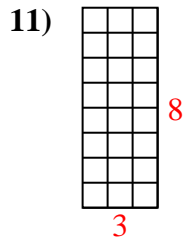
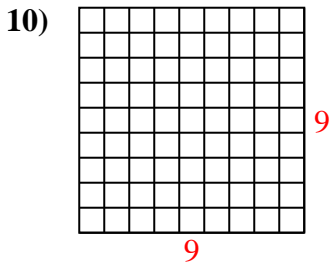
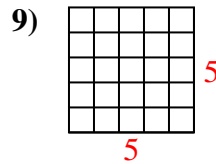
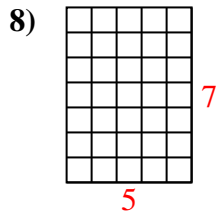
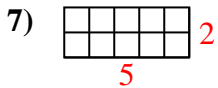
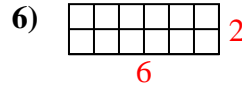
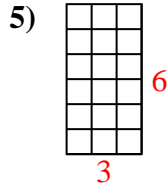
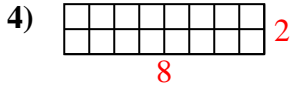
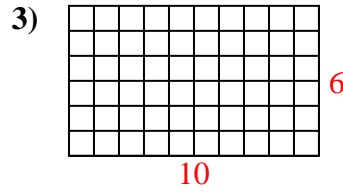
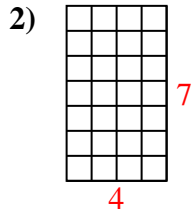
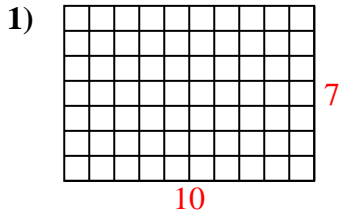
13. _____

14. _____

15. _____



Determina el área. Cada SVGREPLACE = 1 unidad (u^2)



Respuestas

1. 70 u^2

2. 28 u^2

3. 60 u^2

4. 16 u^2

5. 18 u^2

6. 12 u^2

7. 10 u^2

8. 35 u^2

9. 25 u^2

10. 81 u^2

11. 24 u^2

12. 50 u^2

13. 30 u^2

14. 49 u^2

15. 30 u^2