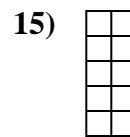
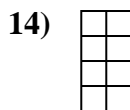
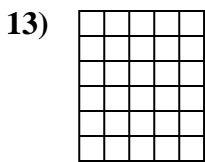
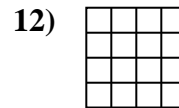
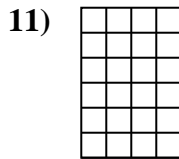
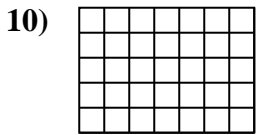
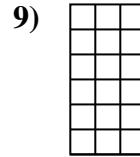


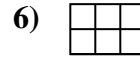
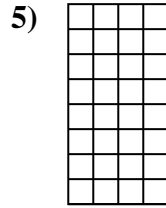
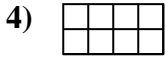
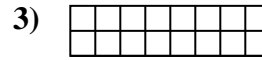

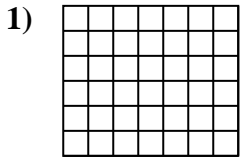




Determina el área. Cada SVGREPLACE = 1 unidad (u<sup>2</sup>)

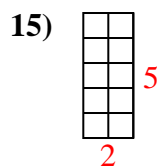
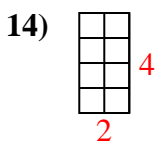
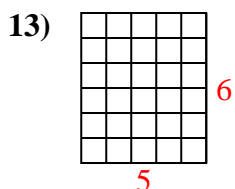
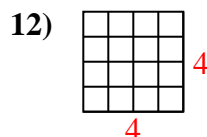
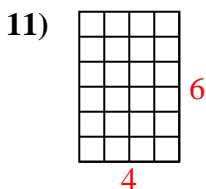
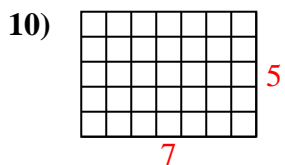
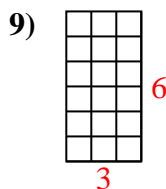
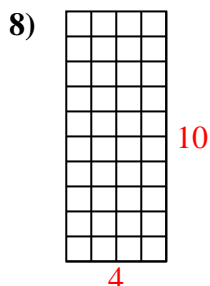
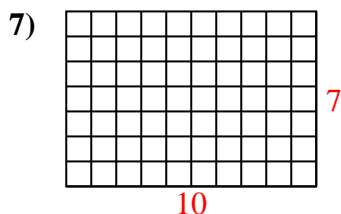
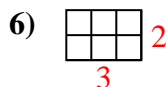
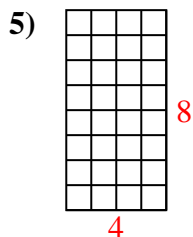
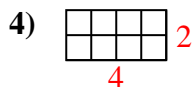
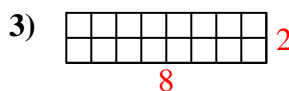
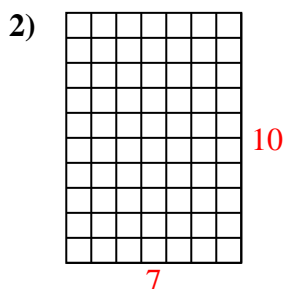
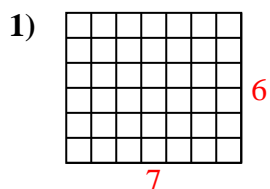


**Respuestas**

1. \_\_\_\_\_
2. \_\_\_\_\_
3. \_\_\_\_\_
4. \_\_\_\_\_
5. \_\_\_\_\_
6. \_\_\_\_\_
7. \_\_\_\_\_
8. \_\_\_\_\_
9. \_\_\_\_\_
10. \_\_\_\_\_
11. \_\_\_\_\_
12. \_\_\_\_\_
13. \_\_\_\_\_
14. \_\_\_\_\_
15. \_\_\_\_\_



Determina el área. Cada SVGREPLACE = 1 unidad ( $u^2$ )



**Respuestas**

1. 42  $u^2$

2. 70  $u^2$

3. 16  $u^2$

4. 8  $u^2$

5. 32  $u^2$

6. 6  $u^2$

7. 70  $u^2$

8. 40  $u^2$

9. 18  $u^2$

10. 35  $u^2$

11. 24  $u^2$

12. 16  $u^2$

13. 30  $u^2$

14. 8  $u^2$

15. 10  $u^2$