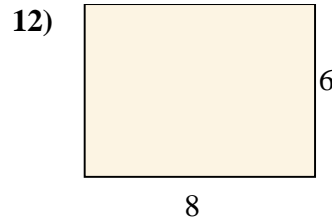
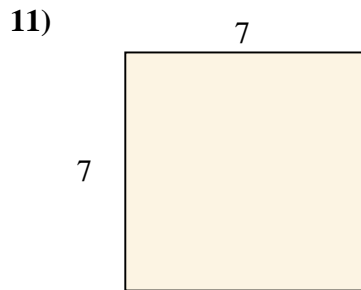
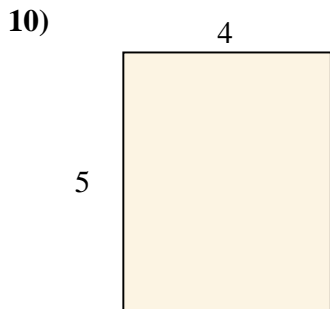
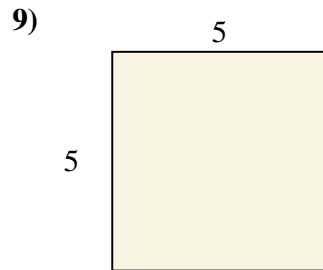
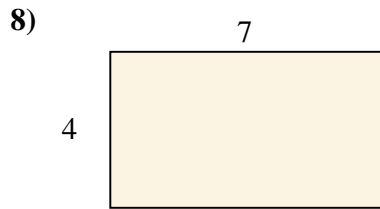
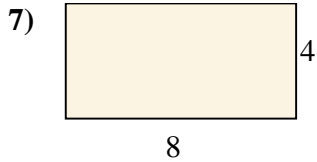
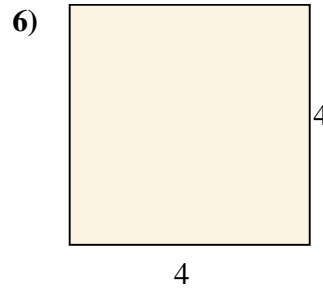
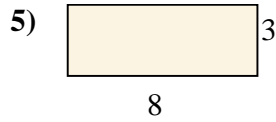
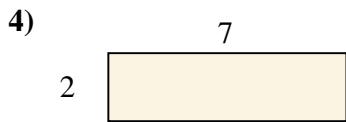
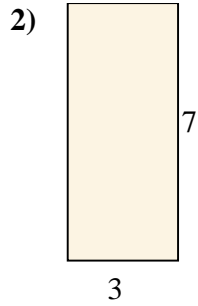
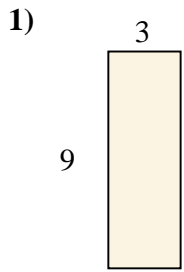




Encuentra el área (en cm) de los rectángulos mostrados.

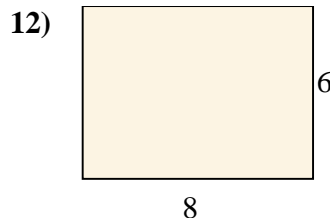
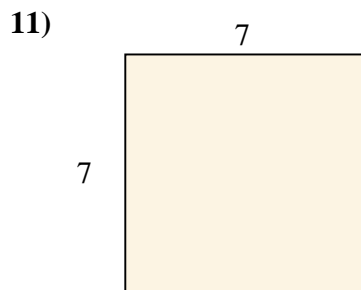
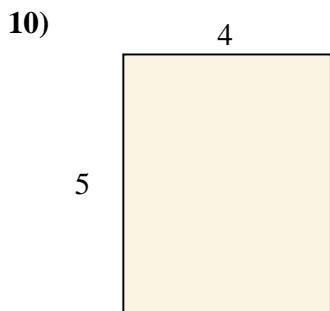
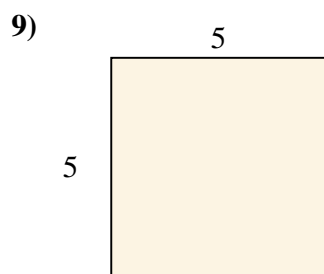
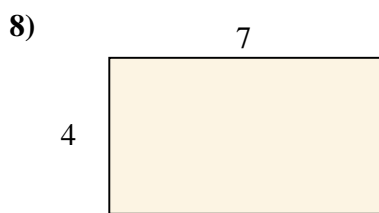
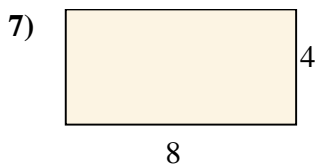
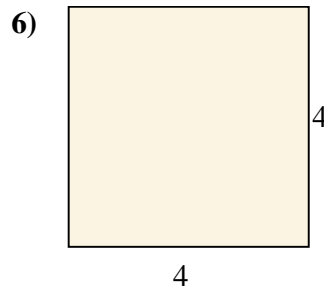
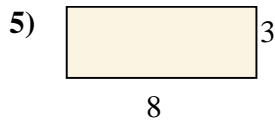

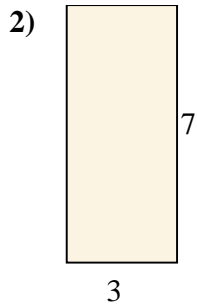
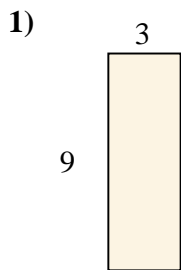


**Respuestas**

- 1. \_\_\_\_\_
- 2. \_\_\_\_\_
- 3. \_\_\_\_\_
- 4. \_\_\_\_\_
- 5. \_\_\_\_\_
- 6. \_\_\_\_\_
- 7. \_\_\_\_\_
- 8. \_\_\_\_\_
- 9. \_\_\_\_\_
- 10. \_\_\_\_\_
- 11. \_\_\_\_\_
- 12. \_\_\_\_\_



Encuentra el área (en cm) de los rectángulos mostrados.



**Respuestas**

1. 27

2. 21

3. 21

4. 14

5. 24

6. 16

7. 32

8. 28

9. 25

10. 20

11. 49

12. 48