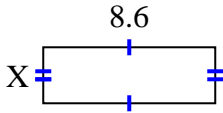


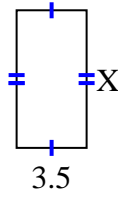


**Encuentra el valor de X para cada figura. Cada figura está en centímetros (cm). No a escala.**

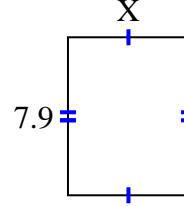
1) area =  $24.08 \text{ cm}^2$



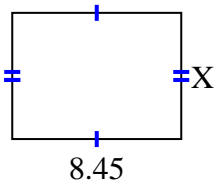
2) area =  $24.08 \text{ cm}^2$



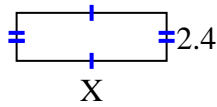
3) area =  $47.795 \text{ cm}^2$



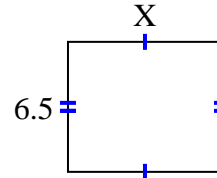
4) area =  $53.3195 \text{ cm}^2$



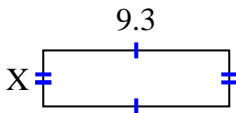
5) area =  $18 \text{ cm}^2$



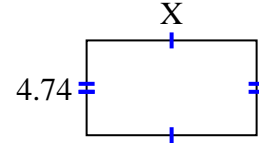
6) area =  $50.05 \text{ cm}^2$



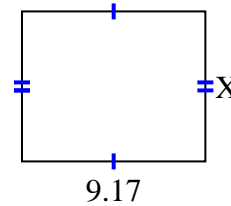
7) area =  $26.04 \text{ cm}^2$



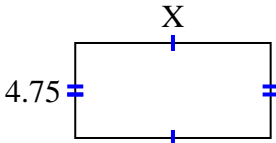
8) area =  $40.29 \text{ cm}^2$



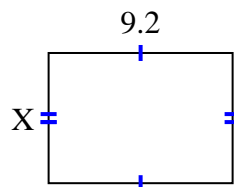
9) area =  $68.775 \text{ cm}^2$



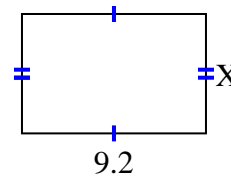
10) area =  $46.4075 \text{ cm}^2$



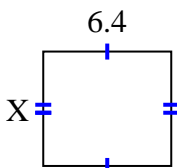
11) area =  $59.892 \text{ cm}^2$



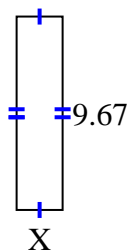
12) area =  $54.924 \text{ cm}^2$



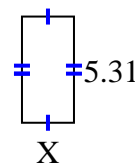
13) area =  $36.608 \text{ cm}^2$



14) area =  $22.241 \text{ cm}^2$



15) area =  $13.806 \text{ cm}^2$



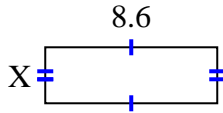
**Respuestas**

1. \_\_\_\_\_
2. \_\_\_\_\_
3. \_\_\_\_\_
4. \_\_\_\_\_
5. \_\_\_\_\_
6. \_\_\_\_\_
7. \_\_\_\_\_
8. \_\_\_\_\_
9. \_\_\_\_\_
10. \_\_\_\_\_
11. \_\_\_\_\_
12. \_\_\_\_\_
13. \_\_\_\_\_
14. \_\_\_\_\_
15. \_\_\_\_\_

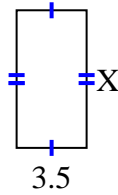


Encuentra el valor de X para cada figura. Cada figura está en centímetros (cm). No a escala.

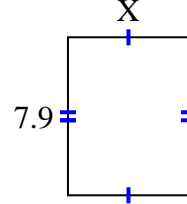
1) area =  $24.08 \text{ cm}^2$



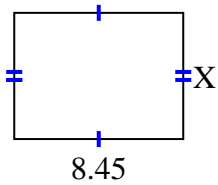
2) area =  $24.08 \text{ cm}^2$



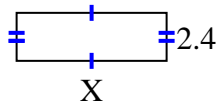
3) area =  $47.795 \text{ cm}^2$



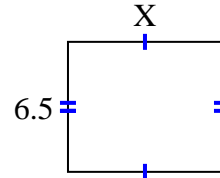
4) area =  $53.3195 \text{ cm}^2$



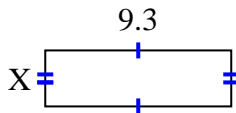
5) area =  $18 \text{ cm}^2$



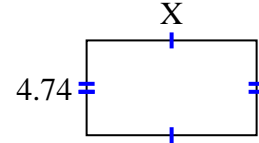
6) area =  $50.05 \text{ cm}^2$



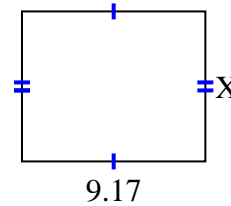
7) area =  $26.04 \text{ cm}^2$



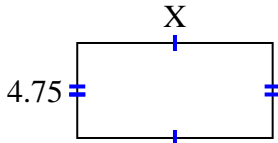
8) area =  $40.29 \text{ cm}^2$



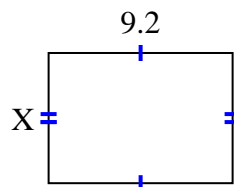
9) area =  $68.775 \text{ cm}^2$



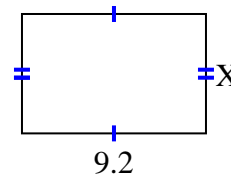
10) area =  $46.4075 \text{ cm}^2$



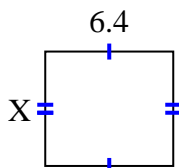
11) area =  $59.892 \text{ cm}^2$



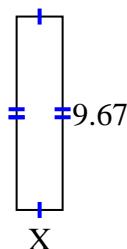
12) area =  $54.924 \text{ cm}^2$



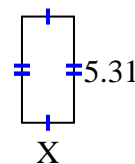
13) area =  $36.608 \text{ cm}^2$



14) area =  $22.241 \text{ cm}^2$



15) area =  $13.806 \text{ cm}^2$

**Respuestas**1. 2.82. 6.883. 6.054. 6.315. 7.56. 7.77. 2.88. 8.59. 7.510. 9.7711. 6.5112. 5.9713. 5.7214. 2.315. 2.6