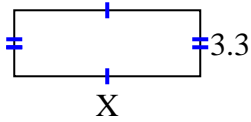


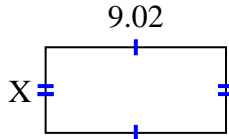


Encuentra el valor de X para cada figura. Cada figura está en centímetros (cm). No a escala.

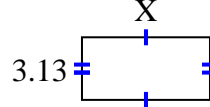
1) area = 30.69 cm^2



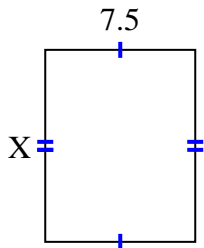
2) area = 38.6056 cm^2



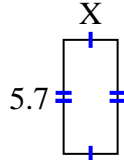
3) area = 20.032 cm^2



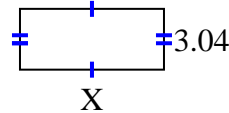
4) area = 72 cm^2



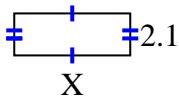
5) area = 15.39 cm^2



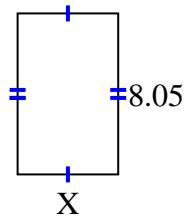
6) area = 21.888 cm^2



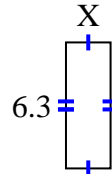
7) area = 12.18 cm^2



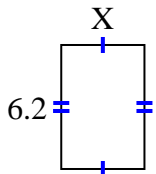
8) area = 40.4915 cm^2



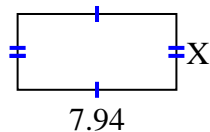
9) area = 14.049 cm^2



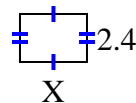
10) area = 25.792 cm^2



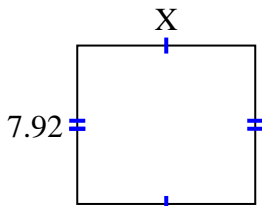
11) area = 30.0926 cm^2



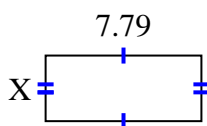
12) area = 8.04 cm^2



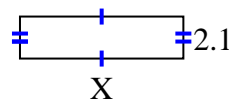
13) area = 70.488 cm^2



14) area = 25.5512 cm^2



15) area = 17.157 cm^2



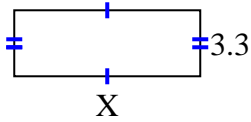
Respuestas

1. _____
2. _____
3. _____
4. _____
5. _____
6. _____
7. _____
8. _____
9. _____
10. _____
11. _____
12. _____
13. _____
14. _____
15. _____

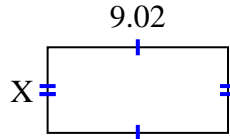


Encuentra el valor de X para cada figura. Cada figura está en centímetros (cm). No a escala.

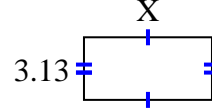
1) area = 30.69 cm^2



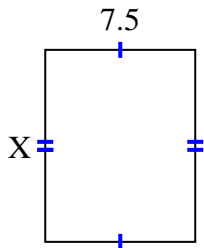
2) area = 38.6056 cm^2



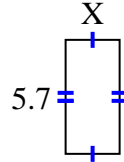
3) area = 20.032 cm^2



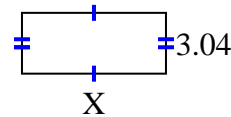
4) area = 72 cm^2



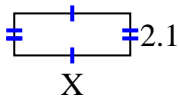
5) area = 15.39 cm^2



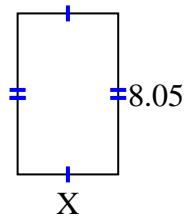
6) area = 21.888 cm^2



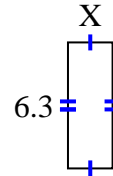
7) area = 12.18 cm^2



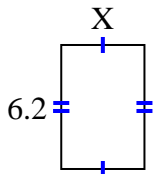
8) area = 40.4915 cm^2



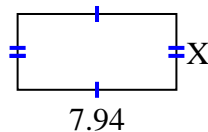
9) area = 14.049 cm^2



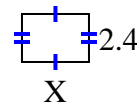
10) area = 25.792 cm^2



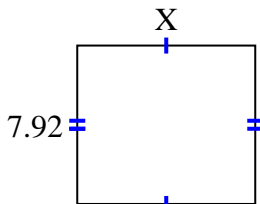
11) area = 30.0926 cm^2



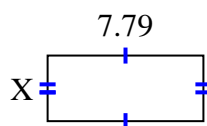
12) area = 8.04 cm^2



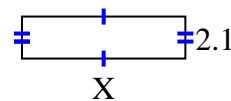
13) area = 70.488 cm^2



14) area = 25.5512 cm^2



15) area = 17.157 cm^2

**Respuestas**1. 9.32. 4.283. 6.44. 9.65. 2.76. 7.27. 5.88. 5.039. 2.2310. 4.1611. 3.7912. 3.3513. 8.914. 3.2815. 8.17