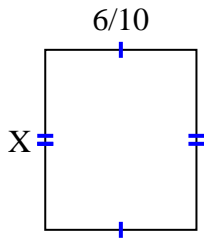
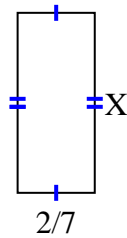


**Encuentra el valor de X de cada figura. Cada figura está en centímetros (cm). No a escala.****Respuestas**

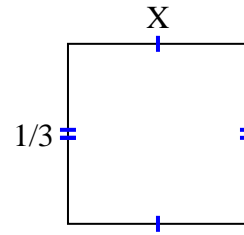
1) $\text{area} = \frac{30}{70} \text{ cm}^2$



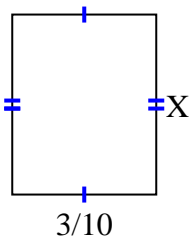
2) $\text{area} = \frac{4}{21} \text{ cm}^2$



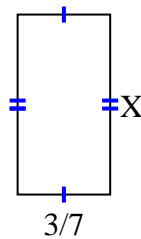
3) $\text{area} = \frac{1}{9} \text{ cm}^2$



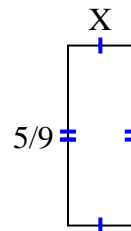
4) $\text{area} = \frac{9}{80} \text{ cm}^2$



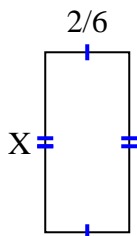
5) $\text{area} = \frac{15}{42} \text{ cm}^2$



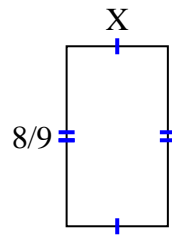
6) $\text{area} = \frac{5}{45} \text{ cm}^2$



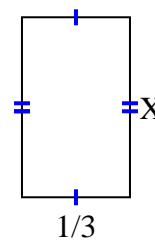
7) $\text{area} = \frac{10}{42} \text{ cm}^2$



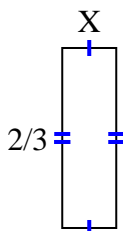
8) $\text{area} = \frac{40}{90} \text{ cm}^2$



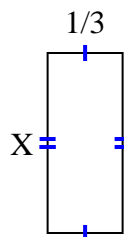
9) $\text{area} = \frac{5}{27} \text{ cm}^2$



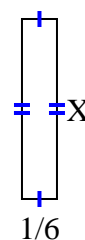
10) $\text{area} = \frac{2}{15} \text{ cm}^2$



11) $\text{area} = \frac{4}{15} \text{ cm}^2$



12) $\text{area} = \frac{6}{42} \text{ cm}^2$



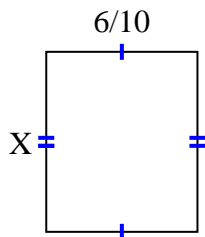
1. _____
2. _____
3. _____
4. _____
5. _____
6. _____
7. _____
8. _____
9. _____
10. _____
11. _____
12. _____



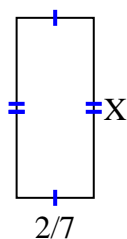
Encuentra el valor de X de cada figura. Cada figura está en centímetros (cm). No a escala.

Respuestas

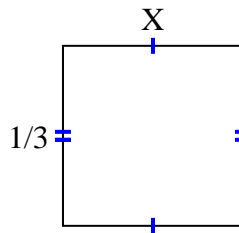
1) area = $\frac{30}{70} \text{ cm}^2$



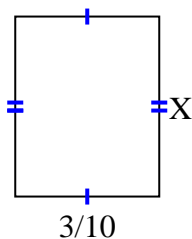
2) area = $\frac{4}{21} \text{ cm}^2$



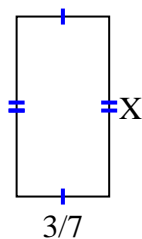
3) area = $\frac{1}{9} \text{ cm}^2$



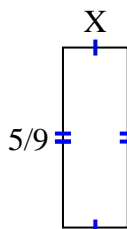
4) area = $\frac{9}{80} \text{ cm}^2$



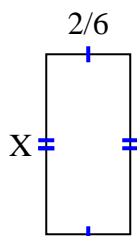
5) area = $\frac{15}{42} \text{ cm}^2$



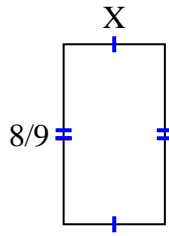
6) area = $\frac{5}{45} \text{ cm}^2$



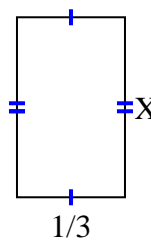
7) area = $\frac{10}{42} \text{ cm}^2$



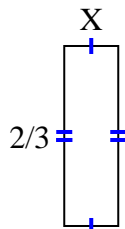
8) area = $\frac{40}{90} \text{ cm}^2$



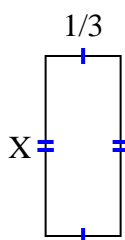
9) area = $\frac{5}{27} \text{ cm}^2$



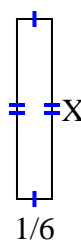
10) area = $\frac{2}{15} \text{ cm}^2$



11) area = $\frac{4}{15} \text{ cm}^2$



12) area = $\frac{6}{42} \text{ cm}^2$



1. $\frac{5}{7}$

2. $\frac{2}{3}$

3. $\frac{1}{3}$

4. $\frac{3}{8}$

5. $\frac{5}{6}$

6. $\frac{1}{5}$

7. $\frac{5}{7}$

8. $\frac{5}{10}$

9. $\frac{5}{9}$

10. $\frac{1}{5}$

11. $\frac{4}{5}$

12. $\frac{6}{7}$