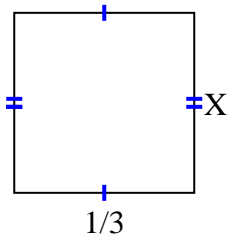
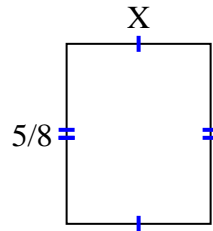


**Encuentra el valor de X de cada figura. Cada figura está en centímetros (cm). No a escala.****Respuestas**

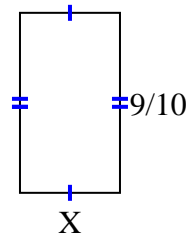
1)  $\text{area} = \frac{2}{18} \text{ cm}^2$



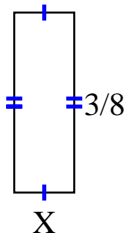
2)  $\text{area} = \frac{10}{32} \text{ cm}^2$



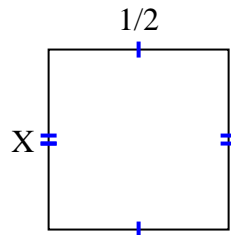
3)  $\text{area} = \frac{9}{20} \text{ cm}^2$



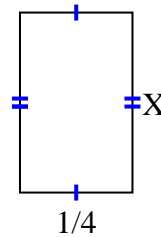
4)  $\text{area} = \frac{3}{64} \text{ cm}^2$



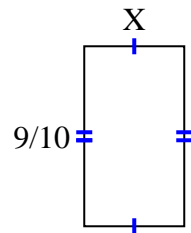
5)  $\text{area} = \frac{2}{8} \text{ cm}^2$



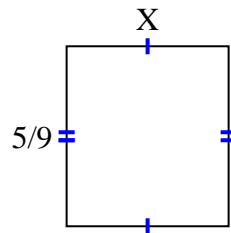
6)  $\text{area} = \frac{4}{40} \text{ cm}^2$



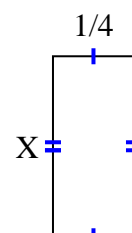
7)  $\text{area} = \frac{36}{80} \text{ cm}^2$



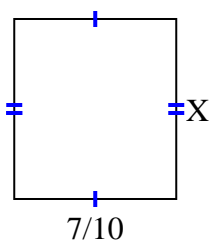
8)  $\text{area} = \frac{5}{18} \text{ cm}^2$



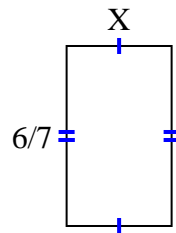
9)  $\text{area} = \frac{5}{36} \text{ cm}^2$



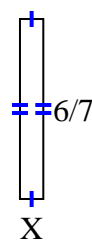
10)  $\text{area} = \frac{49}{90} \text{ cm}^2$



11)  $\text{area} = \frac{12}{28} \text{ cm}^2$



12)  $\text{area} = \frac{6}{63} \text{ cm}^2$



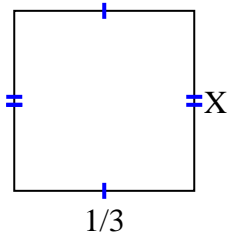
1. \_\_\_\_\_
2. \_\_\_\_\_
3. \_\_\_\_\_
4. \_\_\_\_\_
5. \_\_\_\_\_
6. \_\_\_\_\_
7. \_\_\_\_\_
8. \_\_\_\_\_
9. \_\_\_\_\_
10. \_\_\_\_\_
11. \_\_\_\_\_
12. \_\_\_\_\_



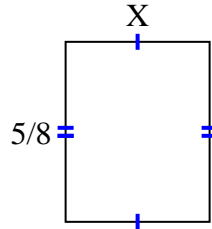
Encuentra el valor de X de cada figura. Cada figura está en centímetros (cm). No a escala.

**Respuestas**

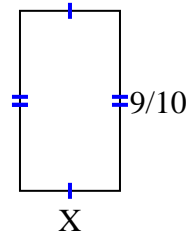
1)  $\text{area} = \frac{2}{18} \text{ cm}^2$



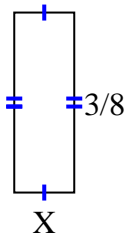
2)  $\text{area} = \frac{10}{32} \text{ cm}^2$



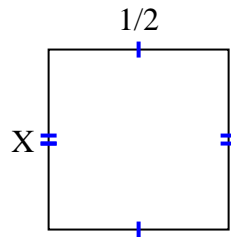
3)  $\text{area} = \frac{9}{20} \text{ cm}^2$



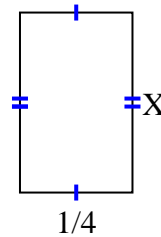
4)  $\text{area} = \frac{3}{64} \text{ cm}^2$



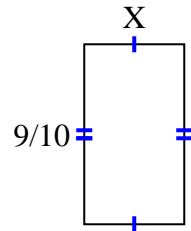
5)  $\text{area} = \frac{2}{8} \text{ cm}^2$



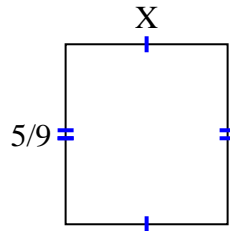
6)  $\text{area} = \frac{4}{40} \text{ cm}^2$



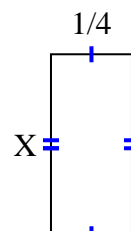
7)  $\text{area} = \frac{36}{80} \text{ cm}^2$



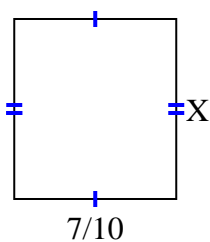
8)  $\text{area} = \frac{5}{18} \text{ cm}^2$



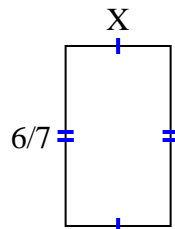
9)  $\text{area} = \frac{5}{36} \text{ cm}^2$



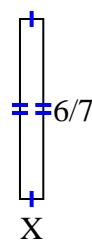
10)  $\text{area} = \frac{49}{90} \text{ cm}^2$



11)  $\text{area} = \frac{12}{28} \text{ cm}^2$



12)  $\text{area} = \frac{6}{63} \text{ cm}^2$



1.  $\frac{2}{6}$

2.  $\frac{2}{4}$

3.  $\frac{1}{2}$

4.  $\frac{1}{8}$

5.  $\frac{2}{4}$

6.  $\frac{4}{10}$

7.  $\frac{4}{8}$

8.  $\frac{1}{2}$

9.  $\frac{5}{9}$

10.  $\frac{7}{9}$

11.  $\frac{2}{4}$

12.  $\frac{1}{9}$