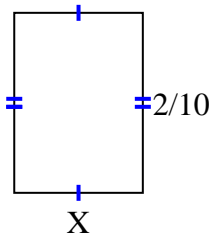




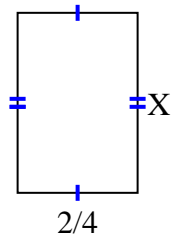
**Encuentra el valor de X de cada figura. Cada figura está en centímetros (cm). No a escala.**

**Respuestas**

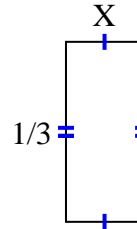
1) area =  $\frac{2}{70} \text{ cm}^2$



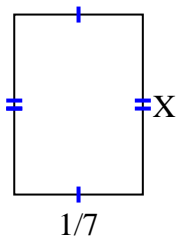
2) area =  $\frac{12}{32} \text{ cm}^2$



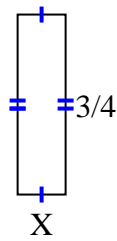
3) area =  $\frac{1}{21} \text{ cm}^2$



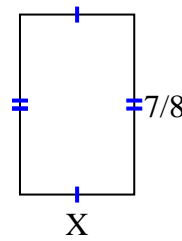
4) area =  $\frac{2}{70} \text{ cm}^2$



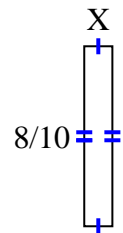
5) area =  $\frac{3}{20} \text{ cm}^2$



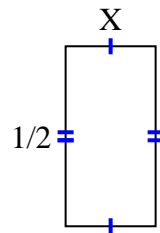
6) area =  $\frac{35}{72} \text{ cm}^2$



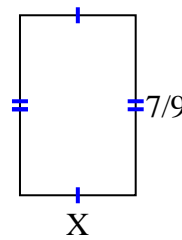
7) area =  $\frac{8}{80} \text{ cm}^2$



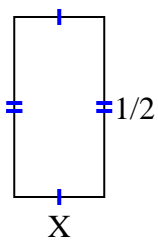
8) area =  $\frac{2}{16} \text{ cm}^2$



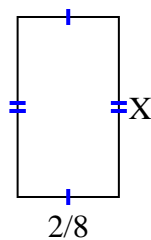
9) area =  $\frac{14}{36} \text{ cm}^2$



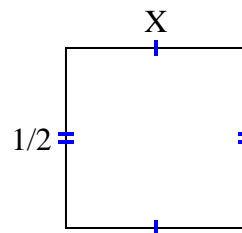
10) area =  $\frac{1}{8} \text{ cm}^2$



11) area =  $\frac{8}{72} \text{ cm}^2$



12) area =  $\frac{1}{4} \text{ cm}^2$



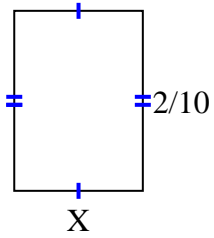
1. \_\_\_\_\_
2. \_\_\_\_\_
3. \_\_\_\_\_
4. \_\_\_\_\_
5. \_\_\_\_\_
6. \_\_\_\_\_
7. \_\_\_\_\_
8. \_\_\_\_\_
9. \_\_\_\_\_
10. \_\_\_\_\_
11. \_\_\_\_\_
12. \_\_\_\_\_



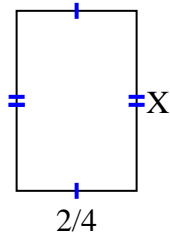
Encuentra el valor de X de cada figura. Cada figura está en centímetros (cm). No a escala.

**Respuestas**

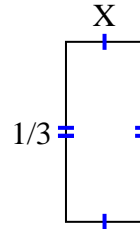
1)  $\text{area} = \frac{2}{70} \text{ cm}^2$



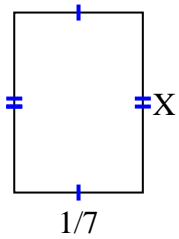
2)  $\text{area} = \frac{12}{32} \text{ cm}^2$



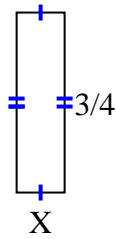
3)  $\text{area} = \frac{1}{21} \text{ cm}^2$



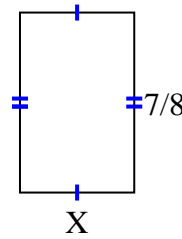
4)  $\text{area} = \frac{2}{70} \text{ cm}^2$



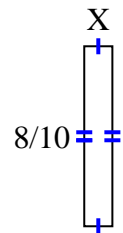
5)  $\text{area} = \frac{3}{20} \text{ cm}^2$



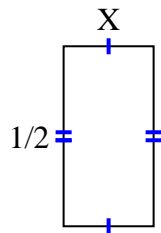
6)  $\text{area} = \frac{35}{72} \text{ cm}^2$



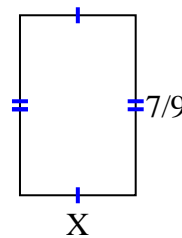
7)  $\text{area} = \frac{8}{80} \text{ cm}^2$



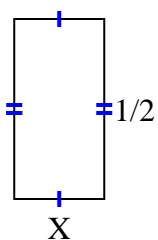
8)  $\text{area} = \frac{2}{16} \text{ cm}^2$



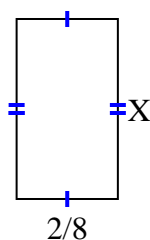
9)  $\text{area} = \frac{14}{36} \text{ cm}^2$



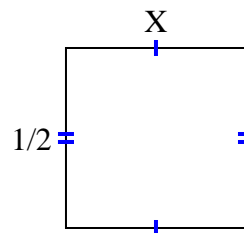
10)  $\text{area} = \frac{1}{8} \text{ cm}^2$



11)  $\text{area} = \frac{8}{72} \text{ cm}^2$



12)  $\text{area} = \frac{1}{4} \text{ cm}^2$



1.  $\frac{1}{7}$

2.  $\frac{6}{8}$

3.  $\frac{1}{7}$

4.  $\frac{2}{10}$

5.  $\frac{1}{5}$

6.  $\frac{5}{9}$

7.  $\frac{1}{8}$

8.  $\frac{2}{8}$

9.  $\frac{2}{4}$

10.  $\frac{1}{4}$

11.  $\frac{4}{9}$

12.  $\frac{1}{2}$