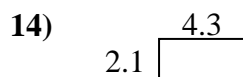
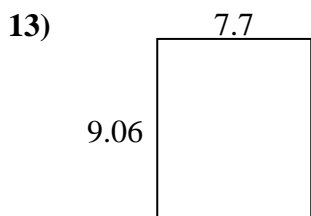
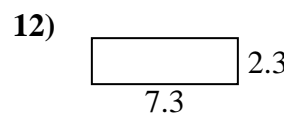
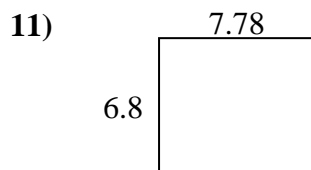
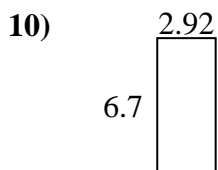
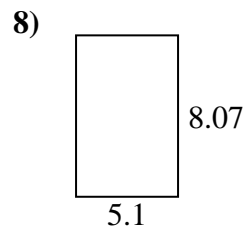
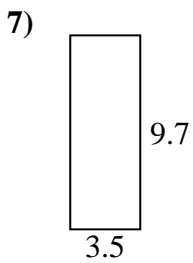
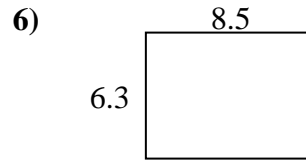
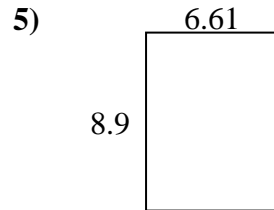
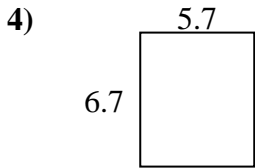
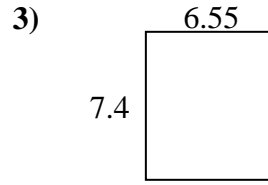
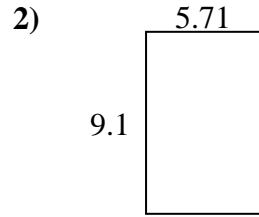
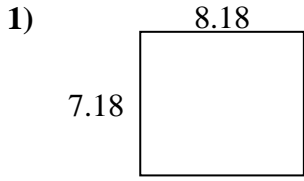




Encuentra el perímetro y el área de cada figura. Responde con la décima más cercana.

Respuestas

1. _____

2. _____

3. _____

4. _____

5. _____

6. _____

7. _____

8. _____

9. _____

10. _____

11. _____

12. _____

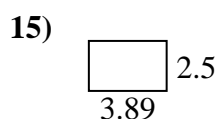
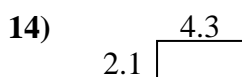
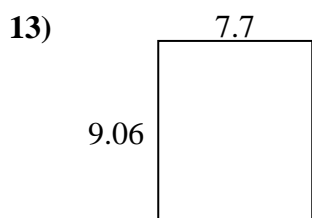
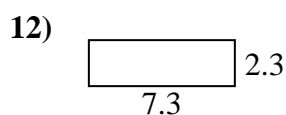
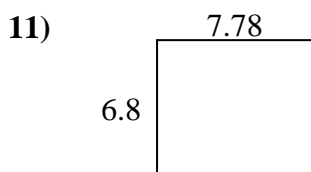
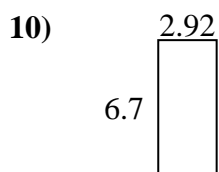
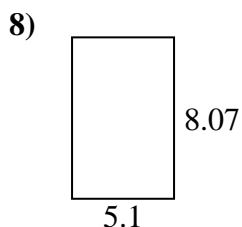
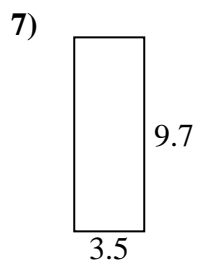
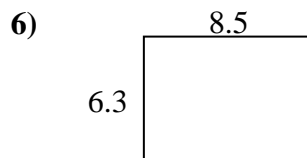
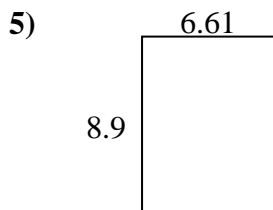
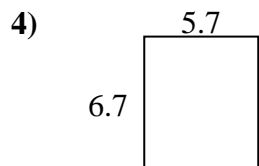
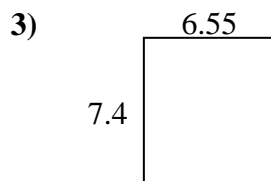
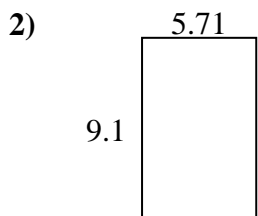
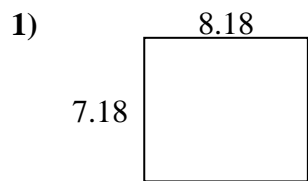
13. _____

14. _____

15. _____



Encuentra el perímetro y el área de cada figura. Responde con la décima más cercana.

**Respuestas**

1.	<u>58.7</u>	<u>30.7</u>
2.	<u>52.0</u>	<u>29.6</u>
3.	<u>48.5</u>	<u>27.9</u>
4.	<u>38.2</u>	<u>24.8</u>
5.	<u>58.8</u>	<u>31.0</u>
6.	<u>53.6</u>	<u>29.6</u>
7.	<u>34.0</u>	<u>26.4</u>
8.	<u>41.2</u>	<u>26.3</u>
9.	<u>23.9</u>	<u>20.2</u>
10.	<u>19.6</u>	<u>19.2</u>
11.	<u>52.9</u>	<u>29.2</u>
12.	<u>16.8</u>	<u>19.2</u>
13.	<u>69.8</u>	<u>33.5</u>
14.	<u>9.0</u>	<u>12.8</u>
15.	<u>9.7</u>	<u>12.8</u>