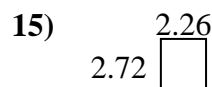
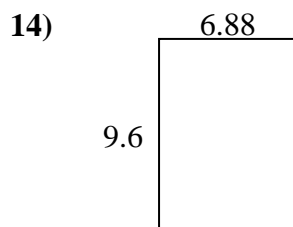
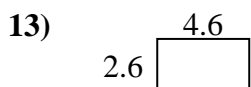
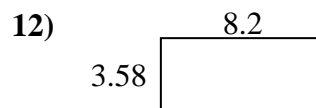
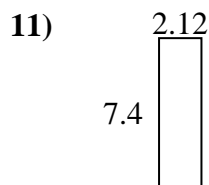
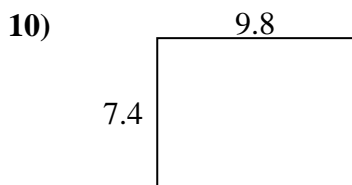
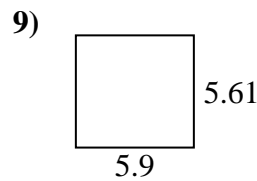
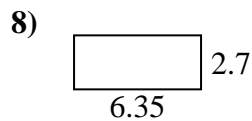
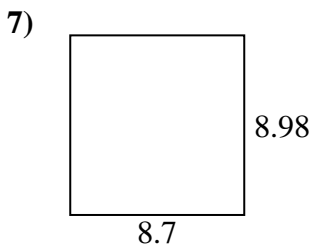
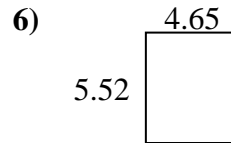
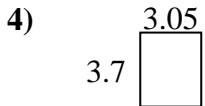
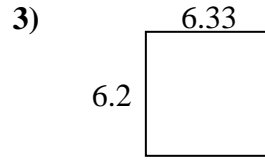
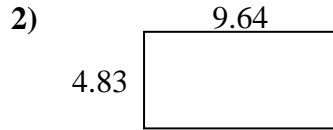
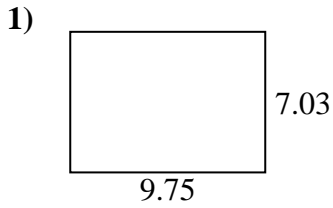




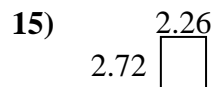
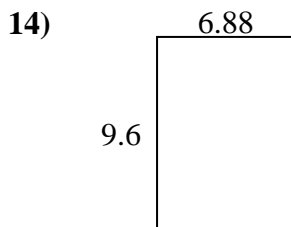
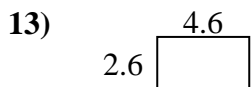
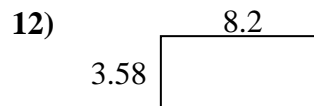
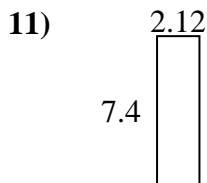
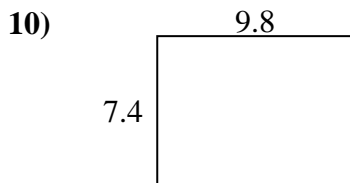
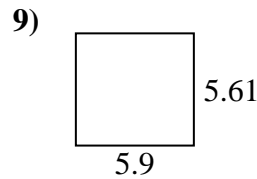
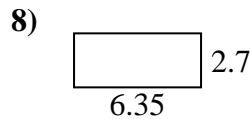
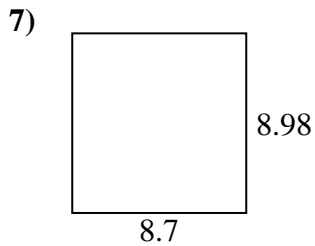
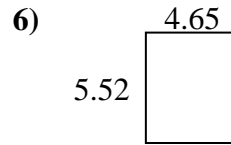
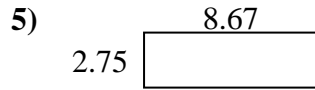
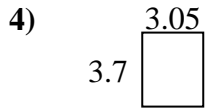
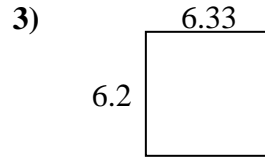
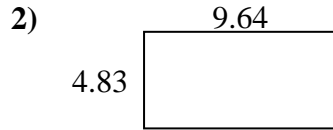
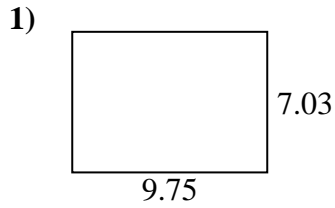
Encuentra el perímetro y el área de cada figura. Responde con la décima más cercana.

Respuestas

1. _____
2. _____
3. _____
4. _____
5. _____
6. _____
7. _____
8. _____
9. _____
10. _____
11. _____
12. _____
13. _____
14. _____
15. _____



Encuentra el perímetro y el área de cada figura. Responde con la décima más cercana.

**Respuestas**

1.	68.5	33.6
2.	46.6	28.9
3.	39.2	25.1
4.	11.3	13.5
5.	23.8	22.8
6.	25.7	20.3
7.	78.1	35.4
8.	17.1	18.1
9.	33.1	23.0
10.	72.5	34.4
11.	15.7	19.0
12.	29.4	23.6
13.	12.0	14.4
14.	66.0	33.0
15.	6.1	10.0