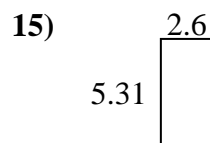
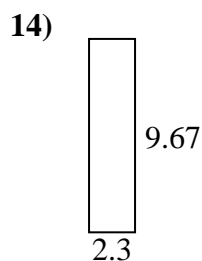
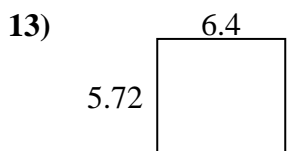
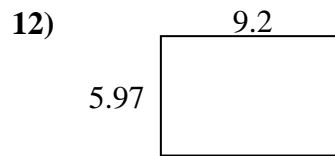
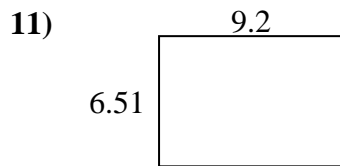
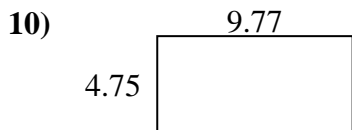
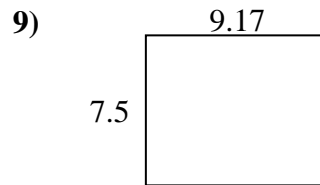
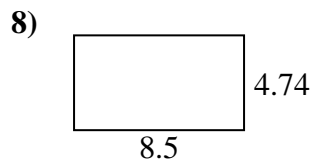
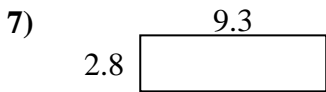
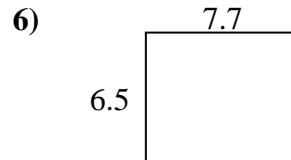

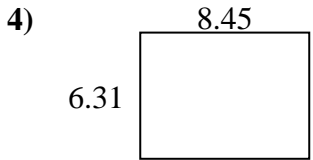
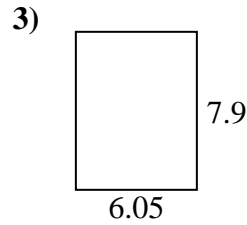
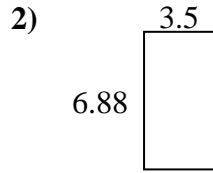
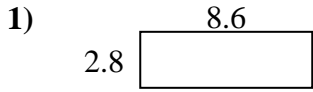




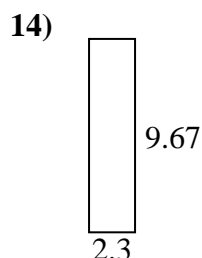
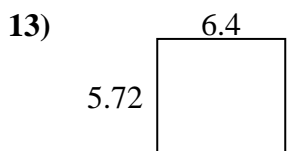
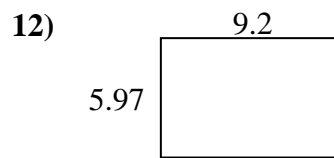
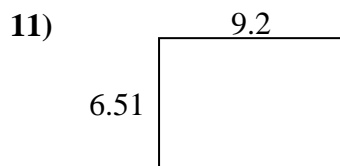
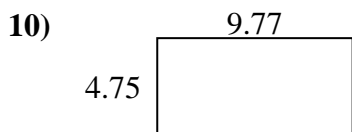
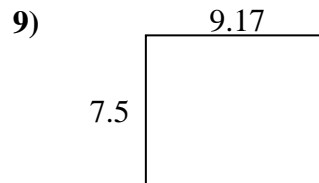
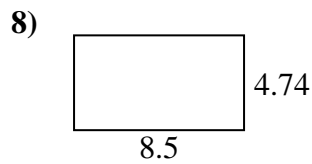
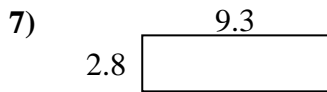
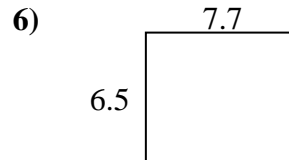

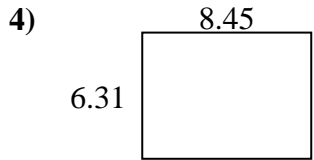
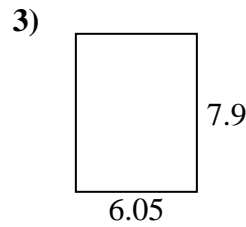
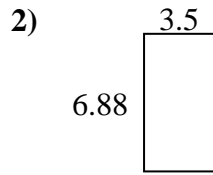
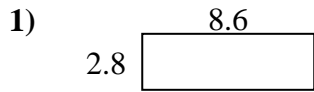
Encuentra el perímetro y el área de cada figura. Responde con la décima más cercana.

Respuestas

1. _____
2. _____
3. _____
4. _____
5. _____
6. _____
7. _____
8. _____
9. _____
10. _____
11. _____
12. _____
13. _____
14. _____
15. _____



Encuentra el perímetro y el área de cada figura. Responde con la décima más cercana.

Respuestas1. 24.1 22.82. 24.1 20.83. 47.8 27.94. 53.3 29.55. 18.0 19.86. 50.1 28.47. 26.0 24.28. 40.3 26.59. 68.8 33.310. 46.4 29.011. 59.9 31.412. 54.9 30.313. 36.6 24.214. 22.2 23.915. 13.8 15.8