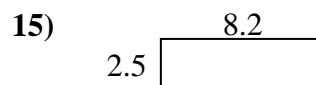
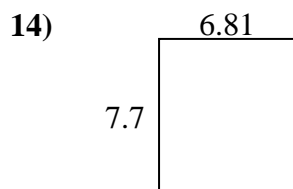
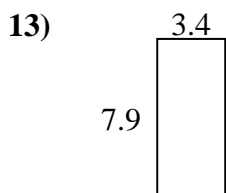
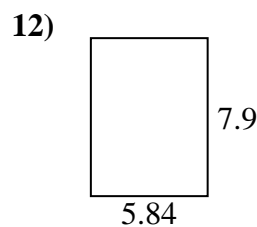
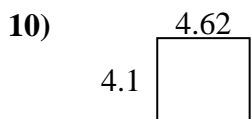
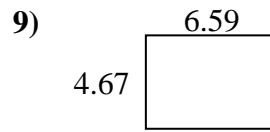
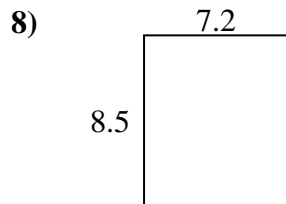
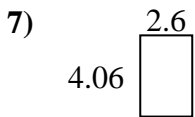
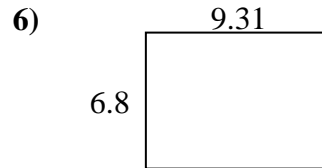
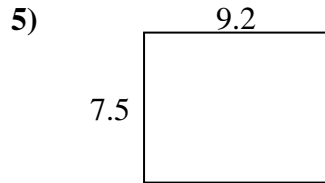
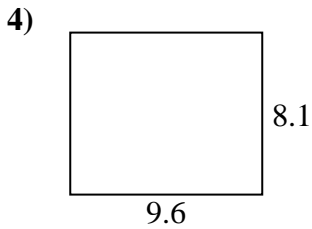
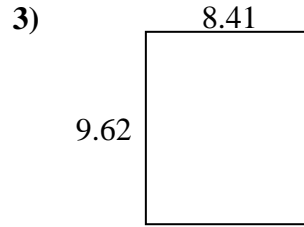
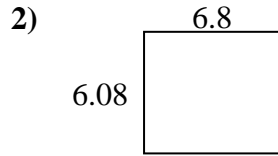
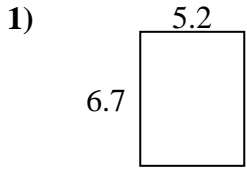




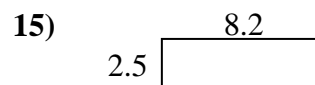
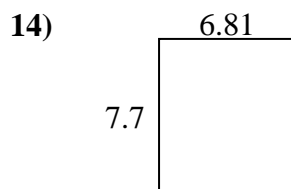
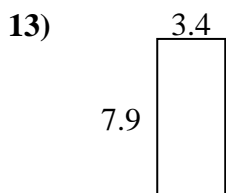
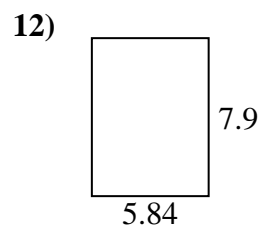
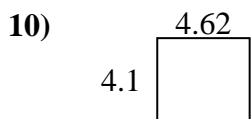
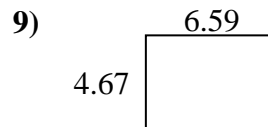
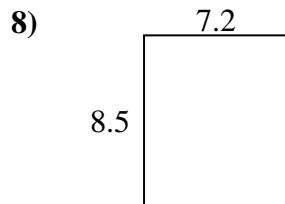
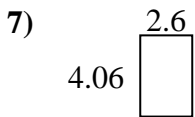
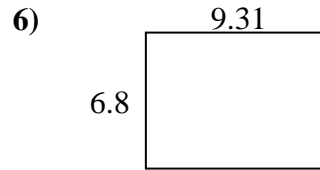
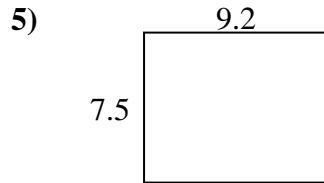
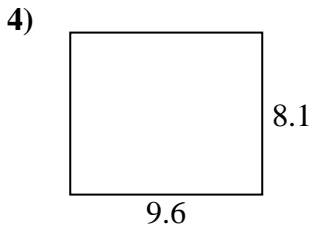
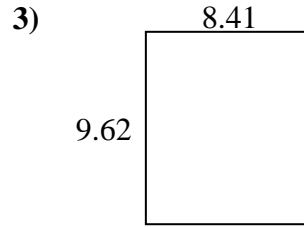
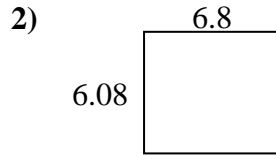
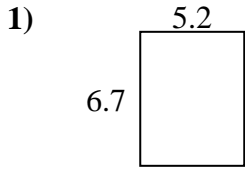
Encuentra el perímetro y el área de cada figura. Responde con la décima más cercana.

**Respuestas**

1. \_\_\_\_\_
2. \_\_\_\_\_
3. \_\_\_\_\_
4. \_\_\_\_\_
5. \_\_\_\_\_
6. \_\_\_\_\_
7. \_\_\_\_\_
8. \_\_\_\_\_
9. \_\_\_\_\_
10. \_\_\_\_\_
11. \_\_\_\_\_
12. \_\_\_\_\_
13. \_\_\_\_\_
14. \_\_\_\_\_
15. \_\_\_\_\_



Encuentra el perímetro y el área de cada figura. Responde con la décima más cercana.

**Respuestas**1. 34.8 23.82. 41.3 25.83. 80.9 36.14. 77.8 35.45. 69.0 33.46. 63.3 32.27. 10.6 13.38. 61.2 31.49. 30.8 22.510. 18.9 17.411. 28.8 21.712. 46.1 27.513. 26.9 22.614. 52.4 29.015. 20.5 21.4