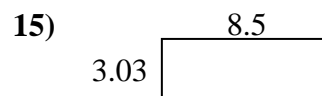
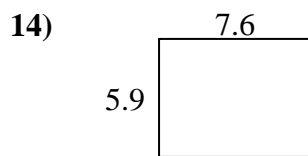
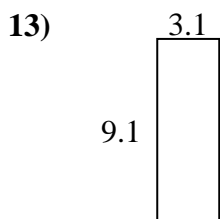
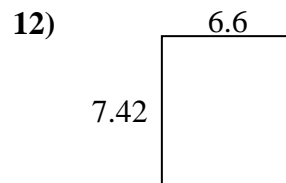
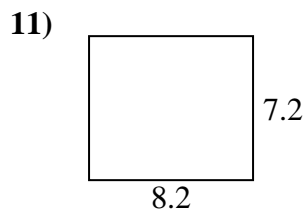
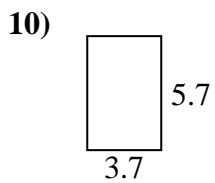
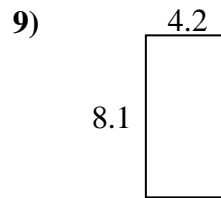
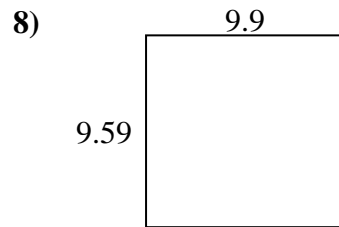
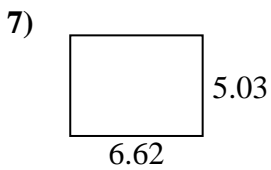
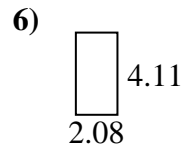
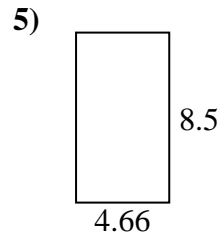
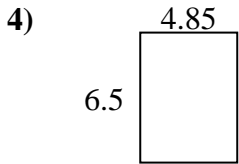
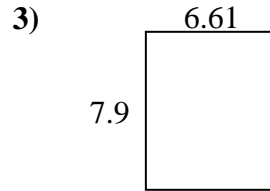
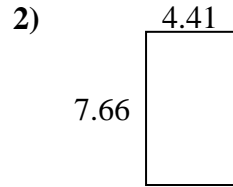
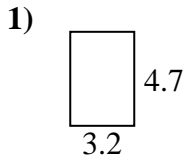




Encuentra el perímetro y el área de cada figura. Responde con la décima más cercana.

**Respuestas**

1. \_\_\_\_\_

2. \_\_\_\_\_

3. \_\_\_\_\_

4. \_\_\_\_\_

5. \_\_\_\_\_

6. \_\_\_\_\_

7. \_\_\_\_\_

8. \_\_\_\_\_

9. \_\_\_\_\_

10. \_\_\_\_\_

11. \_\_\_\_\_

12. \_\_\_\_\_

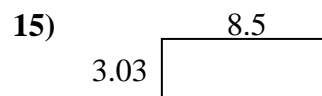
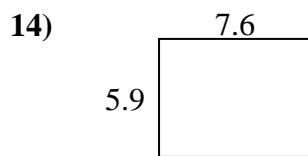
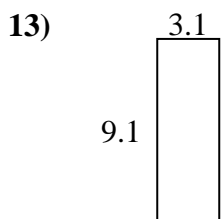
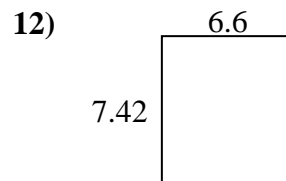
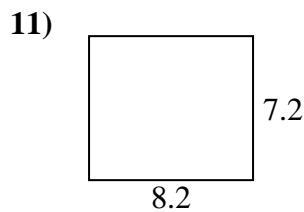
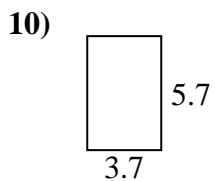
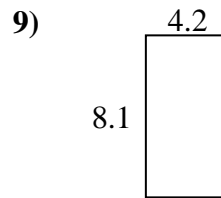
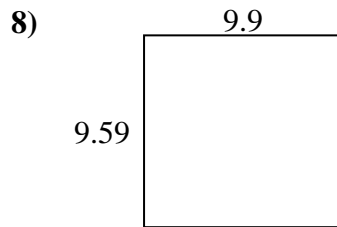
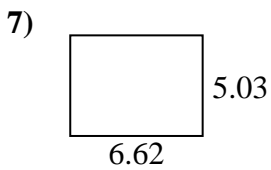
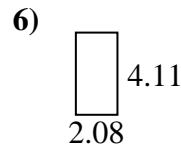
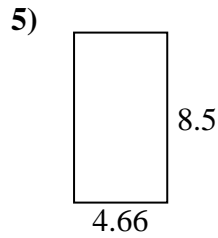
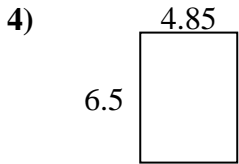
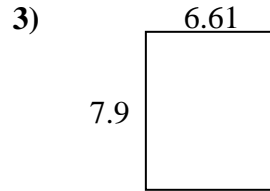
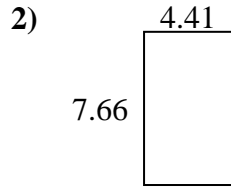
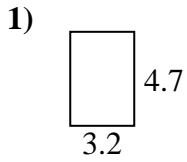
13. \_\_\_\_\_

14. \_\_\_\_\_

15. \_\_\_\_\_



Encuentra el perímetro y el área de cada figura. Responde con la décima más cercana.

**Respuestas**1. 15.0 15.82. 33.8 24.13. 52.2 29.04. 31.5 22.75. 39.6 26.36. 8.5 12.47. 33.3 23.38. 94.9 39.09. 34.0 24.610. 21.1 18.811. 59.0 30.812. 49.0 28.013. 28.2 24.414. 44.8 27.015. 25.8 23.1