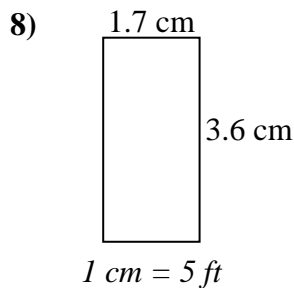
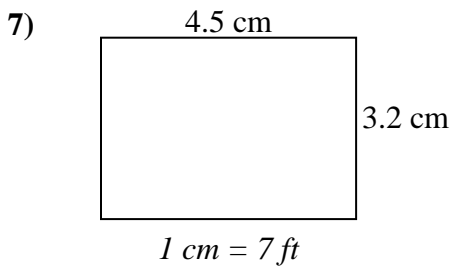
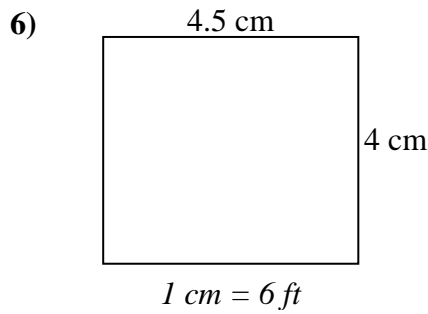
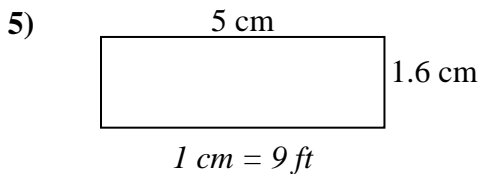
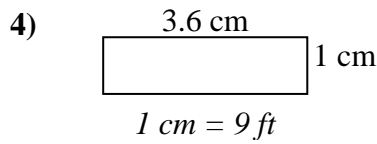
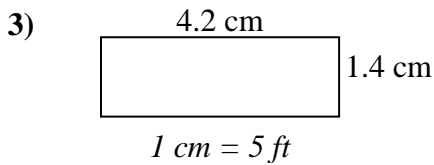
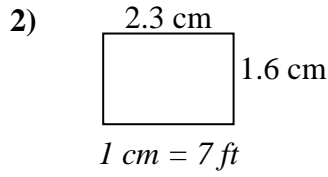
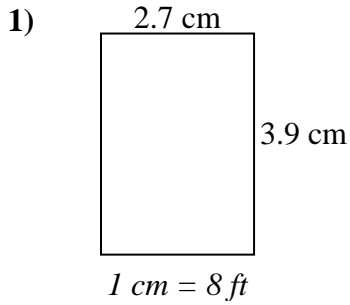




Encuentre el ancho, la altura y el área de los rectángulos. Nombre: \_\_\_\_\_

Determine el ancho, la altura y el área reales de cada rectángulo.

Redondea el área al número entero más cercano



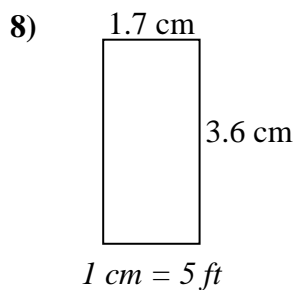
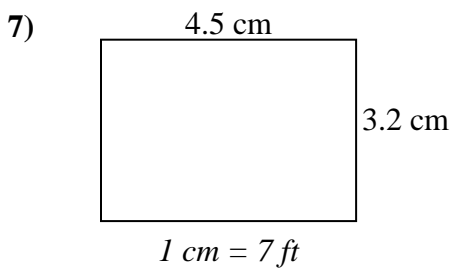
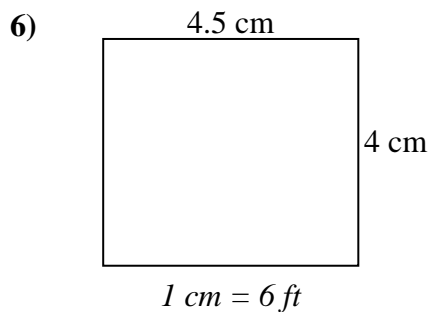
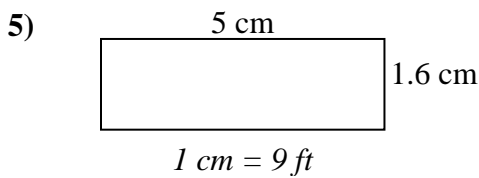
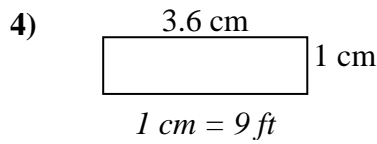
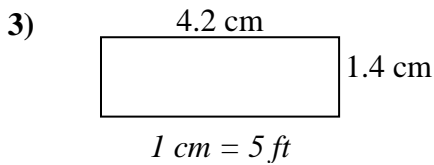
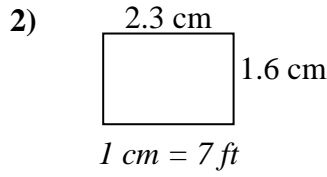
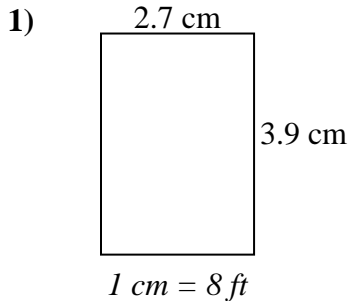
**Respuestas**

1. \_\_\_\_\_
2. \_\_\_\_\_
3. \_\_\_\_\_
4. \_\_\_\_\_
5. \_\_\_\_\_
6. \_\_\_\_\_
7. \_\_\_\_\_
8. \_\_\_\_\_



Determine el ancho, la altura y el área reales de cada rectángulo.

Redondea el área al número entero más cercano



**Respuestas**

1.	<u>21.6</u>	<u>31.2</u>	<u>674</u>
2.	<u>16.1</u>	<u>11.2</u>	<u>180</u>
3.	<u>21</u>	<u>7</u>	<u>147</u>
4.	<u>32.4</u>	<u>9</u>	<u>292</u>
5.	<u>45</u>	<u>14.4</u>	<u>648</u>
6.	<u>27</u>	<u>24</u>	<u>648</u>
7.	<u>31.5</u>	<u>22.4</u>	<u>706</u>
8.	<u>8.5</u>	<u>18</u>	<u>153</u>