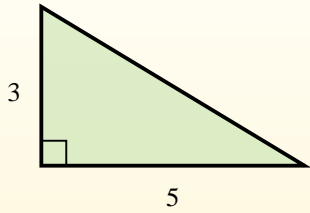


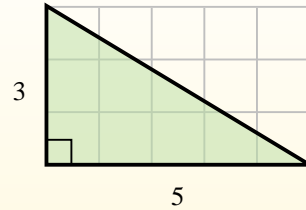


Encuentra el área del triángulo en la cuadrícula (b).

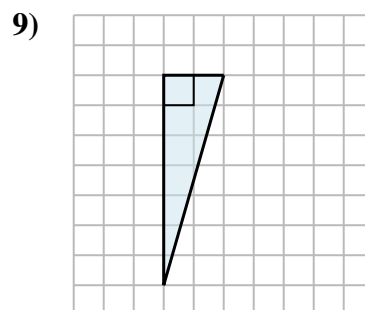
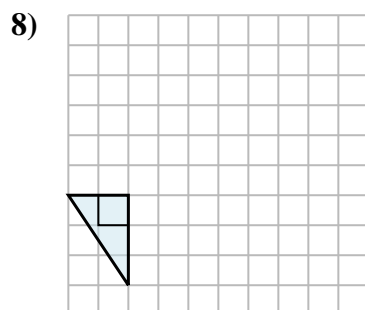
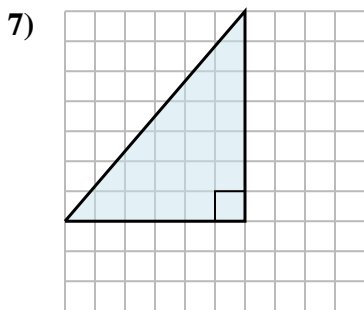
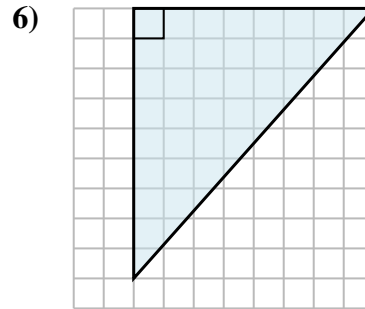
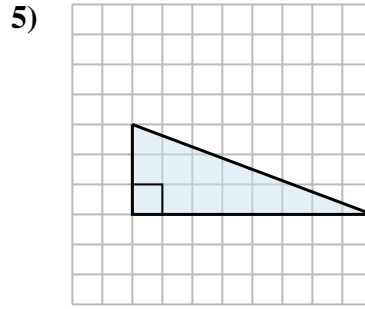
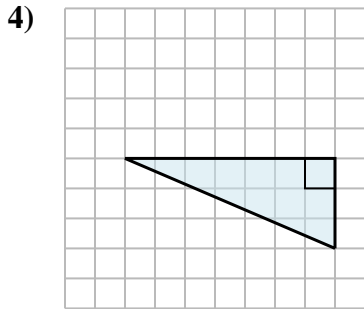
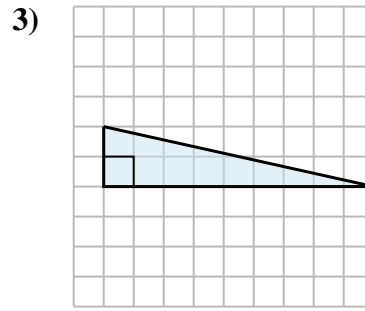
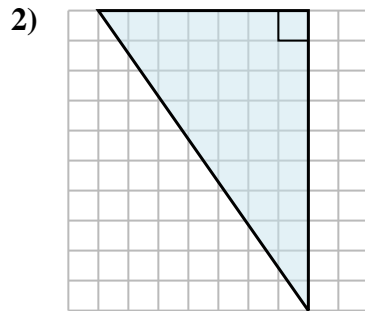
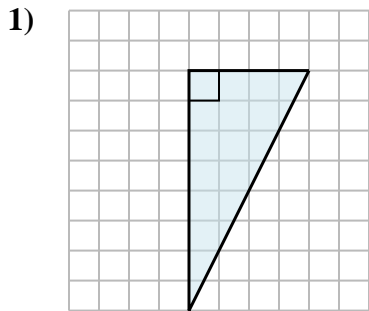
El área de un triángulo recto es la mitad del área del rectángulo que lo rodea.



En este ejemplo, el rectángulo circundante tendría un área de 15 bloques. ( $15 b^2$ ).



La mitad de 15 es 7.5  
Este triángulo recto tiene un área de  $7.5 b^2$ .



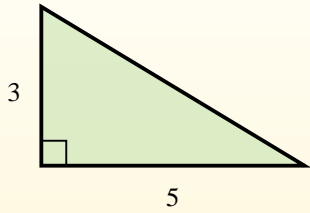
**Respuestas**

1. \_\_\_\_\_
2. \_\_\_\_\_
3. \_\_\_\_\_
4. \_\_\_\_\_
5. \_\_\_\_\_
6. \_\_\_\_\_
7. \_\_\_\_\_
8. \_\_\_\_\_
9. \_\_\_\_\_

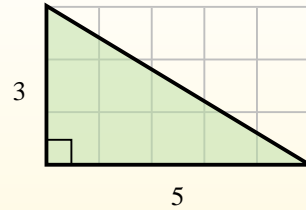


**Encuentra el área del triángulo en la cuadrícula (b).**

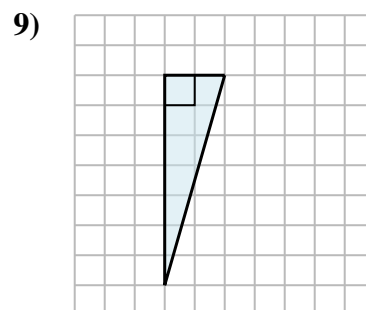
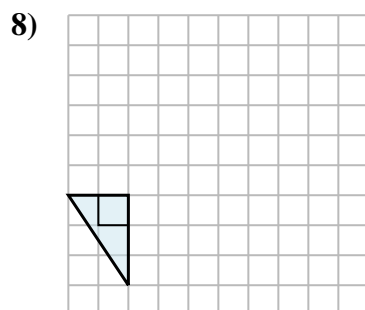
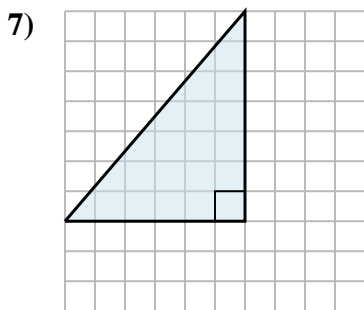
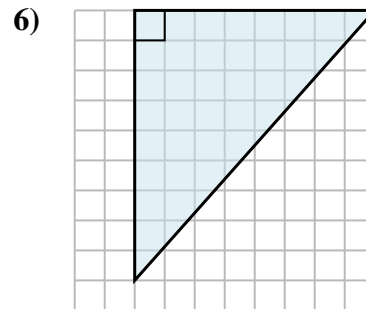
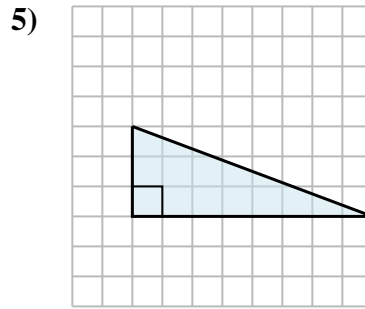
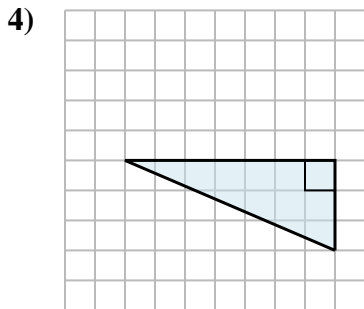
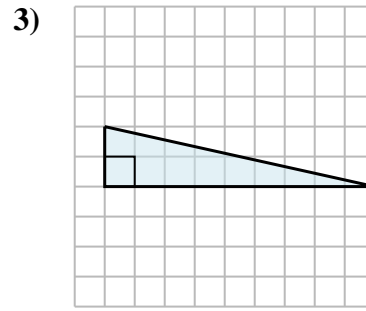
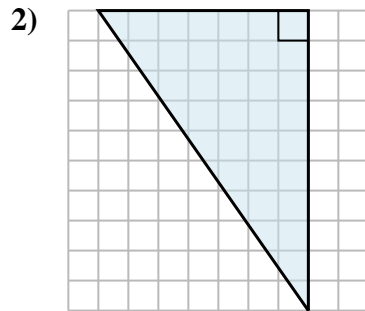
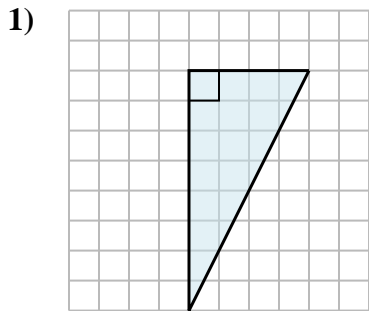
El área de un triángulo recto es la mitad del área del rectángulo que lo rodea.



En este ejemplo, el rectángulo circundante tendría un área de 15 bloques. ( $15 b^2$ ).



La mitad de 15 es 7.5  
Este triángulo recto tiene un área de  $7.5 b^2$ .



**Respuestas**

1.  $16 b^2$
2.  $35 b^2$
3.  $9 b^2$
4.  $10.5 b^2$
5.  $12 b^2$
6.  $36 b^2$
7.  $21 b^2$
8.  $3 b^2$
9.  $7 b^2$