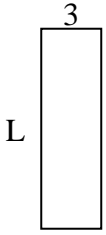




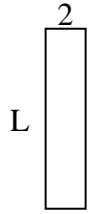
Determina el valor de 'P'.

Respuestas

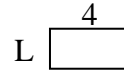
1) Área = $30u^2$



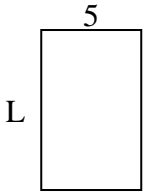
2) Área = $18u^2$



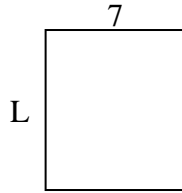
3) Área = $8u^2$



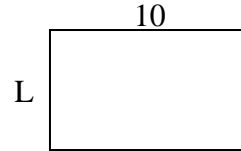
4) Área = $40u^2$



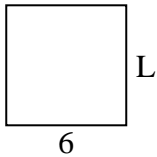
5) Área = $56u^2$



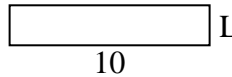
6) Área = $60u^2$



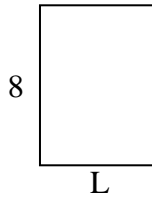
7) Área = $36u^2$



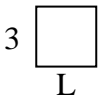
8) Área = $20u^2$



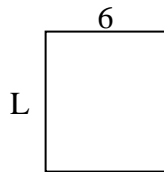
9) Área = $48u^2$



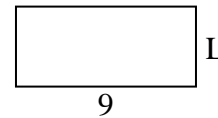
10) Área = $9u^2$




11) Área = $42u^2$



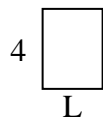
12) Área = $36u^2$



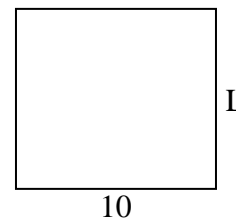
13) Área = $16u^2$



14) Área = $12u^2$



15) Área = $90u^2$

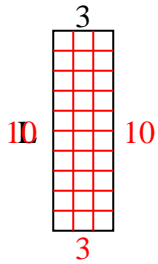


1. _____
2. _____
3. _____
4. _____
5. _____
6. _____
7. _____
8. _____
9. _____
10. _____
11. _____
12. _____
13. _____
14. _____
15. _____

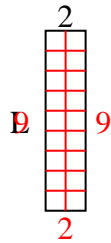


Determina el valor de 'P'.

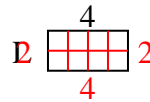
1) Área = $30u^2$



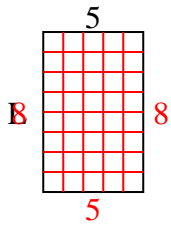
2) Área = $18u^2$



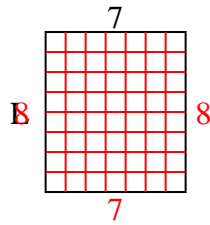
3) Área = $8u^2$



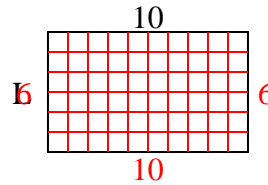
4) Área = $40u^2$



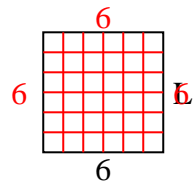
5) Área = $56u^2$



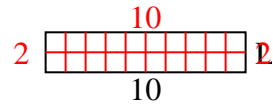
6) Área = $60u^2$



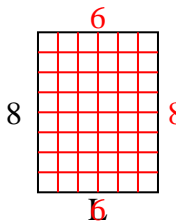
7) Área = $36u^2$



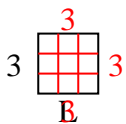
8) Área = $20u^2$



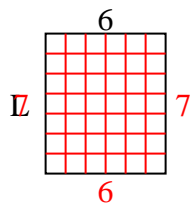
9) Área = $48u^2$



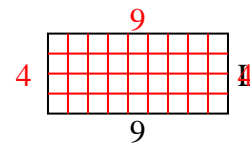
10) Área = $9u^2$



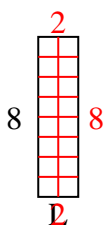
11) Área = $42u^2$



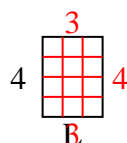
12) Área = $36u^2$



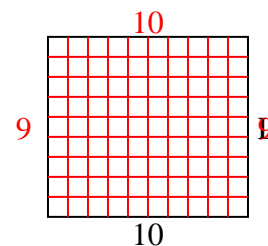
13) Área = $16u^2$



14) Área = $12u^2$



15) Área = $90u^2$



Respuestas

1. 10

2. 9

3. 2

4. 8

5. 8

6. 6

7. 6

8. 2

9. 6

10. 3

11. 7

12. 4

13. 2

14. 3

15. 9