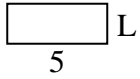


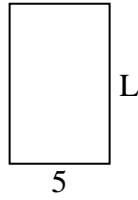


Determina el valor de 'P'.

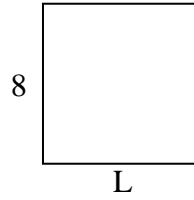
1) Área = $10u^2$



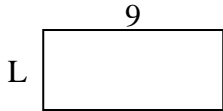
2) Área = $40u^2$




3) Área = $64u^2$



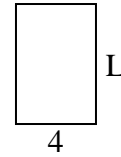
4) Área = $36u^2$



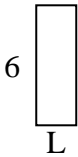
5) Área = $12u^2$




6) Área = $24u^2$



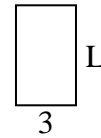
7) Área = $12u^2$



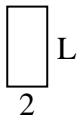
8) Área = $20u^2$



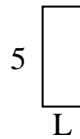
9) Área = $15u^2$



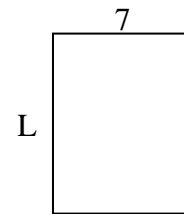
10) Área = $8u^2$



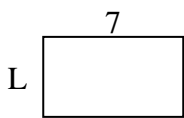
11) Área = $10u^2$



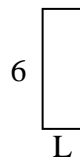
12) Área = $63u^2$



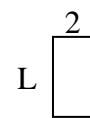
13) Área = $28u^2$



14) Área = $12u^2$



15) Área = $8u^2$



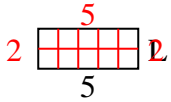
Respuestas

1. _____
2. _____
3. _____
4. _____
5. _____
6. _____
7. _____
8. _____
9. _____
10. _____
11. _____
12. _____
13. _____
14. _____
15. _____

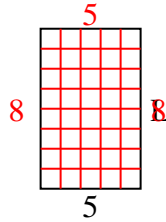


Determina el valor de 'P'.

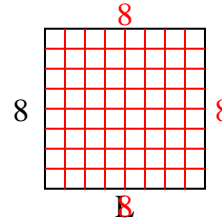
1) Área = $10u^2$



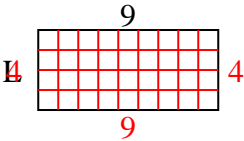
2) Área = $40u^2$



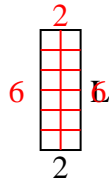
3) Área = $64u^2$



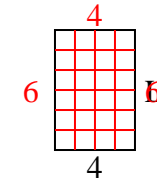
4) Área = $36u^2$



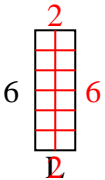
5) Área = $12u^2$



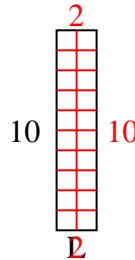
6) Área = $24u^2$



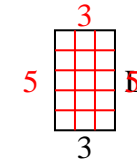
7) Área = $12u^2$



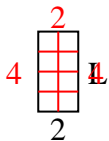
8) Área = $20u^2$



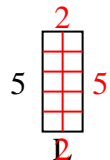
9) Área = $15u^2$



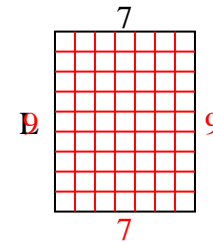
10) Área = $8u^2$



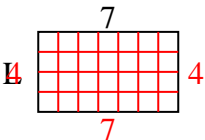
11) Área = $10u^2$



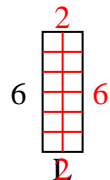
12) Área = $63u^2$



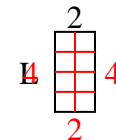
13) Área = $28u^2$



14) Área = $12u^2$



15) Área = $8u^2$



Respuestas

1. 2

2. 8

3. 8

4. 4

5. 6

6. 6

7. 2

8. 2

9. 5

10. 4

11. 2

12. 9

13. 4

14. 2

15. 4