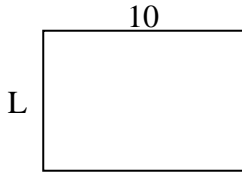


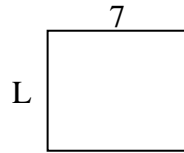


Determina el valor de 'P'.

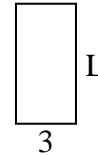
1) Área = $70u^2$



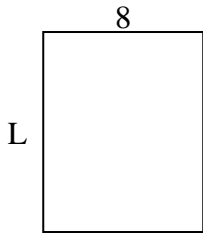
2) Área = $42u^2$



3) Área = $18u^2$



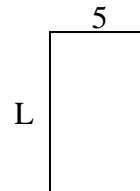
4) Área = $80u^2$



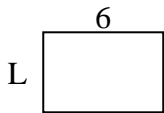
5) Área = $18u^2$



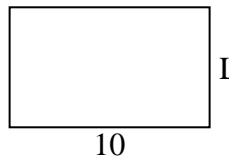
6) Área = $40u^2$



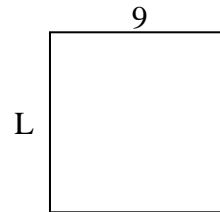
7) Área = $24u^2$



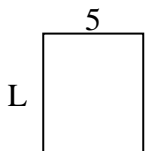
8) Área = $60u^2$



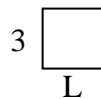
9) Área = $81u^2$



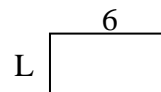
10) Área = $30u^2$



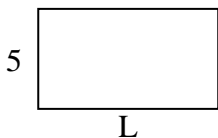
11) Área = $9u^2$



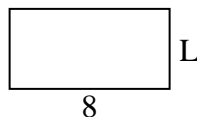
12) Área = $18u^2$



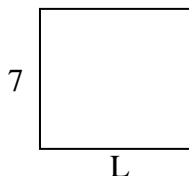
13) Área = $45u^2$



14) Área = $32u^2$



15) Área = $56u^2$



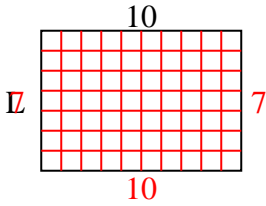
Respuestas

1. _____
2. _____
3. _____
4. _____
5. _____
6. _____
7. _____
8. _____
9. _____
10. _____
11. _____
12. _____
13. _____
14. _____
15. _____

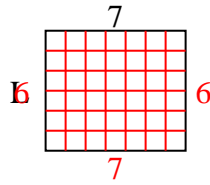


Determina el valor de 'P'.

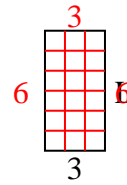
1) Área = $70u^2$



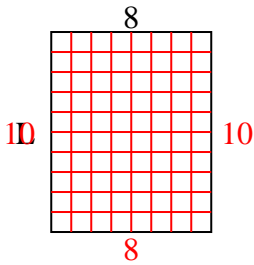
2) Área = $42u^2$



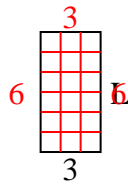
3) Área = $18u^2$



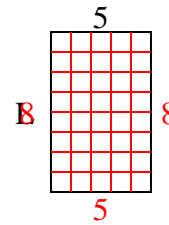
4) Área = $80u^2$



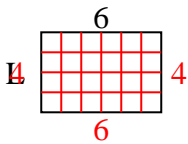
5) Área = $18u^2$



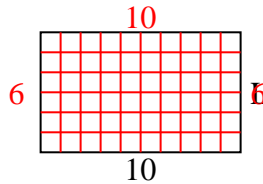
6) Área = $40u^2$



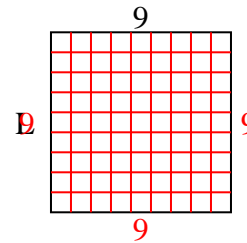
7) Área = $24u^2$



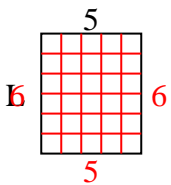
8) Área = $60u^2$



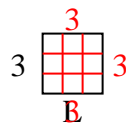
9) Área = $81u^2$



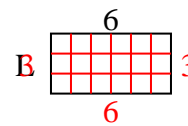
10) Área = $30u^2$



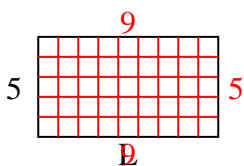
11) Área = $9u^2$



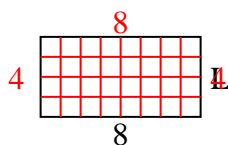
12) Área = $18u^2$



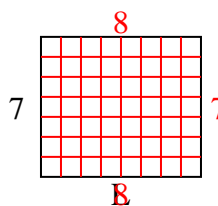
13) Área = $45u^2$



14) Área = $32u^2$



15) Área = $56u^2$



Respuestas

1. 7
2. 6
3. 6
4. 10
5. 6
6. 8
7. 4
8. 6
9. 9
10. 6
11. 3
12. 3
13. 9
14. 4
15. 8