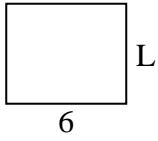




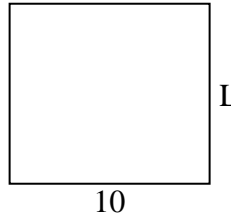
Determina el valor de 'P'.

**Respuestas**

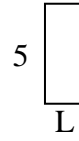
1) Área =  $30u^2$



2) Área =  $90u^2$



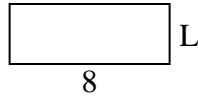
3) Área =  $10u^2$



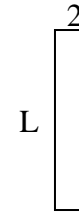
4) Área =  $14u^2$



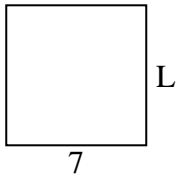
5) Área =  $24u^2$



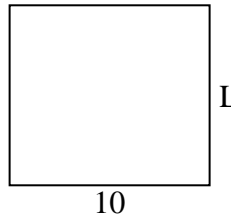
6) Área =  $18u^2$



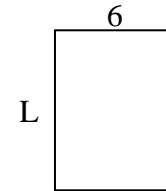
7) Área =  $49u^2$



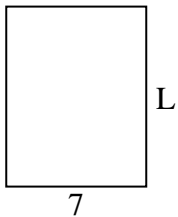
8) Área =  $90u^2$



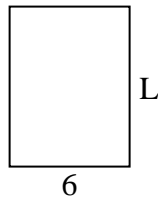
9) Área =  $48u^2$



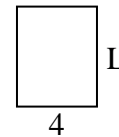
10) Área =  $63u^2$



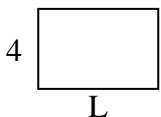
11) Área =  $48u^2$



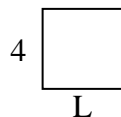
12) Área =  $20u^2$



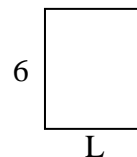
13) Área =  $24u^2$



14) Área =  $16u^2$



15) Área =  $30u^2$

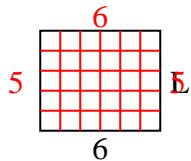


1. \_\_\_\_\_
2. \_\_\_\_\_
3. \_\_\_\_\_
4. \_\_\_\_\_
5. \_\_\_\_\_
6. \_\_\_\_\_
7. \_\_\_\_\_
8. \_\_\_\_\_
9. \_\_\_\_\_
10. \_\_\_\_\_
11. \_\_\_\_\_
12. \_\_\_\_\_
13. \_\_\_\_\_
14. \_\_\_\_\_
15. \_\_\_\_\_

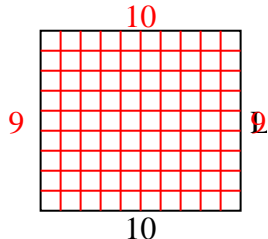


Determina el valor de 'P'.

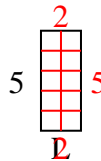
1) Área =  $30u^2$



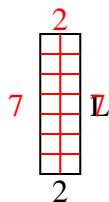
2) Área =  $90u^2$



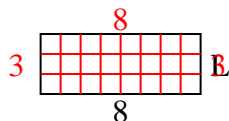
3) Área =  $10u^2$



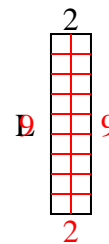
4) Área =  $14u^2$



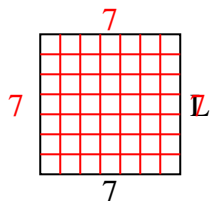
5) Área =  $24u^2$



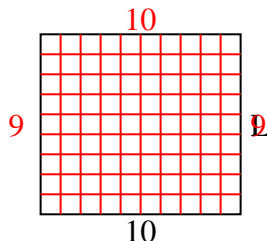
6) Área =  $18u^2$



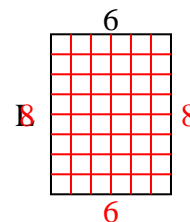
7) Área =  $49u^2$



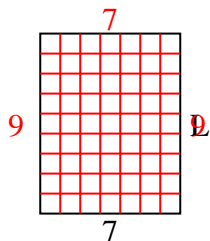
8) Área =  $90u^2$



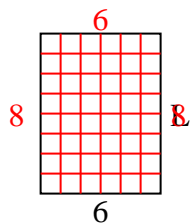
9) Área =  $48u^2$



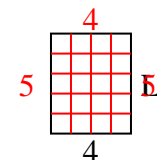
10) Área =  $63u^2$



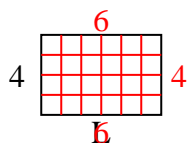
11) Área =  $48u^2$



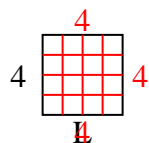
12) Área =  $20u^2$



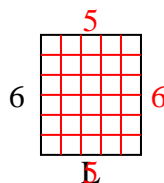
13) Área =  $24u^2$



14) Área =  $16u^2$



15) Área =  $30u^2$



**Respuestas**

1. 5
2. 9
3. 2
4. 7
5. 3
6. 9
7. 7
8. 9
9. 8
10. 9
11. 8
12. 5
13. 6
14. 4
15. 5