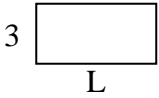


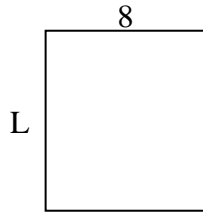


Determina el valor de 'P'.

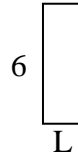
1) Área =  $18u^2$



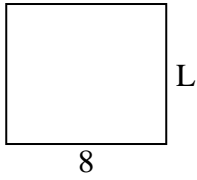
2) Área =  $72u^2$



3) Área =  $12u^2$



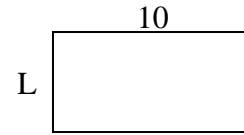
4) Área =  $56u^2$



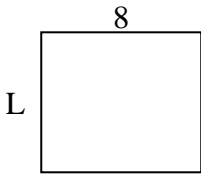
5) Área =  $6u^2$



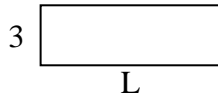
6) Área =  $50u^2$



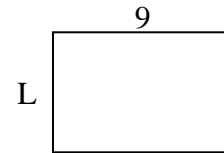
7) Área =  $56u^2$



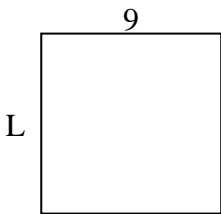
8) Área =  $27u^2$



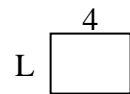
9) Área =  $54u^2$



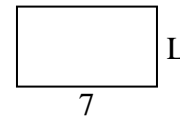
10) Área =  $81u^2$



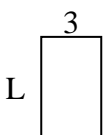
11) Área =  $12u^2$




12) Área =  $28u^2$



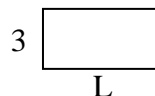
13) Área =  $15u^2$



14) Área =  $20u^2$



15) Área =  $18u^2$



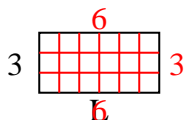
**Respuestas**

1. \_\_\_\_\_
2. \_\_\_\_\_
3. \_\_\_\_\_
4. \_\_\_\_\_
5. \_\_\_\_\_
6. \_\_\_\_\_
7. \_\_\_\_\_
8. \_\_\_\_\_
9. \_\_\_\_\_
10. \_\_\_\_\_
11. \_\_\_\_\_
12. \_\_\_\_\_
13. \_\_\_\_\_
14. \_\_\_\_\_
15. \_\_\_\_\_

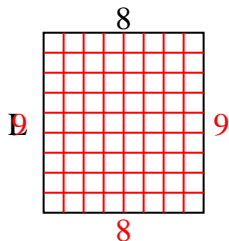


Determina el valor de 'P'.

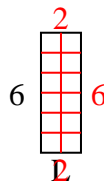
1) Área =  $18u^2$



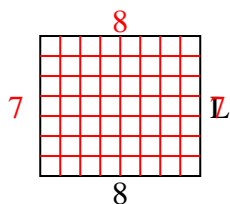
2) Área =  $72u^2$



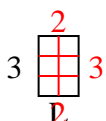
3) Área =  $12u^2$



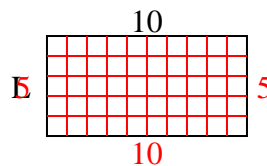
4) Área =  $56u^2$



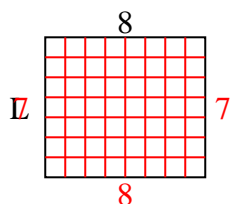
5) Área =  $6u^2$



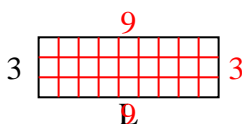
6) Área =  $50u^2$



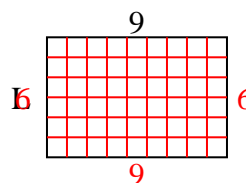
7) Área =  $56u^2$



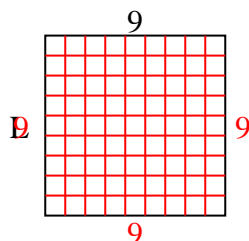
8) Área =  $27u^2$



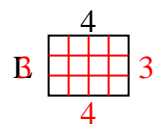
9) Área =  $54u^2$



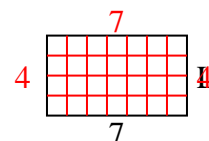
10) Área =  $81u^2$



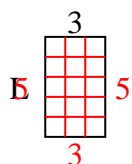
11) Área =  $12u^2$



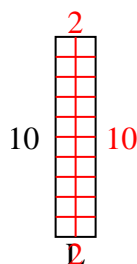
12) Área =  $28u^2$



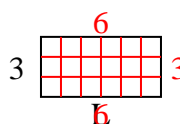
13) Área =  $15u^2$



14) Área =  $20u^2$



15) Área =  $18u^2$



**Respuestas**

1. 6
2. 9
3. 2
4. 7
5. 2
6. 5
7. 7
8. 9
9. 6
10. 9
11. 3
12. 4
13. 5
14. 2
15. 6